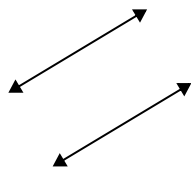




Definisci "parallele", "perp"(perpendicolare) o "inter"(intersezione) per descrivere le linee.

Risposte

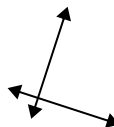
1)



2)



3)



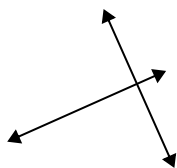
1. _____

2. _____

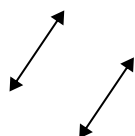
3. _____

4. _____

4)



5)



6)



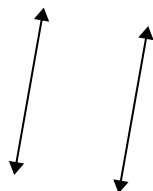
5. _____

6. _____

7. _____

8. _____

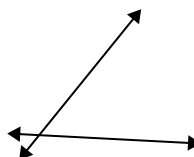
7)



8)



9)

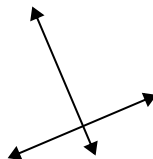


9. _____

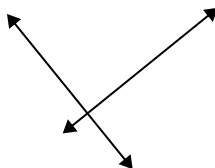
10. _____

11. _____

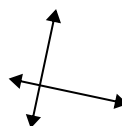
10)



11)



12)



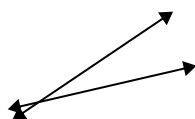
12. _____

13. _____

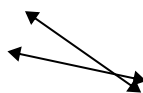
14. _____

15. _____

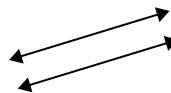
13)



14)

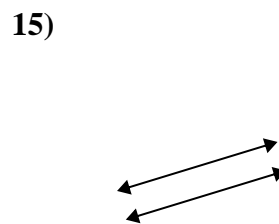
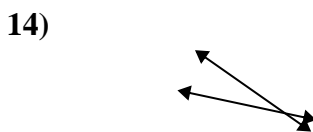
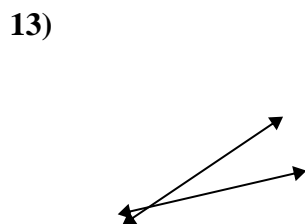
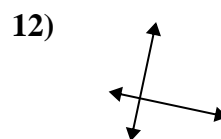
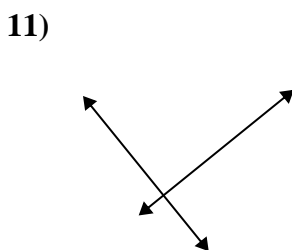
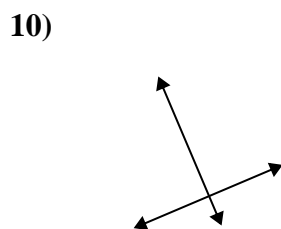
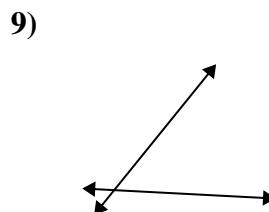
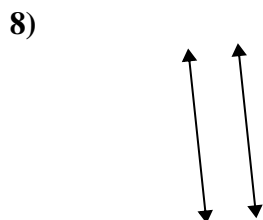
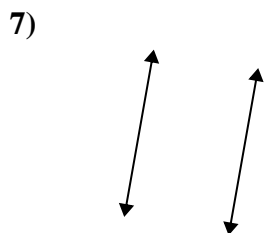
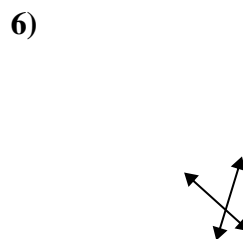
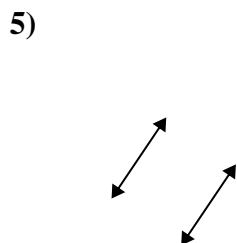
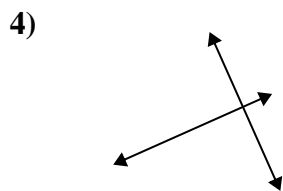
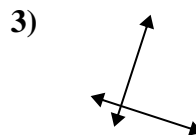
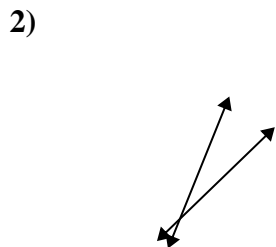
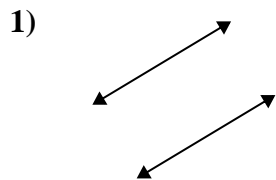


15)





Definisci "parallele", "perp"(perpendicolare) o "inter"(intersezione) per descrivere le linee.



Risposte

1. parallel

2. inter

3. perp & inter

4. perp & inter

5. parallel

6. inter

7. parallel

8. parallel

9. inter

10. perp & inter

11. perp & inter

12. perp & inter

13. inter

14. inter

15. parallel