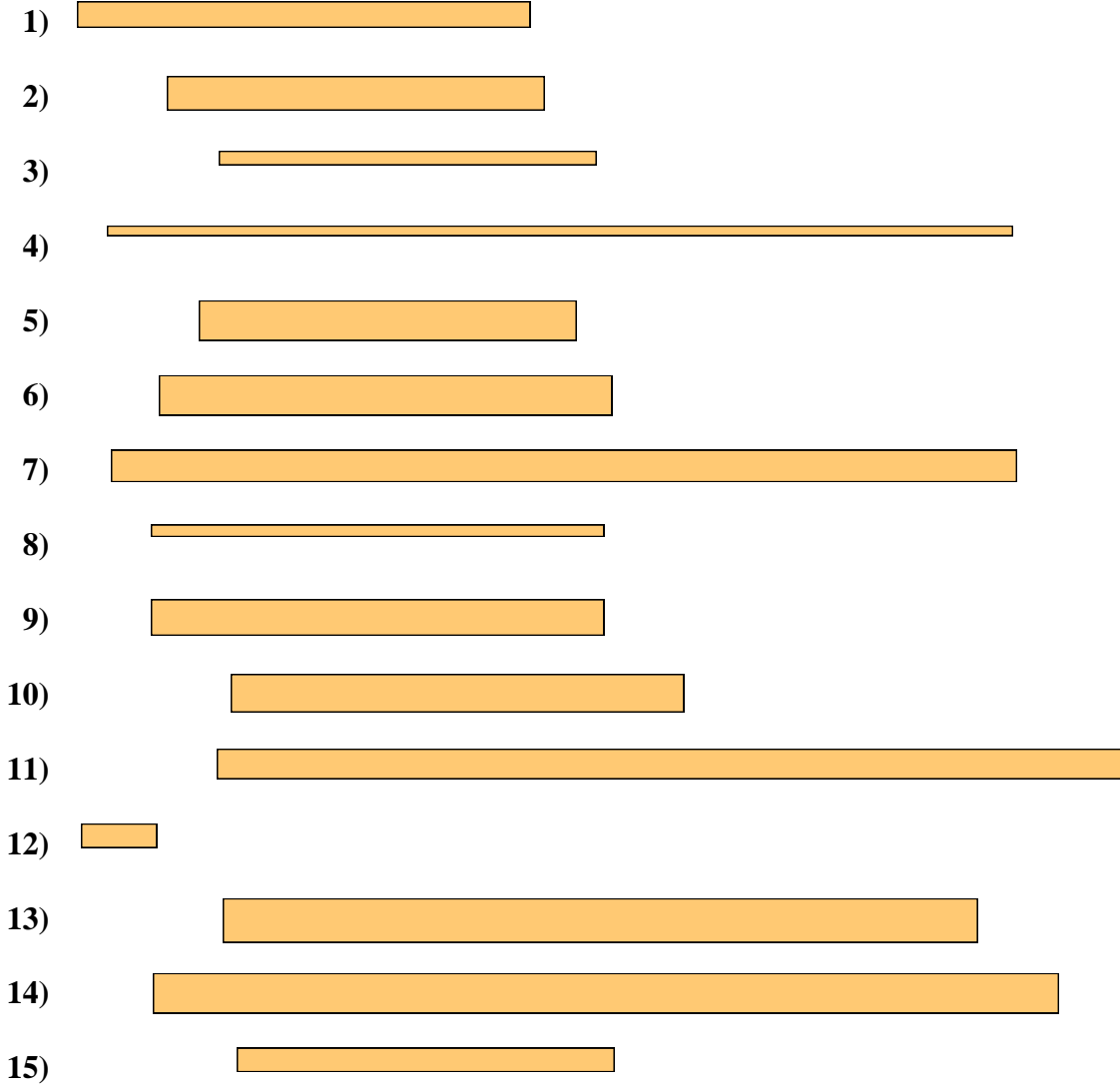




Misura le barre qui sotto (in centimetri) e crea un grafico a linee basandoti sulle informazioni



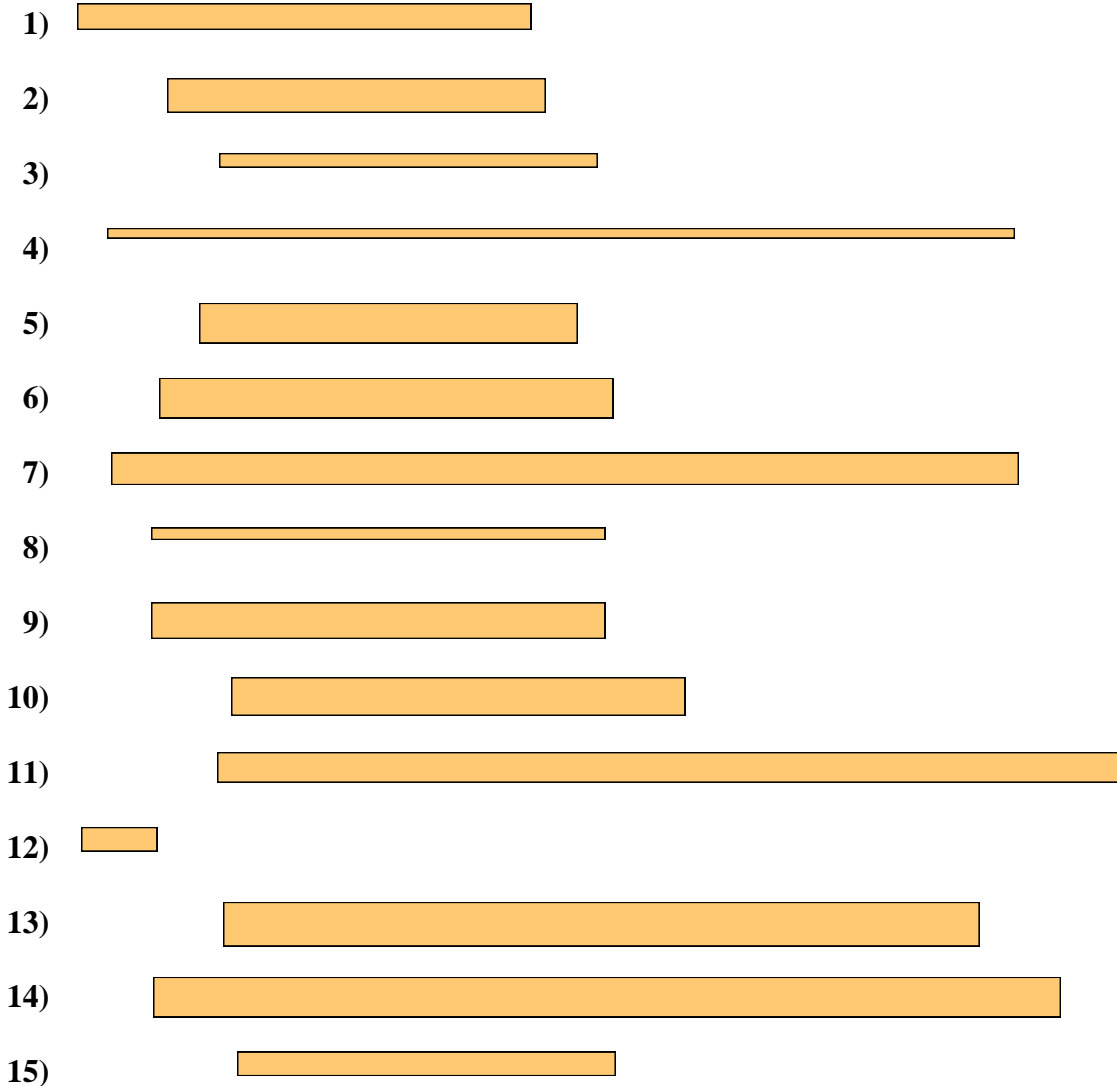
Line Plot

Risposte

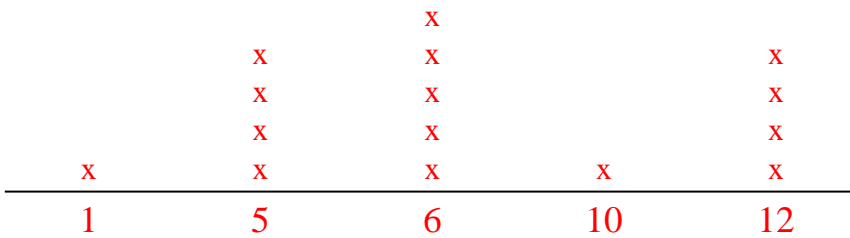
- 1. _____
- 2. _____
- 3. _____
- 4. _____
- 5. _____
- 6. _____
- 7. _____
- 8. _____
- 9. _____
- 10. _____
- 11. _____
- 12. _____
- 13. _____
- 14. _____
- 15. _____



Misura le barre qui sotto (in centimetri) e crea un grafico a linee basandoti sulle informazioni



Line Plot

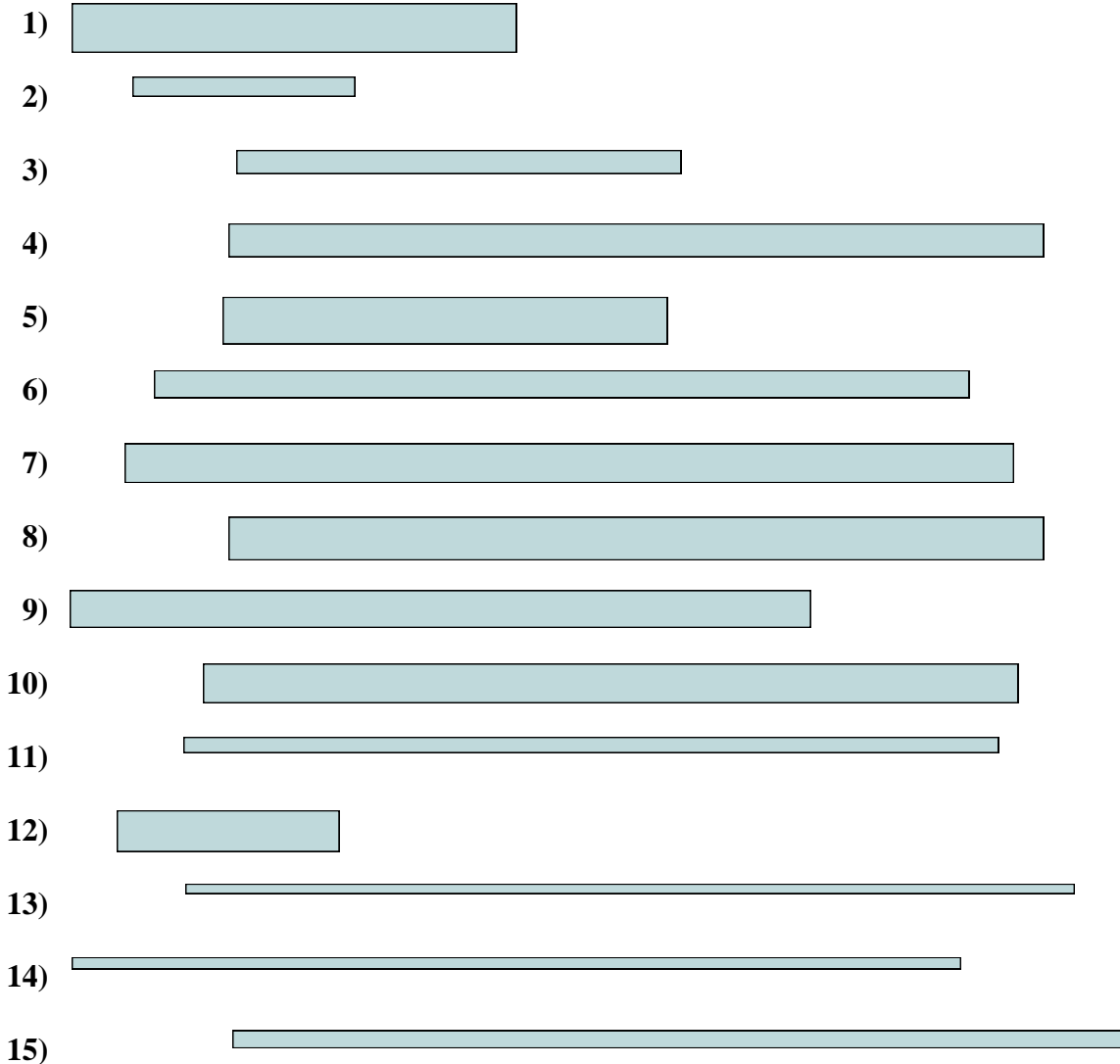


Risposte

- 1. 6
- 2. 5
- 3. 5
- 4. 12
- 5. 5
- 6. 6
- 7. 12
- 8. 6
- 9. 6
- 10. 6
- 11. 12
- 12. 1
- 13. 10
- 14. 12
- 15. 5



Misura le barre qui sotto (in centimetri) e crea un grafico a linee basandoti sulle informazioni



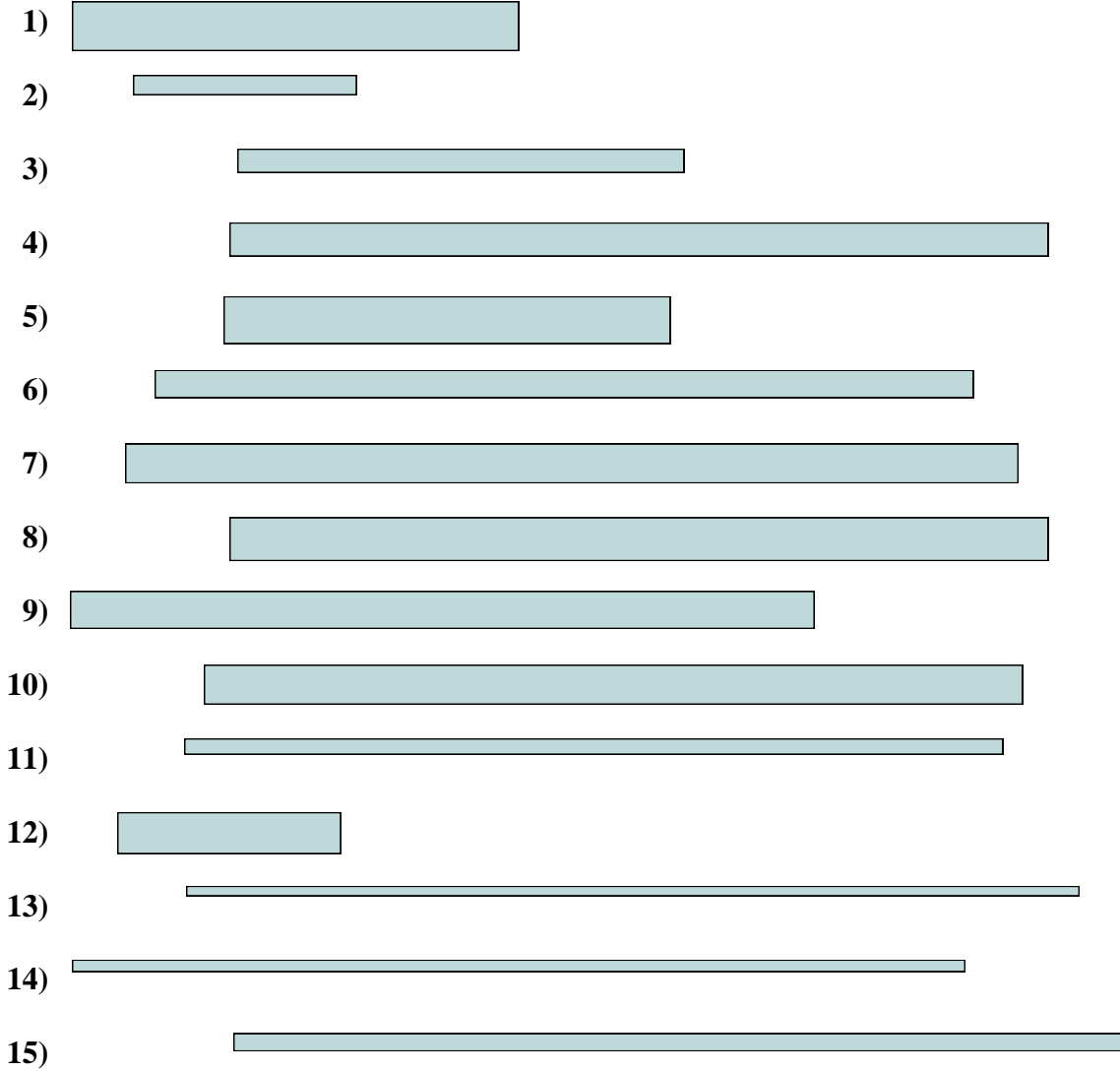
Line Plot

Risposte

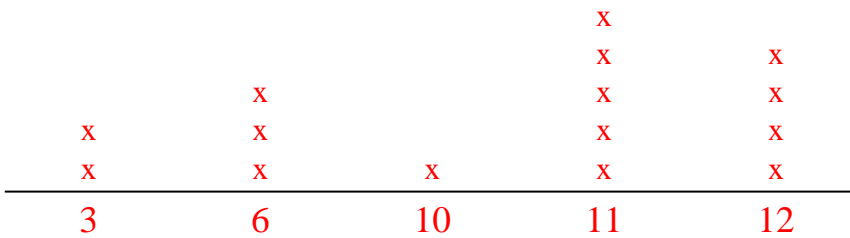
- 1. _____
- 2. _____
- 3. _____
- 4. _____
- 5. _____
- 6. _____
- 7. _____
- 8. _____
- 9. _____
- 10. _____
- 11. _____
- 12. _____
- 13. _____
- 14. _____
- 15. _____



Misura le barre qui sotto (in centimetri) e crea un grafico a linee basandoti sulle informazioni



Line Plot


















Risposte

- 1. 6
- 2. 3
- 3. 6
- 4. 11
- 5. 6
- 6. 11
- 7. 12
- 8. 11
- 9. 10
- 10. 11
- 11. 11
- 12. 3
- 13. 12
- 14. 12
- 15. 12



Misura le barre qui sotto (in centimetri) e crea un grafico a linee basandoti sulle informazioni

- 1) 
- 2) 
- 3) 
- 4) 
- 5) 
- 6) 
- 7) 
- 8) 
- 9) 
- 10) 
- 11) 
- 12) 
- 13) 
- 14) 
- 15) 

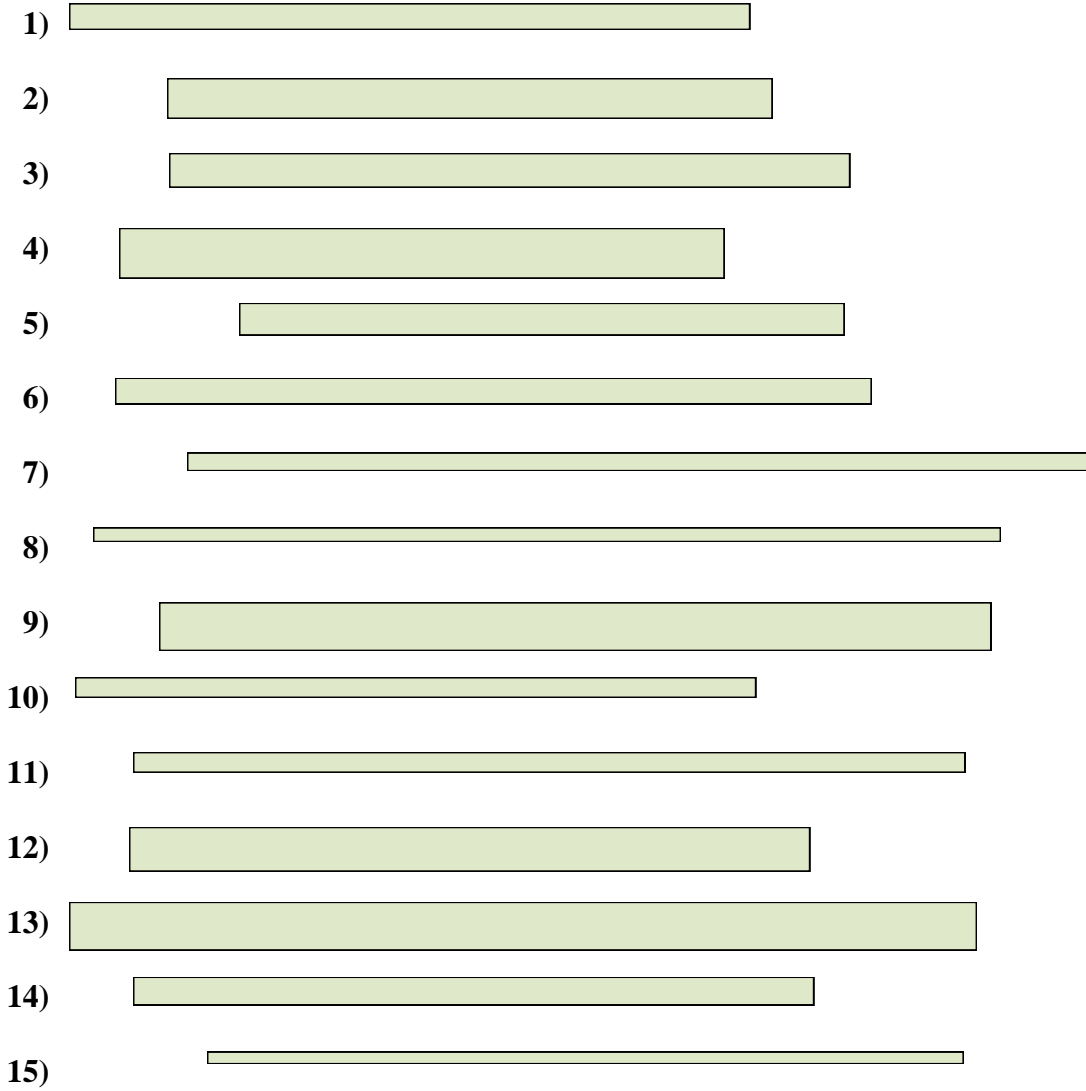
Line Plot

Risposte

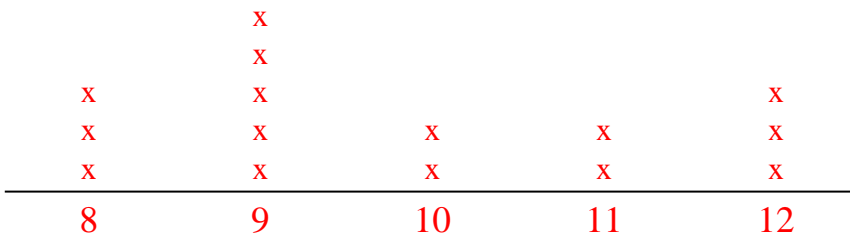
- 1. _____
- 2. _____
- 3. _____
- 4. _____
- 5. _____
- 6. _____
- 7. _____
- 8. _____
- 9. _____
- 10. _____
- 11. _____
- 12. _____
- 13. _____
- 14. _____
- 15. _____



Misura le barre qui sotto (in centimetri) e crea un grafico a linee basandoti sulle informazioni



Line Plot


















Risposte

- 1. 9
- 2. 8
- 3. 9
- 4. 8
- 5. 8
- 6. 10
- 7. 12
- 8. 12
- 9. 11
- 10. 9
- 11. 11
- 12. 9
- 13. 12
- 14. 9
- 15. 10



Misura le barre qui sotto (in centimetri) e crea un grafico a linee basandoti sulle informazioni

- 1) 
- 2) 
- 3) 
- 4) 
- 5) 
- 6) 
- 7) 
- 8) 
- 9) 
- 10) 
- 11) 
- 12) 
- 13) 
- 14) 
- 15) 

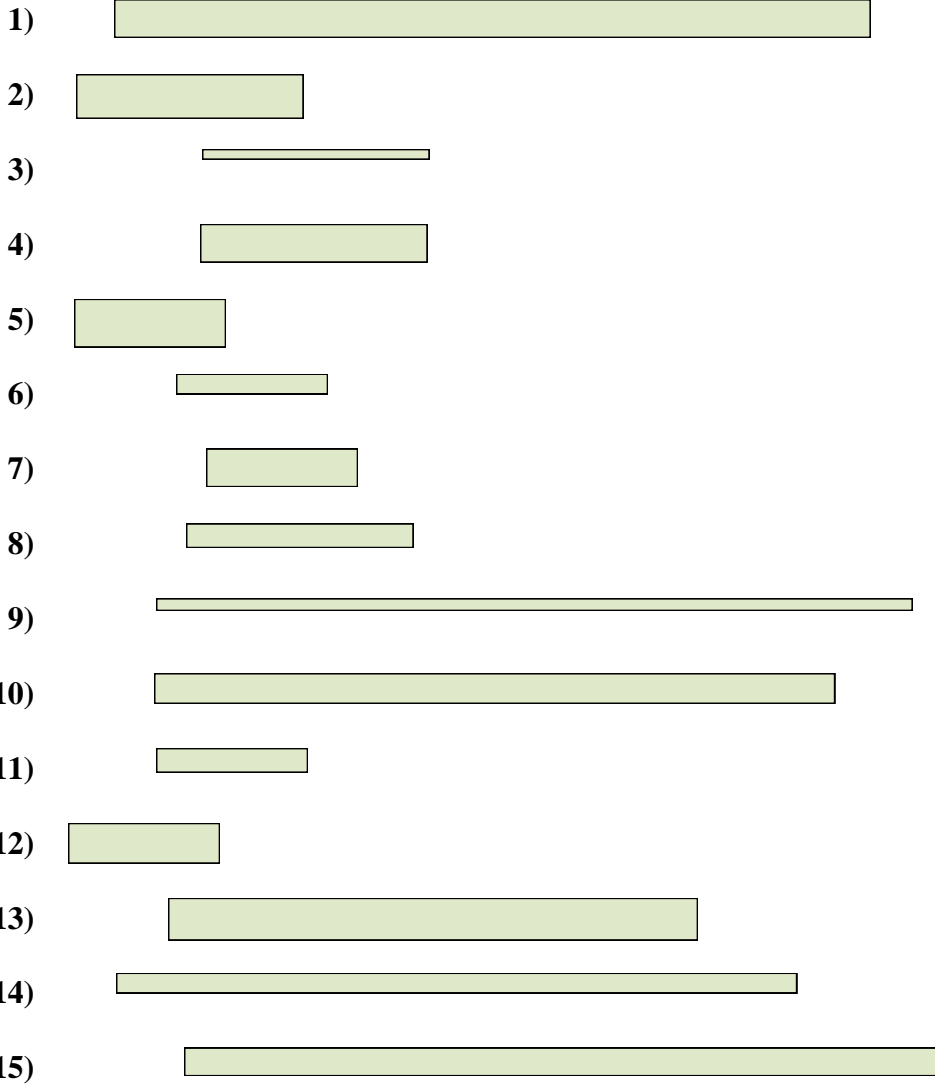
Line Plot

Risposte

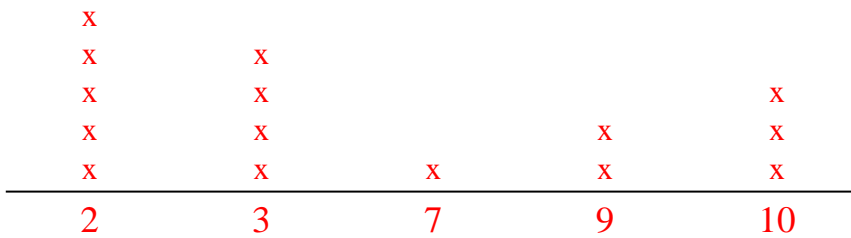
- 1. _____
- 2. _____
- 3. _____
- 4. _____
- 5. _____
- 6. _____
- 7. _____
- 8. _____
- 9. _____
- 10. _____
- 11. _____
- 12. _____
- 13. _____
- 14. _____
- 15. _____



Misura le barre qui sotto (in centimetri) e crea un grafico a linee basandoti sulle informazioni



Line Plot

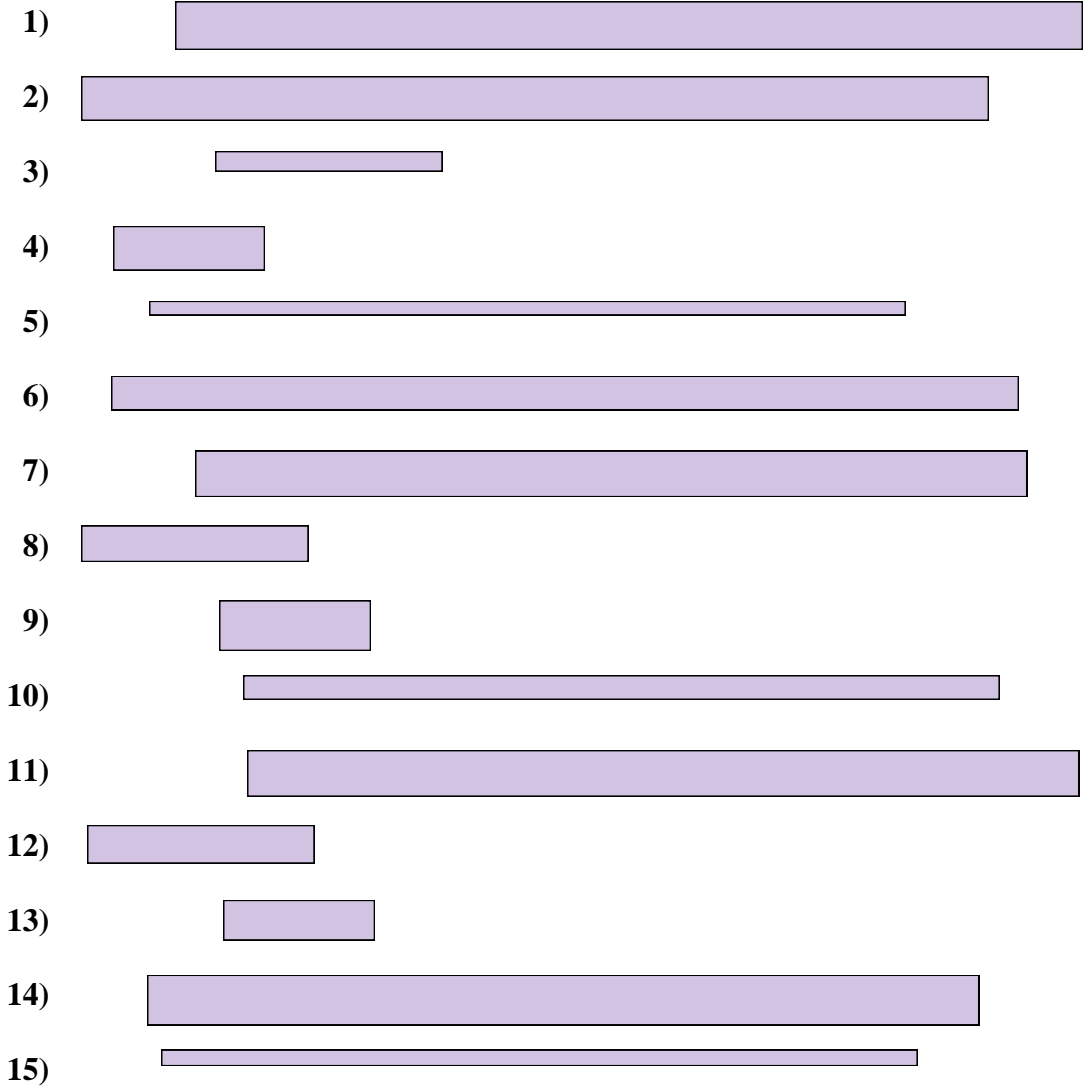


Risposte

- 1. 10
- 2. 3
- 3. 3
- 4. 3
- 5. 2
- 6. 2
- 7. 2
- 8. 3
- 9. 10
- 10. 9
- 11. 2
- 12. 2
- 13. 7
- 14. 9
- 15. 10



Misura le barre qui sotto (in centimetri) e crea un grafico a linee basandoti sulle informazioni



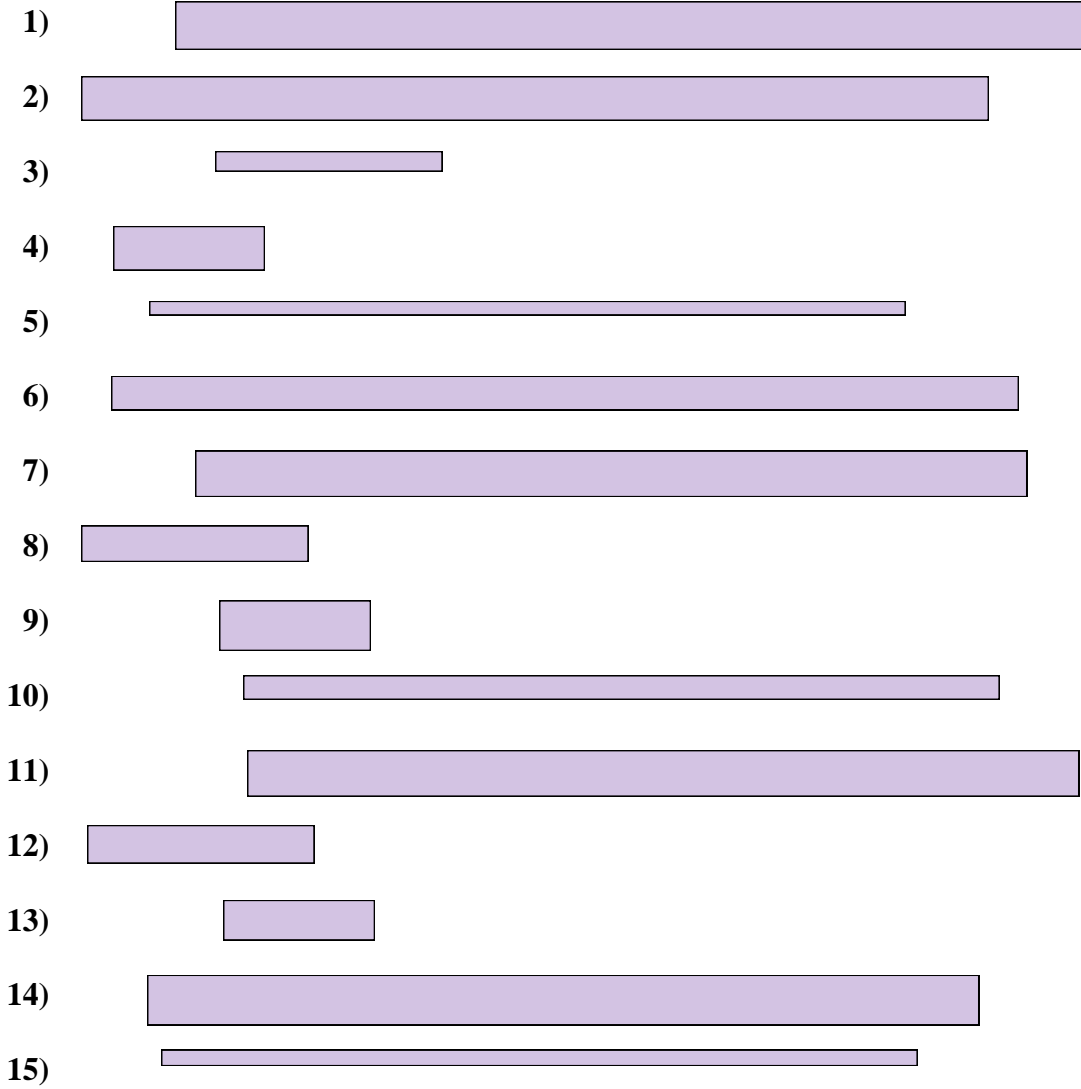
Line Plot

Risposte

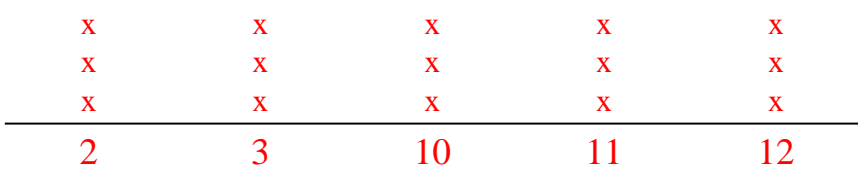
- 1. _____
- 2. _____
- 3. _____
- 4. _____
- 5. _____
- 6. _____
- 7. _____
- 8. _____
- 9. _____
- 10. _____
- 11. _____
- 12. _____
- 13. _____
- 14. _____
- 15. _____



Misura le barre qui sotto (in centimetri) e crea un grafico a linee basandoti sulle informazioni



Line Plot

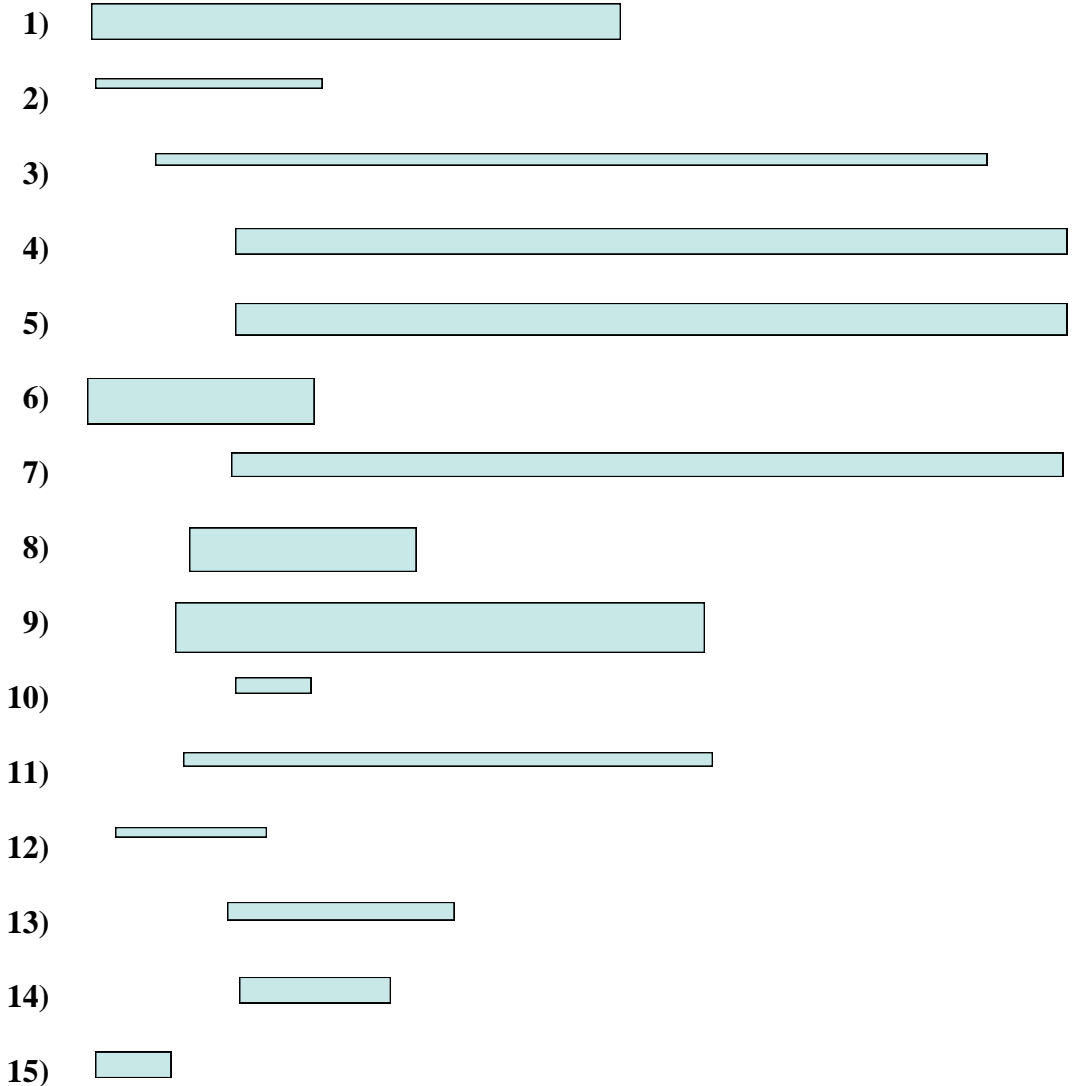


Risposte

- 1. 12
- 2. 12
- 3. 3
- 4. 2
- 5. 10
- 6. 12
- 7. 11
- 8. 3
- 9. 2
- 10. 10
- 11. 11
- 12. 3
- 13. 2
- 14. 11
- 15. 10



Misura le barre qui sotto (in centimetri) e crea un grafico a linee basandoti sulle informazioni



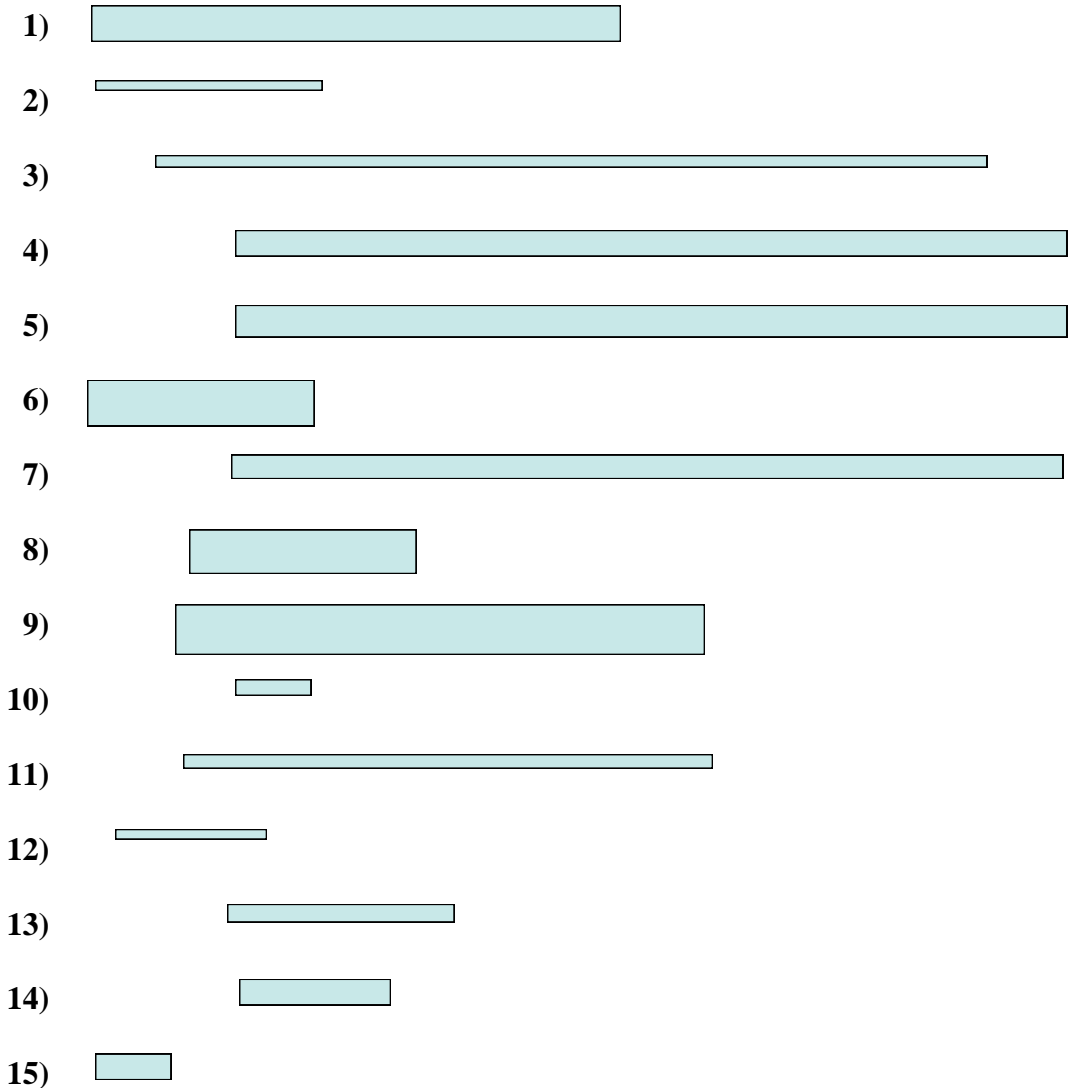
Line Plot

Risposte

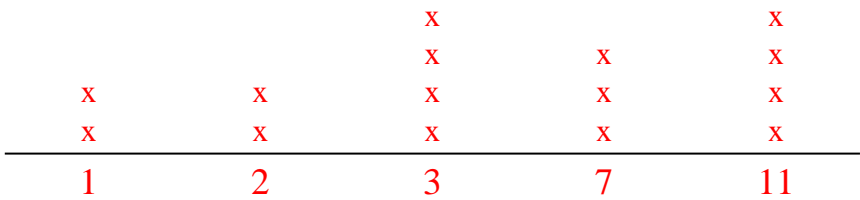
- 1. _____
- 2. _____
- 3. _____
- 4. _____
- 5. _____
- 6. _____
- 7. _____
- 8. _____
- 9. _____
- 10. _____
- 11. _____
- 12. _____
- 13. _____
- 14. _____
- 15. _____



Misura le barre qui sotto (in centimetri) e crea un grafico a linee basandoti sulle informazioni



Line Plot




Risposte

- 1. 7
- 2. 3
- 3. 11
- 4. 11
- 5. 11
- 6. 3
- 7. 11
- 8. 3
- 9. 7
- 10. 1
- 11. 7
- 12. 2
- 13. 3
- 14. 2
- 15. 1



Misura le barre qui sotto (in centimetri) e crea un grafico a linee basandoti sulle informazioni



Line Plot

Risposte

1. _____

2. _____

3. _____

4. _____

5. _____

6. _____

7. _____

8. _____

9. _____

10. _____

11. _____

12. _____

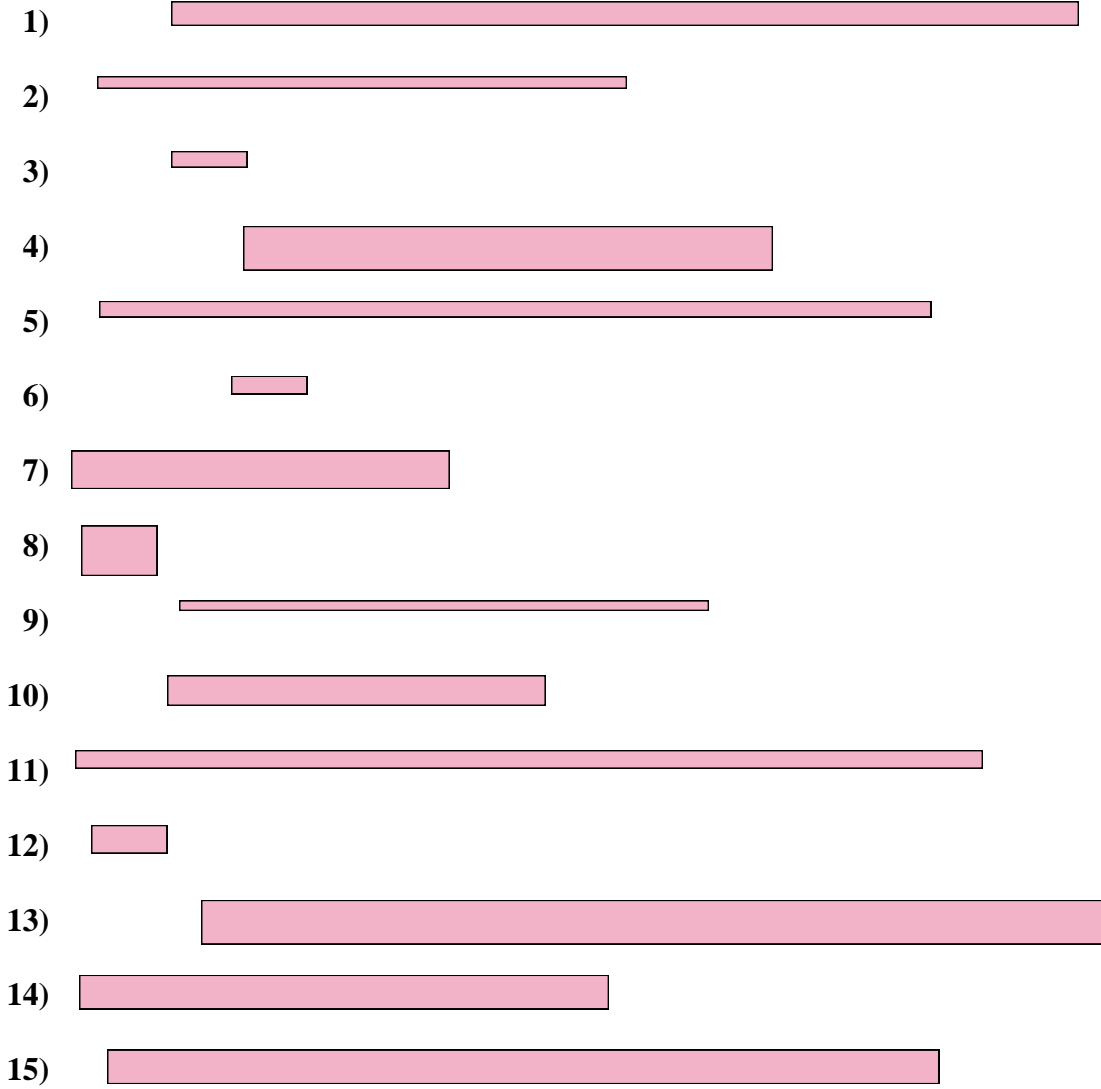
13. _____

14. _____

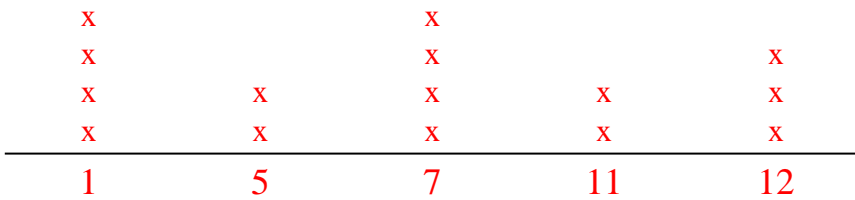
15. _____



Misura le barre qui sotto (in centimetri) e crea un grafico a linee basandoti sulle informazioni



Line Plot


















Risposte

- 1. 12
- 2. 7
- 3. 1
- 4. 7
- 5. 11
- 6. 1
- 7. 5
- 8. 1
- 9. 7
- 10. 5
- 11. 12
- 12. 1
- 13. 12
- 14. 7
- 15. 11



Misura le barre qui sotto (in centimetri) e crea un grafico a linee basandoti sulle informazioni

Risposte

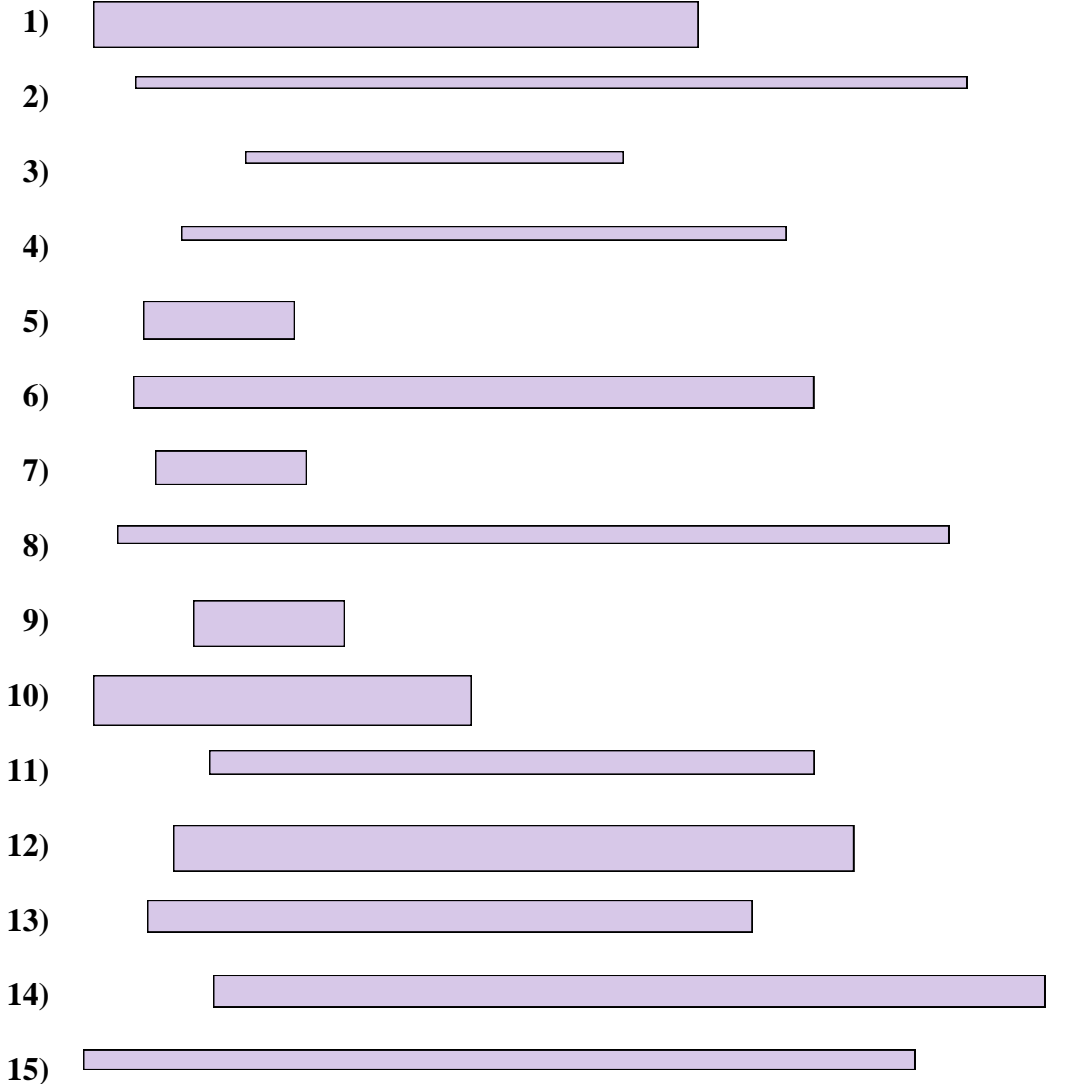
- 1) 
- 2) 
- 3) 
- 4) 
- 5) 
- 6) 
- 7) 
- 8) 
- 9) 
- 10) 
- 11) 
- 12) 
- 13) 
- 14) 
- 15) 

- 1. _____
- 2. _____
- 3. _____
- 4. _____
- 5. _____
- 6. _____
- 7. _____
- 8. _____
- 9. _____
- 10. _____
- 11. _____
- 12. _____
- 13. _____
- 14. _____
- 15. _____

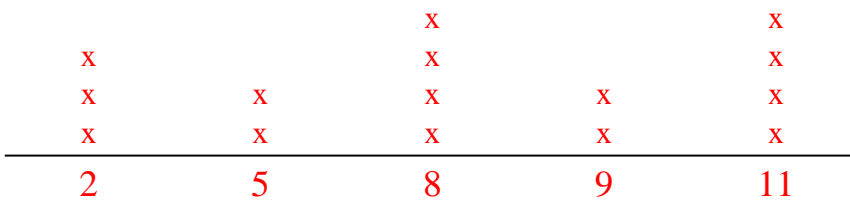
Line Plot



Misura le barre qui sotto (in centimetri) e crea un grafico a linee basandoti sulle informazioni



Line Plot



Risposte

- 1. 8
- 2. 11
- 3. 5
- 4. 8
- 5. 2
- 6. 9
- 7. 2
- 8. 11
- 9. 2
- 10. 5
- 11. 8
- 12. 9
- 13. 8
- 14. 11
- 15. 11



Misura le barre qui sotto (in centimetri) e crea un grafico a linee basandoti sulle informazioni



Line Plot

Risposte

1. _____

2. _____

3. _____

4. _____

5. _____

6. _____

7. _____

8. _____

9. _____

10. _____

11. _____

12. _____

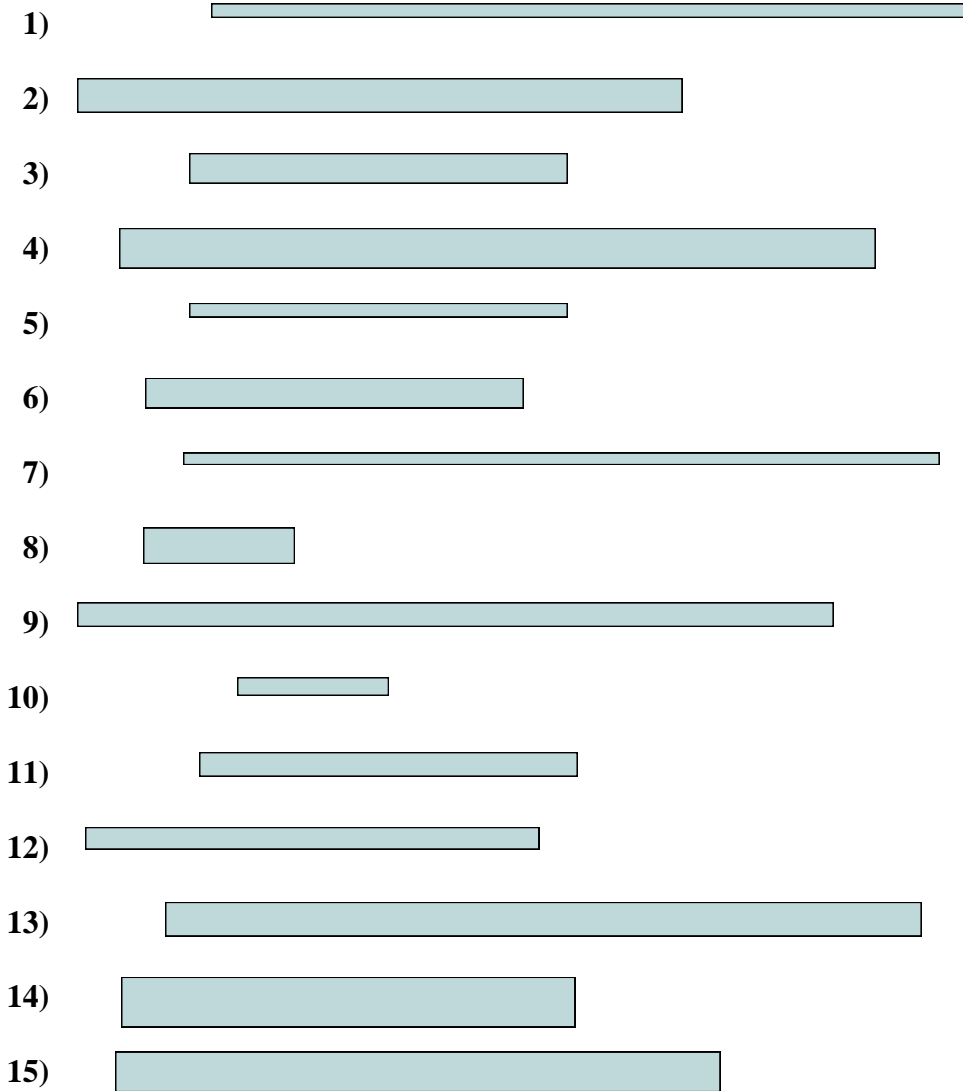
13. _____

14. _____

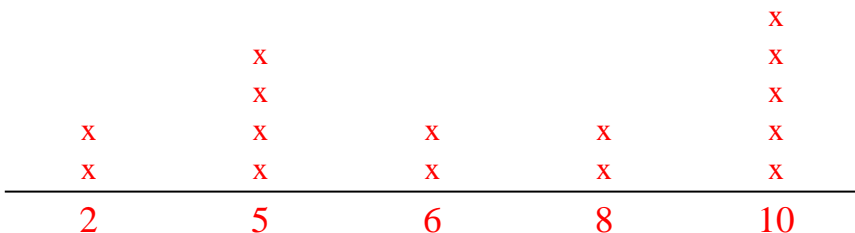
15. _____



Misura le barre qui sotto (in centimetri) e crea un grafico a linee basandoti sulle informazioni



Line Plot



Risposte

- 1. 10
- 2. 8
- 3. 5
- 4. 10
- 5. 5
- 6. 5
- 7. 10
- 8. 2
- 9. 10
- 10. 2
- 11. 5
- 12. 6
- 13. 10
- 14. 6
- 15. 8



Misura le barre qui sotto (in centimetri) e crea un grafico a linee basandoti sulle informazioni

1)



2)



3)



4)



5)



6)



7)



8)



9)



10)



11)



12)



13)



14)



15)



Line Plot

Risposte

1. _____

2. _____

3. _____

4. _____

5. _____

6. _____

7. _____

8. _____

9. _____

10. _____

11. _____

12. _____


13. _____

14. _____

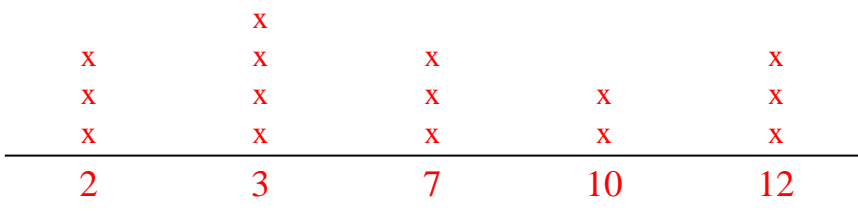
15. _____



Misura le barre qui sotto (in centimetri) e crea un grafico a linee basandoti sulle informazioni



Line Plot



Risposte

- 1. 3
- 2. 2
- 3. 10
- 4. 12
- 5. 12
- 6. 7
- 7. 7
- 8. 2
- 9. 7
- 10. 2
- 11. 10
- 12. 12
- 13. 3
- 14. 3
- 15. 3