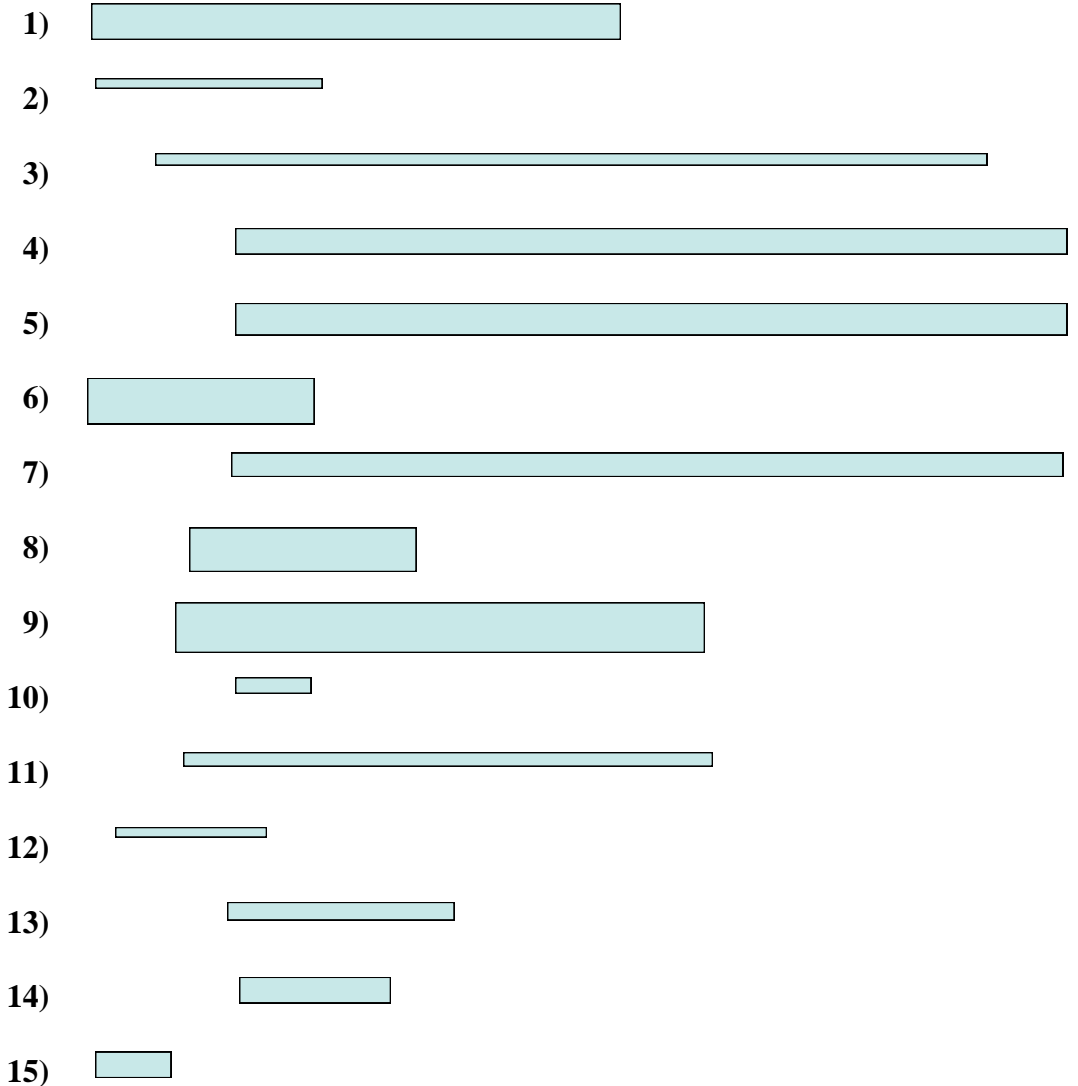




Misura le barre qui sotto (in centimetri) e crea un grafico a linee basandoti sulle informazioni



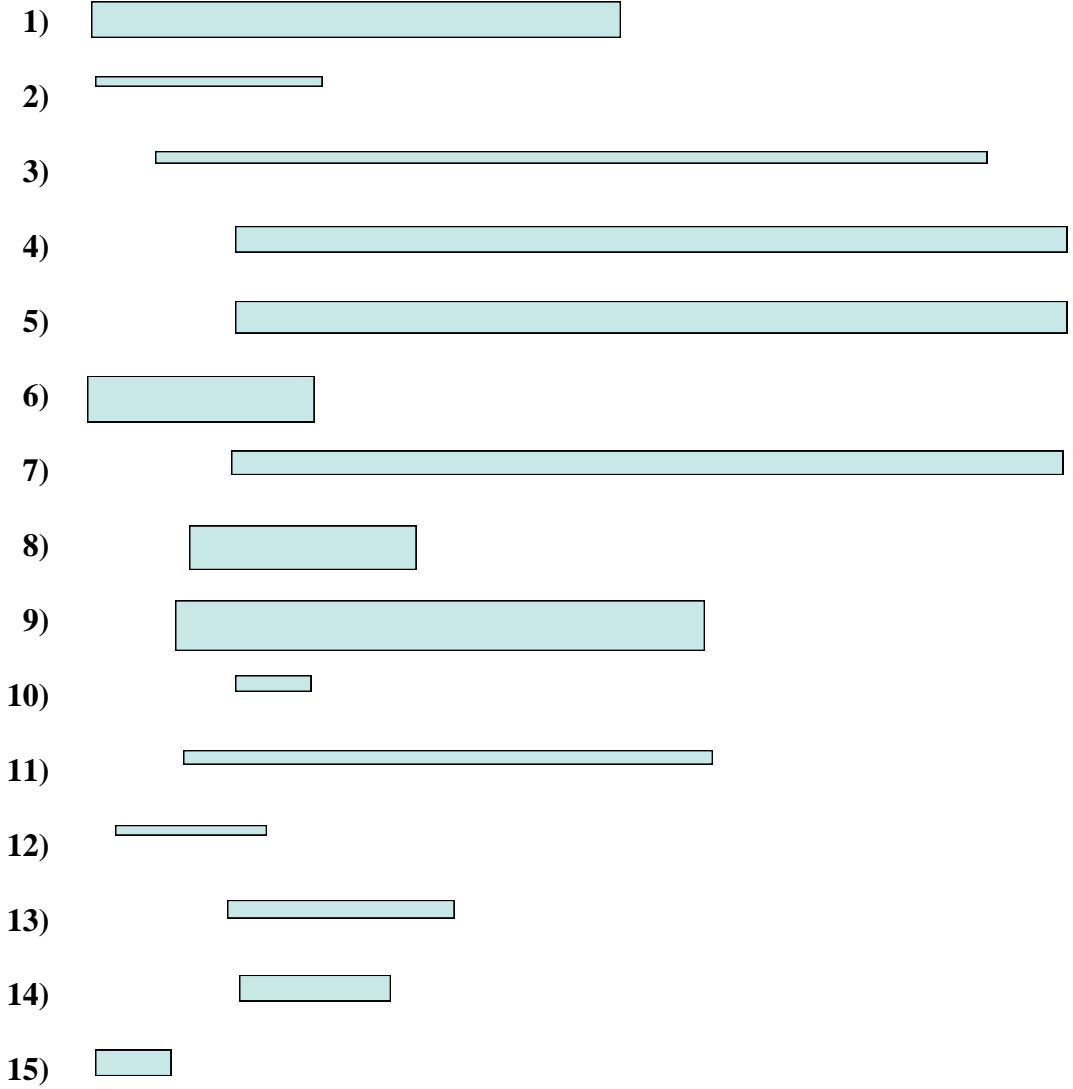
Line Plot

Risposte

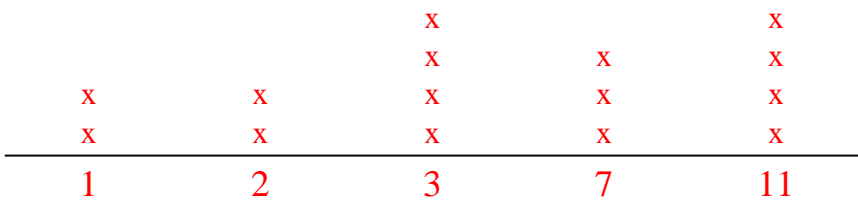
- 1. \_\_\_\_\_
- 2. \_\_\_\_\_
- 3. \_\_\_\_\_
- 4. \_\_\_\_\_
- 5. \_\_\_\_\_
- 6. \_\_\_\_\_
- 7. \_\_\_\_\_
- 8. \_\_\_\_\_
- 9. \_\_\_\_\_
- 10. \_\_\_\_\_
- 11. \_\_\_\_\_
- 12. \_\_\_\_\_
- 13. \_\_\_\_\_
- 14. \_\_\_\_\_
- 15. \_\_\_\_\_



Misura le barre qui sotto (in centimetri) e crea un grafico a linee basandoti sulle informazioni



Line Plot



Risposte

- 1. 7
- 2. 3
- 3. 11
- 4. 11
- 5. 11
- 6. 3
- 7. 11
- 8. 3
- 9. 7
- 10. 1
- 11. 7
- 12. 2
- 13. 3
- 14. 2
- 15. 1