


















Misura le barre qui sotto (in centimetri) e crea un grafico a linee basandoti sulle informazioni

- 1) 
- 2) 
- 3) 
- 4) 
- 5) 
- 6) 
- 7) 
- 8) 
- 9) 
- 10) 
- 11) 
- 12) 
- 13) 
- 14) 
- 15) 

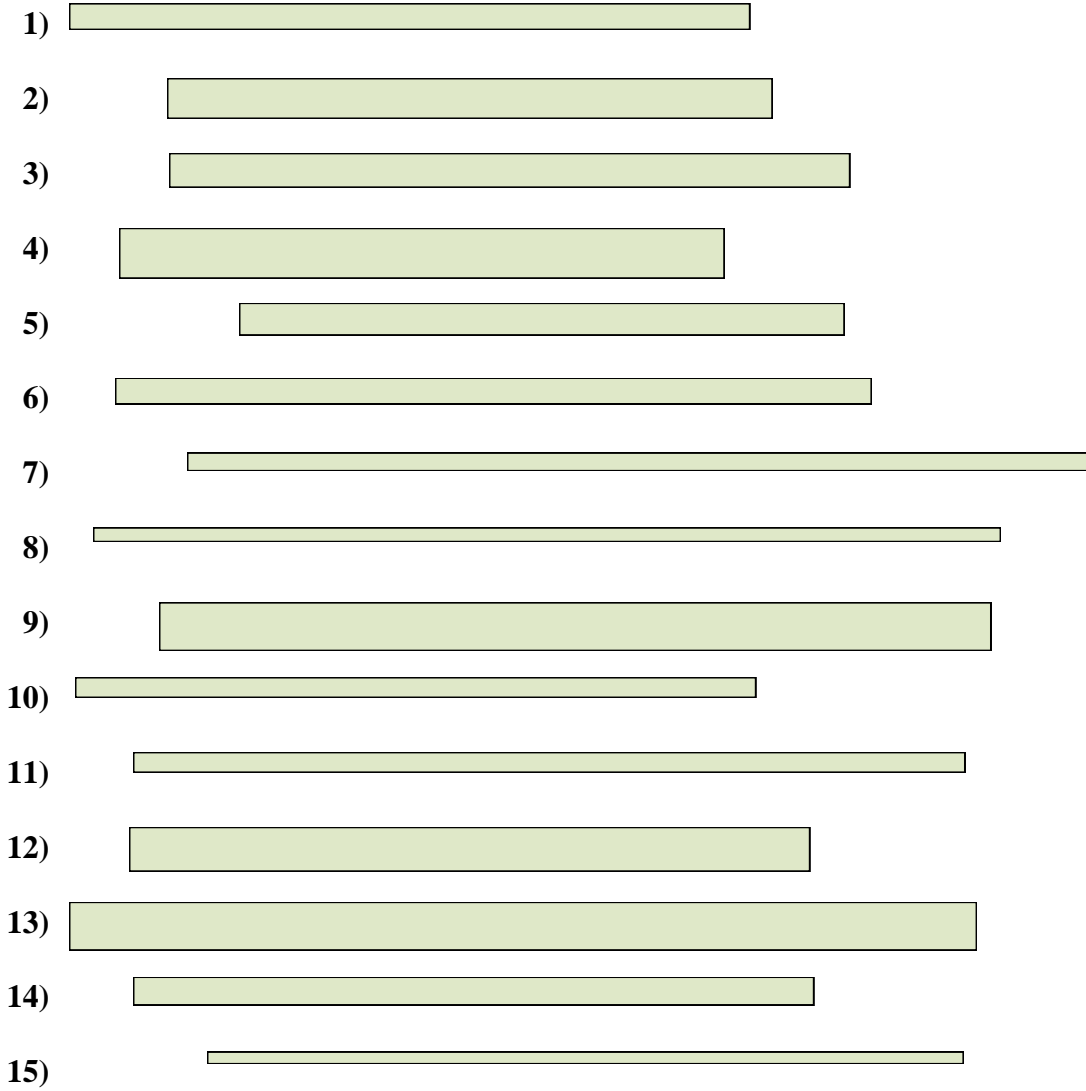
Line Plot

Risposte

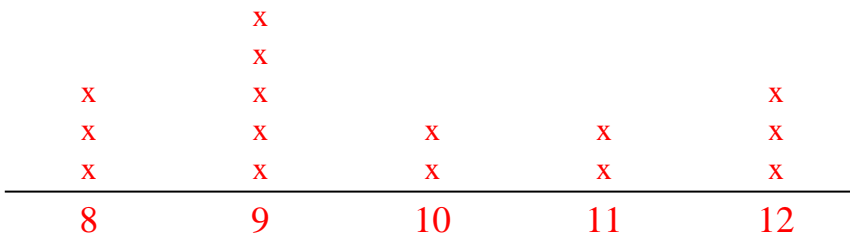
- 1. _____
- 2. _____
- 3. _____
- 4. _____
- 5. _____
- 6. _____
- 7. _____
- 8. _____
- 9. _____
- 10. _____
- 11. _____
- 12. _____
- 13. _____
- 14. _____
- 15. _____



Misura le barre qui sotto (in centimetri) e crea un grafico a linee basandoti sulle informazioni



Line Plot



Risposte

- 1. 9
- 2. 8
- 3. 9
- 4. 8
- 5. 8
- 6. 10
- 7. 12
- 8. 12
- 9. 11
- 10. 9
- 11. 11
- 12. 9
- 13. 12
- 14. 9
- 15. 10