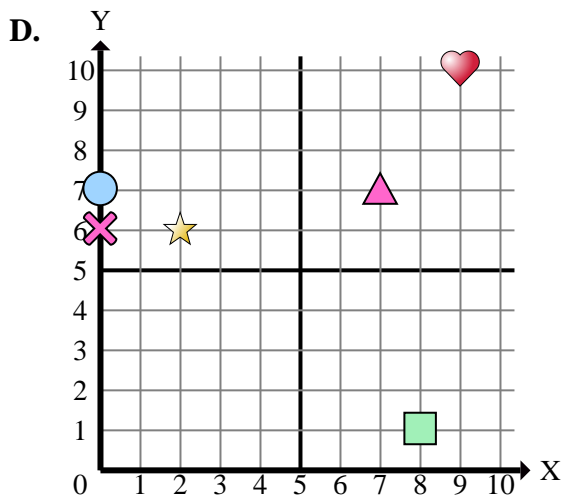
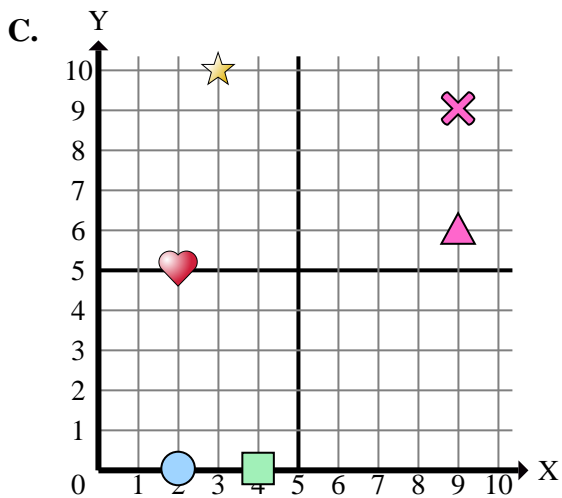
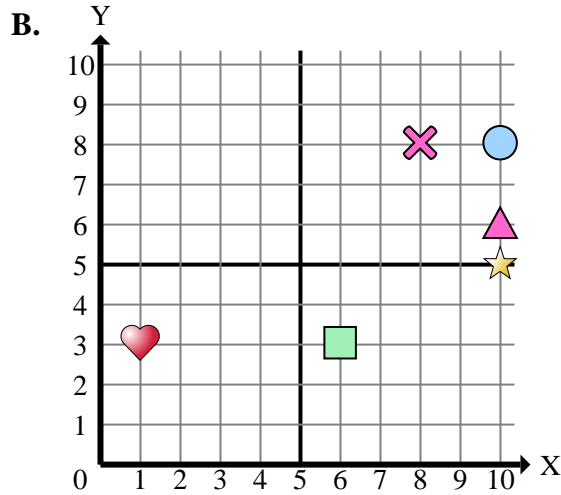
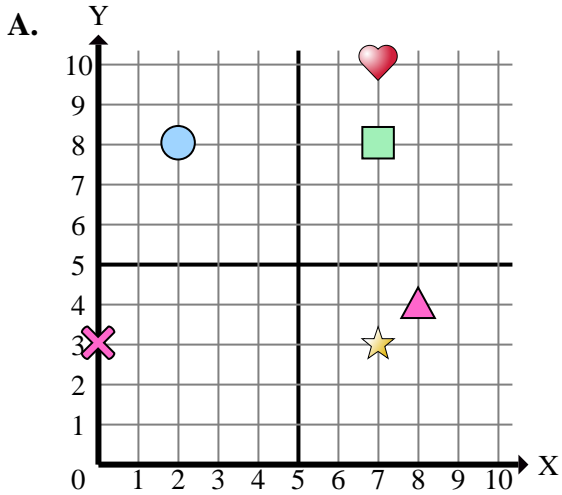




Indica a quale piano cartesiano appartengono le forme elencate nelle domande.



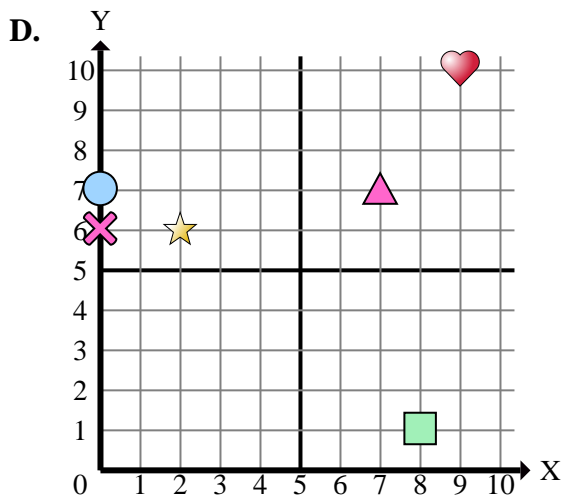
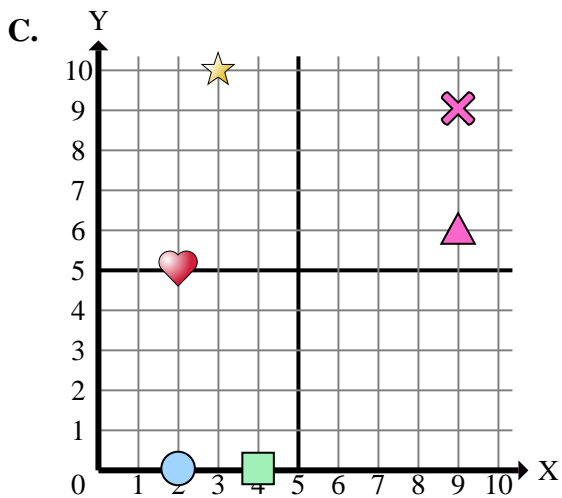
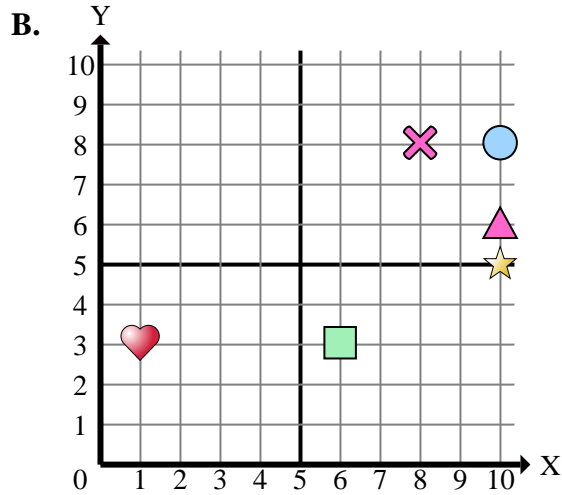
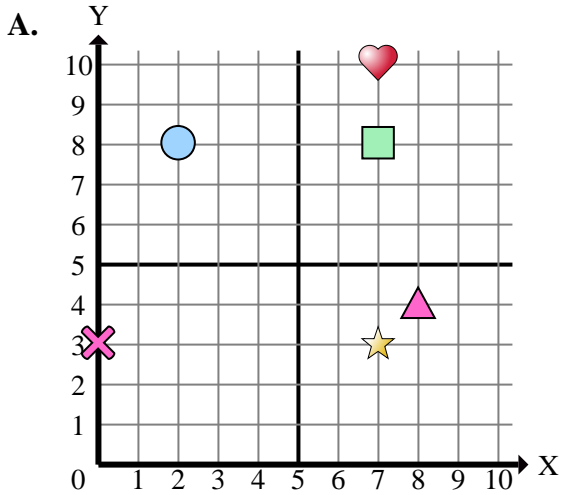
**Risposte**

1. \_\_\_\_\_
2. \_\_\_\_\_
3. \_\_\_\_\_
4. \_\_\_\_\_
5. \_\_\_\_\_
6. \_\_\_\_\_
7. \_\_\_\_\_
8. \_\_\_\_\_
9. \_\_\_\_\_
10. \_\_\_\_\_
11. \_\_\_\_\_
12. \_\_\_\_\_
13. \_\_\_\_\_
14. \_\_\_\_\_
15. \_\_\_\_\_

- 1) Which coordinate plane has a shape at (8 ; 1)?
- 2) Which coordinate plane has a shape at (7 ; 8)?
- 3) Which coordinate plane has a shape at (1 ; 3)?
- 4) Which coordinate plane has a shape at (9 ; 9)?
- 5) Which coordinate plane has a shape at (3 ; 10)?
- 6) Which coordinate plane has a shape at (7 ; 7)?
- 7) Which coordinate plane has a shape at (8 ; 4)?
- 8) Which coordinate plane has a shape at (10 ; 5)?
- 9) Which coordinate plane has a shape at (10 ; 8)?
- 10) Which coordinate plane has a shape at (7 ; 3)?
- 11) Which coordinate plane has a shape at (6 ; 3)?
- 12) Which coordinate plane has a shape at (2 ; 6)?
- 13) Which coordinate plane has a shape at (0 ; 6)?
- 14) Which coordinate plane has a shape at (0 ; 7)?
- 15) Which coordinate plane has a shape at (10 ; 6)?



Indica a quale piano cartesiano appartengono le forme elencate nelle domande.



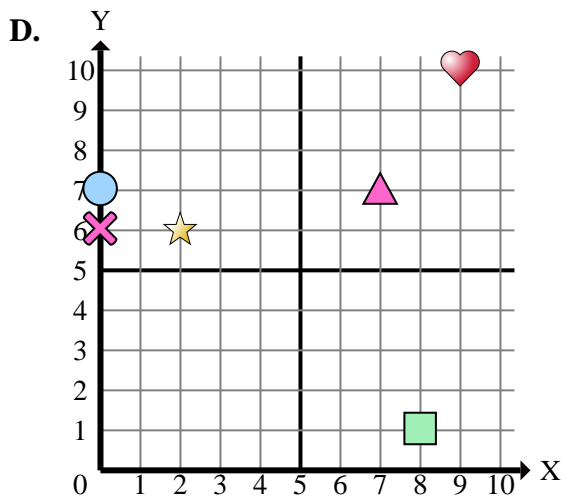
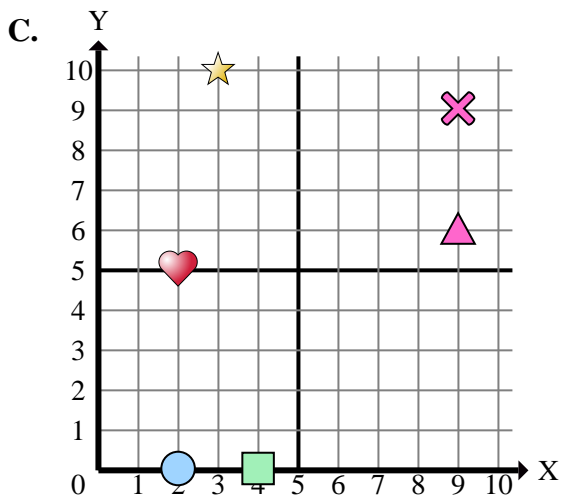
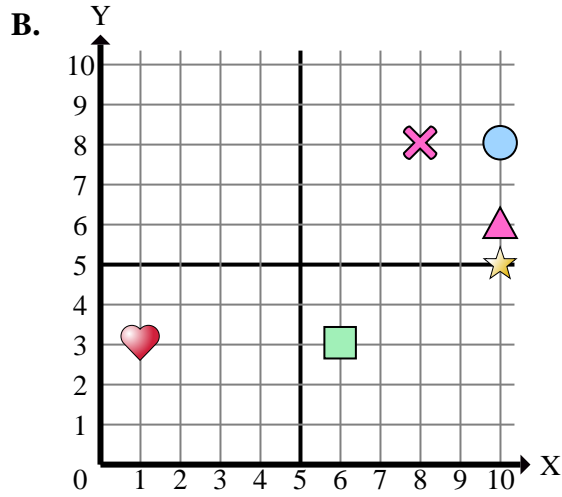
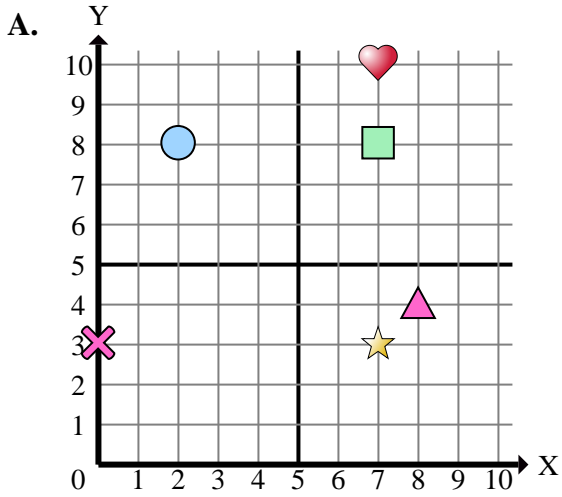
- 1) Which coordinate plane has a shape at (8 ; 1)?
- 2) Which coordinate plane has a shape at (7 ; 8)?
- 3) Which coordinate plane has a shape at (1 ; 3)?
- 4) Which coordinate plane has a shape at (9 ; 9)?
- 5) Which coordinate plane has a shape at (3 ; 10)?
- 6) Which coordinate plane has a shape at (7 ; 7)?
- 7) Which coordinate plane has a shape at (8 ; 4)?
- 8) Which coordinate plane has a shape at (10 ; 5)?
- 9) Which coordinate plane has a shape at (10 ; 8)?
- 10) Which coordinate plane has a shape at (7 ; 3)?
- 11) Which coordinate plane has a shape at (6 ; 3)?
- 12) Which coordinate plane has a shape at (2 ; 6)?
- 13) Which coordinate plane has a shape at (0 ; 6)?
- 14) Which coordinate plane has a shape at (0 ; 7)?
- 15) Which coordinate plane has a shape at (10 ; 6)?

**Risposte**

1.           **D**
2.           **A**
3.           **B**
4.           **C**
5.           **C**
6.           **D**
7.           **A**
8.           **B**
9.           **B**
10.          **A**
11.          **B**
12.          **D**
13.          **D**
14.          **D**
15.          **B**



Indica a quale piano cartesiano appartengono le forme elencate nelle domande.



**Risposte**

1. \_\_\_\_\_
2. \_\_\_\_\_
3. \_\_\_\_\_
4. \_\_\_\_\_
5. \_\_\_\_\_
6. \_\_\_\_\_
7. \_\_\_\_\_
8. \_\_\_\_\_
9. \_\_\_\_\_
10. \_\_\_\_\_

- 1) Which coordinate plane has a rectangle at (8 ; 1)?
- 2) Which coordinate plane has a rectangle at (7 ; 8)?
- 3) Which coordinate plane has a heart at (1 ; 3)?
- 4) Which coordinate plane has a cross at (9 ; 9)?
- 5) Which coordinate plane has a star at (3 ; 10)?
- 6) Which coordinate plane has a triangle at (7 ; 7)?
- 7) Which coordinate plane has a triangle at (8 ; 4)?
- 8) Which coordinate plane has a star at (10 ; 5)?
- 9) Which coordinate plane has a circle at (10 ; 8)?
- 10) Which coordinate plane has a star at (7 ; 3)?