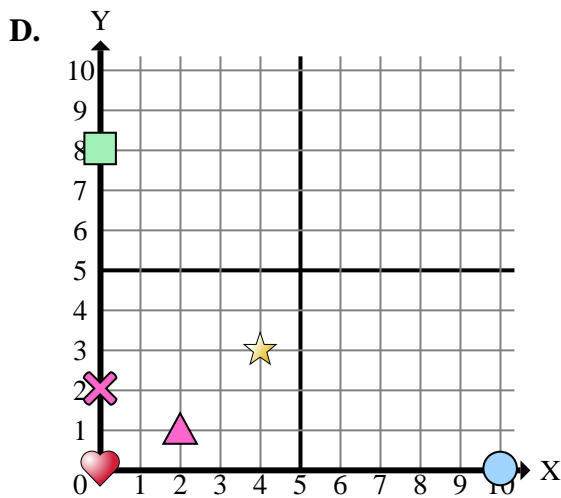
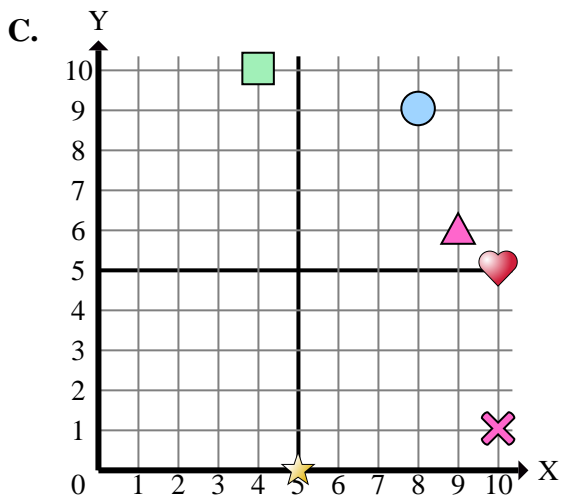
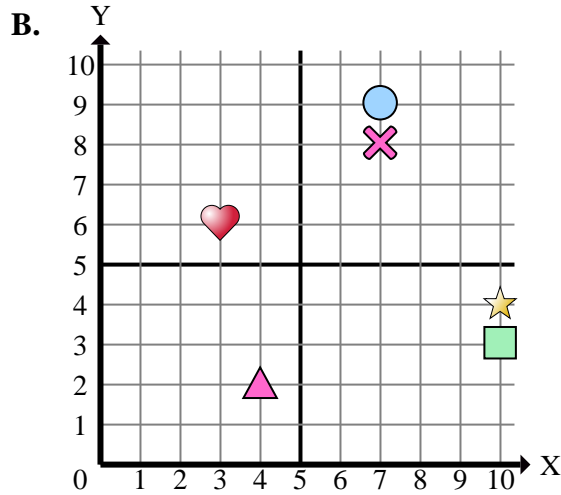
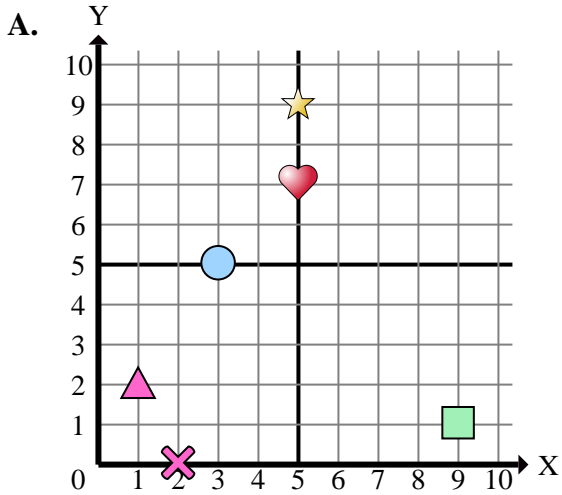




Indica a quale piano cartesiano appartengono le forme elencate nelle domande.



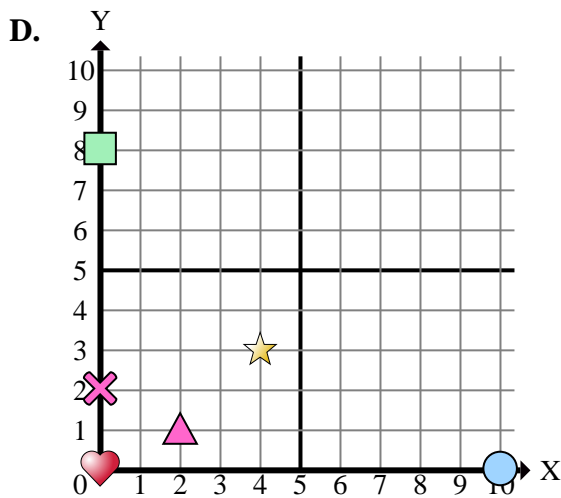
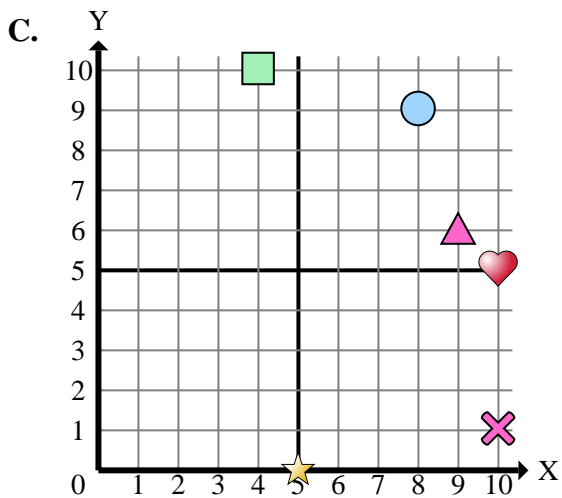
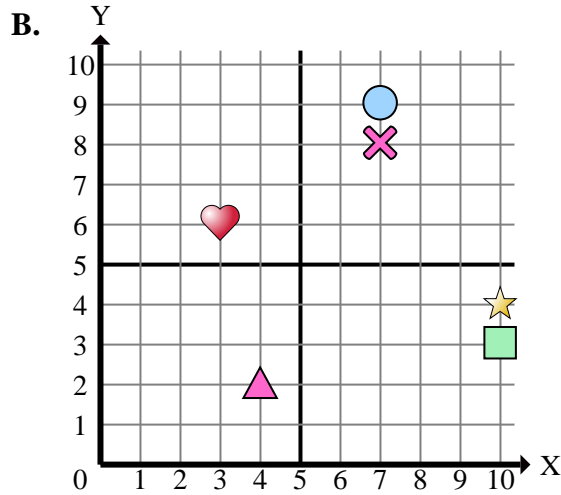
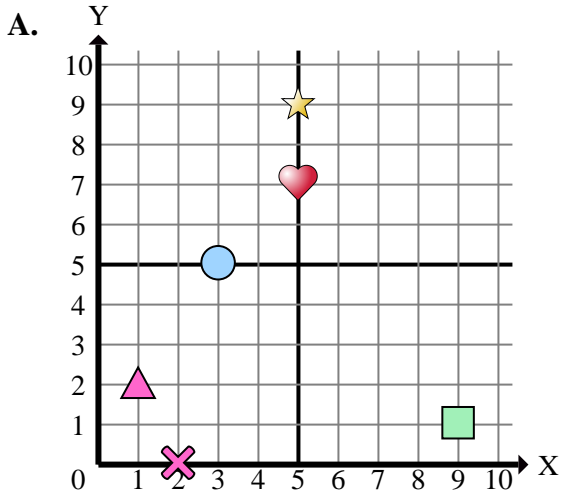
Risposte

1. _____
2. _____
3. _____
4. _____
5. _____
6. _____
7. _____
8. _____
9. _____
10. _____
11. _____
12. _____
13. _____
14. _____
15. _____

- 1) Which coordinate plane has a shape at (10 ; 3)?
- 2) Which coordinate plane has a shape at (9 ; 6)?
- 3) Which coordinate plane has a shape at (10 ; 1)?
- 4) Which coordinate plane has a shape at (8 ; 9)?
- 5) Which coordinate plane has a shape at (2 ; 1)?
- 6) Which coordinate plane has a shape at (7 ; 9)?
- 7) Which coordinate plane has a shape at (2 ; 0)?
- 8) Which coordinate plane has a shape at (5 ; 0)?
- 9) Which coordinate plane has a shape at (4 ; 10)?
- 10) Which coordinate plane has a shape at (10 ; 0)?
- 11) Which coordinate plane has a shape at (4 ; 2)?
- 12) Which coordinate plane has a shape at (1 ; 2)?
- 13) Which coordinate plane has a shape at (5 ; 7)?
- 14) Which coordinate plane has a shape at (0 ; 2)?
- 15) Which coordinate plane has a shape at (7 ; 8)?



Indica a quale piano cartesiano appartengono le forme elencate nelle domande.



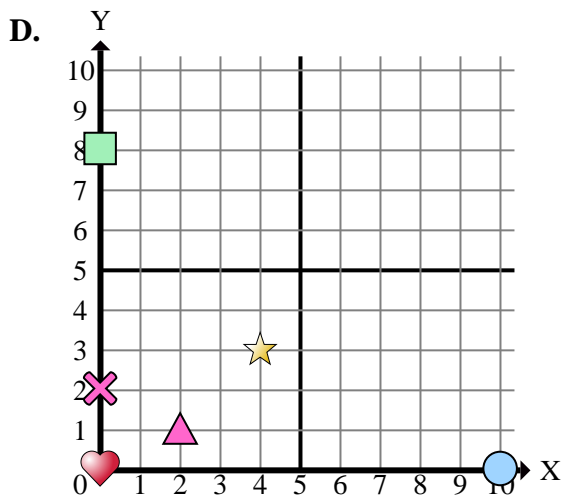
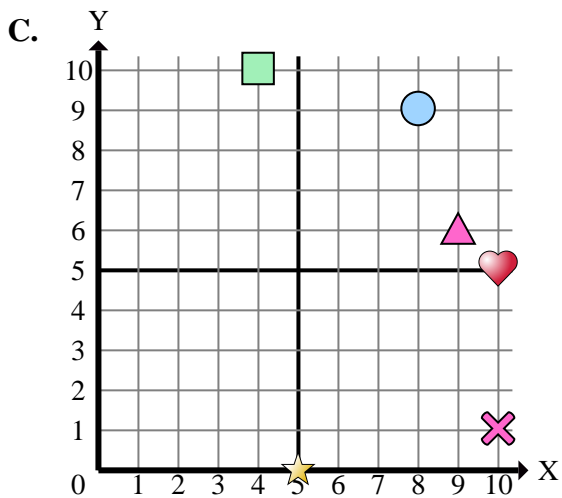
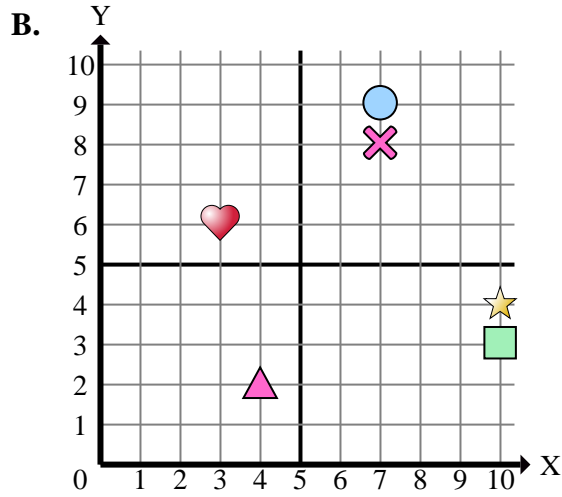
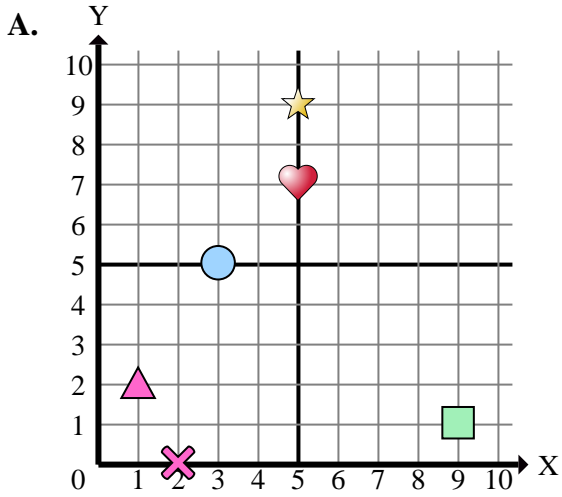
- 1) Which coordinate plane has a shape at (10 ; 3)?
- 2) Which coordinate plane has a shape at (9 ; 6)?
- 3) Which coordinate plane has a shape at (10 ; 1)?
- 4) Which coordinate plane has a shape at (8 ; 9)?
- 5) Which coordinate plane has a shape at (2 ; 1)?
- 6) Which coordinate plane has a shape at (7 ; 9)?
- 7) Which coordinate plane has a shape at (2 ; 0)?
- 8) Which coordinate plane has a shape at (5 ; 0)?
- 9) Which coordinate plane has a shape at (4 ; 10)?
- 10) Which coordinate plane has a shape at (10 ; 0)?
- 11) Which coordinate plane has a shape at (4 ; 2)?
- 12) Which coordinate plane has a shape at (1 ; 2)?
- 13) Which coordinate plane has a shape at (5 ; 7)?
- 14) Which coordinate plane has a shape at (0 ; 2)?
- 15) Which coordinate plane has a shape at (7 ; 8)?

Risposte

1. **B**
2. **C**
3. **C**
4. **C**
5. **D**
6. **B**
7. **A**
8. **C**
9. **C**
10. **D**
11. **B**
12. **A**
13. **A**
14. **D**
15. **B**



Indica a quale piano cartesiano appartengono le forme elencate nelle domande.



Risposte

1. _____
2. _____
3. _____
4. _____
5. _____
6. _____
7. _____
8. _____
9. _____
10. _____

- 1) Which coordinate plane has a rectangle at (10 ; 3)?
- 2) Which coordinate plane has a triangle at (9 ; 6)?
- 3) Which coordinate plane has a cross at (10 ; 1)?
- 4) Which coordinate plane has a circle at (8 ; 9)?
- 5) Which coordinate plane has a triangle at (2 ; 1)?
- 6) Which coordinate plane has a circle at (7 ; 9)?
- 7) Which coordinate plane has a cross at (2 ; 0)?
- 8) Which coordinate plane has a star at (5 ; 0)?
- 9) Which coordinate plane has a rectangle at (4 ; 10)?
- 10) Which coordinate plane has a circle at (10 ; 0)?