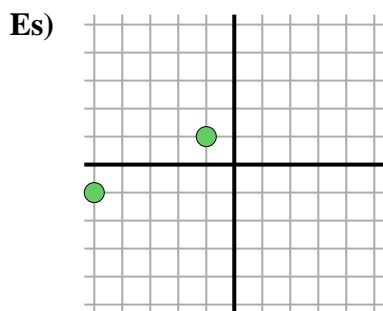


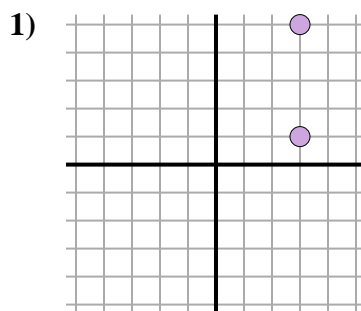


Trova la distanza tra i punti. Arrotonda il risultato alla decina più vicina.



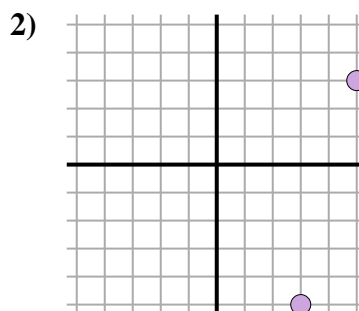
$$\sqrt{(-1--5)^2 + (1--1)^2}$$

$$\sqrt{(16) + (4)}$$



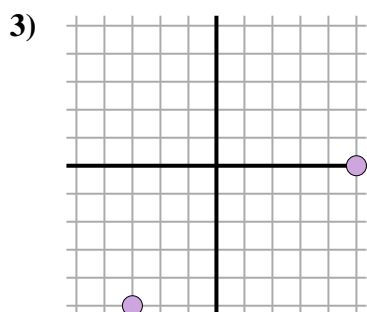
$$\sqrt{(3-3)^2 + (5-3)^2}$$

$$\sqrt{(0) + (16)}$$



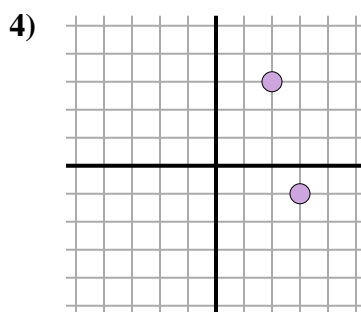
$$\sqrt{(3-5)^2 + (-5-3)^2}$$

$$\sqrt{(4) + (64)}$$



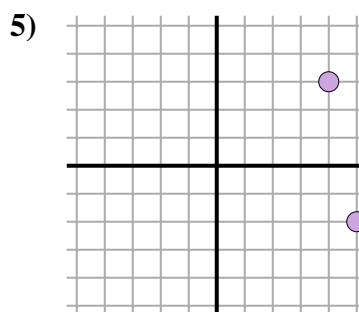
$$\sqrt{(5--3)^2 + (0--5)^2}$$

$$\sqrt{(64) + (25)}$$



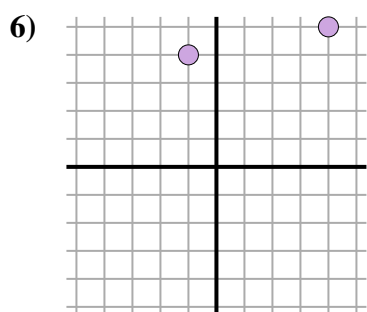
$$\sqrt{(3-2)^2 + (-1-3)^2}$$

$$\sqrt{(1) + (16)}$$



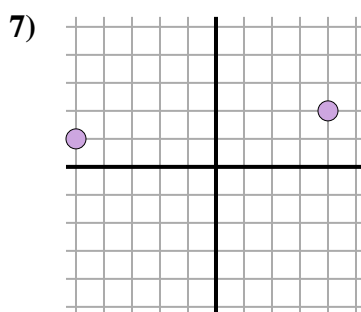
$$\sqrt{(5-4)^2 + (-2-3)^2}$$

$$\sqrt{(1) + (25)}$$



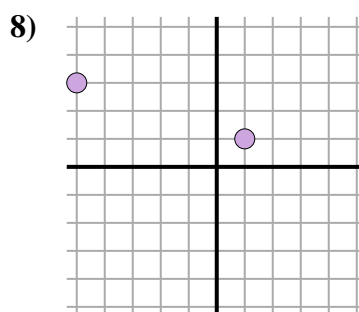
$$\sqrt{(4--1)^2 + (5-4)^2}$$

$$\sqrt{(25) + (1)}$$



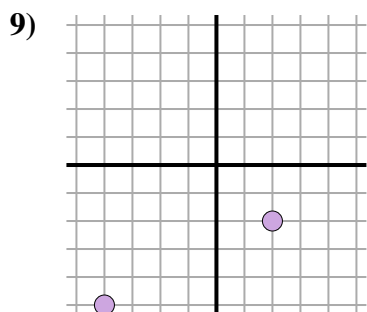
$$\sqrt{(-5-4)^2 + (1-2)^2}$$

$$\sqrt{(81) + (1)}$$



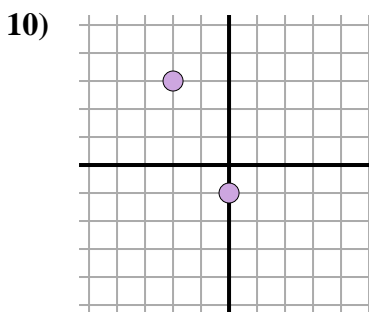
$$\sqrt{(-5-1)^2 + (3-1)^2}$$

$$\sqrt{(36) + (4)}$$



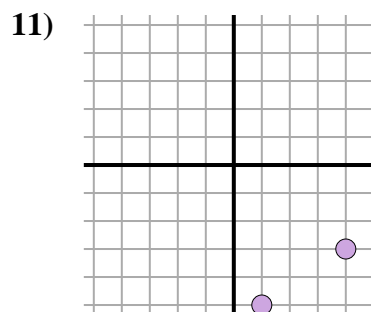
$$\sqrt{(-4-2)^2 + (-5--2)^2}$$

$$\sqrt{(36) + (9)}$$



$$\sqrt{(0--2)^2 + (-1-3)^2}$$

$$\sqrt{(4) + (16)}$$



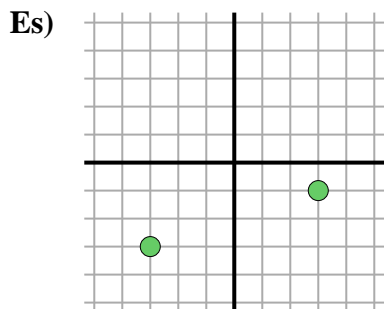
$$\sqrt{(4-1)^2 + (-3--5)^2}$$

$$\sqrt{(9) + (4)}$$

RisposteEs. 4,51. 42. 8,23. 9,44. 4,15. 5,16. 5,17. 9,18. 6,39. 6,710. 4,511. 3,6

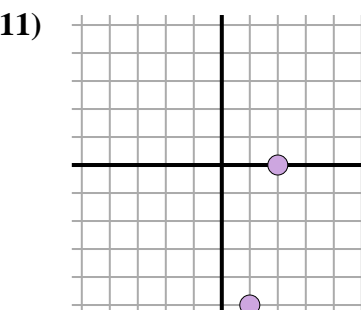
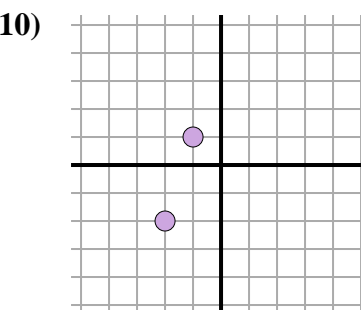
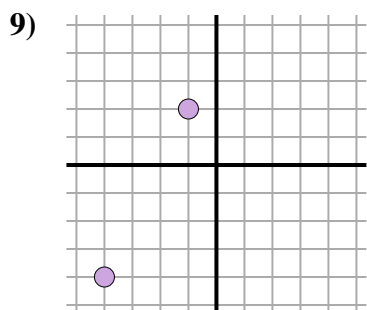
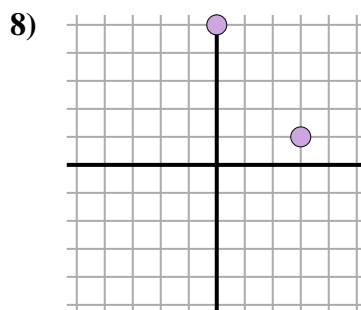
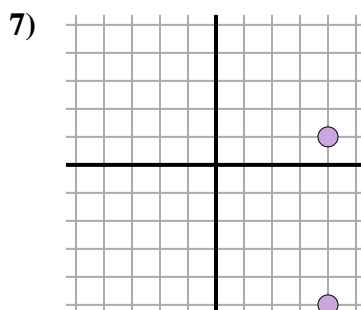
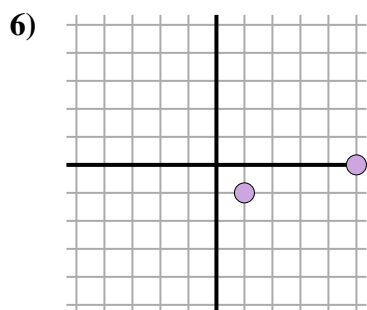
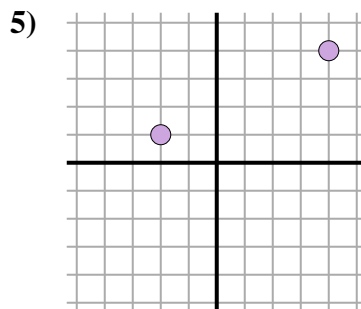
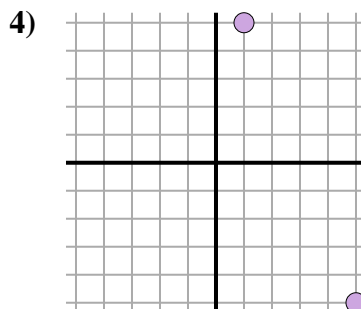
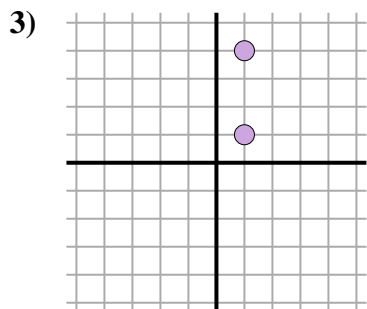
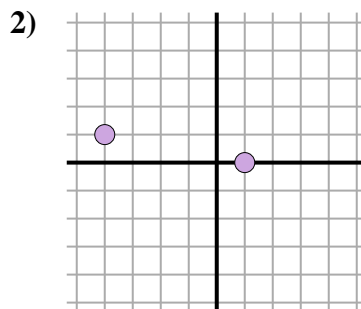
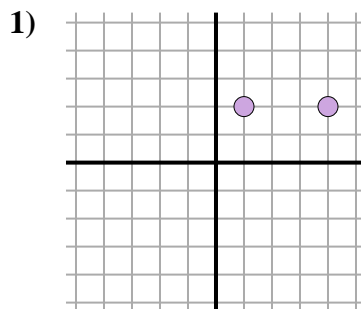


Trova la distanza tra i punti. Arrotonda il risultato alla decina più vicina.



$$\sqrt{(-3-3)^2 + (-3--1)^2}$$

$$\sqrt{(36) + (4)}$$



Risposte

Es. 6,3

1. _____

2. _____

3. _____

4. _____

5. _____

6. _____

7. _____

8. _____

9. _____

10. _____

11. _____

