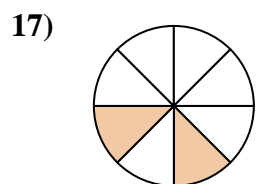
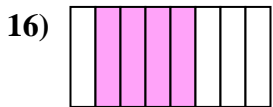
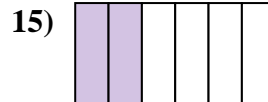
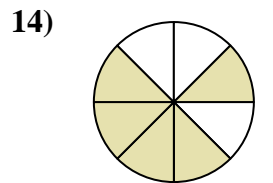
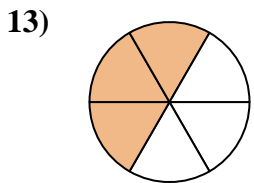


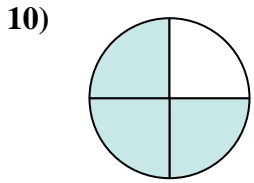
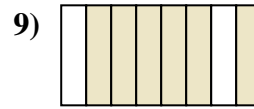
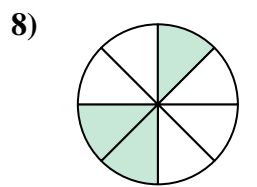
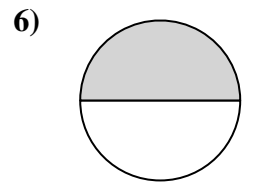
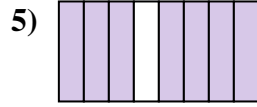
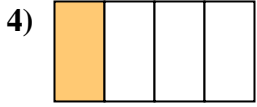
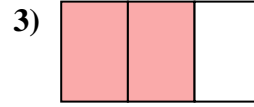
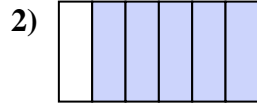
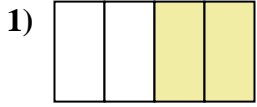




Scrivi la frazione corrispondente alla parte colorata.



Risposte

1. _____

2. _____

3. _____

4. _____

5. _____

6. _____

7. _____

8. _____

9. _____

10. _____

11. _____

12. _____

13. _____

14. _____

15. _____

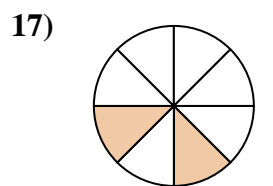
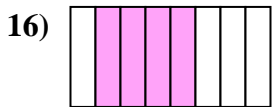
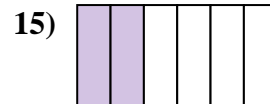
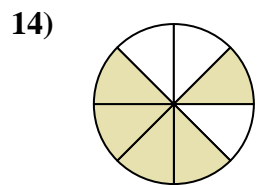
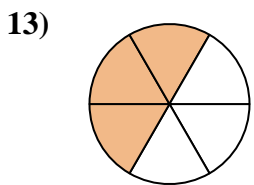
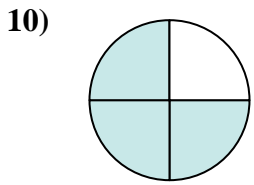
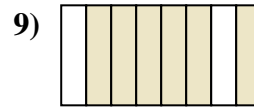
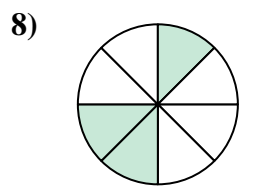
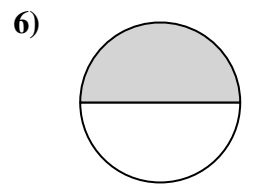
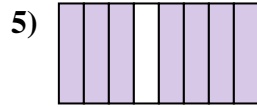
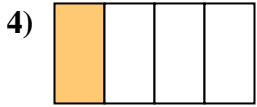
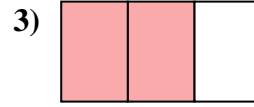
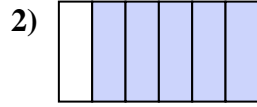
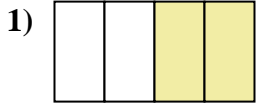
16. _____

17. _____

18. _____



Scrivi la frazione corrispondente alla parte colorata.



Risposte

1. 2/4

2. 5/6

3. 2/3

4. 1/4

5. 7/8

6. 1/2

7. 4/6

8. 3/8

9. 6/8

10. 3/4

11. 1/3

12. 1/6

13. 3/6

14. 5/8

15. 2/6

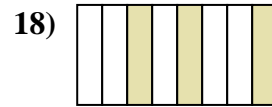
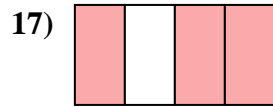

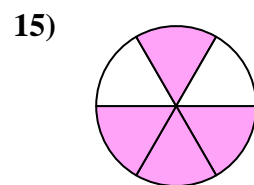

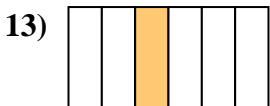
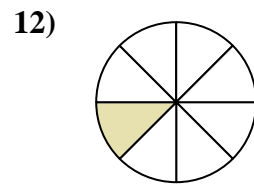
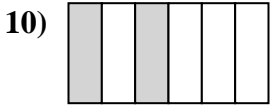
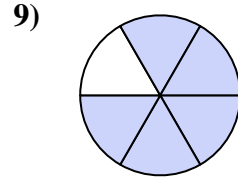
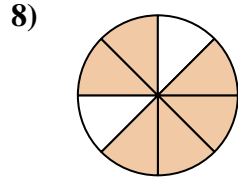
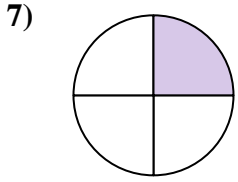
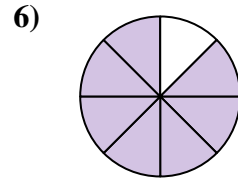
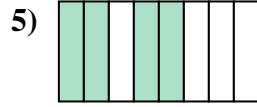
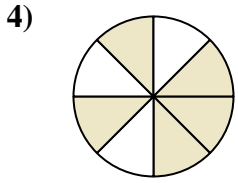
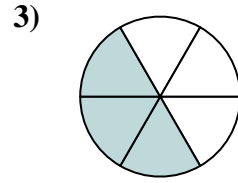
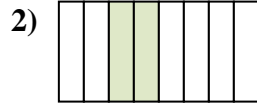
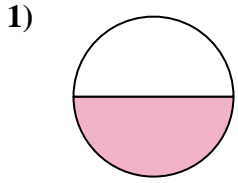
16. 4/8

17. 2/8

18. 1/8



Scrivi la frazione corrispondente alla parte colorata.

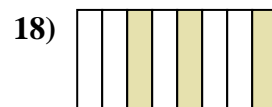


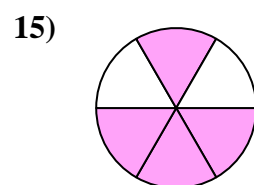
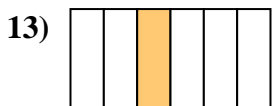
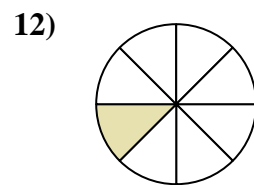
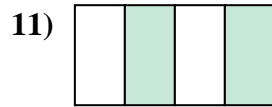
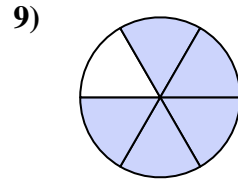
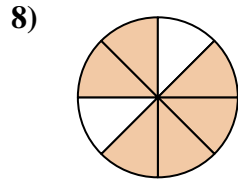
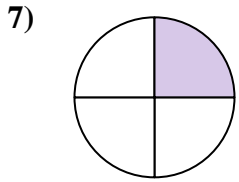
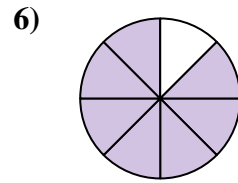
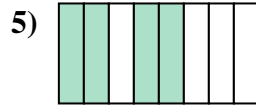
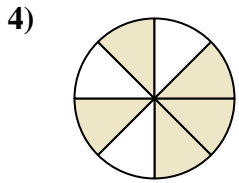
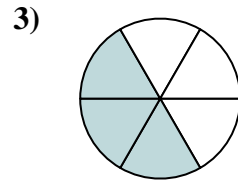
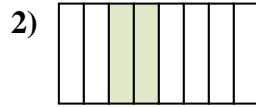
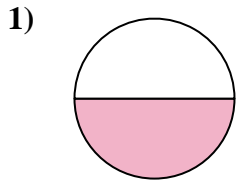


Risposte

1. _____
2. _____
3. _____
4. _____
5. _____
6. _____
7. _____
8. _____
9. _____
10. _____
11. _____
12. _____
13. _____
14. _____
15. _____
16. _____
17. _____
18. _____



Scrivi la frazione corrispondente alla parte colorata.



Risposte

1. 1/2

2. 2/8

3. 3/6

4. 5/8

5. 4/8

6. 7/8

7. 1/4

8. 6/8

9. 5/6

10. 2/6

11. 2/4

12. 1/8

13. 1/6

14. 1/3

15. 4/6

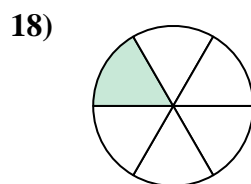
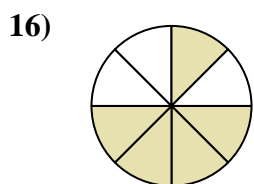
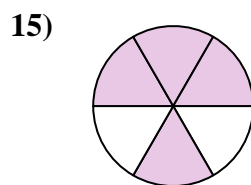
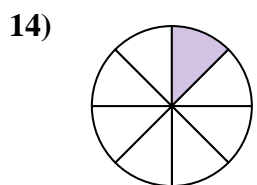
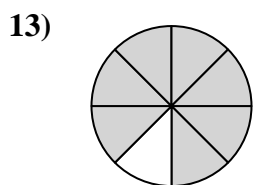

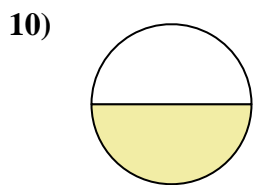
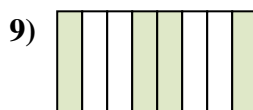
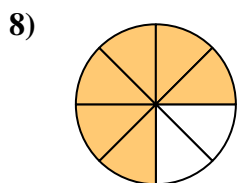
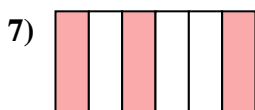
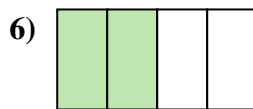
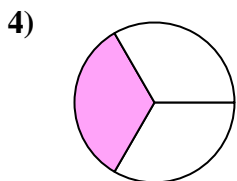
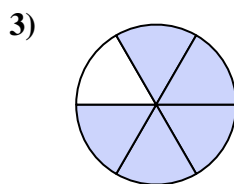
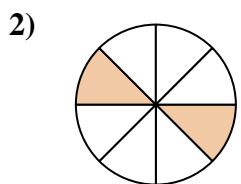

16. 2/3

17. 3/4

18. 3/8



Scrivi la frazione corrispondente alla parte colorata.



Risposte

1. _____

2. _____

3. _____

4. _____

5. _____

6. _____

7. _____

8. _____

9. _____

10. _____

11. _____

12. _____

13. _____

14. _____

15. _____

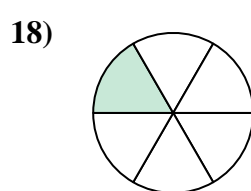
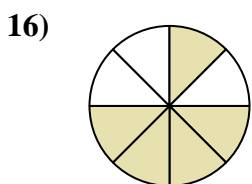
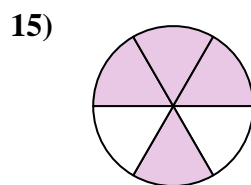
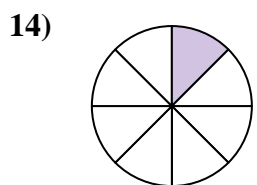
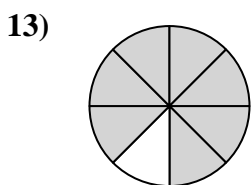

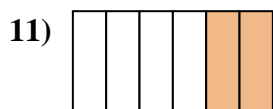
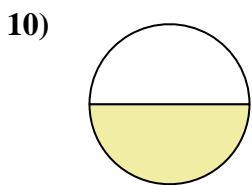
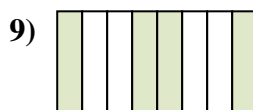
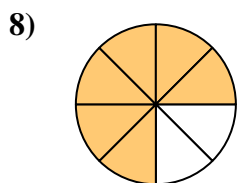
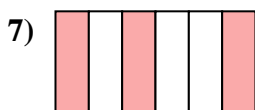
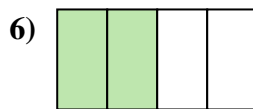
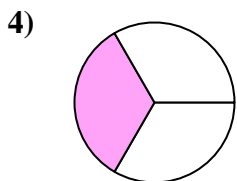
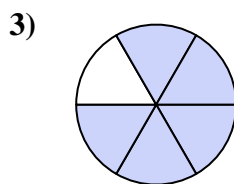
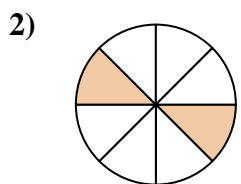

16. _____

17. _____

18. _____



Scrivi la frazione corrispondente alla parte colorata.



Risposte

1. $\frac{2}{3}$

2. $\frac{2}{8}$

3. $\frac{5}{6}$

4. $\frac{1}{3}$

5. $\frac{3}{8}$

6. $\frac{2}{4}$

7. $\frac{3}{6}$

8. $\frac{6}{8}$

9. $\frac{4}{8}$

10. $\frac{1}{2}$

11. $\frac{2}{6}$

12. $\frac{3}{4}$

13. $\frac{7}{8}$

14. $\frac{1}{8}$

15. $\frac{4}{6}$

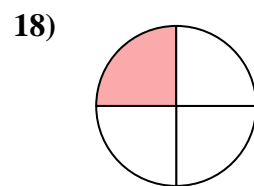
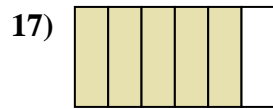
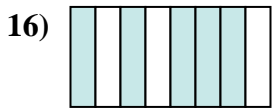
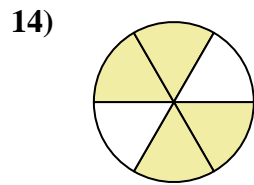
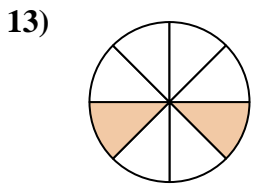

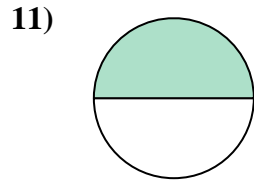
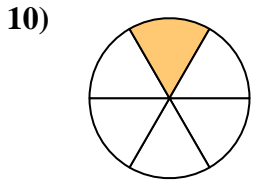
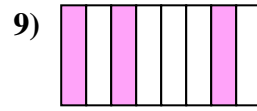
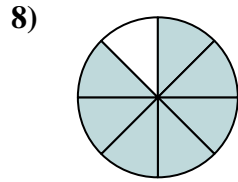
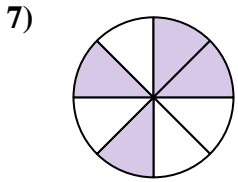
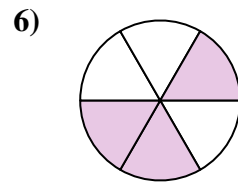
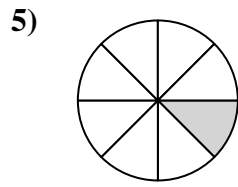

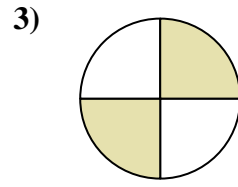
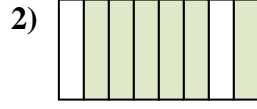
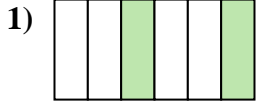
16. $\frac{5}{8}$

17. $\frac{1}{4}$

18. $\frac{1}{6}$



Scrivi la frazione corrispondente alla parte colorata.

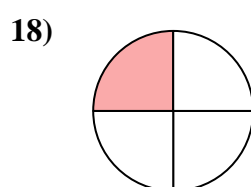
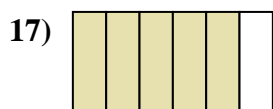

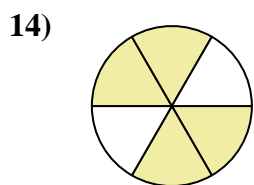
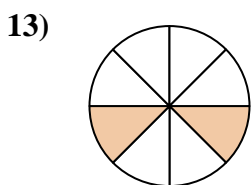

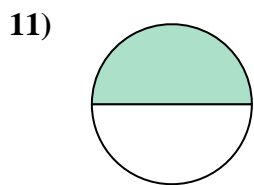
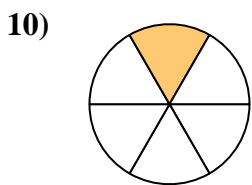
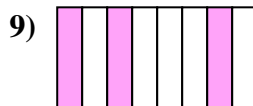
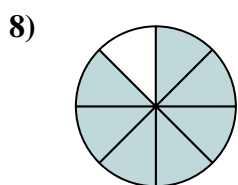
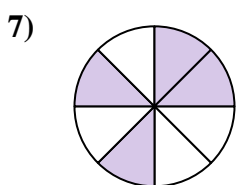
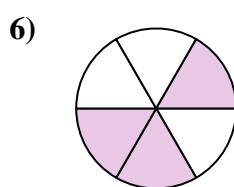
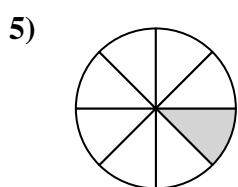

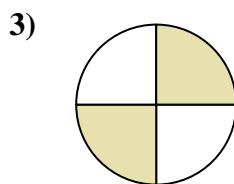
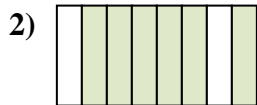
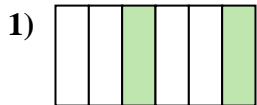


Risposte

1. _____
2. _____
3. _____
4. _____
5. _____
6. _____
7. _____
8. _____
9. _____
10. _____
11. _____
12. _____
13. _____
14. _____
15. _____
16. _____
17. _____
18. _____



Scrivi la frazione corrispondente alla parte colorata.



Risposte

1. 2/6

2. 6/8

3. 2/4

4. 2/3

5. 1/8

6. 3/6

7. 4/8

8. 7/8

9. 3/8

10. 1/6

11. 1/2

12. 3/4

13. 2/8

14. 4/6

15. 1/3

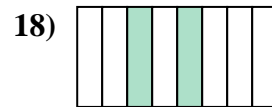
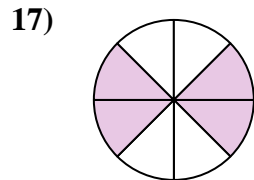
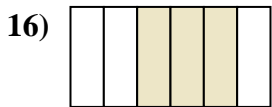
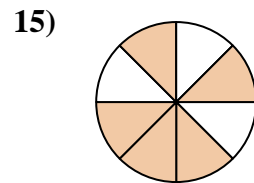
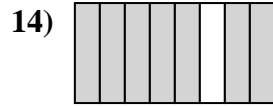
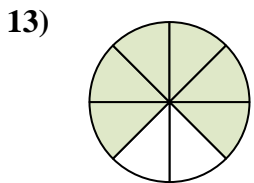
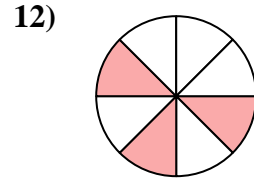

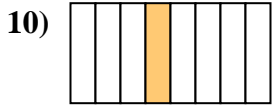
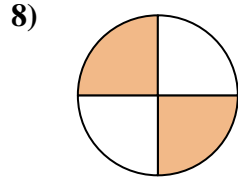
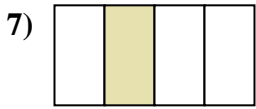

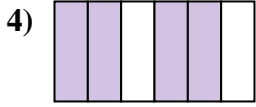
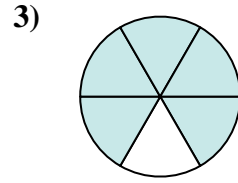
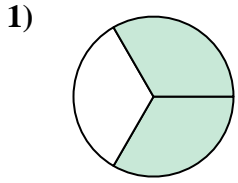
16. 5/8

17. 5/6

18. 1/4



Scrivi la frazione corrispondente alla parte colorata.



Risposte

1. _____

2. _____

3. _____

4. _____

5. _____

6. _____

7. _____

8. _____

9. _____

10. _____

11. _____

12. _____

13. _____

14. _____

15. _____

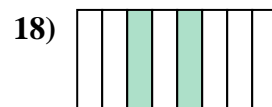
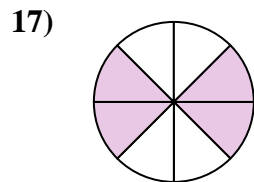
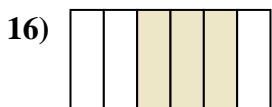
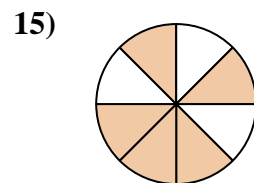
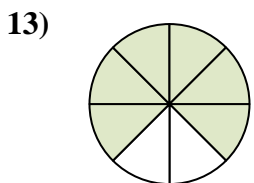
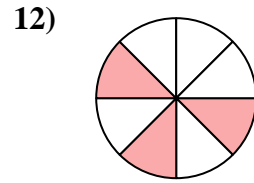

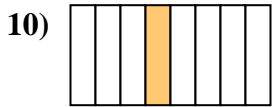
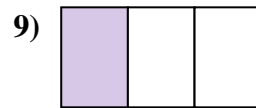
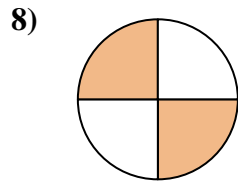
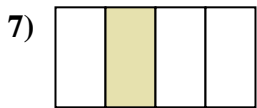
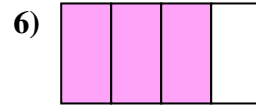
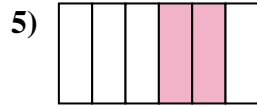
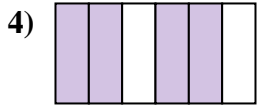
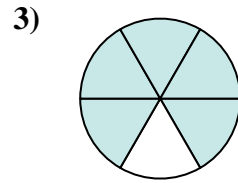
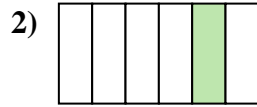
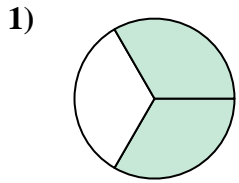
16. _____

17. _____

18. _____



Scrivi la frazione corrispondente alla parte colorata.



Risposte

1. $\frac{2}{3}$

2. $\frac{1}{6}$

3. $\frac{5}{6}$

4. $\frac{4}{6}$

5. $\frac{2}{6}$

6. $\frac{3}{4}$

7. $\frac{1}{4}$

8. $\frac{2}{4}$

9. $\frac{1}{3}$

10. $\frac{1}{8}$

11. $\frac{1}{2}$

12. $\frac{3}{8}$

13. $\frac{6}{8}$

14. $\frac{7}{8}$

15. $\frac{5}{8}$

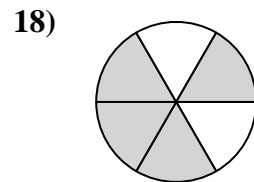
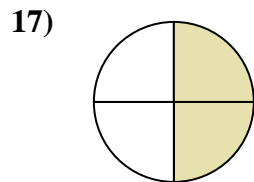
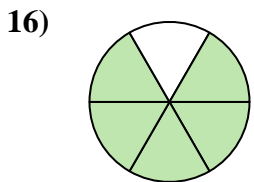

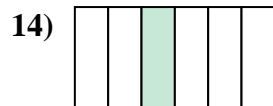

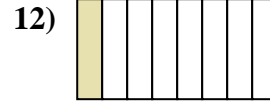
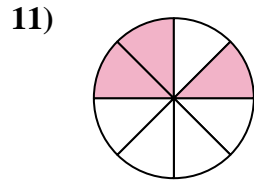
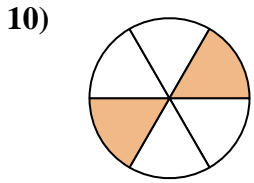
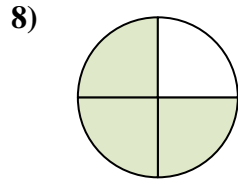
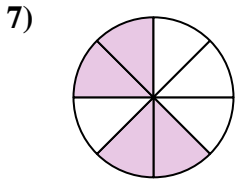
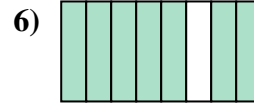
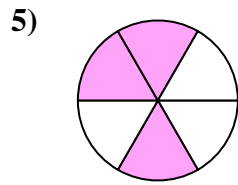

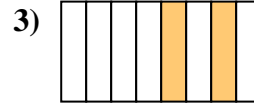
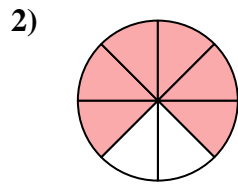

16. $\frac{3}{6}$

17. $\frac{4}{8}$

18. $\frac{2}{8}$



Scrivi la frazione corrispondente alla parte colorata.

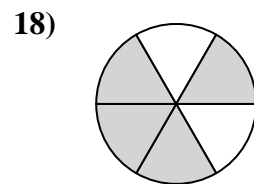
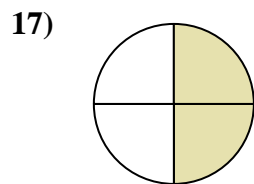
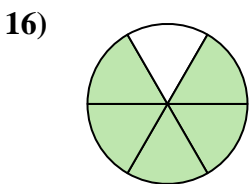

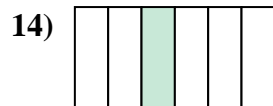

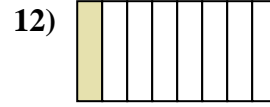
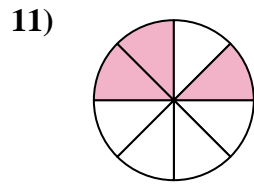
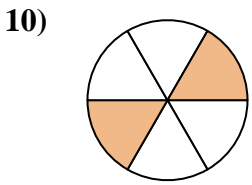
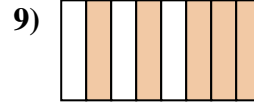
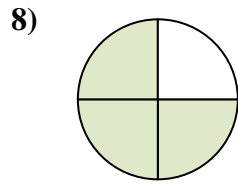
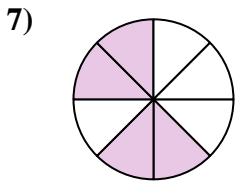
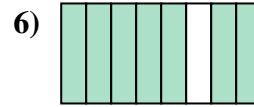
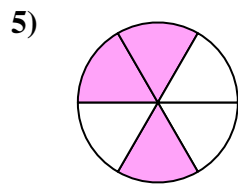

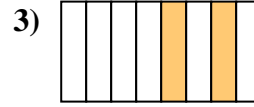
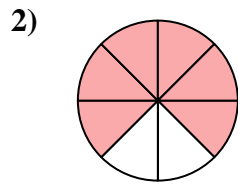



Risposte

1. _____
2. _____
3. _____
4. _____
5. _____
6. _____
7. _____
8. _____
9. _____
10. _____
11. _____
12. _____
13. _____
14. _____
15. _____
16. _____
17. _____
18. _____



Scrivi la frazione corrispondente alla parte colorata.



Risposte

1. 2/3

2. 6/8

3. 2/8

4. 1/2

5. 3/6

6. 7/8

7. 4/8

8. 3/4

9. 5/8

10. 2/6

11. 3/8

12. 1/8

13. 1/3

14. 1/6

15. 1/4

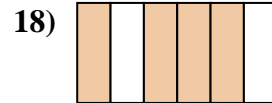
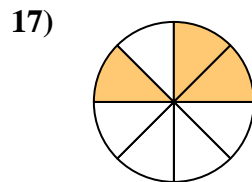
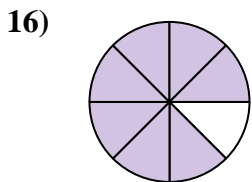
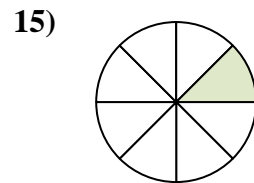
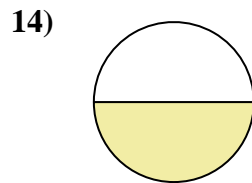
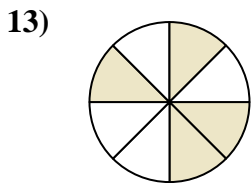
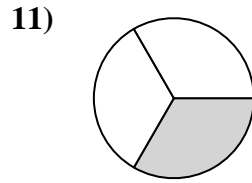
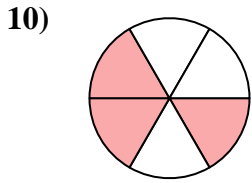
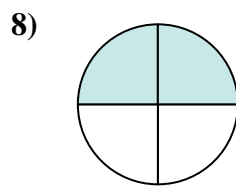
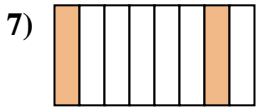
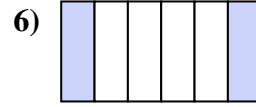
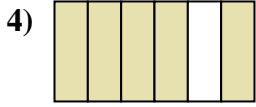
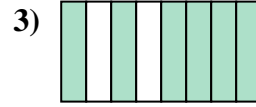
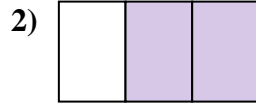
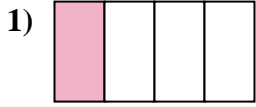
16. 5/6

17. 2/4

18. 4/6



Scrivi la frazione corrispondente alla parte colorata.

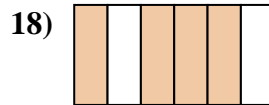
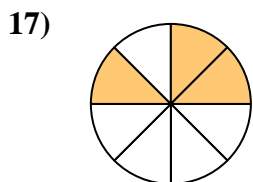
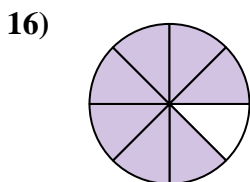
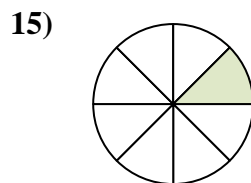
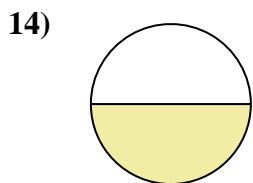
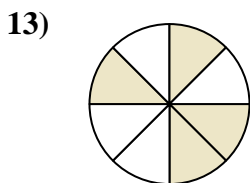
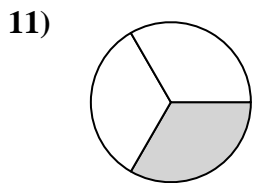
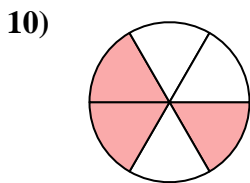

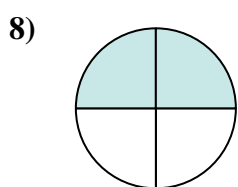
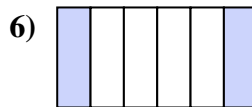
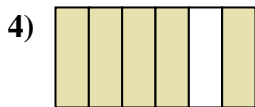
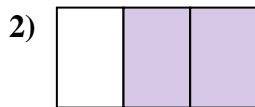
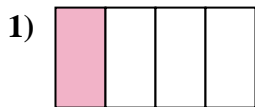


Risposte

1. _____
2. _____
3. _____
4. _____
5. _____
6. _____
7. _____
8. _____
9. _____
10. _____
11. _____
12. _____
13. _____
14. _____
15. _____
16. _____
17. _____
18. _____



Scrivi la frazione corrispondente alla parte colorata.



Risposte

1. 1/4

2. 2/3

3. 6/8

4. 5/6

5. 1/6

6. 2/6

7. 2/8

8. 2/4

9. 3/4

10. 3/6

11. 1/3

12. 5/8

13. 4/8

14. 1/2

15. 1/8



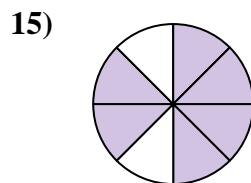
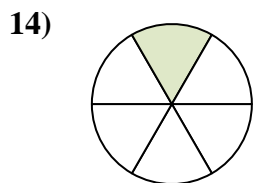
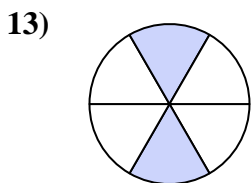
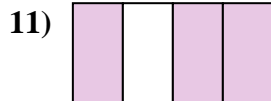
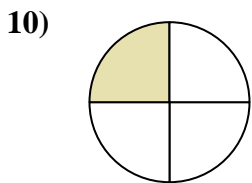
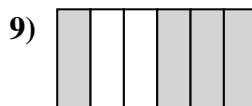

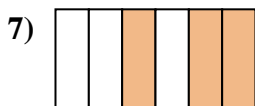
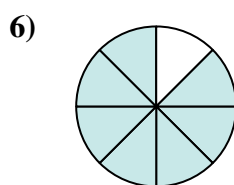
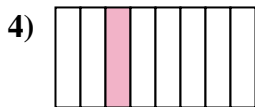
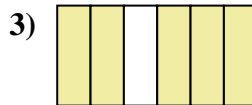
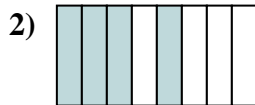

16. 7/8

17. 3/8

18. 4/6



Scrivi la frazione corrispondente alla parte colorata.



Risposte

1. _____

2. _____

3. _____

4. _____

5. _____

6. _____

7. _____

8. _____

9. _____

10. _____

11. _____

12. _____

13. _____

14. _____

15. _____



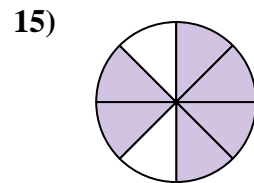
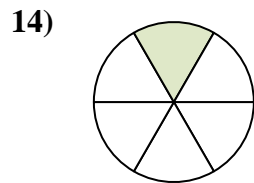
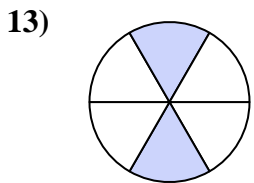
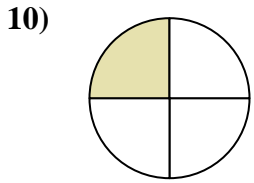
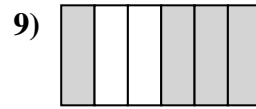
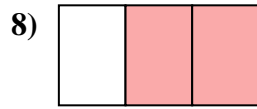
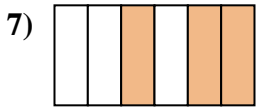
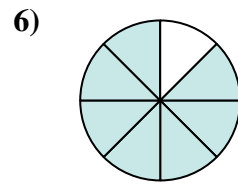
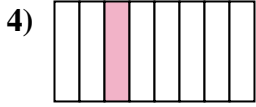
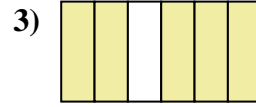
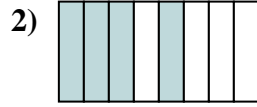

16. _____

17. _____

18. _____



Scrivi la frazione corrispondente alla parte colorata.



Risposte

1. 1/2

2. 4/8

3. 5/6

4. 1/8

5. 3/8

6. 7/8

7. 3/6

8. 2/3

9. 4/6

10. 1/4

11. 3/4

12. 2/8

13. 2/6

14. 1/6

15. 6/8


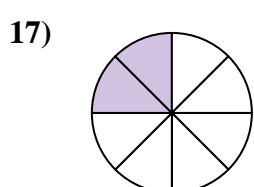
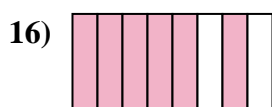
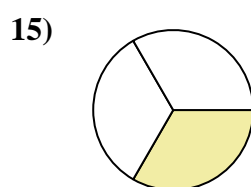
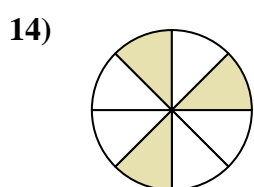
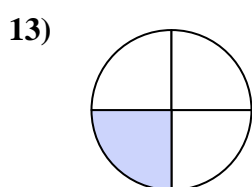
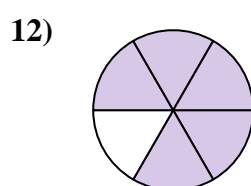

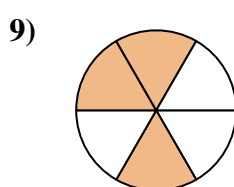
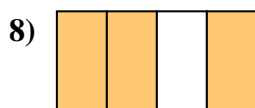
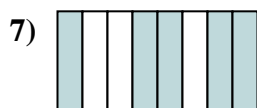
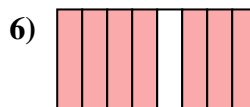
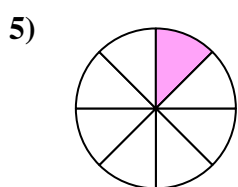
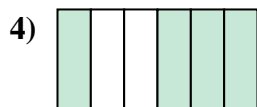
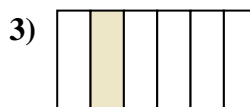
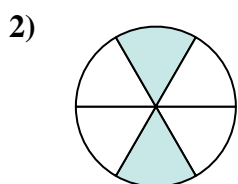

16. 5/8

17. 1/3

18. 2/4



Scrivi la frazione corrispondente alla parte colorata.


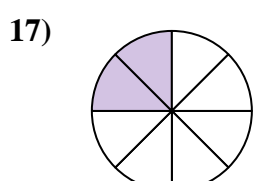
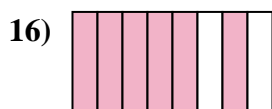
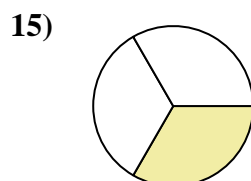
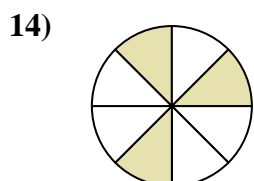
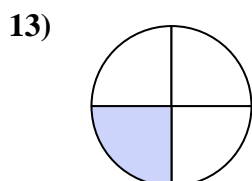
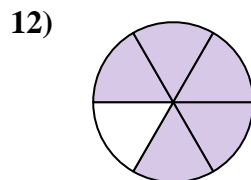

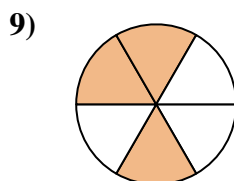
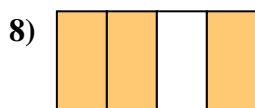
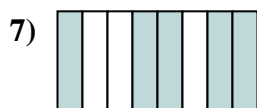
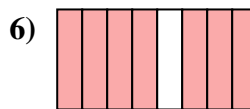
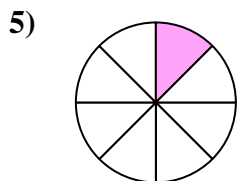
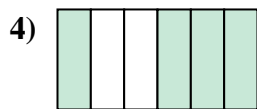
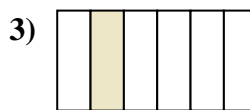
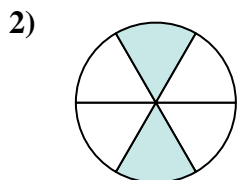



Risposte

1. _____
2. _____
3. _____
4. _____
5. _____
6. _____
7. _____
8. _____
9. _____
10. _____
11. _____
12. _____
13. _____
14. _____
15. _____
16. _____
17. _____
18. _____



Scrivi la frazione corrispondente alla parte colorata.



Risposte

1. 2/3

2. 2/6

3. 1/6

4. 4/6

5. 1/8

6. 7/8

7. 5/8

8. 3/4

9. 3/6

10. 4/8

11. 2/4

12. 5/6

13. 1/4

14. 3/8

15. 1/3

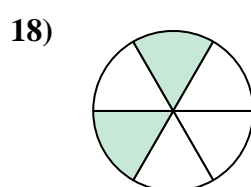
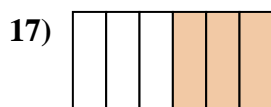

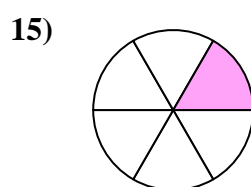
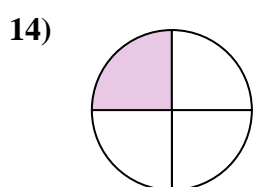

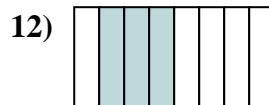
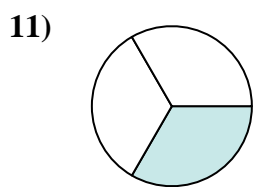

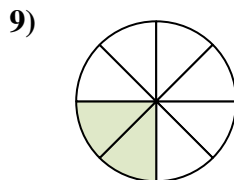
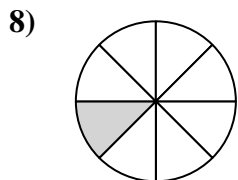
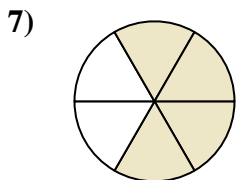
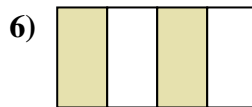
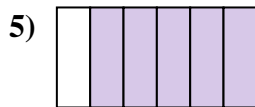
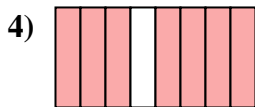
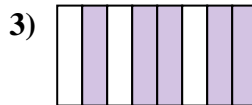
16. 6/8

17. 2/8

18. 1/2



Scrivi la frazione corrispondente alla parte colorata.



Risposte

1. _____

2. _____

3. _____

4. _____

5. _____

6. _____

7. _____

8. _____

9. _____

10. _____

11. _____

12. _____

13. _____

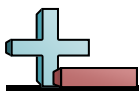
14. _____

15. _____

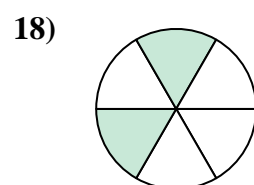
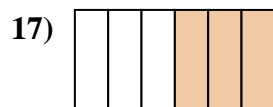

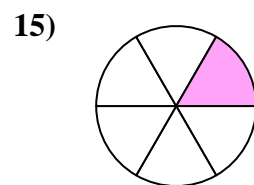
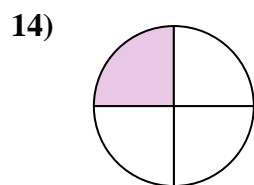

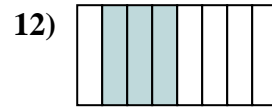
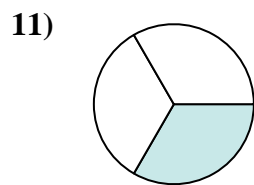
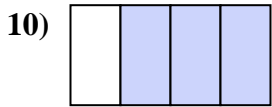
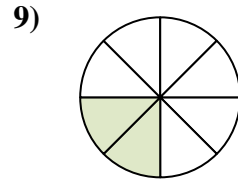
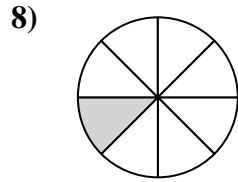
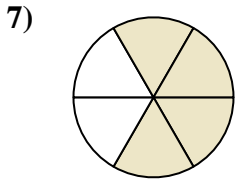
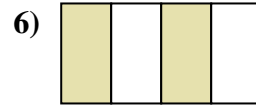
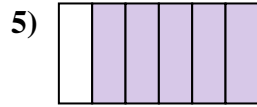
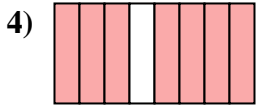
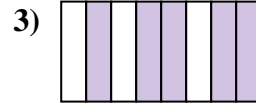
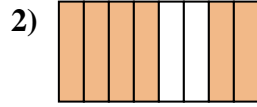
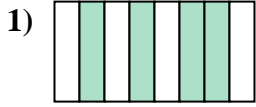
16. _____

17. _____

18. _____



Scrivi la frazione corrispondente alla parte colorata.



Risposte

1. 4/8

2. 6/8

3. 5/8

4. 7/8

5. 5/6

6. 2/4

7. 4/6

8. 1/8

9. 2/8

10. 3/4

11. 1/3

12. 3/8

13. 1/2

14. 1/4

15. 1/6

16. 2/3

17. 3/6

18. 2/6