

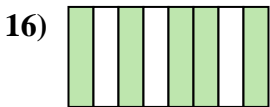
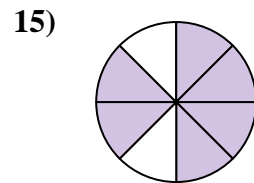
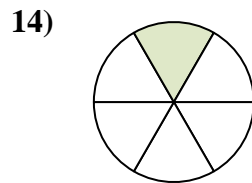
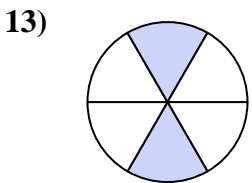

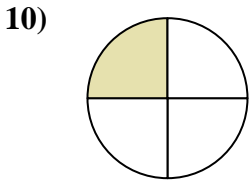
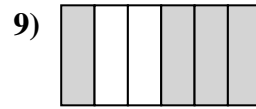
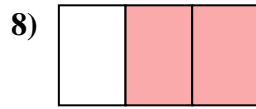
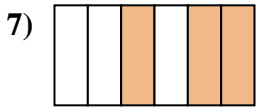
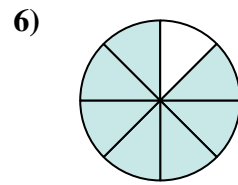
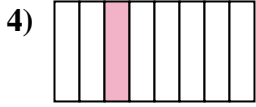
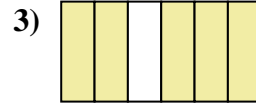
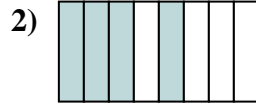





Scrivi la frazione corrispondente alla parte colorata.



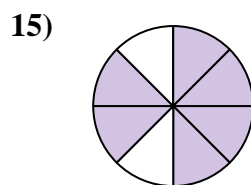
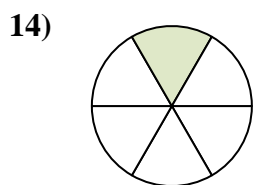
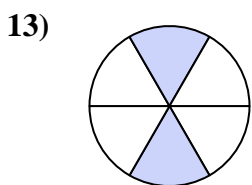
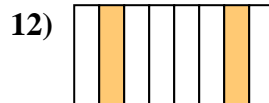

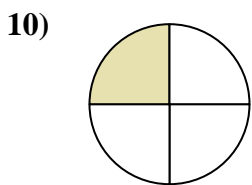
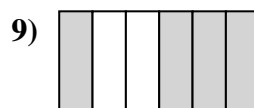

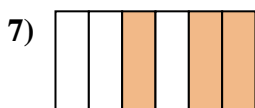
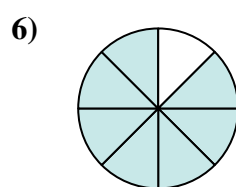
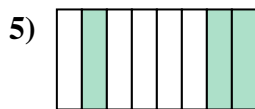
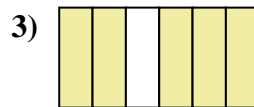



**Risposte**

1. \_\_\_\_\_
2. \_\_\_\_\_
3. \_\_\_\_\_
4. \_\_\_\_\_
5. \_\_\_\_\_
6. \_\_\_\_\_
7. \_\_\_\_\_
8. \_\_\_\_\_
9. \_\_\_\_\_
10. \_\_\_\_\_
11. \_\_\_\_\_
12. \_\_\_\_\_
13. \_\_\_\_\_
14. \_\_\_\_\_
15. \_\_\_\_\_
16. \_\_\_\_\_
17. \_\_\_\_\_
18. \_\_\_\_\_



Scrivi la frazione corrispondente alla parte colorata.



**Risposte**

1. 1/2

2. 4/8

3. 5/6

4. 1/8

5. 3/8

6. 7/8

7. 3/6

8. 2/3

9. 4/6

10. 1/4

11. 3/4

12. 2/8

13. 2/6

14. 1/6

15. 6/8

16. 5/8

17. 1/3

18. 2/4