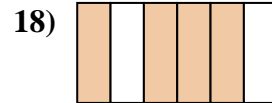
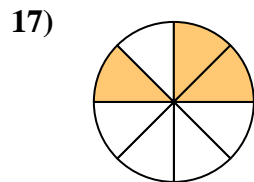
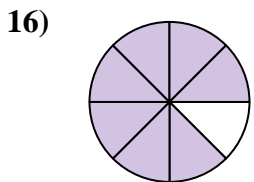
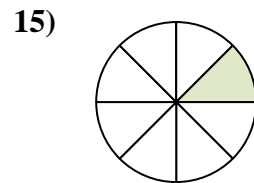
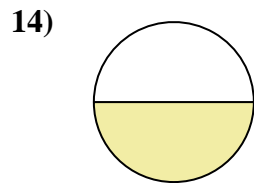
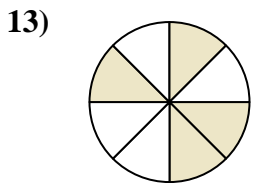
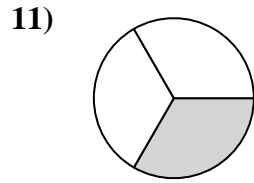
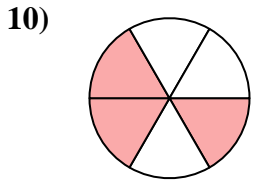
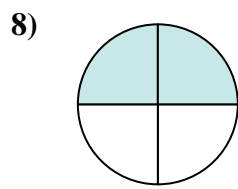
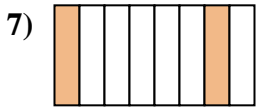
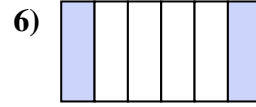
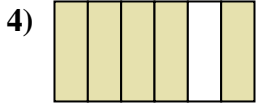
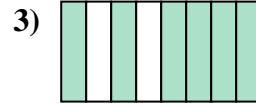
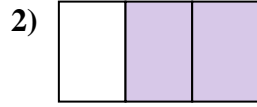




Scrivi la frazione corrispondente alla parte colorata.

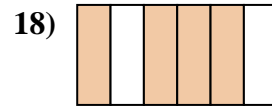
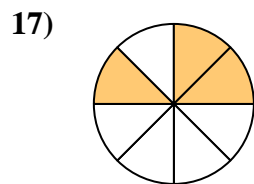
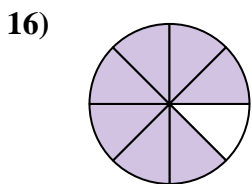
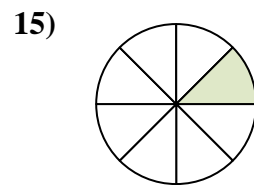
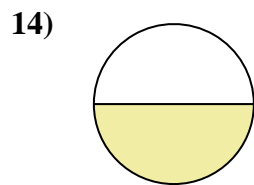
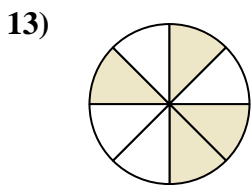
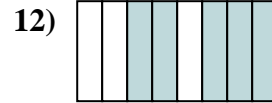
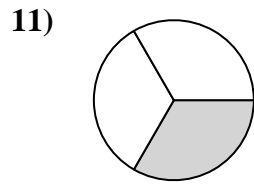
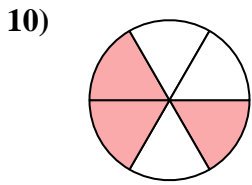
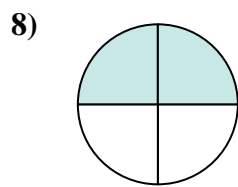
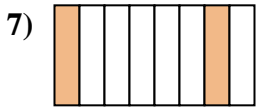
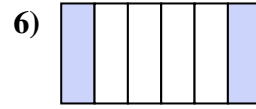
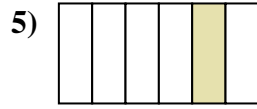
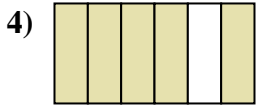
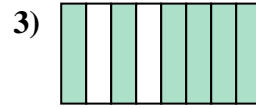
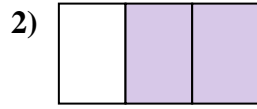
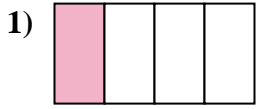


**Risposte**

1. \_\_\_\_\_
2. \_\_\_\_\_
3. \_\_\_\_\_
4. \_\_\_\_\_
5. \_\_\_\_\_
6. \_\_\_\_\_
7. \_\_\_\_\_
8. \_\_\_\_\_
9. \_\_\_\_\_
10. \_\_\_\_\_
11. \_\_\_\_\_
12. \_\_\_\_\_
13. \_\_\_\_\_
14. \_\_\_\_\_
15. \_\_\_\_\_
16. \_\_\_\_\_
17. \_\_\_\_\_
18. \_\_\_\_\_



Scrivi la frazione corrispondente alla parte colorata.



**Risposte**

1. 1/4

2. 2/3

3. 6/8

4. 5/6

5. 1/6

6. 2/6

7. 2/8

8. 2/4

9. 3/4

10. 3/6

11. 1/3

12. 5/8

13. 4/8

14. 1/2

15. 1/8

16. 7/8

17. 3/8

18. 4/6