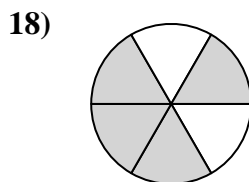
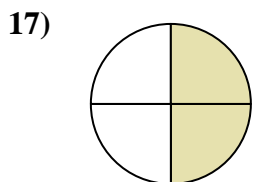
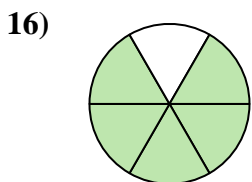
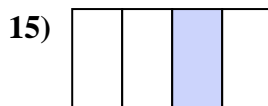
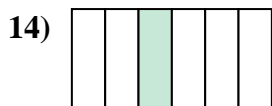
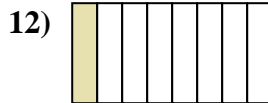
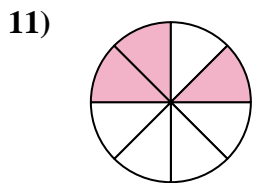
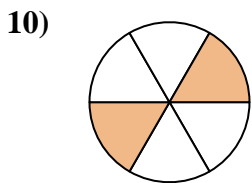
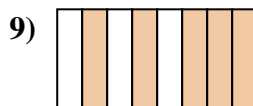
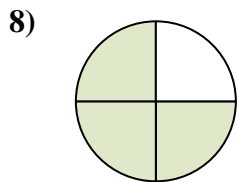
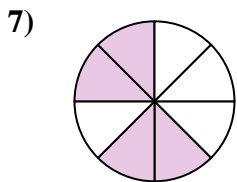
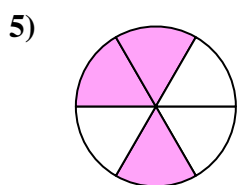

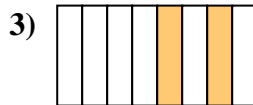
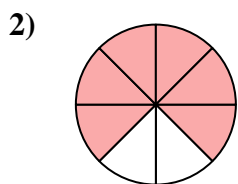





Scrivi la frazione corrispondente alla parte colorata.



**Risposte**

1. \_\_\_\_\_

2. \_\_\_\_\_

3. \_\_\_\_\_

4. \_\_\_\_\_

5. \_\_\_\_\_

6. \_\_\_\_\_

7. \_\_\_\_\_

8. \_\_\_\_\_

9. \_\_\_\_\_

10. \_\_\_\_\_

11. \_\_\_\_\_

12. \_\_\_\_\_

13. \_\_\_\_\_

14. \_\_\_\_\_

15. \_\_\_\_\_

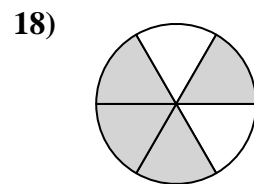
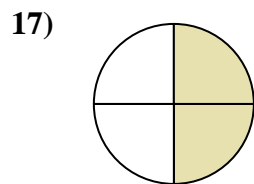
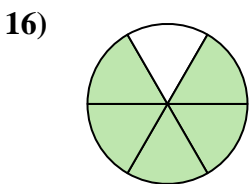

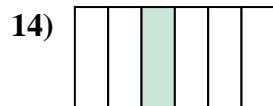
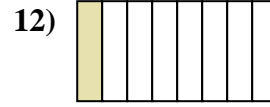
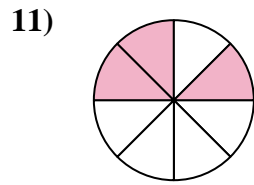
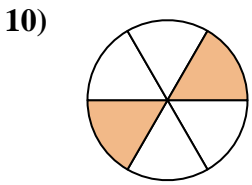
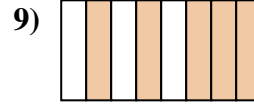
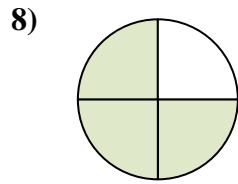
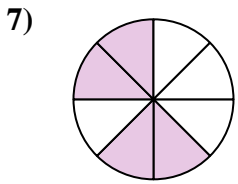
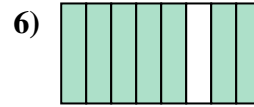
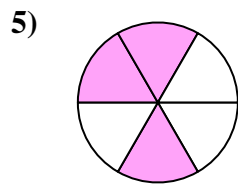

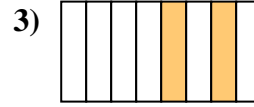
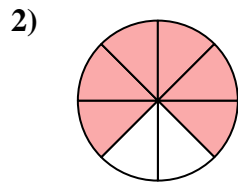

16. \_\_\_\_\_

17. \_\_\_\_\_

18. \_\_\_\_\_



Scrivi la frazione corrispondente alla parte colorata.



**Risposte**

1. 2/3

2. 6/8

3. 2/8

4. 1/2

5. 3/6

6. 7/8

7. 4/8

8. 3/4

9. 5/8

10. 2/6

11. 3/8

12. 1/8

13. 1/3

14. 1/6

15. 1/4

16. 5/6

17. 2/4

18. 4/6