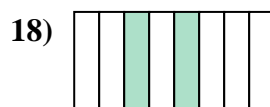
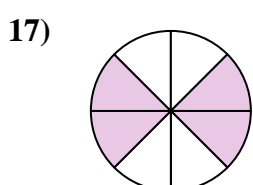
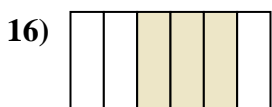
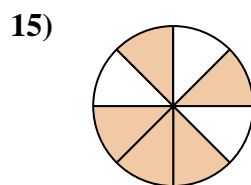
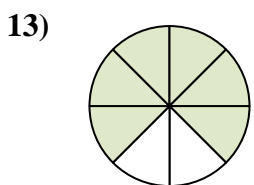
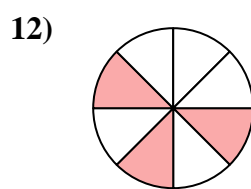

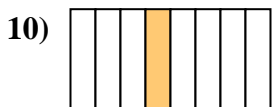

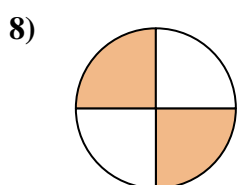
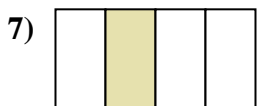

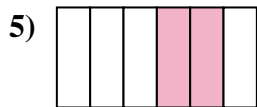
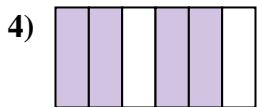
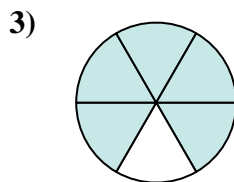
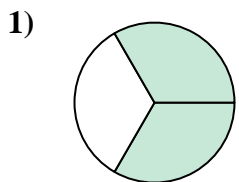




Scrivi la frazione corrispondente alla parte colorata.



Risposte

1. _____

2. _____

3. _____

4. _____

5. _____

6. _____

7. _____

8. _____

9. _____

10. _____

11. _____

12. _____

13. _____

14. _____

15. _____

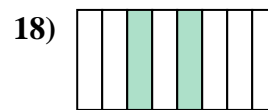
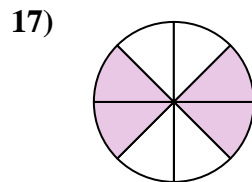
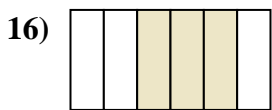
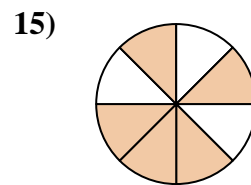
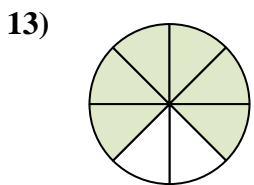
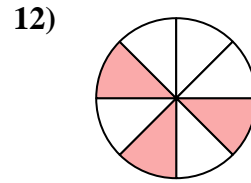

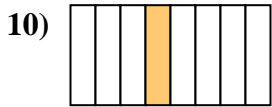
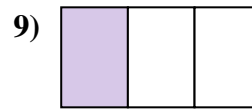
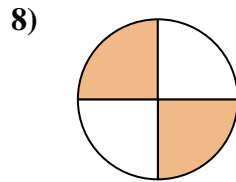
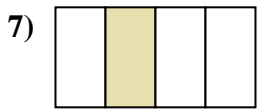
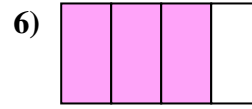
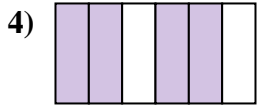
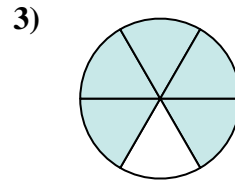
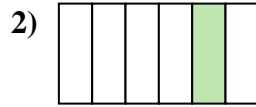
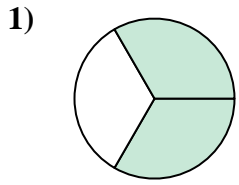
16. _____

17. _____

18. _____



Scrivi la frazione corrispondente alla parte colorata.



Risposte

1. 2/3

2. 1/6

3. 5/6

4. 4/6

5. 2/6

6. 3/4

7. 1/4

8. 2/4

9. 1/3

10. 1/8

11. 1/2

12. 3/8

13. 6/8

14. 7/8

15. 5/8

16. 3/6

17. 4/8

18. 2/8