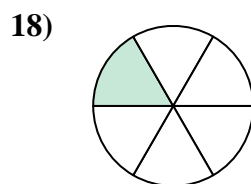

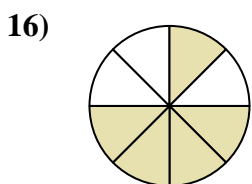
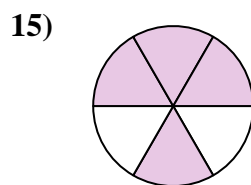
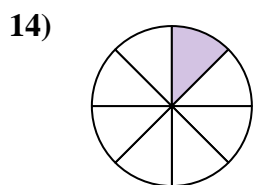
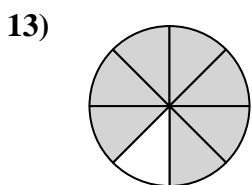

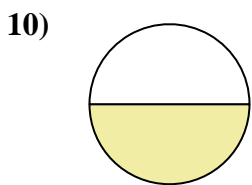
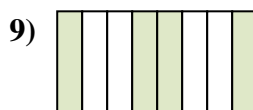
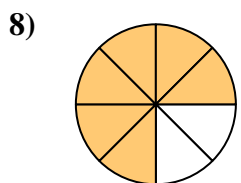
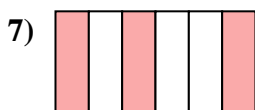
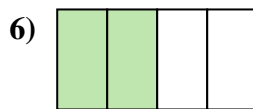
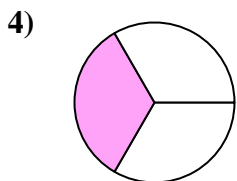
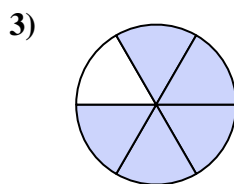
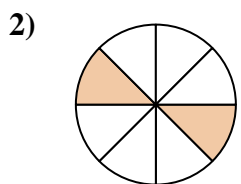





Scrivi la frazione corrispondente alla parte colorata.



Risposte

1. _____

2. _____

3. _____

4. _____

5. _____

6. _____

7. _____

8. _____

9. _____

10. _____

11. _____

12. _____

13. _____

14. _____

15. _____

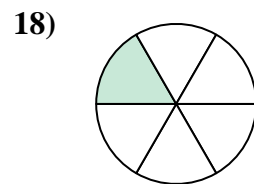

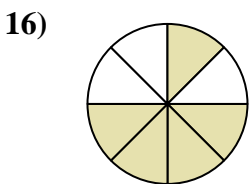
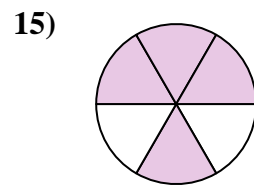
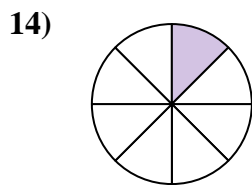
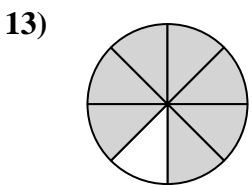

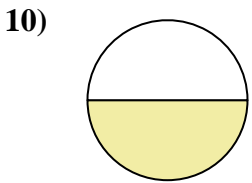
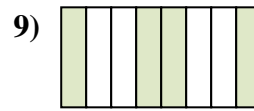
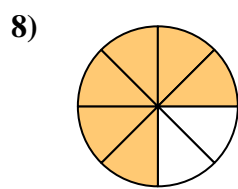
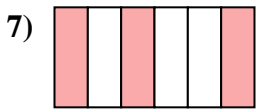

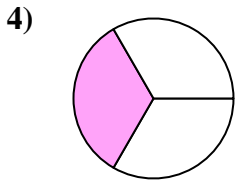
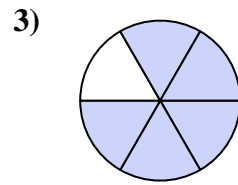
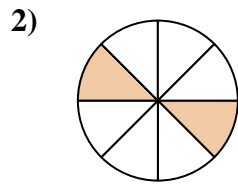
16. _____

17. _____

18. _____



Scrivi la frazione corrispondente alla parte colorata.



Risposte

1. 2/3

2. 2/8

3. 5/6

4. 1/3

5. 3/8

6. 2/4

7. 3/6

8. 6/8

9. 4/8

10. 1/2

11. 2/6

12. 3/4

13. 7/8

14. 1/8

15. 4/6

16. 5/8

17. 1/4

18. 1/6