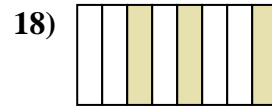
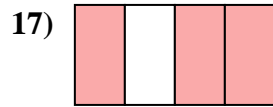

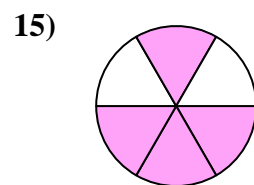

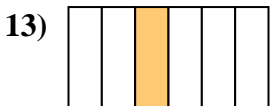
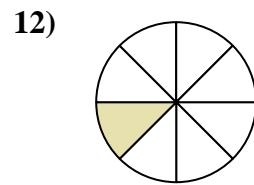
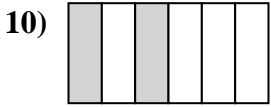
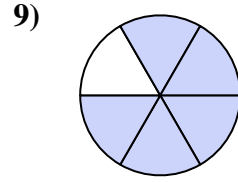
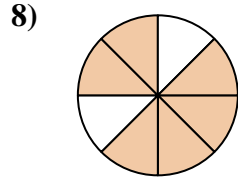
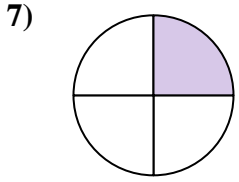
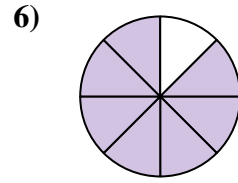
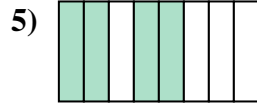
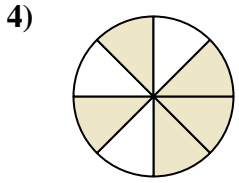
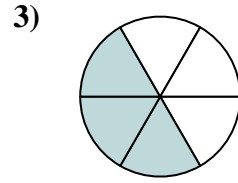
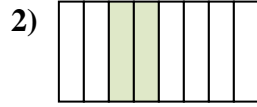
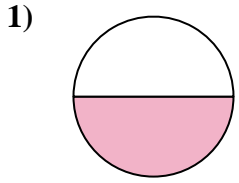




Scrivi la frazione corrispondente alla parte colorata.

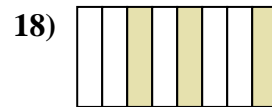
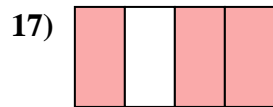

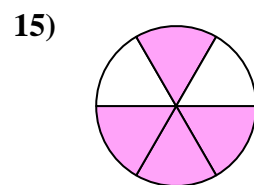

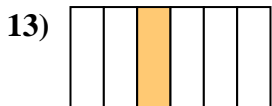
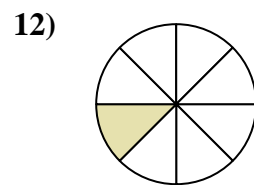
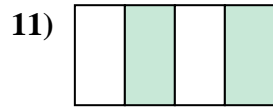
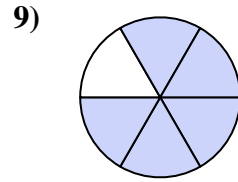
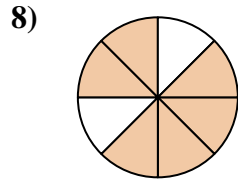
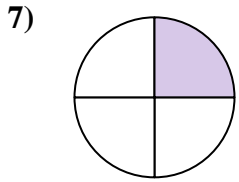
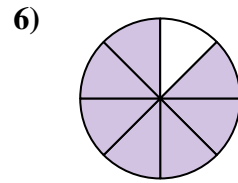
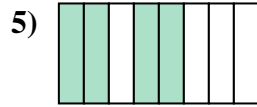
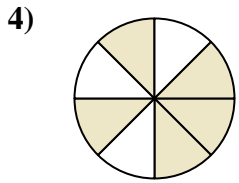
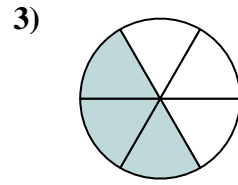
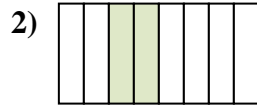
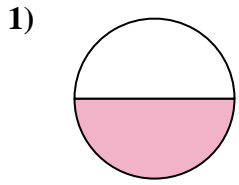


Risposte

1. _____
2. _____
3. _____
4. _____
5. _____
6. _____
7. _____
8. _____
9. _____
10. _____
11. _____
12. _____
13. _____
14. _____
15. _____
16. _____
17. _____
18. _____



Scrivi la frazione corrispondente alla parte colorata.



Risposte

1. 1/2

2. 2/8

3. 3/6

4. 5/8

5. 4/8

6. 7/8

7. 1/4

8. 6/8

9. 5/6

10. 2/6

11. 2/4

12. 1/8

13. 1/6

14. 1/3

15. 4/6

16. 2/3

17. 3/4

18. 3/8