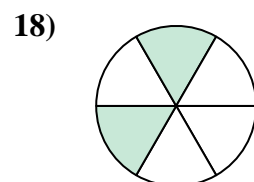

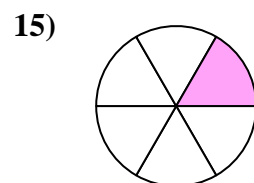
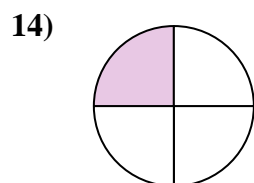

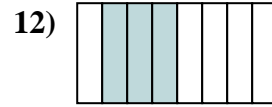
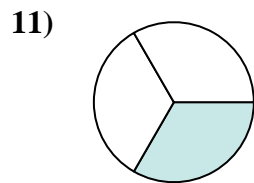
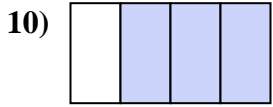
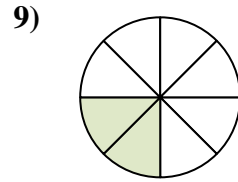
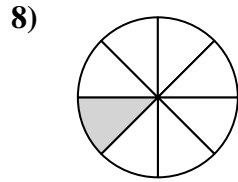
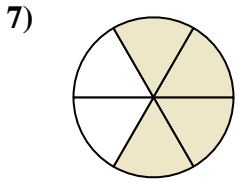
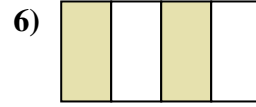
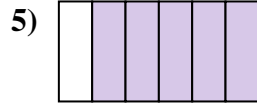
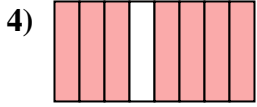
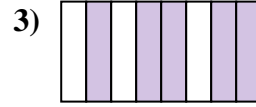
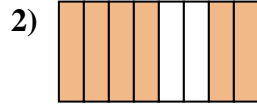
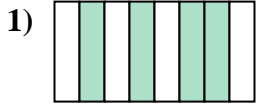




Scrivi la frazione corrispondente alla parte colorata.

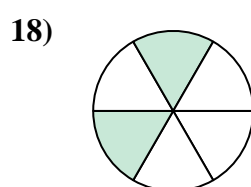
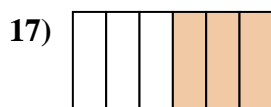

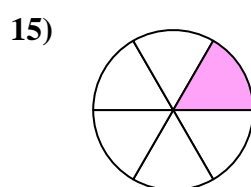
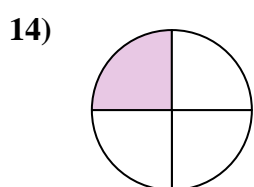

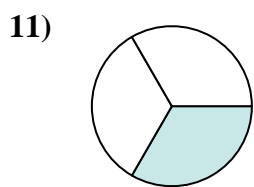

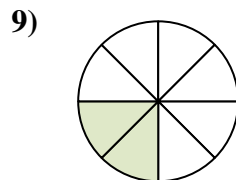
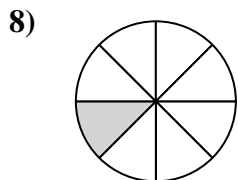
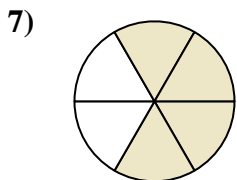
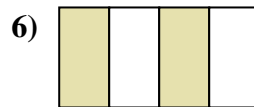
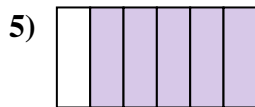
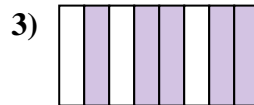
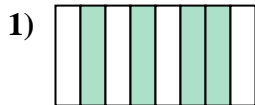


**Risposte**

1. \_\_\_\_\_
2. \_\_\_\_\_
3. \_\_\_\_\_
4. \_\_\_\_\_
5. \_\_\_\_\_
6. \_\_\_\_\_
7. \_\_\_\_\_
8. \_\_\_\_\_
9. \_\_\_\_\_
10. \_\_\_\_\_
11. \_\_\_\_\_
12. \_\_\_\_\_
13. \_\_\_\_\_
14. \_\_\_\_\_
15. \_\_\_\_\_
16. \_\_\_\_\_
17. \_\_\_\_\_
18. \_\_\_\_\_



Scrivi la frazione corrispondente alla parte colorata.



**Risposte**

1. 4/8

2. 6/8

3. 5/8

4. 7/8

5. 5/6

6. 2/4

7. 4/6

8. 1/8

9. 2/8

10. 3/4

11. 1/3

12. 3/8

13. 1/2

14. 1/4

15. 1/6

16. 2/3

17. 3/6

18. 2/6