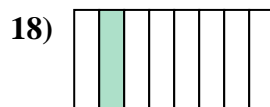
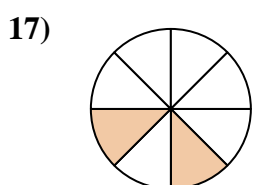
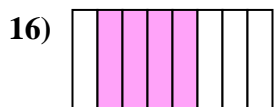
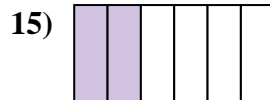
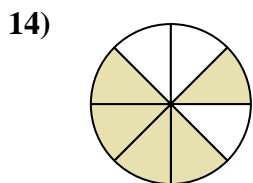
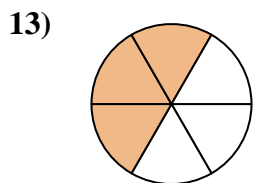


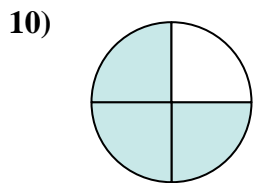
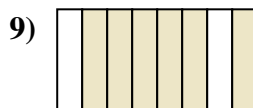
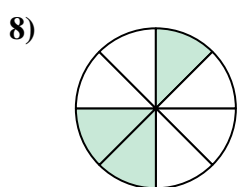

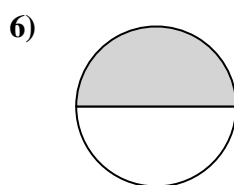
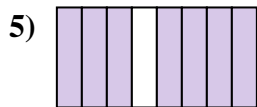
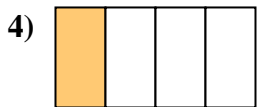

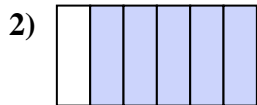





Scrivi la frazione corrispondente alla parte colorata.



**Risposte**

1. \_\_\_\_\_

2. \_\_\_\_\_

3. \_\_\_\_\_

4. \_\_\_\_\_

5. \_\_\_\_\_

6. \_\_\_\_\_

7. \_\_\_\_\_

8. \_\_\_\_\_

9. \_\_\_\_\_

10. \_\_\_\_\_

11. \_\_\_\_\_

12. \_\_\_\_\_

13. \_\_\_\_\_

14. \_\_\_\_\_

15. \_\_\_\_\_

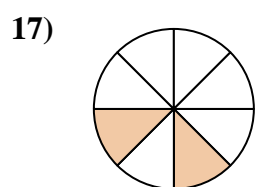
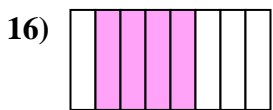
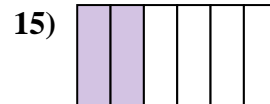
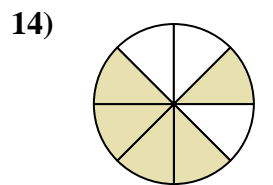
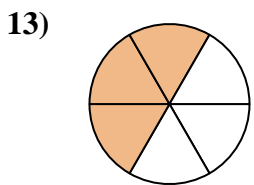
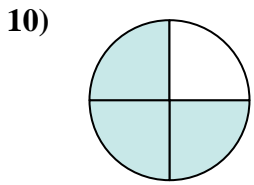
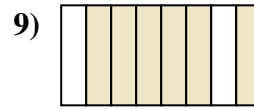
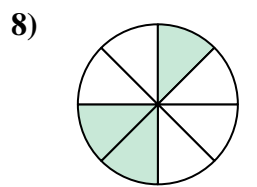
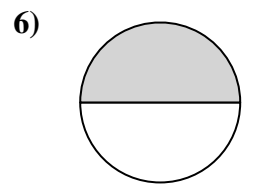
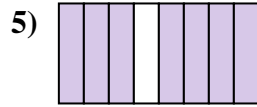
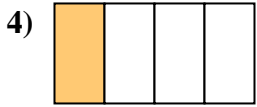
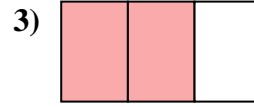
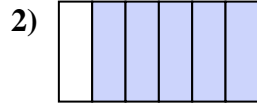
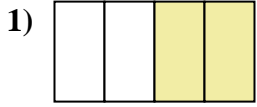
16. \_\_\_\_\_

17. \_\_\_\_\_

18. \_\_\_\_\_



Scrivi la frazione corrispondente alla parte colorata.



**Risposte**

1. 2/4

2. 5/6

3. 2/3

4. 1/4

5. 7/8

6. 1/2

7. 4/6

8. 3/8

9. 6/8

10. 3/4

11. 1/3

12. 1/6

13. 3/6

14. 5/8

15. 2/6

16. 4/8

17. 2/8

18. 1/8