


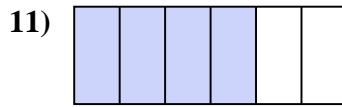

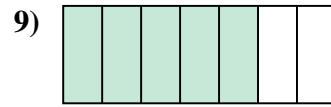
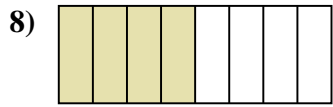
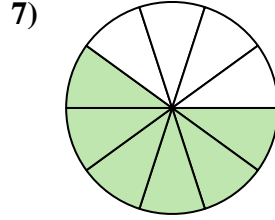
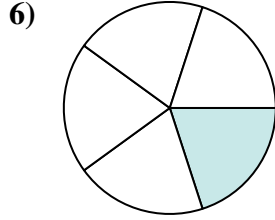
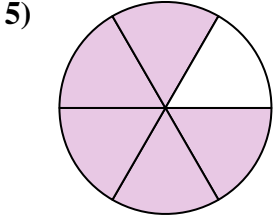


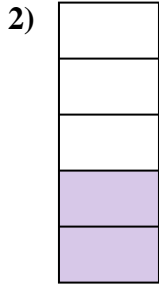





Determina se la parte colorata è "più", "meno" o "uguale" alla metà.



Risposte

1. _____

2. _____

3. _____

4. _____

5. _____

6. _____

7. _____

8. _____

9. _____

10. _____

11. _____

12. _____

13. _____

14. _____

15. _____

16. _____

17. _____

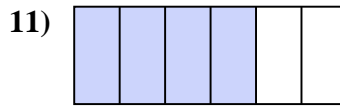
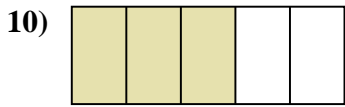
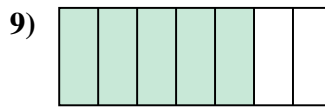
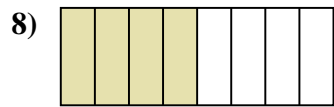
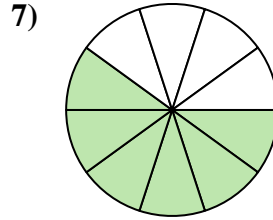
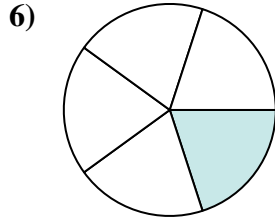
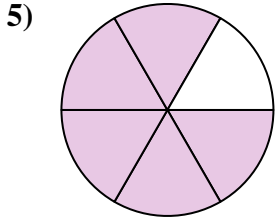


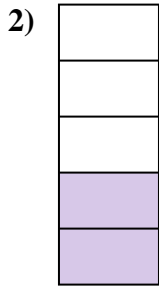

18. _____

19. _____

20. _____



Determina se la parte colorata è "più", "meno" o "uguale" alla metà.



Risposte

1. più

2. meno

3. più

4. meno

5. più

6. meno

7. più

8. uguale

9. più

10. più

11. più

12. uguale

13. meno

14. meno

15. meno

16. più

17. più

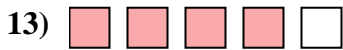
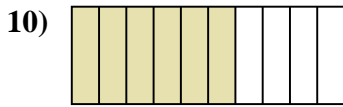
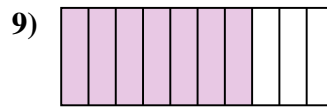
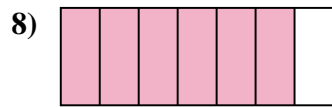
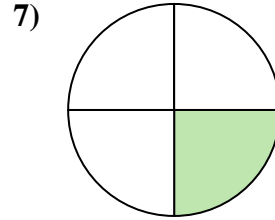
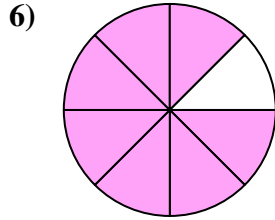
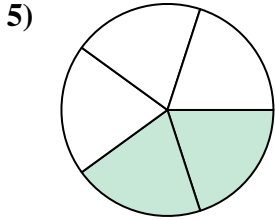



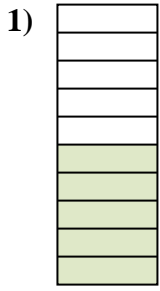
18. più

19. meno

20. meno



Determina se la parte colorata è "più", "meno" o "uguale" alla metà.



Risposte

1. _____

2. _____

3. _____

4. _____

5. _____

6. _____

7. _____

8. _____

9. _____

10. _____

11. _____

12. _____

13. _____

14. _____

15. _____

16. _____

17. _____


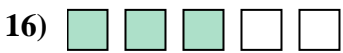
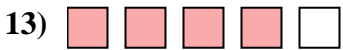
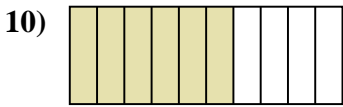
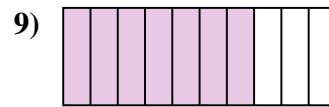
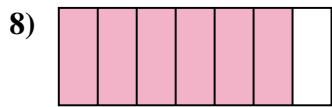
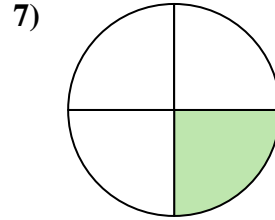
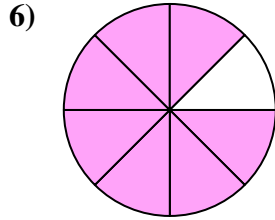
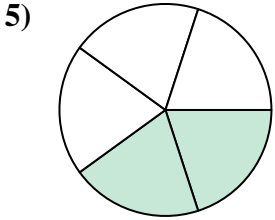



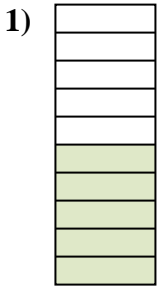
18. _____

19. _____

20. _____



Determina se la parte colorata è "più", "meno" o "uguale" alla metà.



Risposte

1. uguale

2. meno

3. più

4. meno

5. meno

6. più

7. meno

8. più

9. più

10. più

11. meno

12. più

13. più

14. più

15. meno

16. più

17. più

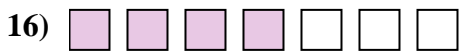

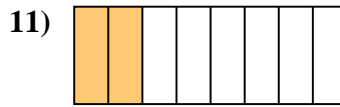
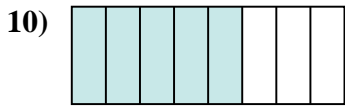
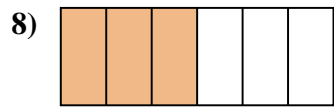
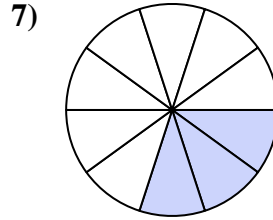
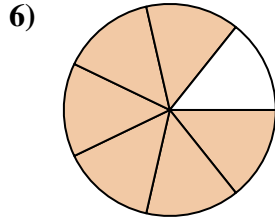
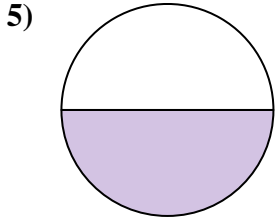

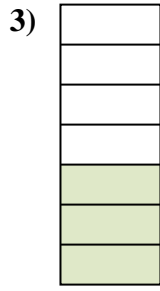
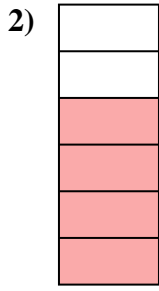
18. meno

19. meno

20. uguale



Determina se la parte colorata è "più", "meno" o "uguale" alla metà.



Risposte

1. _____

2. _____

3. _____

4. _____

5. _____

6. _____

7. _____

8. _____

9. _____

10. _____

11. _____

12. _____

13. _____

14. _____

15. _____

16. _____

17. _____


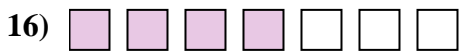

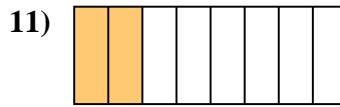
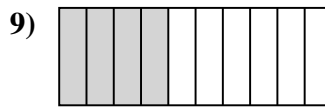
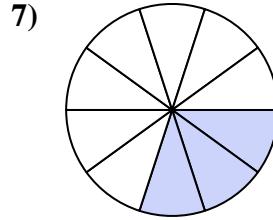
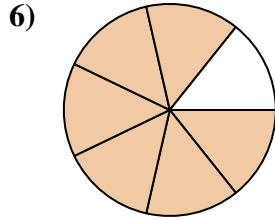
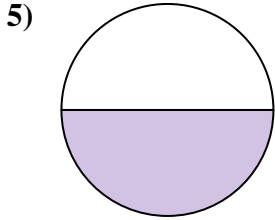

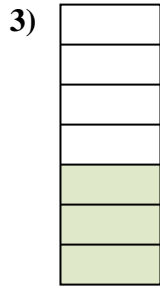
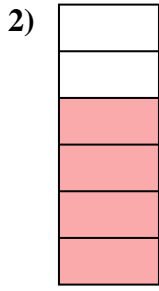
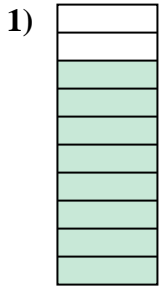
18. _____

19. _____

20. _____



Determina se la parte colorata è "più", "meno" o "uguale" alla metà.



Risposte

1. più

2. più

3. meno

4. uguale

5. uguale

6. più

7. meno

8. uguale

9. meno

10. più

11. meno

12. più

13. più

14. più

15. meno

16. più

17. più


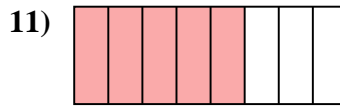

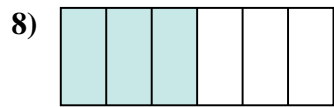
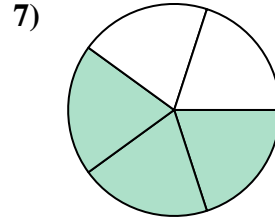
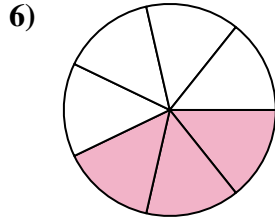
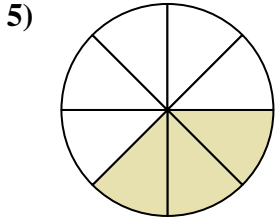

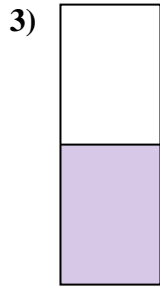
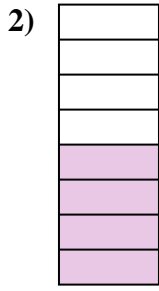
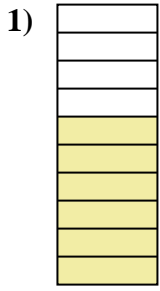
18. più

19. più

20. meno



Determina se la parte colorata è "più", "meno" o "uguale" alla metà.



Risposte

1. _____

2. _____

3. _____

4. _____

5. _____

6. _____

7. _____

8. _____

9. _____

10. _____

11. _____

12. _____

13. _____

14. _____

15. _____

16. _____

17. _____


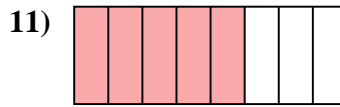

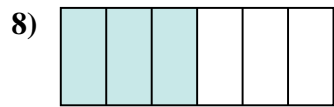
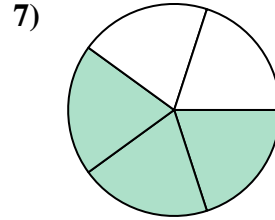
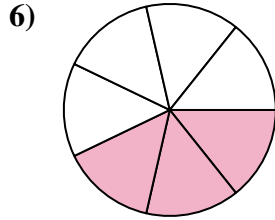
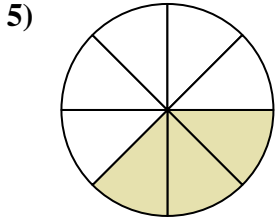

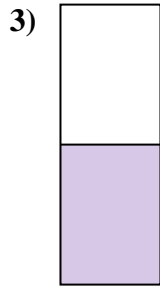

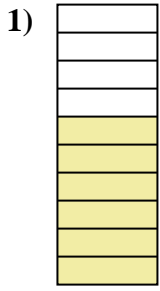
18. _____

19. _____

20. _____



Determina se la parte colorata è "più", "meno" o "uguale" alla metà.



Risposte

1. più

2. uguale

3. uguale

4. meno

5. meno

6. meno

7. più

8. uguale

9. uguale

10. più

11. più

12. più

13. meno

14. più

15. meno

16. più

17. più





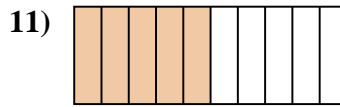
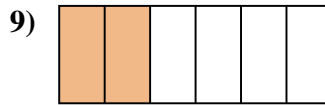
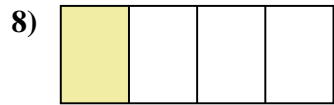
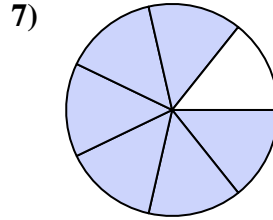
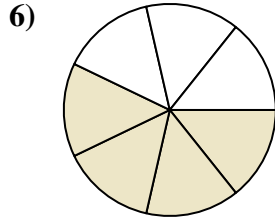
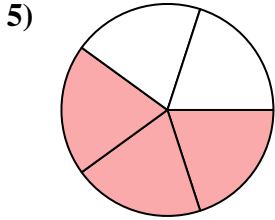




18. più

19. uguale

20. meno



Determina se la parte colorata è "più", "meno" o "uguale" alla metà.



Risposte

1. _____

2. _____

3. _____

4. _____

5. _____

6. _____

7. _____

8. _____

9. _____

10. _____

11. _____

12. _____

13. _____

14. _____

15. _____

16. _____

17. _____




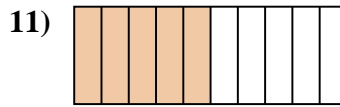
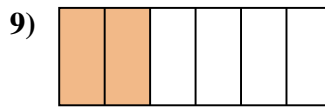
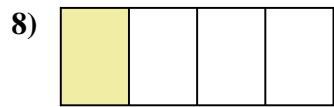
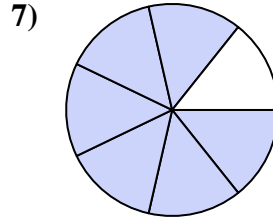
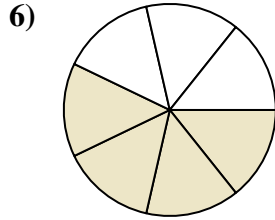
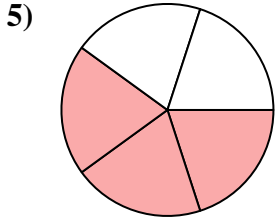



18. _____

19. _____

20. _____



Determina se la parte colorata è "più", "meno" o "uguale" alla metà.



Risposte

1. meno

2. più

3. uguale

4. più

5. più

6. più

7. più

8. meno

9. meno

10. uguale

11. uguale

12. meno

13. uguale

14. meno

15. più

16. uguale

17. più

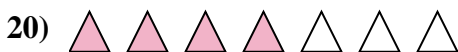



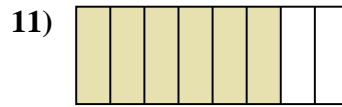
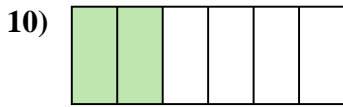
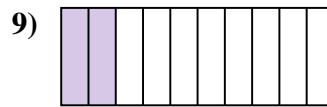
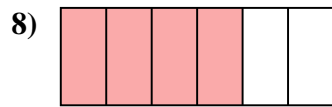
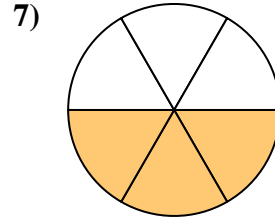
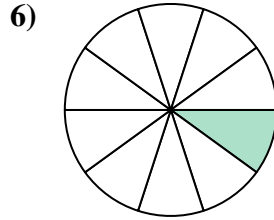
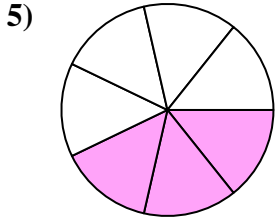


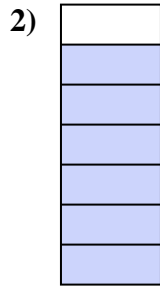

18. meno

19. più

20. più



Determina se la parte colorata è "più", "meno" o "uguale" alla metà.



Risposte

1. _____

2. _____

3. _____

4. _____

5. _____

6. _____

7. _____

8. _____

9. _____

10. _____

11. _____

12. _____

13. _____

14. _____

15. _____

16. _____

17. _____



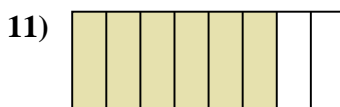

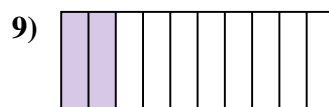

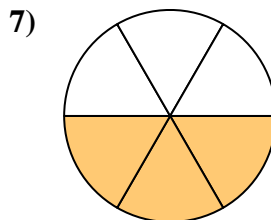
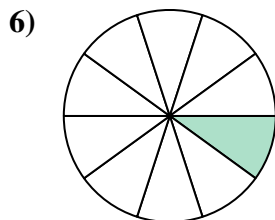
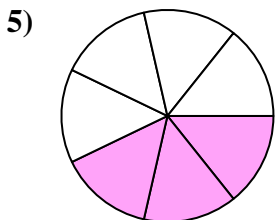


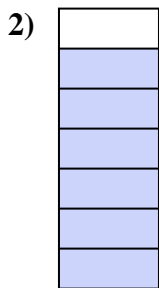

18. _____

19. _____

20. _____



Determina se la parte colorata è "più", "meno" o "uguale" alla metà.



Risposte

1. più

2. più

3. meno

4. meno

5. meno

6. meno

7. uguale

8. più

9. meno

10. meno

11. più

12. più

13. meno

14. uguale

15. uguale

16. più

17. meno

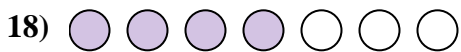
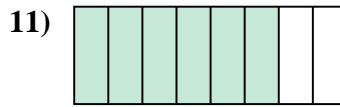
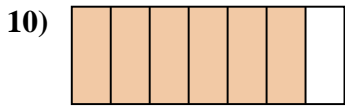
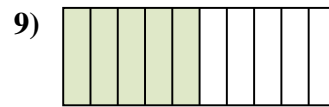
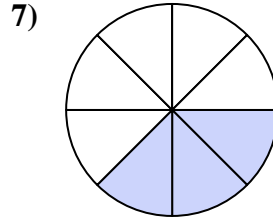
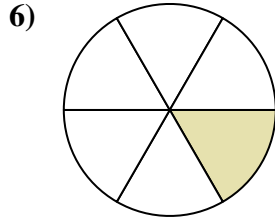
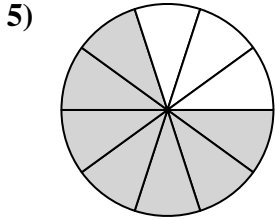
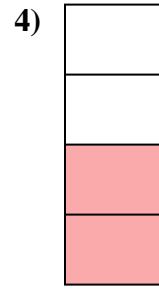


18. meno

19. uguale

20. più



Determina se la parte colorata è "più", "meno" o "uguale" alla metà.



Risposte

1. _____

2. _____

3. _____

4. _____

5. _____

6. _____

7. _____

8. _____

9. _____

10. _____

11. _____

12. _____

13. _____

14. _____

15. _____

16. _____

17. _____

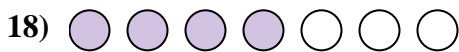
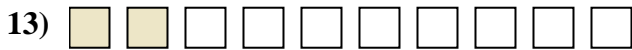

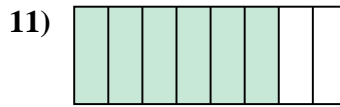
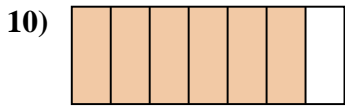
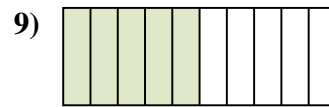
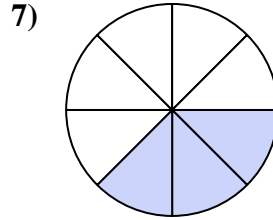
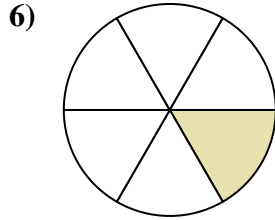
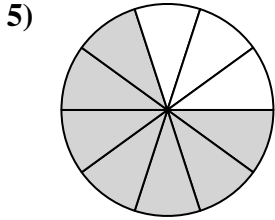
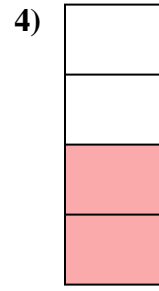


18. _____

19. _____

20. _____



Determina se la parte colorata è "più", "meno" o "uguale" alla metà.



Risposte

1. meno

2. più

3. meno

4. uguale

5. più

6. meno

7. meno

8. più

9. uguale

10. più

11. più

12. uguale

13. meno

14. più

15. meno

16. uguale

17. meno

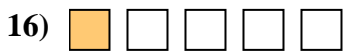
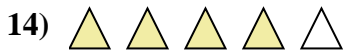


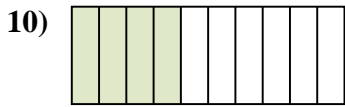
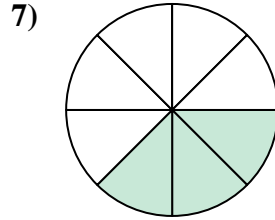
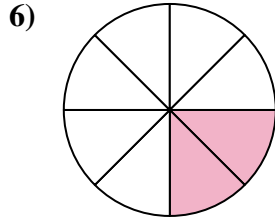
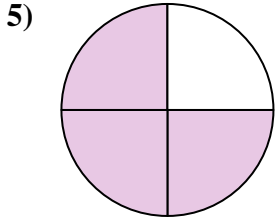


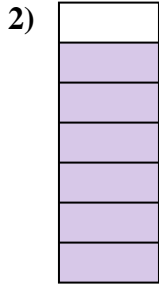
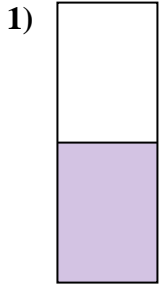
18. più

19. più

20. più



Determina se la parte colorata è "più", "meno" o "uguale" alla metà.



Risposte

1. _____

2. _____

3. _____

4. _____

5. _____

6. _____

7. _____

8. _____

9. _____

10. _____

11. _____

12. _____

13. _____

14. _____

15. _____

16. _____

17. _____




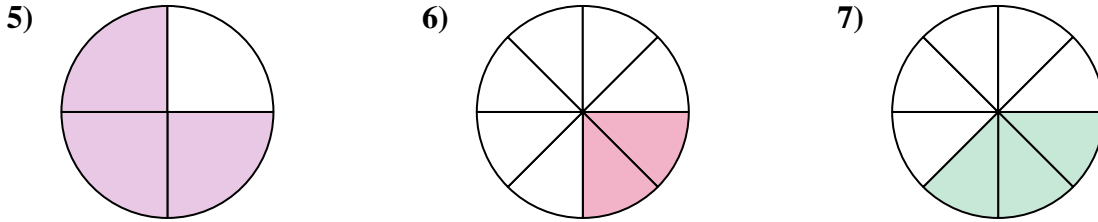
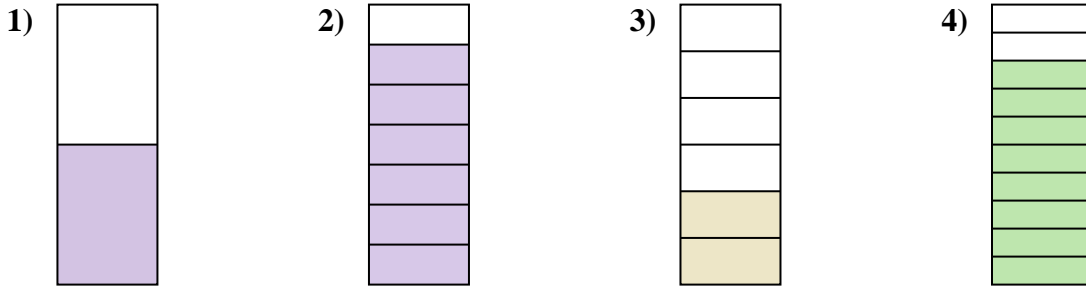
18. _____

19. _____

20. _____



Determina se la parte colorata è "più", "meno" o "uguale" alla metà.



Risposte

1. uguale

2. più

3. meno

4. più

5. più

6. meno

7. meno

8. uguale

9. più

10. meno

11. più

12. meno

13. meno

14. più

15. più

16. meno

17. meno

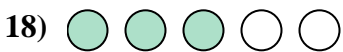

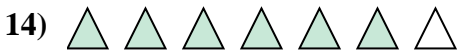

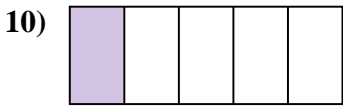
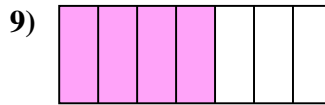
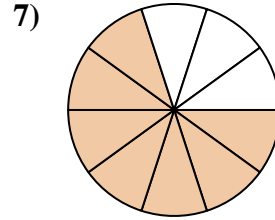
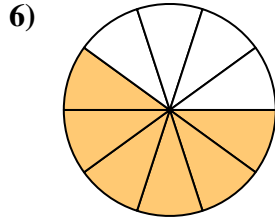
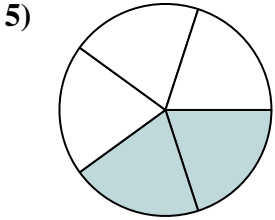
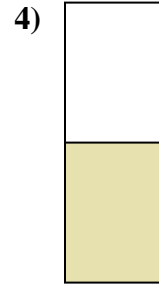
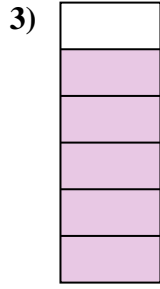
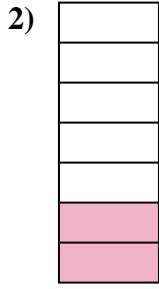
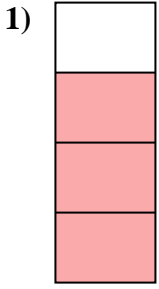
18. meno

19. uguale

20. più



Determina se la parte colorata è "più", "meno" o "uguale" alla metà.



Risposte

1. _____

2. _____

3. _____

4. _____

5. _____

6. _____

7. _____

8. _____

9. _____

10. _____

11. _____

12. _____

13. _____

14. _____

15. _____

16. _____

17. _____

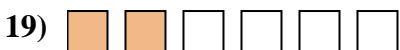
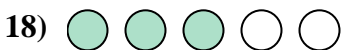
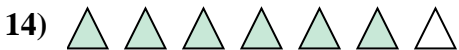

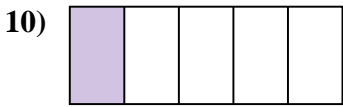
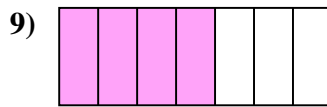
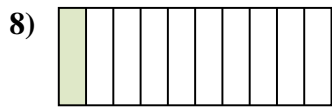
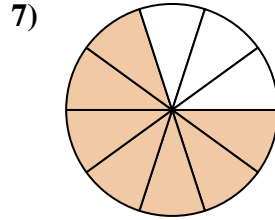
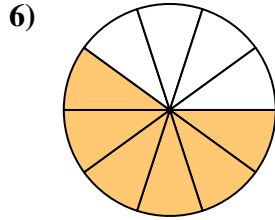
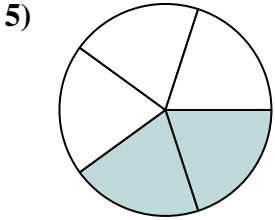
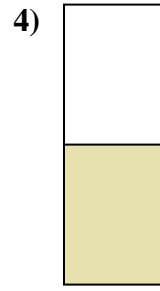
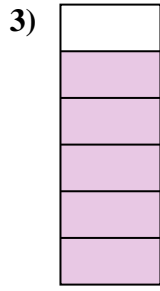
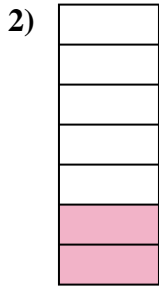
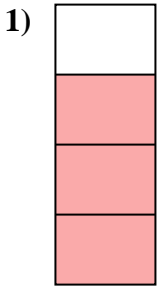
18. _____

19. _____

20. _____



Determina se la parte colorata è "più", "meno" o "uguale" alla metà.



Risposte

1. più

2. meno

3. più

4. uguale

5. meno

6. più

7. più

8. meno

9. più

10. meno

11. più

12. più

13. più

14. più

15. meno

16. più

17. meno

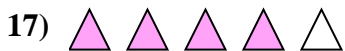

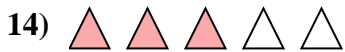
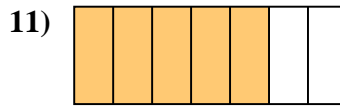
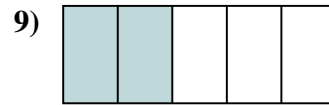
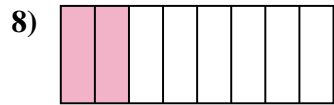
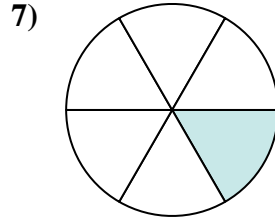
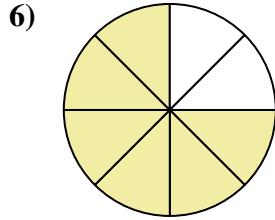
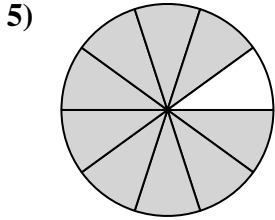


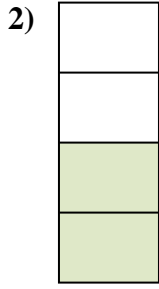
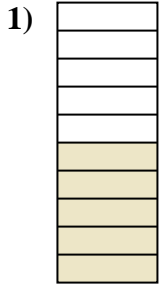
18. più

19. meno

20. più



Determina se la parte colorata è "più", "meno" o "uguale" alla metà.



Risposte

1. _____

2. _____

3. _____

4. _____

5. _____

6. _____

7. _____

8. _____

9. _____

10. _____

11. _____

12. _____

13. _____

14. _____

15. _____

16. _____

17. _____


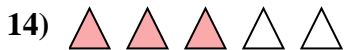
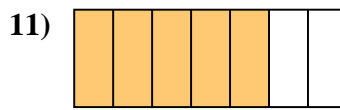
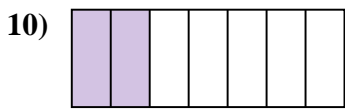
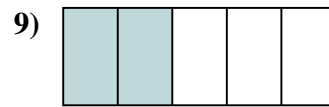
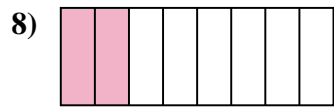
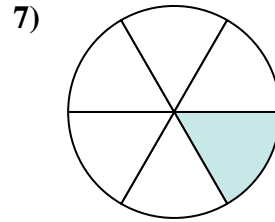
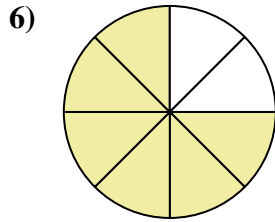
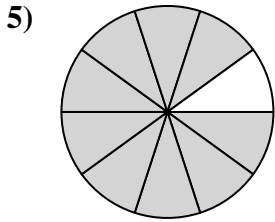



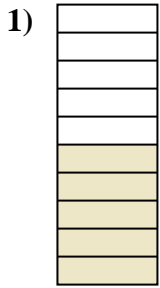
18. _____

19. _____

20. _____



Determina se la parte colorata è "più", "meno" o "uguale" alla metà.



Risposte

1. uguale

2. uguale

3. meno

4. meno

5. più

6. più

7. meno

8. meno

9. meno

10. meno

11. più

12. uguale

13. meno

14. più

15. più

16. meno

17. più

18. meno

19. uguale

20. meno