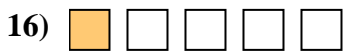
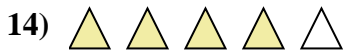


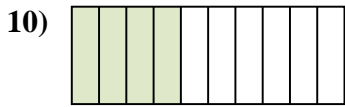
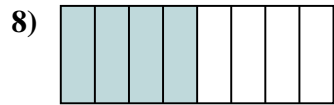
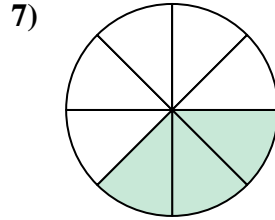
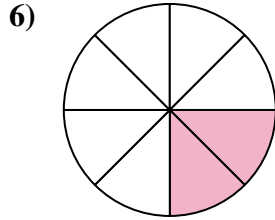
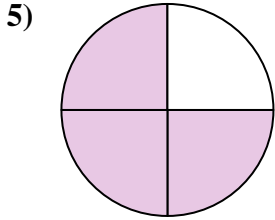


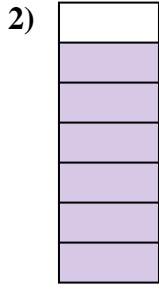
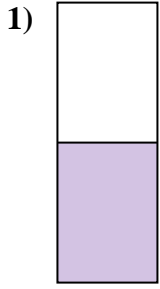




Determina se la parte colorata è "più", "meno" o "uguale" alla metà.



**Risposte**

1. \_\_\_\_\_

2. \_\_\_\_\_

3. \_\_\_\_\_

4. \_\_\_\_\_

5. \_\_\_\_\_

6. \_\_\_\_\_

7. \_\_\_\_\_

8. \_\_\_\_\_

9. \_\_\_\_\_

10. \_\_\_\_\_

11. \_\_\_\_\_

12. \_\_\_\_\_

13. \_\_\_\_\_

14. \_\_\_\_\_

15. \_\_\_\_\_

16. \_\_\_\_\_

17. \_\_\_\_\_


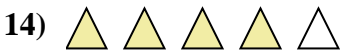

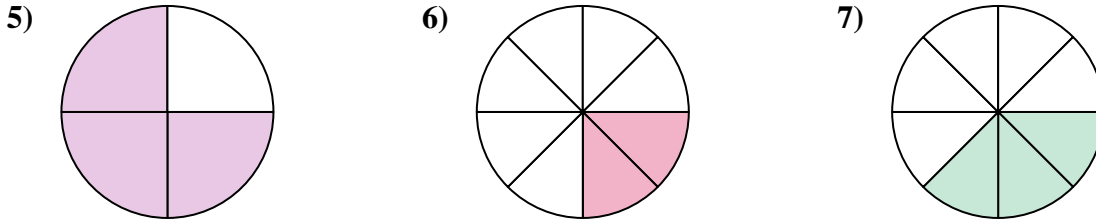
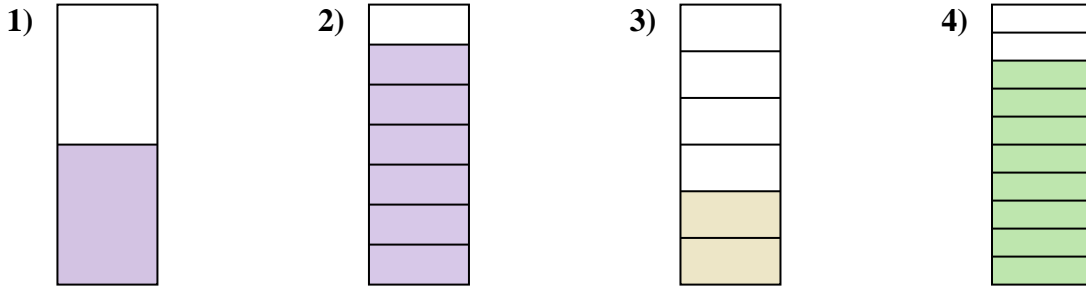
18. \_\_\_\_\_

19. \_\_\_\_\_

20. \_\_\_\_\_



Determina se la parte colorata è "più", "meno" o "uguale" alla metà.



**Risposte**

1. uguale

2. più

3. meno

4. più

5. più

6. meno

7. meno

8. uguale

9. più

10. meno

11. più

12. meno

13. meno

14. più

15. più

16. meno

17. meno

18. meno

19. uguale

20. più