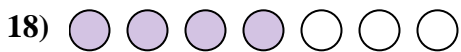


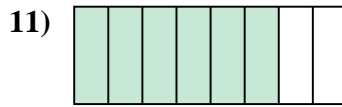
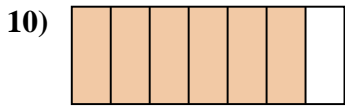
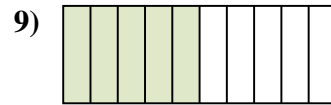

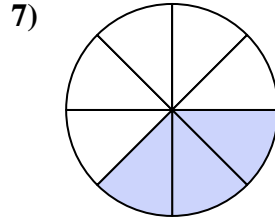
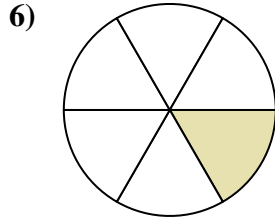
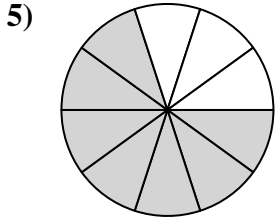







Determina se la parte colorata è "più", "meno" o "uguale" alla metà.



Risposte

1. _____

2. _____

3. _____

4. _____

5. _____

6. _____

7. _____

8. _____

9. _____

10. _____

11. _____

12. _____

13. _____

14. _____

15. _____

16. _____

17. _____

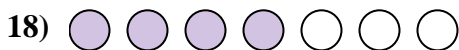
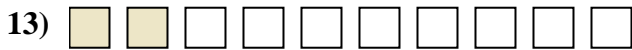

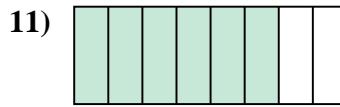
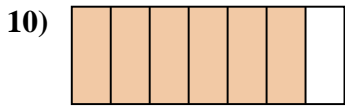
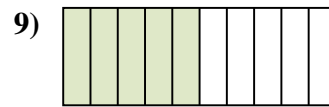
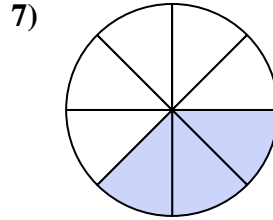
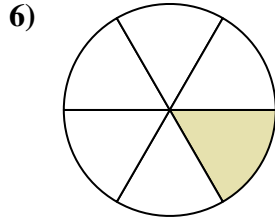
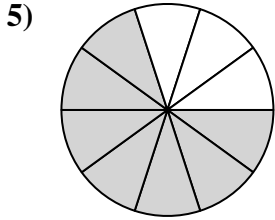
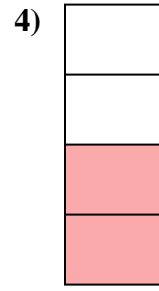


18. _____

19. _____

20. _____



Determina se la parte colorata è "più", "meno" o "uguale" alla metà.



Risposte

1. meno

2. più

3. meno

4. uguale

5. più

6. meno

7. meno

8. più

9. uguale

10. più

11. più

12. uguale

13. meno

14. più

15. meno

16. uguale

17. meno

18. più

19. più

20. più