

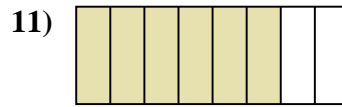
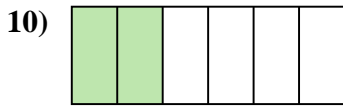
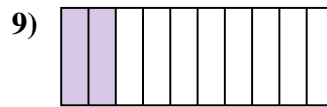
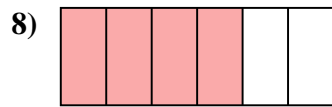
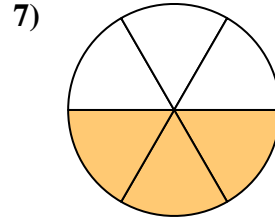
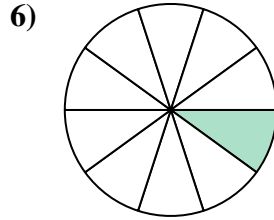
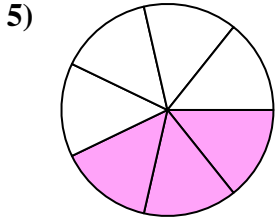


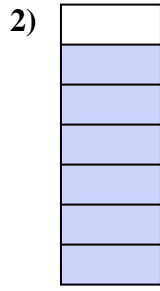





Determina se la parte colorata è "più", "meno" o "uguale" alla metà.



**Risposte**

1. \_\_\_\_\_

2. \_\_\_\_\_

3. \_\_\_\_\_

4. \_\_\_\_\_

5. \_\_\_\_\_

6. \_\_\_\_\_

7. \_\_\_\_\_

8. \_\_\_\_\_

9. \_\_\_\_\_

10. \_\_\_\_\_

11. \_\_\_\_\_

12. \_\_\_\_\_

13. \_\_\_\_\_

14. \_\_\_\_\_

15. \_\_\_\_\_

16. \_\_\_\_\_

17. \_\_\_\_\_



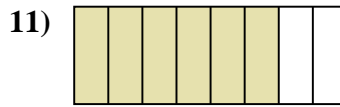

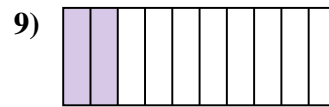
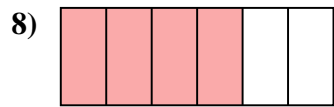
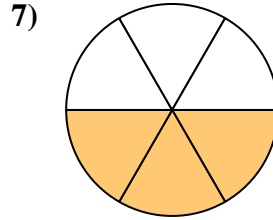
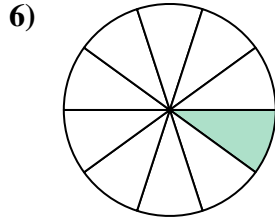
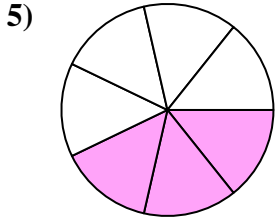


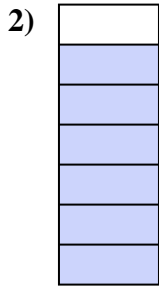

18. \_\_\_\_\_

19. \_\_\_\_\_

20. \_\_\_\_\_



Determina se la parte colorata è "più", "meno" o "uguale" alla metà.



Risposte

1. più

2. più

3. meno

4. meno

5. meno

6. meno

7. uguale

8. più

9. meno

10. meno

11. più

12. più

13. meno

14. uguale

15. uguale

16. più

17. meno

18. meno

19. uguale

20. più