


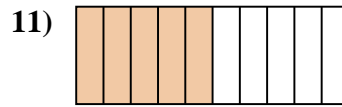
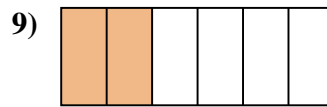

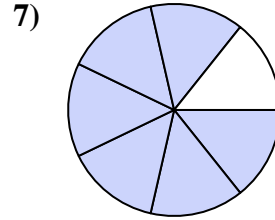
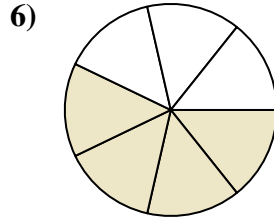
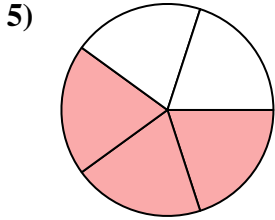







Determina se la parte colorata è "più", "meno" o "uguale" alla metà.



Risposte

1. _____

2. _____

3. _____

4. _____

5. _____

6. _____

7. _____

8. _____

9. _____

10. _____

11. _____

12. _____

13. _____

14. _____

15. _____

16. _____

17. _____



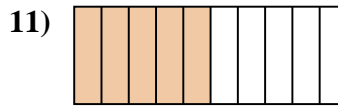
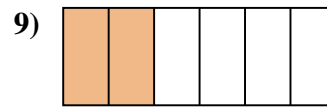
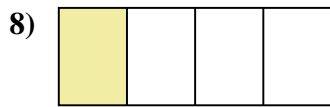
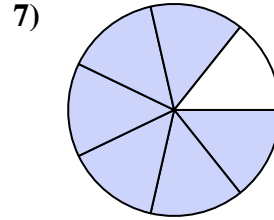
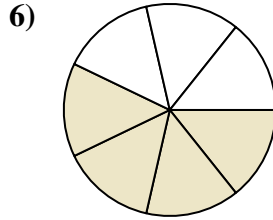
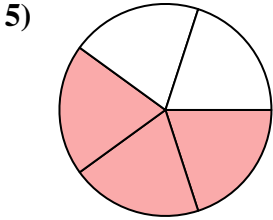
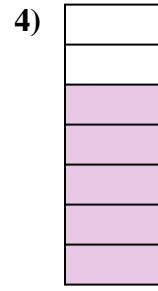


18. _____

19. _____

20. _____



Determina se la parte colorata è "più", "meno" o "uguale" alla metà.



Risposte

1. meno

2. più

3. uguale

4. più

5. più

6. più

7. più

8. meno

9. meno

10. uguale

11. uguale

12. meno

13. uguale

14. meno

15. più

16. uguale

17. più

18. meno

19. più

20. più