
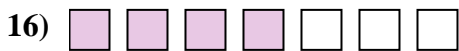

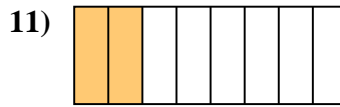
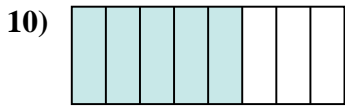
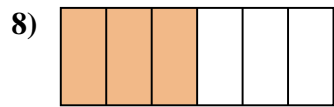
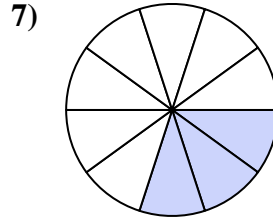
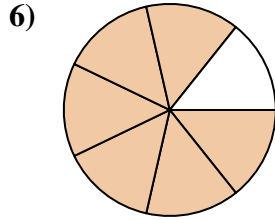
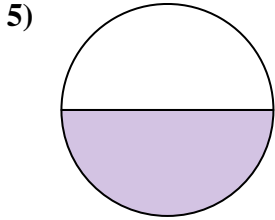

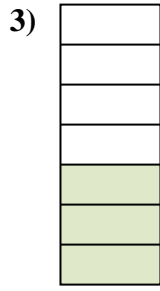
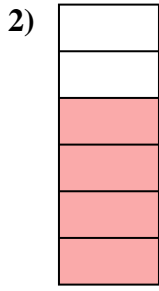
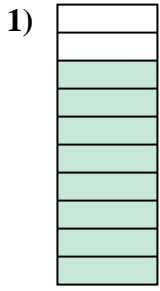




Determina se la parte colorata è "più", "meno" o "uguale" alla metà.



Risposte

1. _____

2. _____

3. _____

4. _____

5. _____

6. _____

7. _____

8. _____

9. _____

10. _____

11. _____

12. _____

13. _____

14. _____

15. _____

16. _____

17. _____


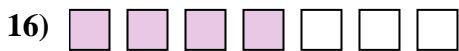

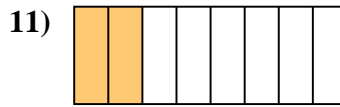
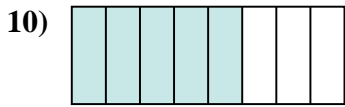
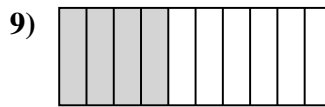
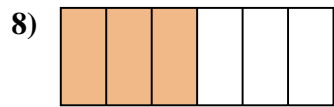
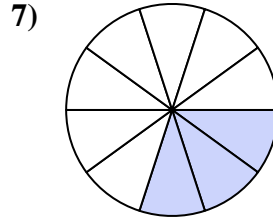
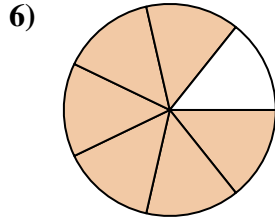
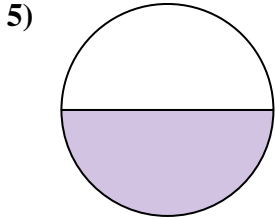

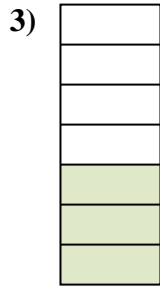
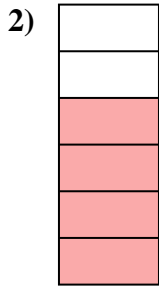
18. _____

19. _____

20. _____



Determina se la parte colorata è "più", "meno" o "uguale" alla metà.



Risposte

1. più

2. più

3. meno

4. uguale

5. uguale

6. più

7. meno

8. uguale

9. meno

10. più

11. meno

12. più

13. più

14. più

15. meno

16. più

17. più

18. più

19. più

20. meno