
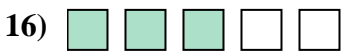

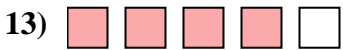
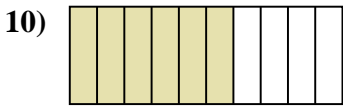
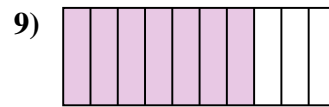
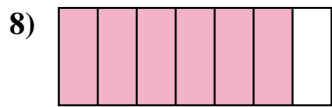
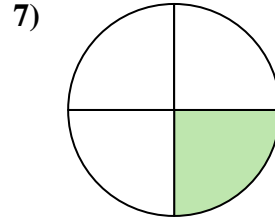
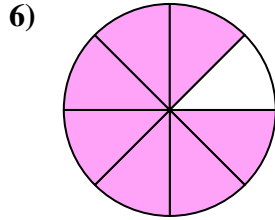
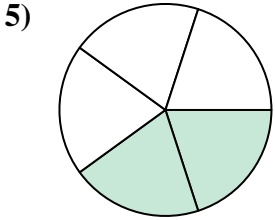



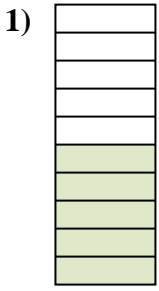




Determina se la parte colorata è "più", "meno" o "uguale" alla metà.

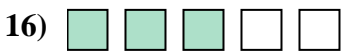

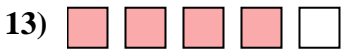
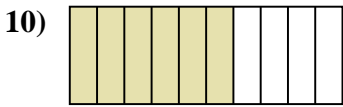
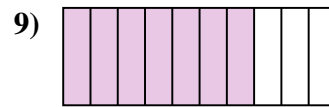
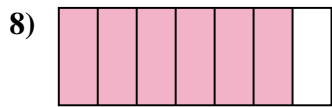
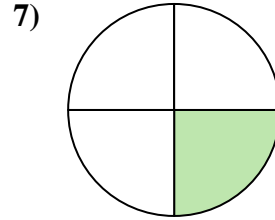
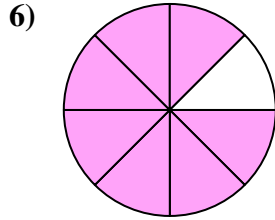
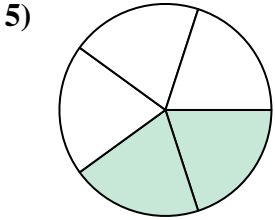



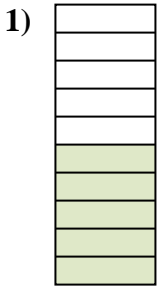


**Risposte**

1. \_\_\_\_\_
2. \_\_\_\_\_
3. \_\_\_\_\_
4. \_\_\_\_\_
5. \_\_\_\_\_
6. \_\_\_\_\_
7. \_\_\_\_\_
8. \_\_\_\_\_
9. \_\_\_\_\_
10. \_\_\_\_\_
11. \_\_\_\_\_
12. \_\_\_\_\_
13. \_\_\_\_\_
14. \_\_\_\_\_
15. \_\_\_\_\_
16. \_\_\_\_\_
17. \_\_\_\_\_
18. \_\_\_\_\_
19. \_\_\_\_\_
20. \_\_\_\_\_



Determina se la parte colorata è "più", "meno" o "uguale" alla metà.



**Risposte**

1. uguale

2. meno

3. più

4. meno

5. meno

6. più

7. meno

8. più

9. più

10. più

11. meno

12. più

13. più

14. più

15. meno

16. più

17. più

18. meno

19. meno

20. uguale