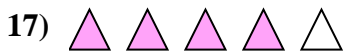

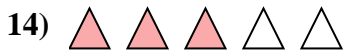
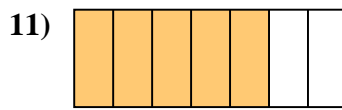
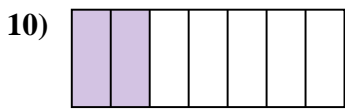
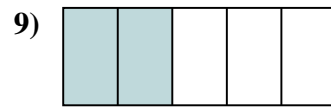
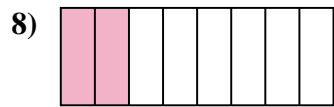
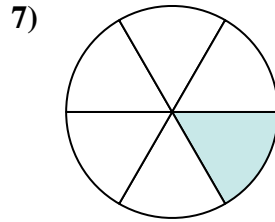
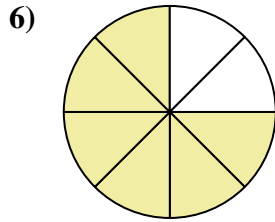
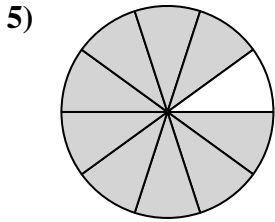



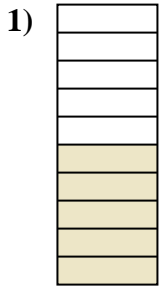




Determina se la parte colorata è "più", "meno" o "uguale" alla metà.



Risposte

1. _____

2. _____

3. _____

4. _____

5. _____

6. _____

7. _____

8. _____

9. _____

10. _____

11. _____

12. _____

13. _____

14. _____

15. _____

16. _____

17. _____

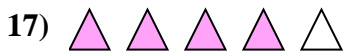


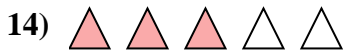
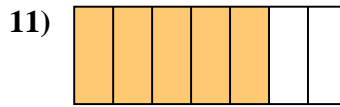
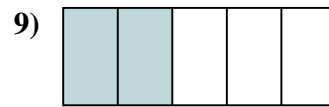
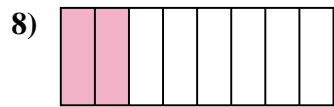
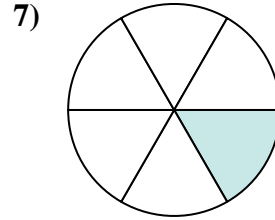
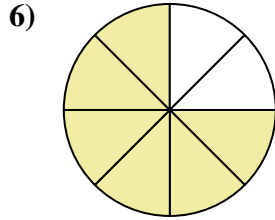
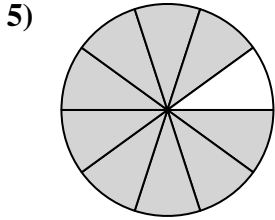



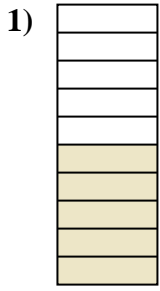
18. _____

19. _____

20. _____



Determina se la parte colorata è "più", "meno" o "uguale" alla metà.



Risposte

1. uguale

2. uguale

3. meno

4. meno

5. più

6. più

7. meno

8. meno

9. meno

10. meno

11. più

12. uguale

13. meno

14. più

15. più

16. meno

17. più

18. meno

19. uguale

20. meno