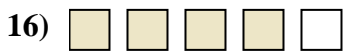

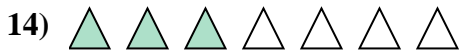
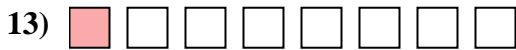
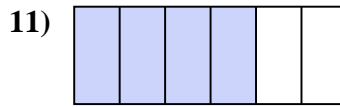
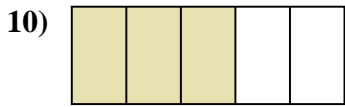
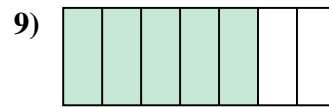
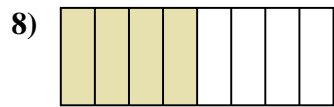
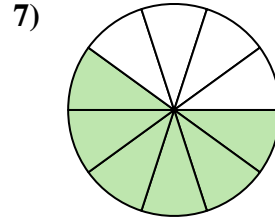
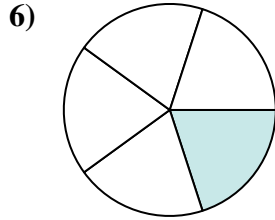
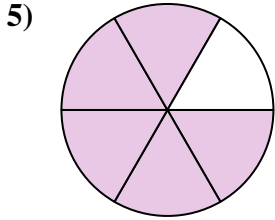


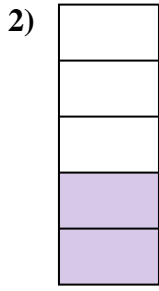





Determina se la parte colorata è "più", "meno" o "uguale" alla metà.



**Risposte**

1. \_\_\_\_\_

2. \_\_\_\_\_

3. \_\_\_\_\_

4. \_\_\_\_\_

5. \_\_\_\_\_

6. \_\_\_\_\_

7. \_\_\_\_\_

8. \_\_\_\_\_

9. \_\_\_\_\_

10. \_\_\_\_\_

11. \_\_\_\_\_

12. \_\_\_\_\_

13. \_\_\_\_\_

14. \_\_\_\_\_

15. \_\_\_\_\_

16. \_\_\_\_\_

17. \_\_\_\_\_

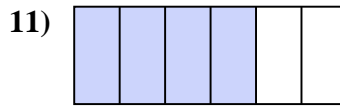
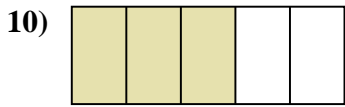
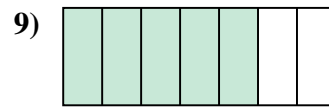
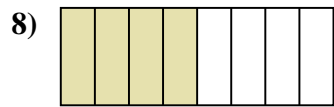
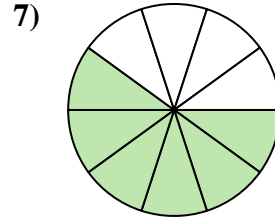
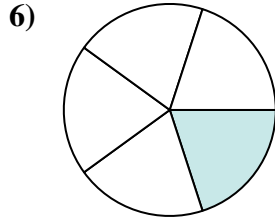
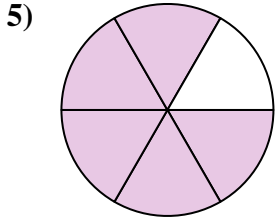


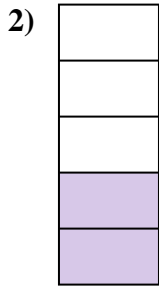

18. \_\_\_\_\_

19. \_\_\_\_\_

20. \_\_\_\_\_



Determina se la parte colorata è "più", "meno" o "uguale" alla metà.



**Risposte**

1. più

2. meno

3. più

4. meno

5. più

6. meno

7. più

8. uguale

9. più

10. più

11. più

12. uguale

13. meno

14. meno

15. meno

16. più

17. più

18. più

19. meno

20. meno