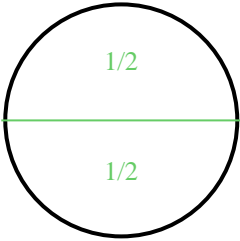



**Dividi e assegna una frazione ad ogni parte.**


Es) Dividi la figura in 2 parti uguali e indica a quanto corrisponde ciascuna parte.




2) Dividi la figura in 6 parti uguali e indica a quanto corrisponde ciascuna parte.




4) Dividi la figura in 4 parti uguali e indica a quanto corrisponde ciascuna parte.




6) Dividi la figura in 2 parti uguali e indica a quanto corrisponde ciascuna parte.




8) Dividi la figura in 4 parti uguali e indica a quanto corrisponde ciascuna parte.




1) Dividi la figura in 3 parti uguali e indica a quanto corrisponde ciascuna parte.




3) Dividi la figura in 8 parti uguali e indica a quanto corrisponde ciascuna parte.



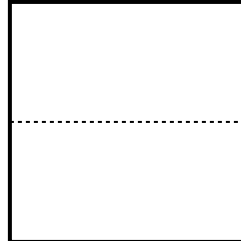
5) Dividi la figura in 3 parti uguali e indica a quanto corrisponde ciascuna parte.



7) Dividi la figura in 6 parti uguali e indica a quanto corrisponde ciascuna parte.



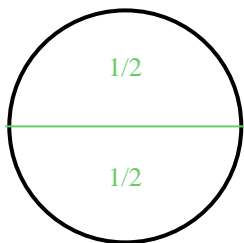
9) Dividi la figura in 8 parti uguali e indica a quanto corrisponde ciascuna parte.



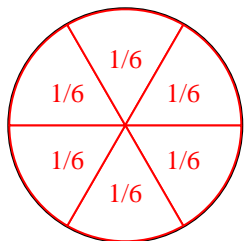


**Dividi e assegna una frazione ad ogni parte.**

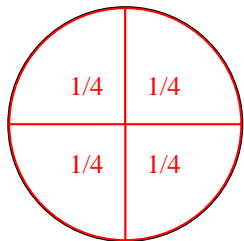
Es) Dividi la figura in 2 parti uguali e indica a quanto corrisponde ciascuna parte.




2) Dividi la figura in 6 parti uguali e indica a quanto corrisponde ciascuna parte.



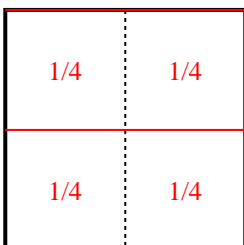
4) Dividi la figura in 4 parti uguali e indica a quanto corrisponde ciascuna parte.



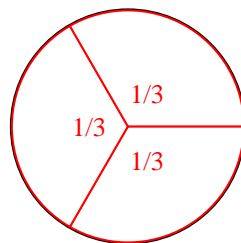
6) Dividi la figura in 2 parti uguali e indica a quanto corrisponde ciascuna parte.



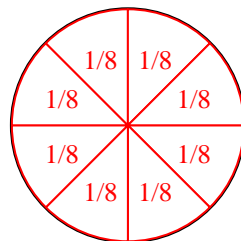
8) Dividi la figura in 4 parti uguali e indica a quanto corrisponde ciascuna parte.



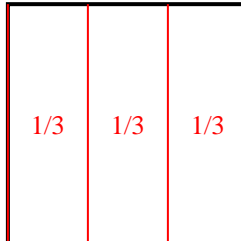
1) Dividi la figura in 3 parti uguali e indica a quanto corrisponde ciascuna parte.




3) Dividi la figura in 8 parti uguali e indica a quanto corrisponde ciascuna parte.



5) Dividi la figura in 3 parti uguali e indica a quanto corrisponde ciascuna parte.



7) Dividi la figura in 6 parti uguali e indica a quanto corrisponde ciascuna parte.



9) Dividi la figura in 8 parti uguali e indica a quanto corrisponde ciascuna parte.

