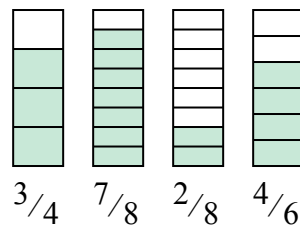
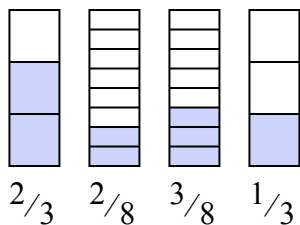
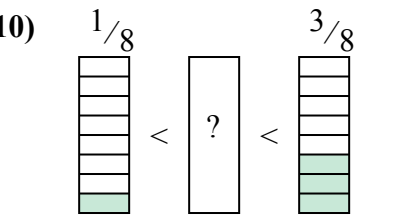
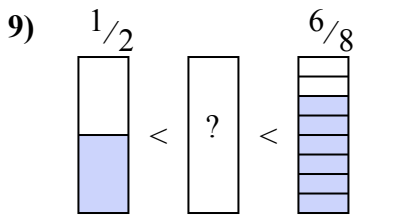
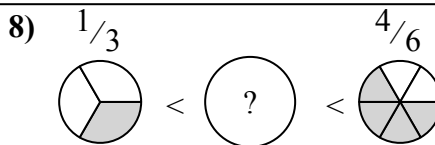
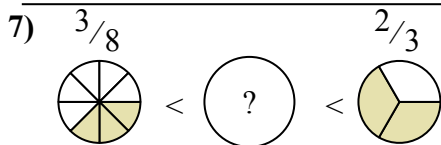
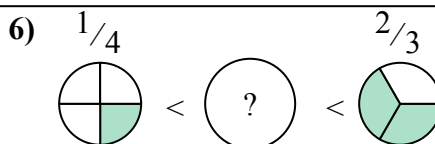
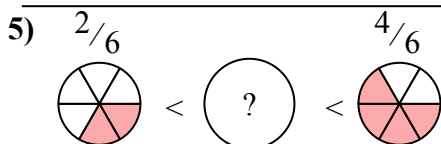
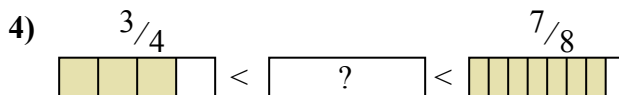
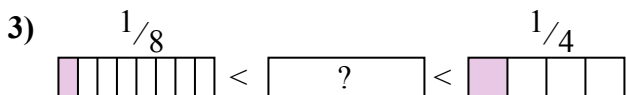

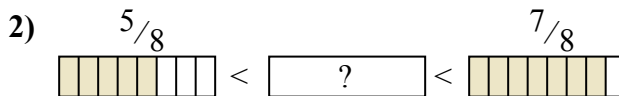





Determina quale frazione va inserita nel mezzo in modo da rendere vero il confronto.

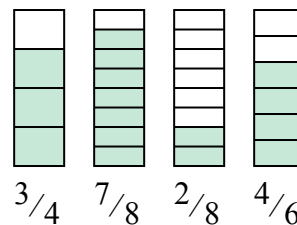
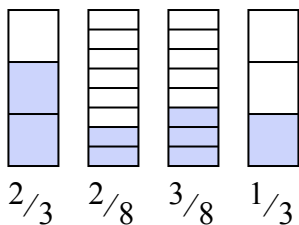
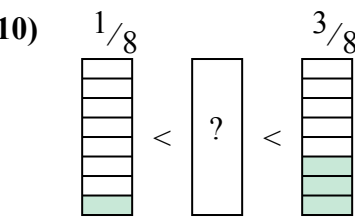
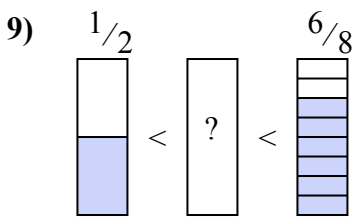
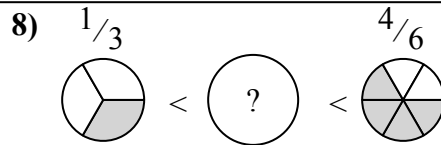
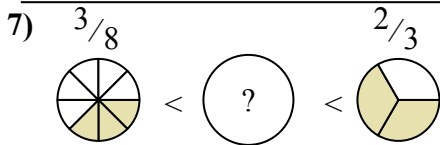
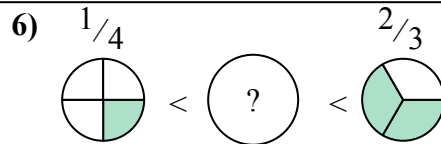
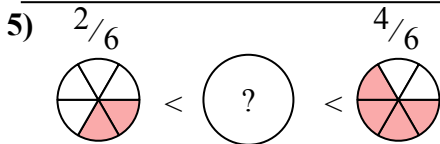
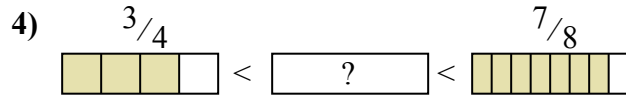
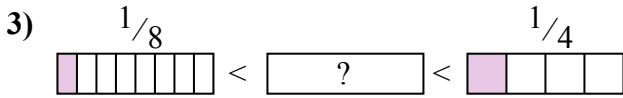
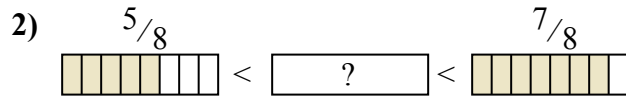
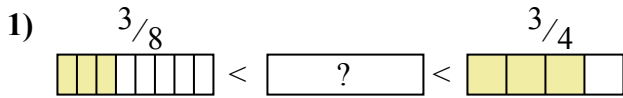
**Risposte**



1. \_\_\_\_\_
2. \_\_\_\_\_
3. \_\_\_\_\_
4. \_\_\_\_\_
5. \_\_\_\_\_
6. \_\_\_\_\_
7. \_\_\_\_\_
8. \_\_\_\_\_
9. \_\_\_\_\_
10. \_\_\_\_\_



Determina quale frazione va inserita nel mezzo in modo da rendere vero il confronto.



**Risposte**

1.  $\frac{1}{2}$

2.  $\frac{6}{8}$

3.  $\frac{1}{6}$

4.  $\frac{5}{6}$

5.  $\frac{1}{2}$

6.  $\frac{1}{2}$

7.  $\frac{4}{8}$

8.  $\frac{3}{6}$

9.  $\frac{2}{3}$

10.  $\frac{2}{8}$