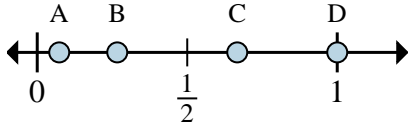
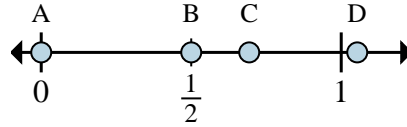




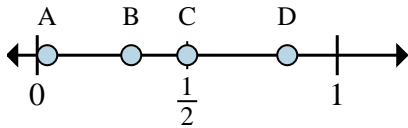
**Determina quale lettera rappresenta correttamente la posizione della frazione sulla linea numerata.**



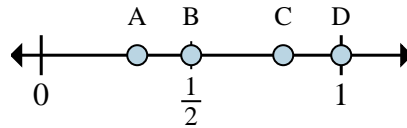
- 1) Quale lettera rappresenta correttamente  $\frac{3}{3}$ ?
- 2) Quale lettera rappresenta correttamente  $\frac{2}{3}$ ?



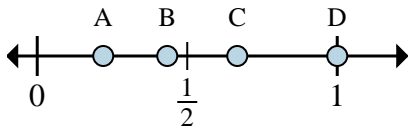
- 3) Quale lettera rappresenta correttamente  $\frac{0}{2}$ ?
- 4) Quale lettera rappresenta correttamente  $\frac{1}{2}$ ?



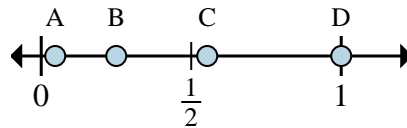
- 5) Quale lettera rappresenta correttamente  $\frac{5}{6}$ ?
- 6) Quale lettera rappresenta correttamente  $\frac{3}{6}$ ?



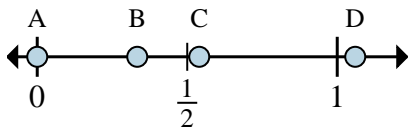
- 7) Quale lettera rappresenta correttamente  $\frac{2}{4}$ ?
- 8) Quale lettera rappresenta correttamente  $\frac{4}{4}$ ?



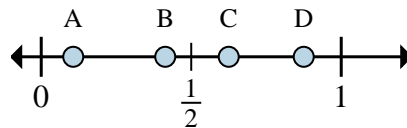
- 9) Quale lettera rappresenta correttamente  $\frac{6}{6}$ ?
- 10) Quale lettera rappresenta correttamente  $\frac{4}{6}$ ?



- 11) Quale lettera rappresenta correttamente  $\frac{8}{8}$ ?
- 12) Quale lettera rappresenta correttamente  $\frac{2}{8}$ ?



- 13) Quale lettera rappresenta correttamente  $\frac{0}{3}$ ?
- 14) Quale lettera rappresenta correttamente  $\frac{1}{3}$ ?



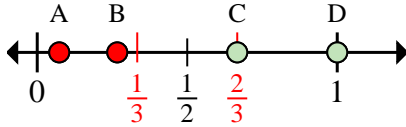
- 15) Quale lettera rappresenta correttamente  $\frac{7}{8}$ ?
- 16) Quale lettera rappresenta correttamente  $\frac{5}{8}$ ?

**Risposte**

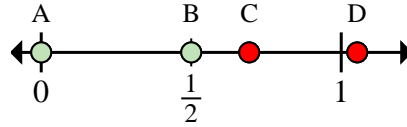
1. \_\_\_\_\_
2. \_\_\_\_\_
3. \_\_\_\_\_
4. \_\_\_\_\_
5. \_\_\_\_\_
6. \_\_\_\_\_
7. \_\_\_\_\_
8. \_\_\_\_\_
9. \_\_\_\_\_
10. \_\_\_\_\_
11. \_\_\_\_\_
12. \_\_\_\_\_
13. \_\_\_\_\_
14. \_\_\_\_\_
15. \_\_\_\_\_
16. \_\_\_\_\_



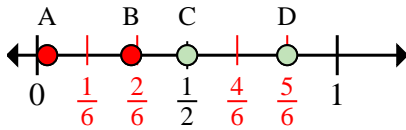
**Determina quale lettera rappresenta correttamente la posizione della frazione sulla linea numerata.**



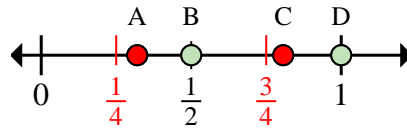
- 1) Quale lettera rappresenta correttamente  $\frac{3}{3}$ ?
- 2) Quale lettera rappresenta correttamente  $\frac{2}{3}$ ?



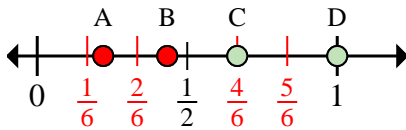
- 3) Quale lettera rappresenta correttamente  $\frac{0}{2}$ ?
- 4) Quale lettera rappresenta correttamente  $\frac{1}{2}$ ?



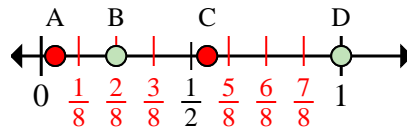
- 5) Quale lettera rappresenta correttamente  $\frac{5}{6}$ ?
- 6) Quale lettera rappresenta correttamente  $\frac{3}{6}$ ?



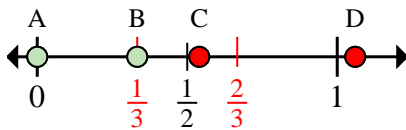
- 7) Quale lettera rappresenta correttamente  $\frac{2}{4}$ ?
- 8) Quale lettera rappresenta correttamente  $\frac{4}{4}$ ?



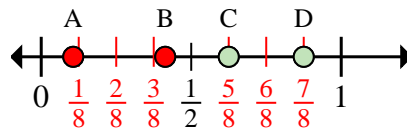
- 9) Quale lettera rappresenta correttamente  $\frac{6}{6}$ ?
- 10) Quale lettera rappresenta correttamente  $\frac{4}{6}$ ?



- 11) Quale lettera rappresenta correttamente  $\frac{8}{8}$ ?
- 12) Quale lettera rappresenta correttamente  $\frac{2}{8}$ ?



- 13) Quale lettera rappresenta correttamente  $\frac{0}{3}$ ?
- 14) Quale lettera rappresenta correttamente  $\frac{1}{3}$ ?



- 15) Quale lettera rappresenta correttamente  $\frac{7}{8}$ ?
- 16) Quale lettera rappresenta correttamente  $\frac{5}{8}$ ?

**Risposte**

1.     **D**
2.     **C**
3.     **A**
4.     **B**
5.     **D**
6.     **C**
7.     **B**
8.     **D**
9.     **D**
10.    **C**
11.    **D**
12.    **B**
13.    **A**
14.    **B**
15.    **D**
16.    **C**