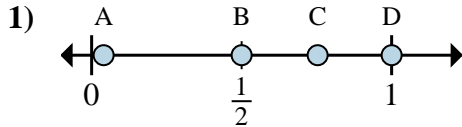
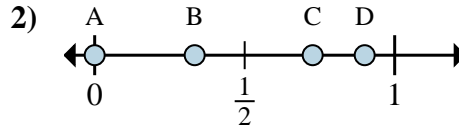




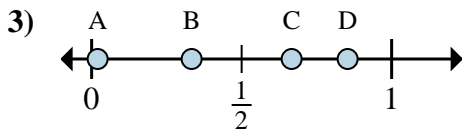
Determina quale lettera rappresenta correttamente la posizione della frazione sulla linea numerata.



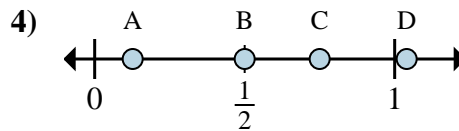
- 1a) Quale lettera rappresenta correttamente $\frac{2}{2}$?
 1b) Quale lettera rappresenta correttamente $\frac{1}{2}$?



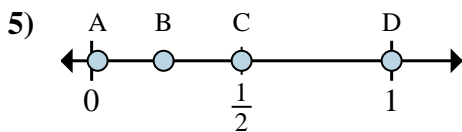
- 2a) Quale lettera rappresenta correttamente $\frac{0}{3}$?
 2b) Quale lettera rappresenta correttamente $\frac{1}{3}$?



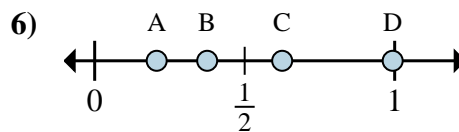
- 3a) Quale lettera rappresenta correttamente $\frac{4}{6}$?
 3b) Quale lettera rappresenta correttamente $\frac{2}{6}$?



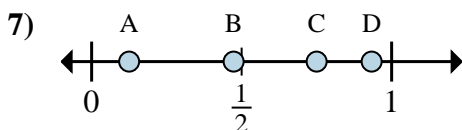
- 4a) Quale lettera rappresenta correttamente $\frac{2}{4}$?
 4b) Quale lettera rappresenta correttamente $\frac{3}{4}$?



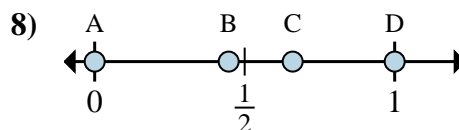
- 5a) Quale lettera rappresenta correttamente $\frac{3}{6}$?
 5b) Quale lettera rappresenta correttamente $\frac{6}{6}$?



- 6a) Quale lettera rappresenta correttamente $\frac{3}{8}$?
 6b) Quale lettera rappresenta correttamente $\frac{5}{8}$?



- 7a) Quale lettera rappresenta correttamente $\frac{6}{8}$?
 7b) Quale lettera rappresenta correttamente $\frac{1}{8}$?



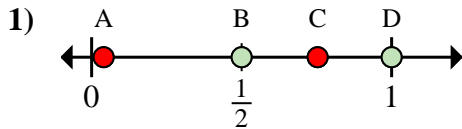
- 8a) Quale lettera rappresenta correttamente $\frac{0}{8}$?
 8b) Quale lettera rappresenta correttamente $\frac{8}{8}$?

Risposte

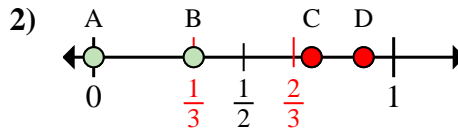
- 1a. _____
 1b. _____
 2a. _____
 2b. _____
 3a. _____
 3b. _____
 4a. _____
 4b. _____
 5a. _____
 5b. _____
 6a. _____
 6b. _____
 7a. _____
 7b. _____
 8a. _____
 8b. _____



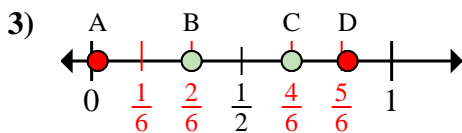
Determina quale lettera rappresenta correttamente la posizione della frazione sulla linea numerata.



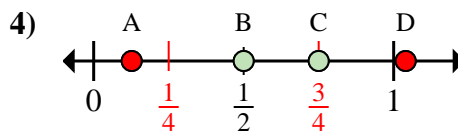
- 1a) Quale lettera rappresenta correttamente $\frac{2}{2}$?
 1b) Quale lettera rappresenta correttamente $\frac{1}{2}$?



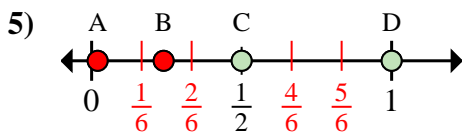
- 2a) Quale lettera rappresenta correttamente $\frac{0}{3}$?
 2b) Quale lettera rappresenta correttamente $\frac{1}{3}$?



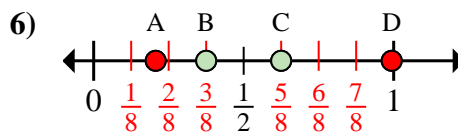
- 3a) Quale lettera rappresenta correttamente $\frac{4}{6}$?
 3b) Quale lettera rappresenta correttamente $\frac{2}{6}$?



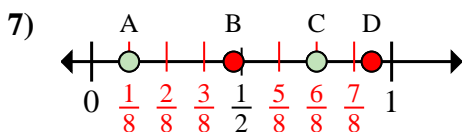
- 4a) Quale lettera rappresenta correttamente $\frac{2}{4}$?
 4b) Quale lettera rappresenta correttamente $\frac{3}{4}$?



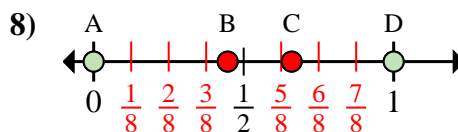
- 5a) Quale lettera rappresenta correttamente $\frac{3}{6}$?
 5b) Quale lettera rappresenta correttamente $\frac{6}{6}$?



- 6a) Quale lettera rappresenta correttamente $\frac{3}{8}$?
 6b) Quale lettera rappresenta correttamente $\frac{5}{8}$?



- 7a) Quale lettera rappresenta correttamente $\frac{6}{8}$?
 7b) Quale lettera rappresenta correttamente $\frac{1}{8}$?



- 8a) Quale lettera rappresenta correttamente $\frac{0}{8}$?
 8b) Quale lettera rappresenta correttamente $\frac{8}{8}$?

Risposte

- 1a. **D**
 1b. **B**
 2a. **A**
 2b. **B**
 3a. **C**
 3b. **B**
 4a. **B**
 4b. **C**
 5a. **C**
 5b. **D**
 6a. **B**
 6b. **C**
 7a. **C**
 7b. **A**
 8a. **A**
 8b. **D**