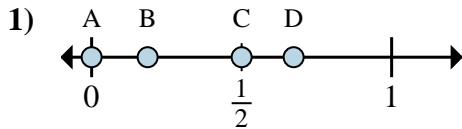


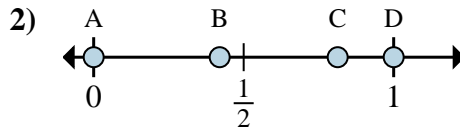


Determina quale lettera rappresenta correttamente la posizione della frazione sulla linea numerata.



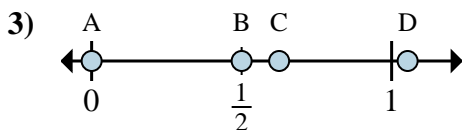
1a) Quale lettera rappresenta correttamente $\frac{0}{2}$?

1b) Quale lettera rappresenta correttamente $\frac{1}{2}$?



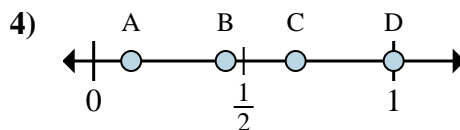
2a) Quale lettera rappresenta correttamente $\frac{0}{4}$?

2b) Quale lettera rappresenta correttamente $\frac{4}{4}$?



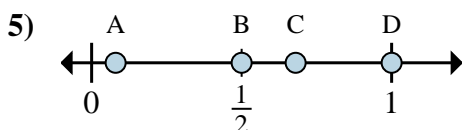
3a) Quale lettera rappresenta correttamente $\frac{5}{8}$?

3b) Quale lettera rappresenta correttamente $\frac{4}{8}$?



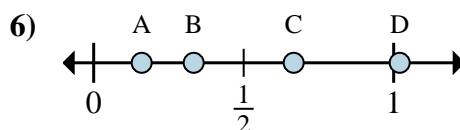
4a) Quale lettera rappresenta correttamente $\frac{8}{8}$?

4b) Quale lettera rappresenta correttamente $\frac{1}{8}$?



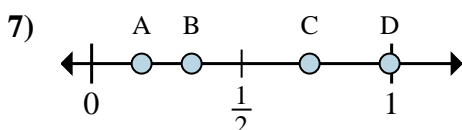
5a) Quale lettera rappresenta correttamente $\frac{6}{6}$?

5b) Quale lettera rappresenta correttamente $\frac{3}{6}$?



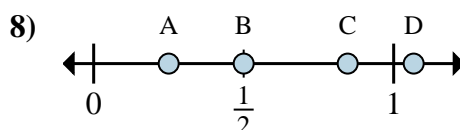
6a) Quale lettera rappresenta correttamente $\frac{2}{3}$?

6b) Quale lettera rappresenta correttamente $\frac{1}{3}$?



7a) Quale lettera rappresenta correttamente $\frac{2}{6}$?

7b) Quale lettera rappresenta correttamente $\frac{1}{6}$?



8a) Quale lettera rappresenta correttamente $\frac{2}{4}$?

8b) Quale lettera rappresenta correttamente $\frac{1}{4}$?

Risposte

1a. _____

1b. _____

2a. _____

2b. _____

3a. _____

3b. _____

4a. _____

4b. _____

5a. _____

5b. _____

6a. _____

6b. _____

7a. _____

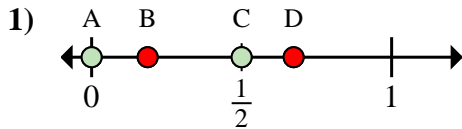
7b. _____

8a. _____

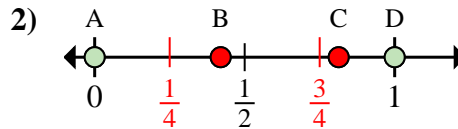
8b. _____



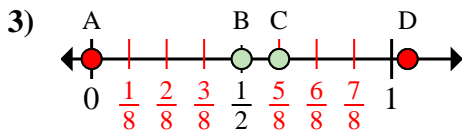
Determina quale lettera rappresenta correttamente la posizione della frazione sulla linea numerata.



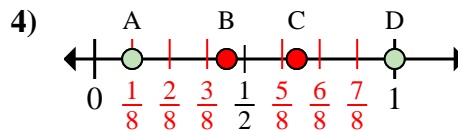
- 1a) Quale lettera rappresenta correttamente $\frac{0}{2}$?
 1b) Quale lettera rappresenta correttamente $\frac{1}{2}$?



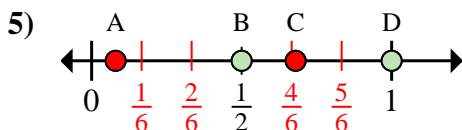
- 2a) Quale lettera rappresenta correttamente $\frac{0}{4}$?
 2b) Quale lettera rappresenta correttamente $\frac{4}{4}$?



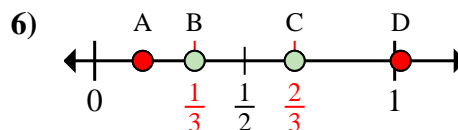
- 3a) Quale lettera rappresenta correttamente $\frac{5}{8}$?
 3b) Quale lettera rappresenta correttamente $\frac{4}{8}$?



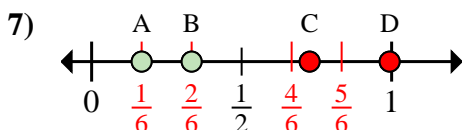
- 4a) Quale lettera rappresenta correttamente $\frac{8}{8}$?
 4b) Quale lettera rappresenta correttamente $\frac{1}{8}$?



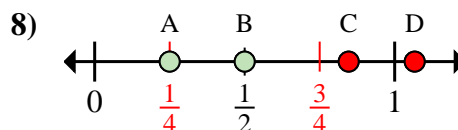
- 5a) Quale lettera rappresenta correttamente $\frac{6}{6}$?
 5b) Quale lettera rappresenta correttamente $\frac{3}{6}$?



- 6a) Quale lettera rappresenta correttamente $\frac{2}{3}$?
 6b) Quale lettera rappresenta correttamente $\frac{1}{3}$?



- 7a) Quale lettera rappresenta correttamente $\frac{2}{6}$?
 7b) Quale lettera rappresenta correttamente $\frac{1}{6}$?



- 8a) Quale lettera rappresenta correttamente $\frac{2}{4}$?
 8b) Quale lettera rappresenta correttamente $\frac{1}{4}$?

Risposte

- 1a. **A**
 1b. **C**
 2a. **A**
 2b. **D**
 3a. **C**
 3b. **B**
 4a. **D**
 4b. **A**
 5a. **D**
 5b. **B**
 6a. **C**
 6b. **B**
 7a. **B**
 7b. **A**
 8a. **B**
 8b. **A**