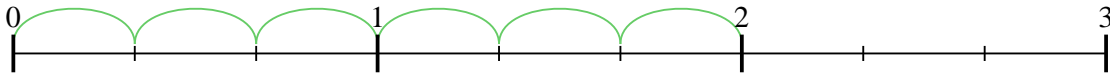


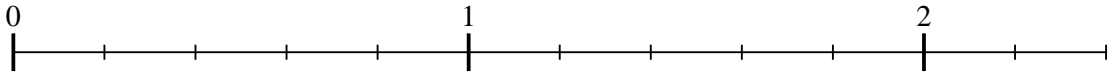


Usa la linea numerata per risolvere ogni problema. Il primo è un esempio.

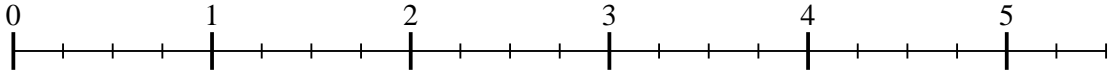
1) $2 : \frac{1}{3}$



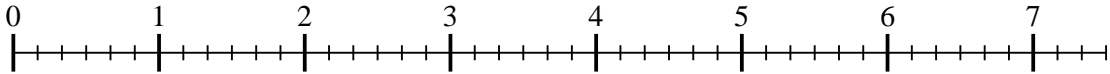
2) $2 : \frac{1}{5}$



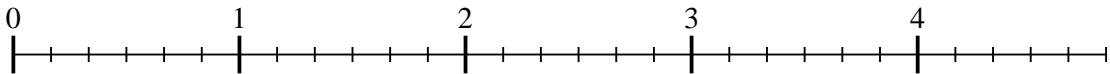
3) $5 : \frac{1}{4}$



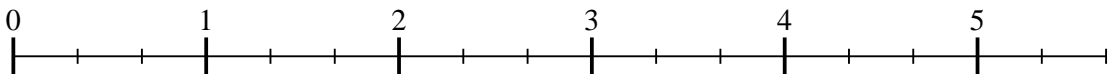
4) $7 : \frac{1}{6}$



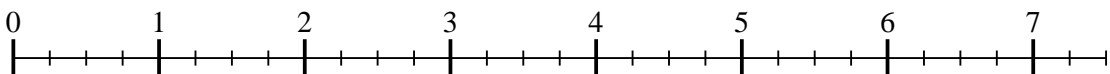
5) $4 : \frac{1}{6}$



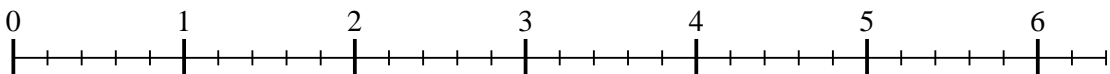
6) $5 : \frac{1}{3}$



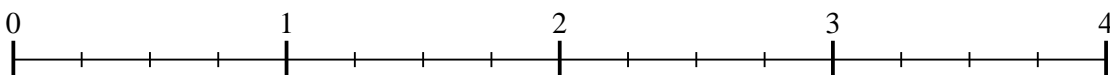
7) $7 : \frac{1}{4}$



8) $6 : \frac{1}{5}$



9) $3 : \frac{1}{4}$

**Risposte**

1. _____

2. _____

3. _____

4. _____

5. _____

6. _____

7. _____

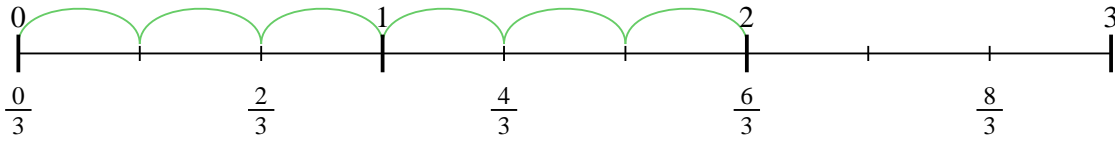
8. _____

9. _____

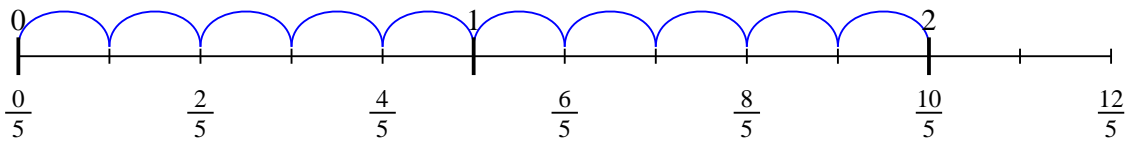


Usa la linea numerata per risolvere ogni problema. Il primo è un esempio.

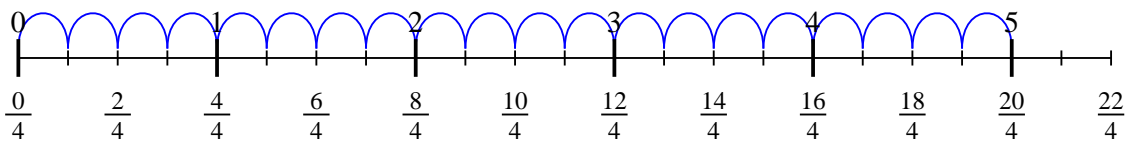
1) $2 : \frac{1}{3}$



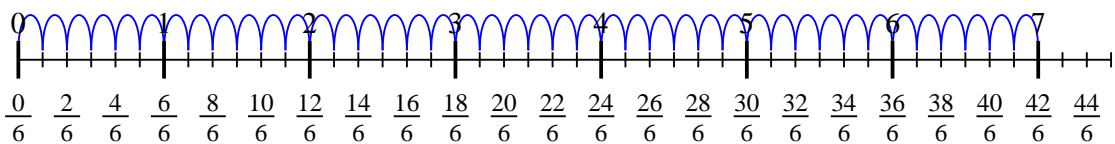
2) $2 : \frac{1}{5}$



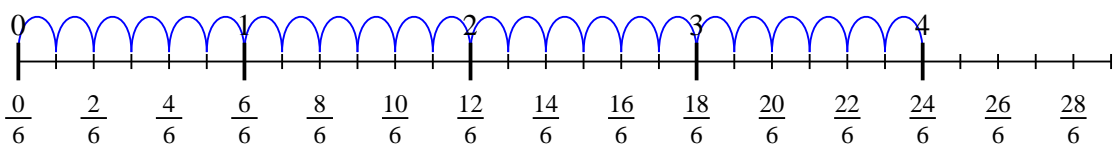
3) $5 : \frac{1}{4}$



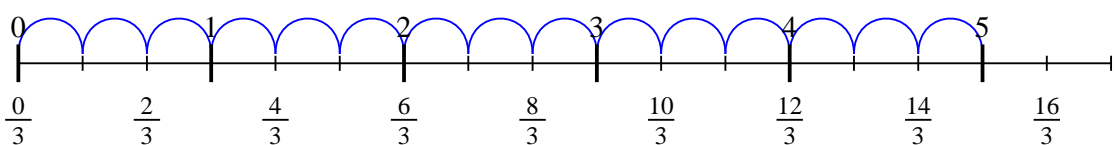
4) $7 : \frac{1}{6}$



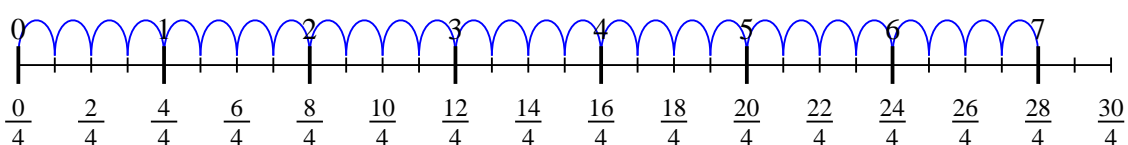
5) $4 : \frac{1}{6}$



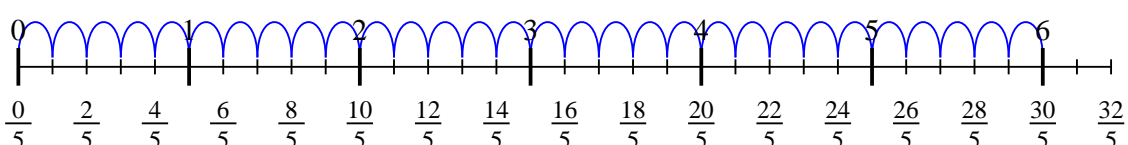
6) $5 : \frac{1}{3}$



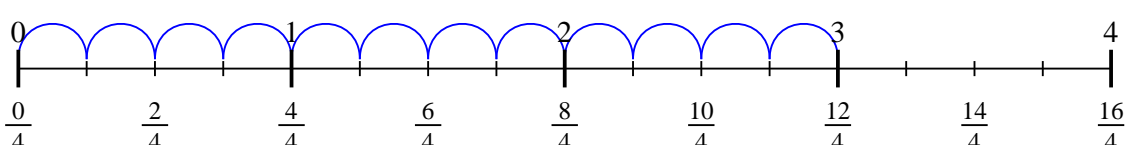
7) $7 : \frac{1}{4}$



8) $6 : \frac{1}{5}$



9) $3 : \frac{1}{4}$



Risposte

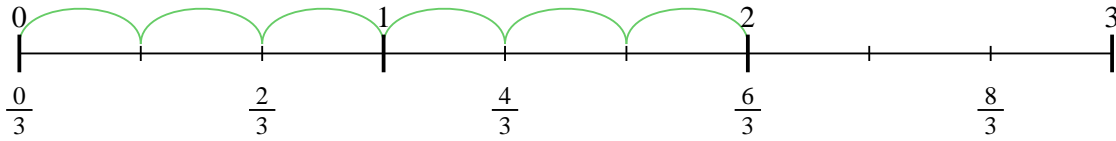
1. 6
2. 10
3. 20
4. 42
5. 24
6. 15
7. 28
8. 30
9. 12



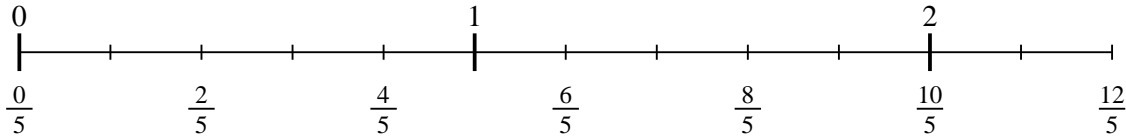
Usa la linea numerata per risolvere ogni problema. Il primo è un esempio.

Risposte

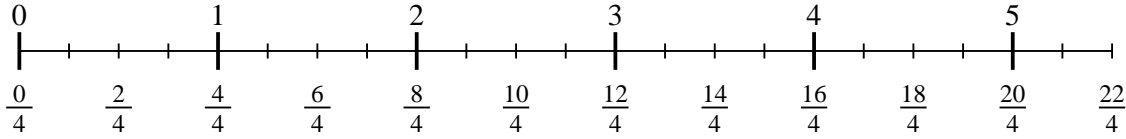
1) $2 : \frac{1}{3}$



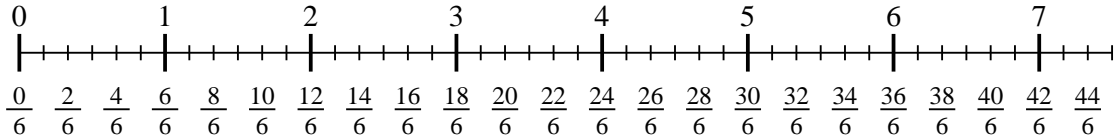
2) $2 : \frac{1}{5}$



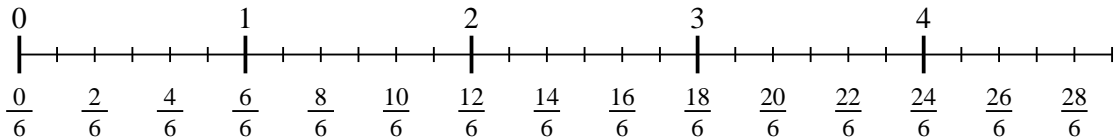
3) $5 : \frac{1}{4}$



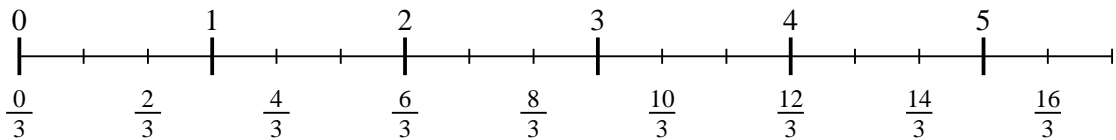
4) $7 : \frac{1}{6}$



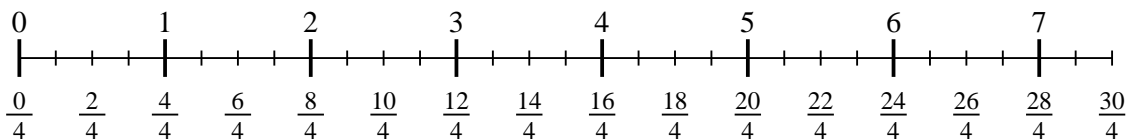
5) $4 : \frac{1}{6}$



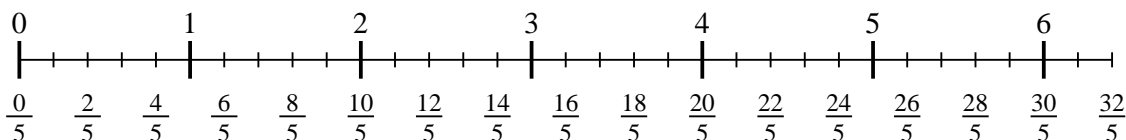
6) $5 : \frac{1}{3}$



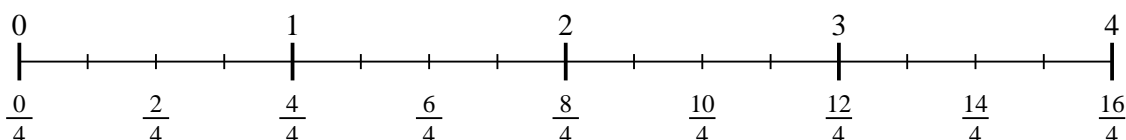
7) $7 : \frac{1}{4}$



8) $6 : \frac{1}{5}$



9) $3 : \frac{1}{4}$



1. _____
2. _____
3. _____
4. _____
5. _____
6. _____
7. _____
8. _____
9. _____