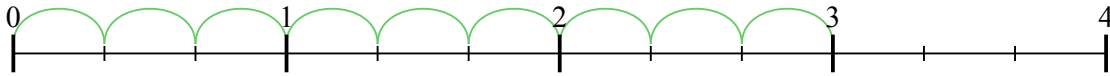


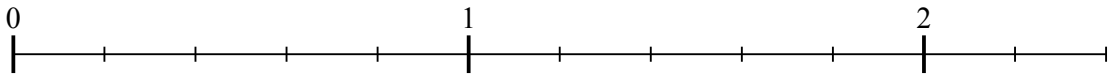


Usa la linea numerata per risolvere ogni problema. Il primo è un esempio.

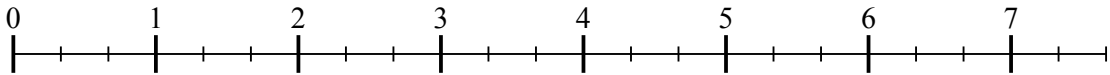
1) $3 : \frac{1}{3}$



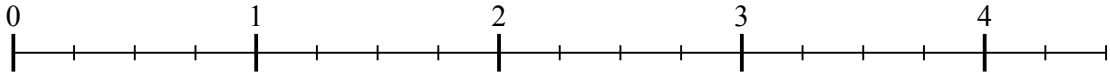
2) $2 : \frac{1}{5}$



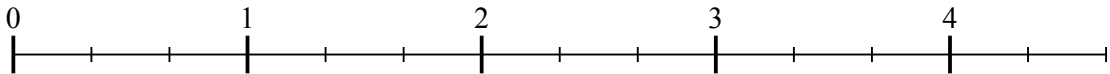
3) $7 : \frac{1}{3}$



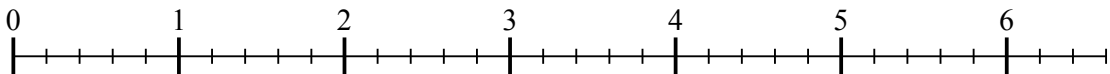
4) $4 : \frac{1}{4}$



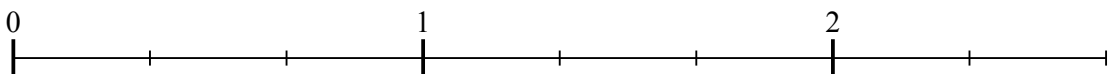
5) $4 : \frac{1}{3}$



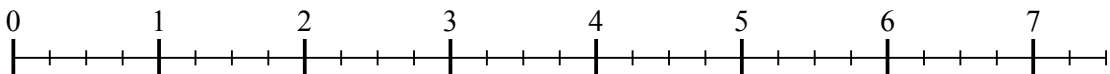
6) $6 : \frac{1}{5}$



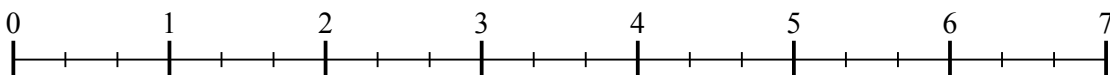
7) $2 : \frac{1}{3}$



8) $7 : \frac{1}{4}$



9) $6 : \frac{1}{3}$



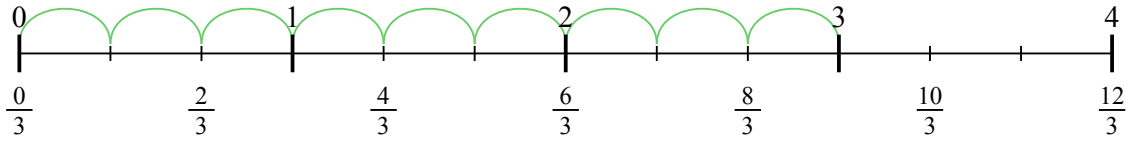
Risposte

- 1. _____
- 2. _____
- 3. _____
- 4. _____
- 5. _____
- 6. _____
- 7. _____
- 8. _____
- 9. _____

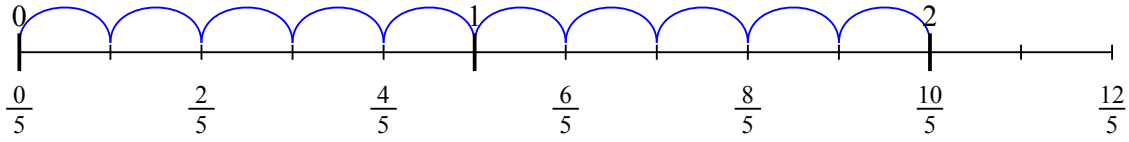


Usa la linea numerata per risolvere ogni problema. Il primo è un esempio.

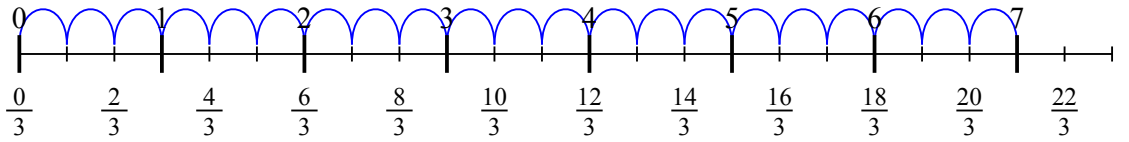
1) $3 : \frac{1}{3}$



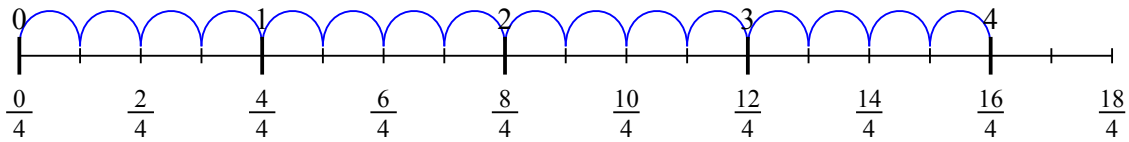
2) $2 : \frac{1}{5}$



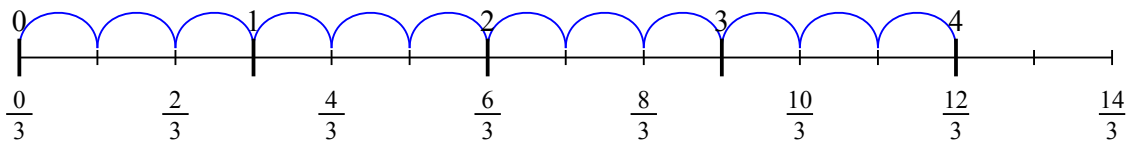
3) $7 : \frac{1}{3}$



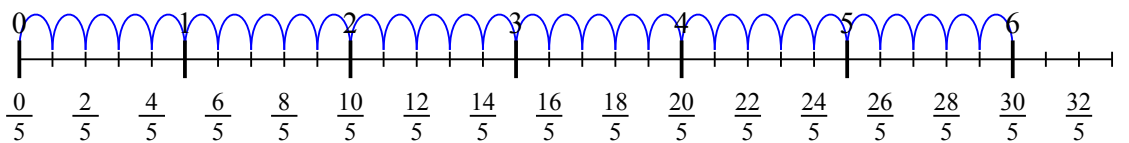
4) $4 : \frac{1}{4}$



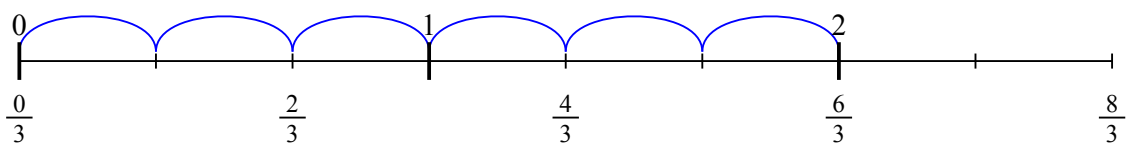
5) $4 : \frac{1}{3}$



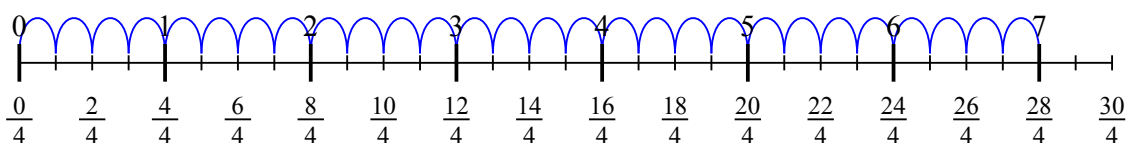
6) $6 : \frac{1}{5}$



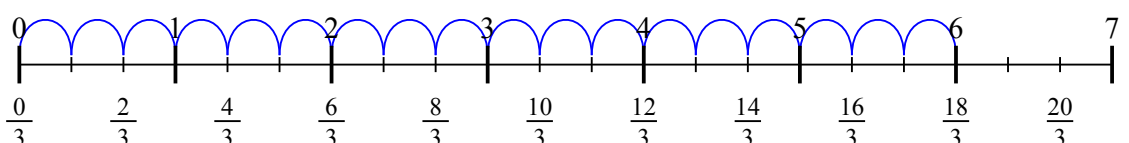
7) $2 : \frac{1}{3}$



8) $7 : \frac{1}{4}$



9) $6 : \frac{1}{3}$

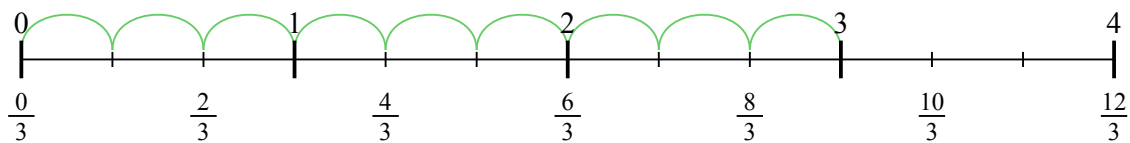


Risposte

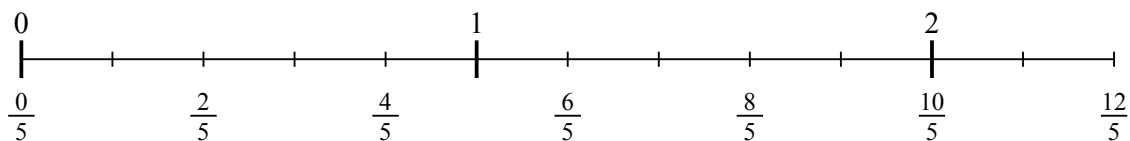
1. 9
2. 10
3. 21
4. 16
5. 12
6. 30
7. 6
8. 28
9. 18



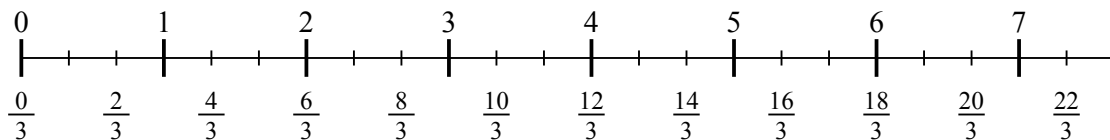
1) $3 : \frac{1}{3}$



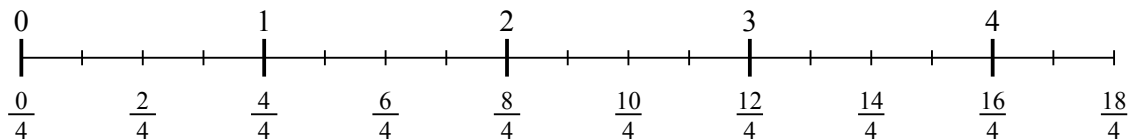
2) $2 : \frac{1}{5}$



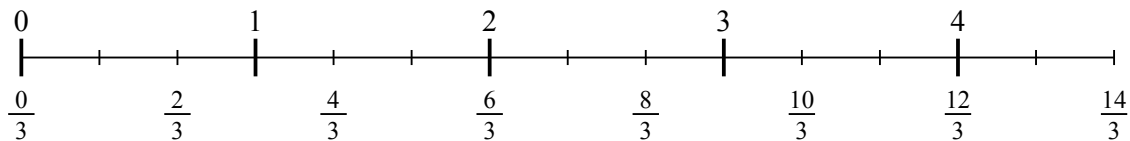
3) $7 : \frac{1}{3}$



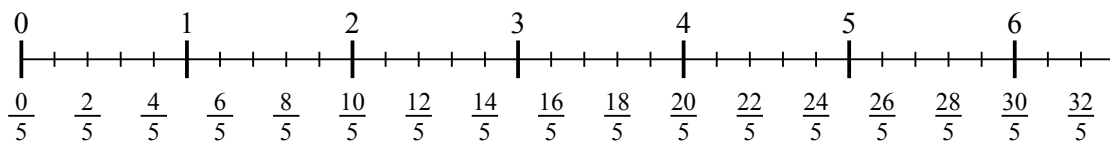
4) $4 : \frac{1}{4}$



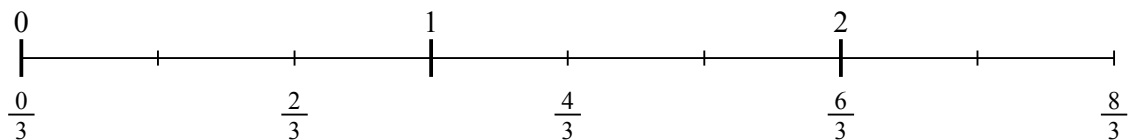
5) $4 : \frac{1}{3}$



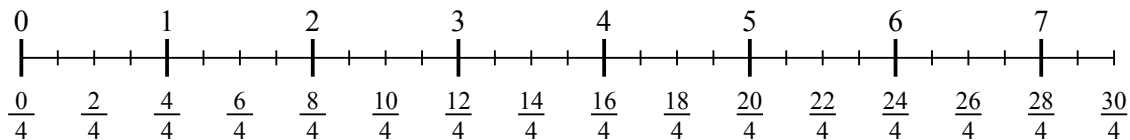
6) $6 : \frac{1}{5}$



7) $2 : \frac{1}{3}$



8) $7 : \frac{1}{4}$



9) $6 : \frac{1}{3}$

