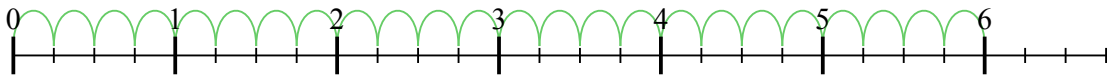


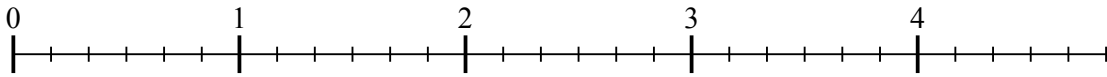


Usa la linea numerata per risolvere ogni problema. Il primo è un esempio.

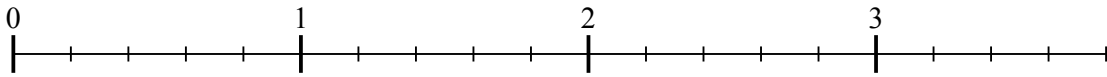
1)  $6 : \frac{1}{4}$



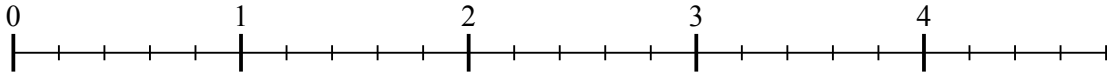
2)  $4 : \frac{1}{6}$



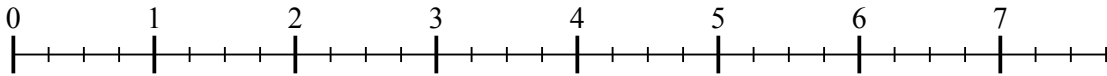
3)  $3 : \frac{1}{5}$



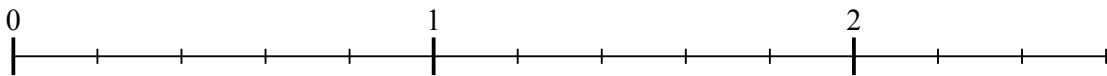
4)  $4 : \frac{1}{5}$



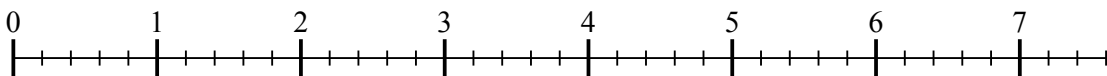
5)  $7 : \frac{1}{4}$



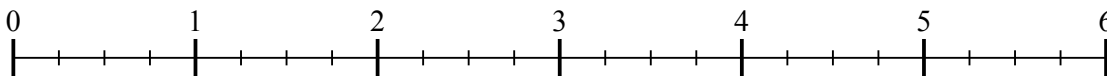
6)  $2 : \frac{1}{5}$




7)  $7 : \frac{1}{5}$



8)  $5 : \frac{1}{4}$



9)  $3 : \frac{1}{3}$



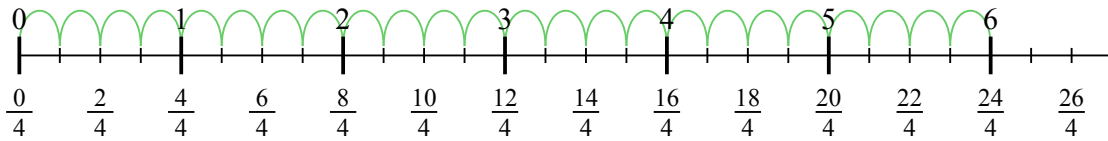
**Risposte**

1. \_\_\_\_\_
2. \_\_\_\_\_
3. \_\_\_\_\_
4. \_\_\_\_\_
5. \_\_\_\_\_
6. \_\_\_\_\_
7. \_\_\_\_\_
8. \_\_\_\_\_
9. \_\_\_\_\_

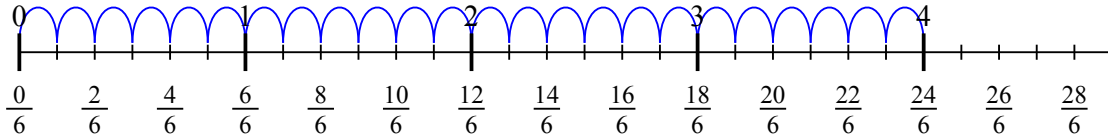


Usa la linea numerata per risolvere ogni problema. Il primo è un esempio.

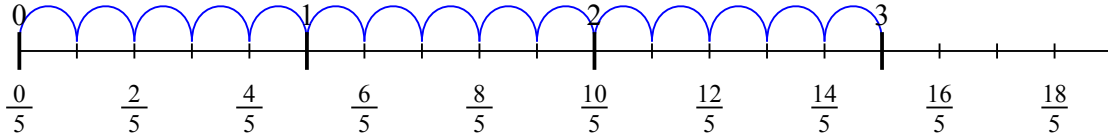
1)  $6 : \frac{1}{4}$



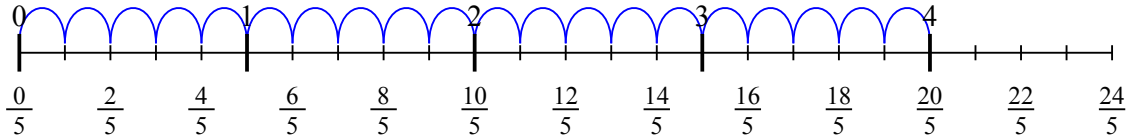
2)  $4 : \frac{1}{6}$



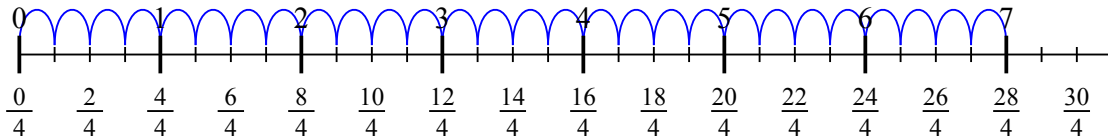
3)  $3 : \frac{1}{5}$



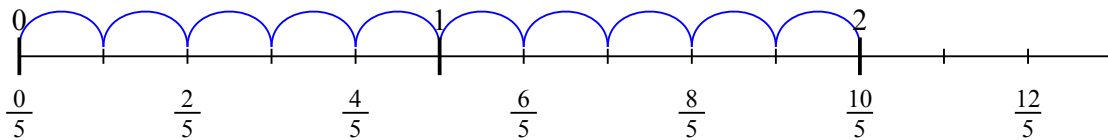
4)  $4 : \frac{1}{5}$



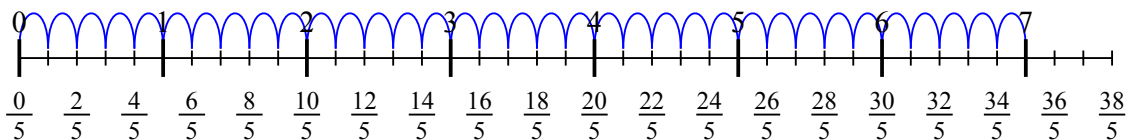
5)  $7 : \frac{1}{4}$



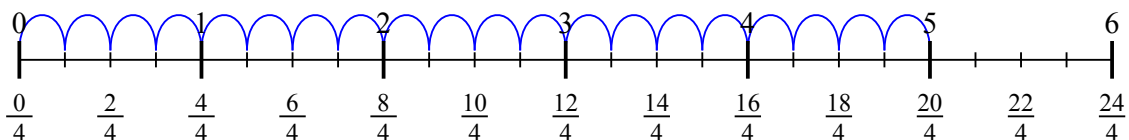
6)  $2 : \frac{1}{5}$



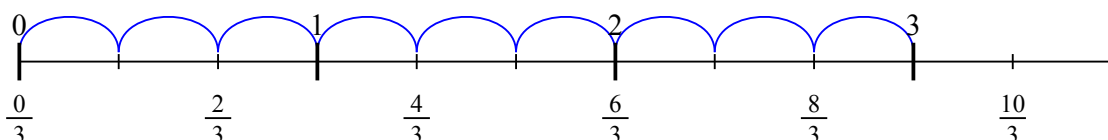
7)  $7 : \frac{1}{5}$



8)  $5 : \frac{1}{4}$



9)  $3 : \frac{1}{3}$

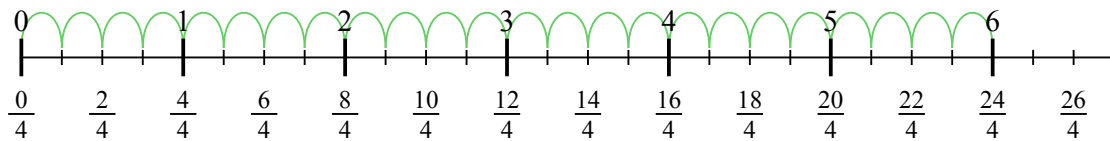


**Risposte**

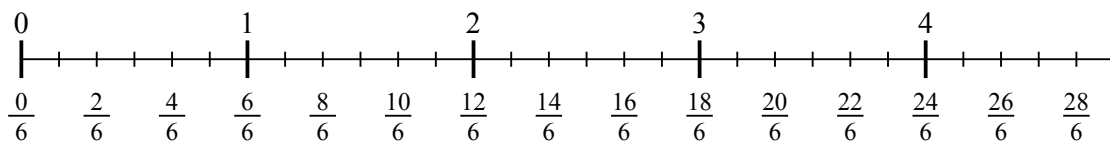
1. 24
2. 24
3. 15
4. 20
5. 28
6. 10
7. 35
8. 20
9. 9



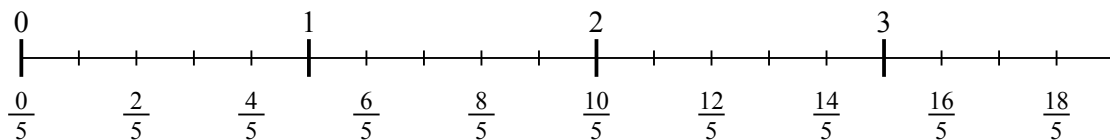
1)  $6 : \frac{1}{4}$



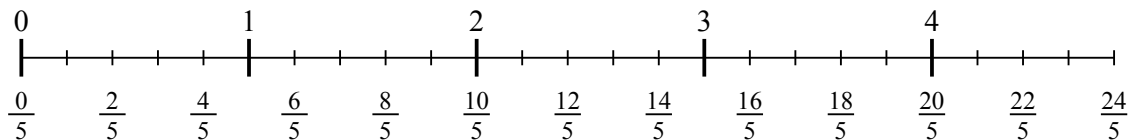
2)  $4 : \frac{1}{6}$



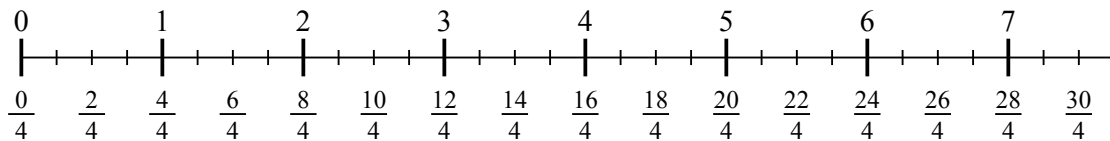
3)  $3 : \frac{1}{5}$



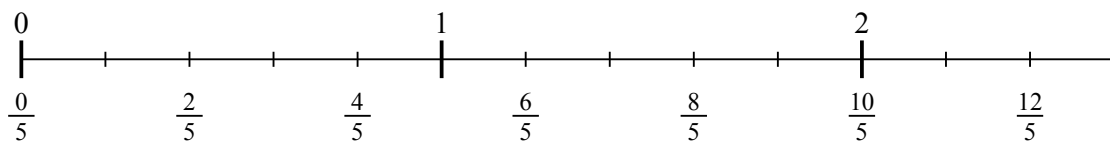
4)  $4 : \frac{1}{5}$



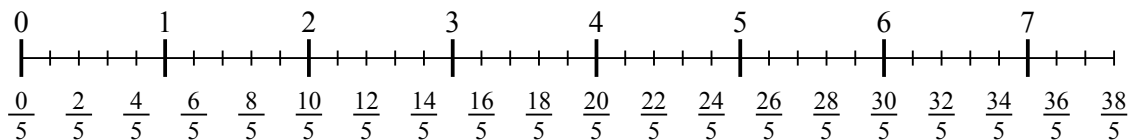
5)  $7 : \frac{1}{4}$



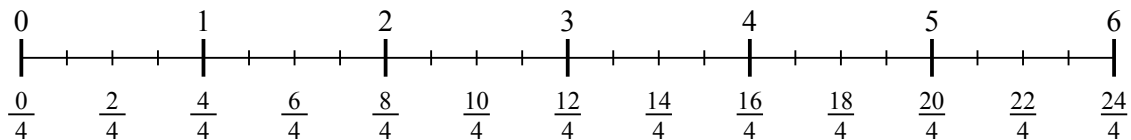
6)  $2 : \frac{1}{5}$



7)  $7 : \frac{1}{5}$



8)  $5 : \frac{1}{4}$



9)  $3 : \frac{1}{3}$

