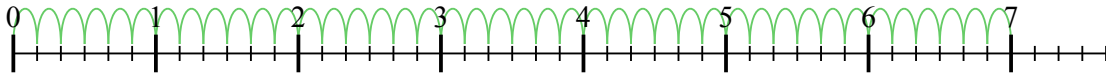




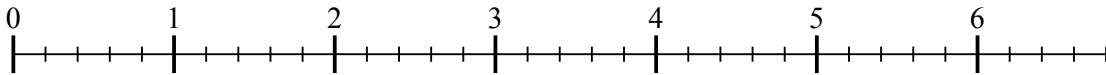
Usa la linea numerata per risolvere ogni problema. Il primo è un esempio.

Risposte

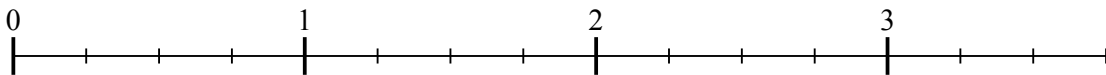
1) $7 : \frac{1}{6}$




2) $6 : \frac{1}{5}$



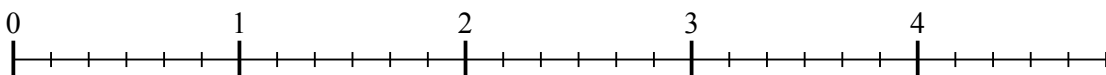
3) $3 : \frac{1}{4}$



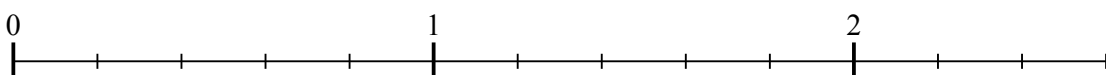
4) $3 : \frac{1}{3}$



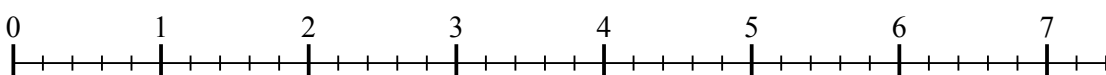
5) $4 : \frac{1}{6}$



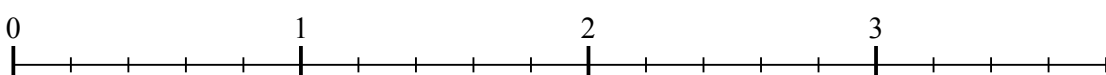
6) $2 : \frac{1}{5}$



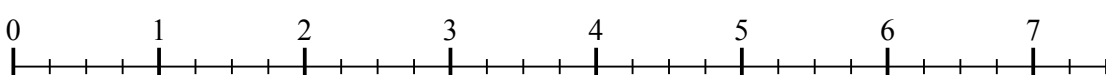
7) $7 : \frac{1}{5}$



8) $3 : \frac{1}{5}$



9) $7 : \frac{1}{4}$

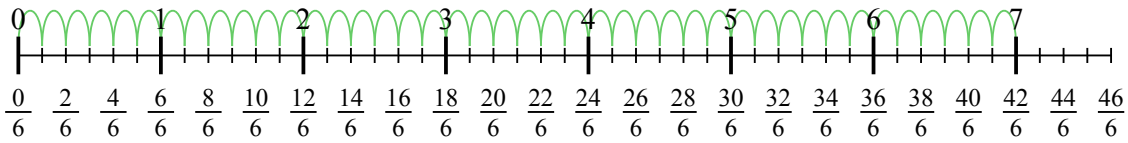


- 1. _____
- 2. _____
- 3. _____
- 4. _____
- 5. _____
- 6. _____
- 7. _____
- 8. _____
- 9. _____

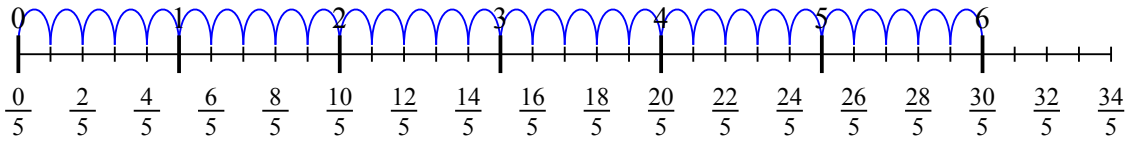


Usa la linea numerata per risolvere ogni problema. Il primo è un esempio.

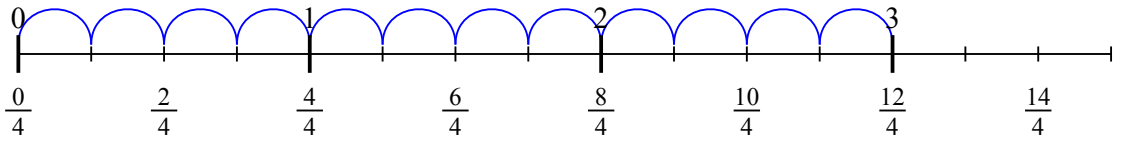
1) $7 : \frac{1}{6}$



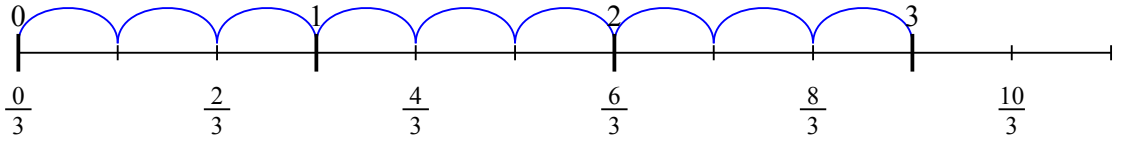
2) $6 : \frac{1}{5}$



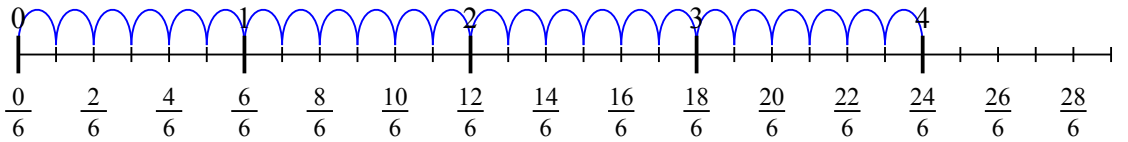
3) $3 : \frac{1}{4}$



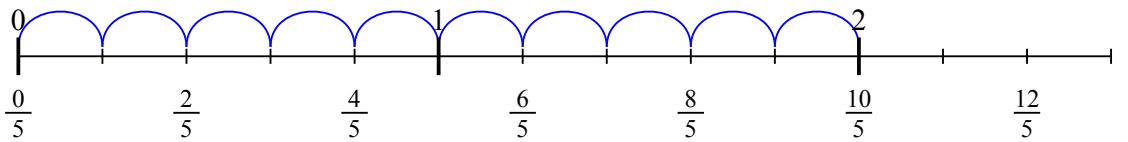
4) $3 : \frac{1}{3}$



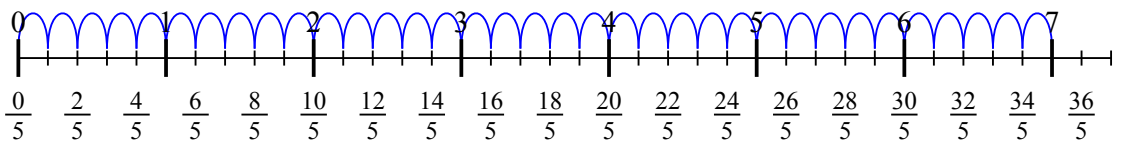
5) $4 : \frac{1}{6}$



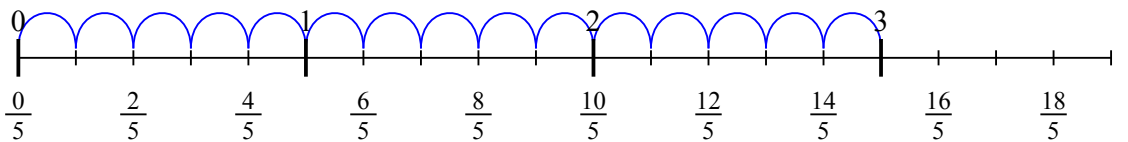
6) $2 : \frac{1}{5}$



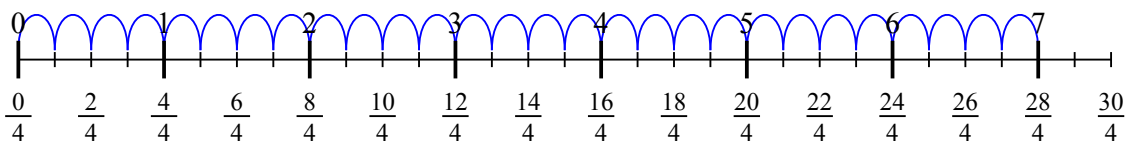
7) $7 : \frac{1}{5}$



8) $3 : \frac{1}{5}$



9) $7 : \frac{1}{4}$

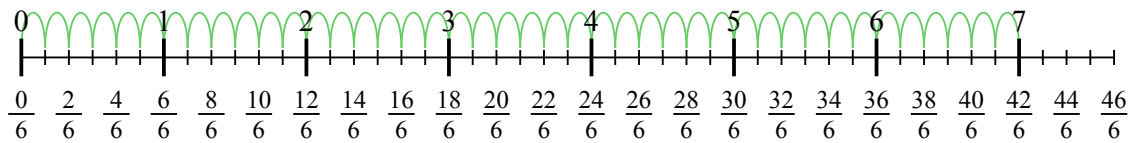


Risposte

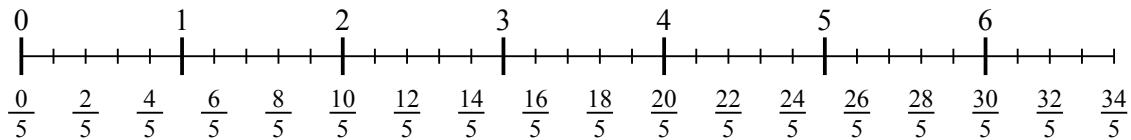
1. 42
2. 30
3. 12
4. 9
5. 24
6. 10
7. 35
8. 15
9. 28



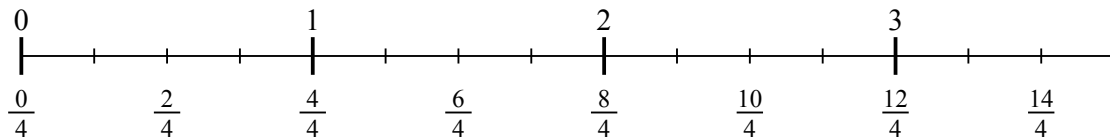
1) $7 : \frac{1}{6}$



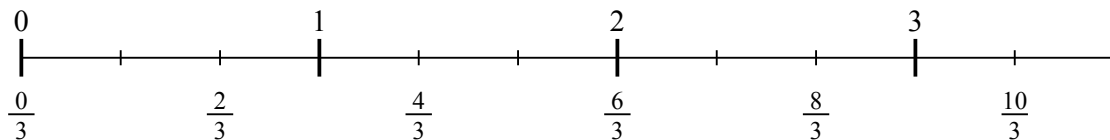
2) $6 : \frac{1}{5}$



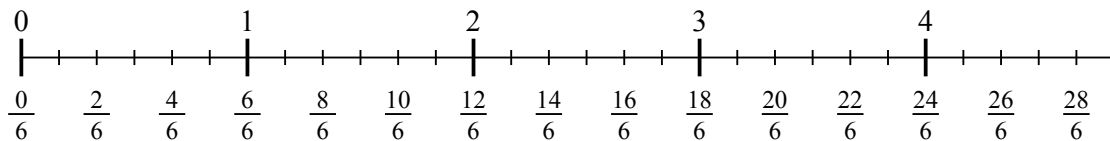
3) $3 : \frac{1}{4}$



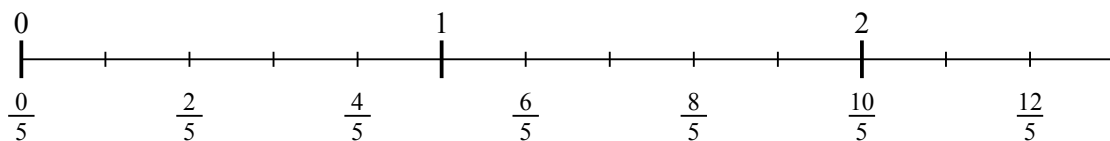
4) $3 : \frac{1}{3}$



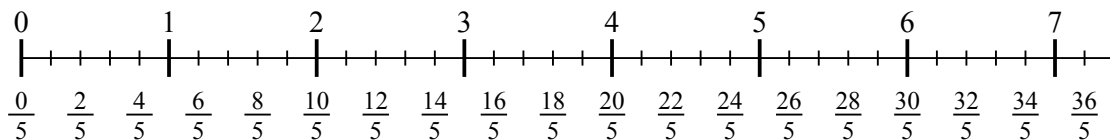
5) $4 : \frac{1}{6}$



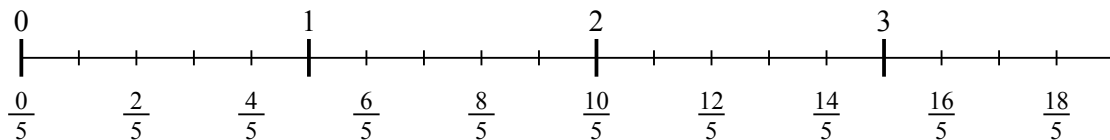
6) $2 : \frac{1}{5}$



7) $7 : \frac{1}{5}$



8) $3 : \frac{1}{5}$



9) $7 : \frac{1}{4}$

