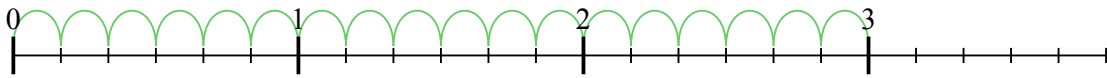


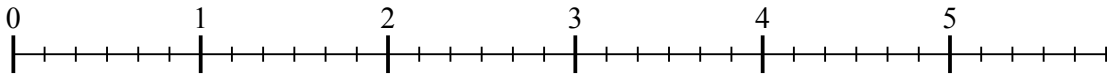


Usa la linea numerata per risolvere ogni problema. Il primo è un esempio.

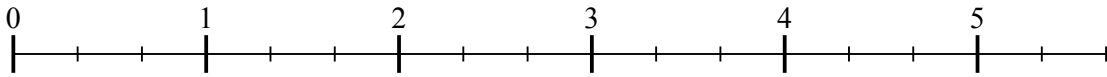
1) $3 : \frac{1}{6}$



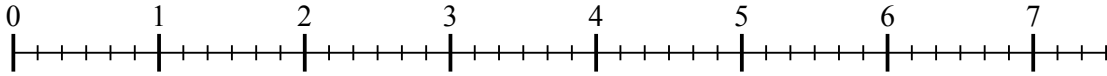
2) $5 : \frac{1}{6}$



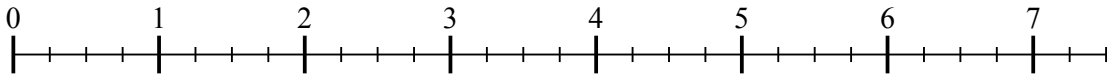
3) $5 : \frac{1}{3}$



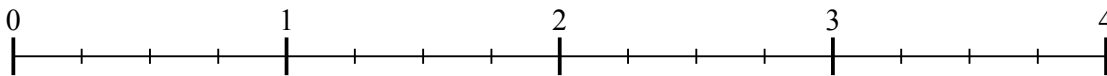
4) $7 : \frac{1}{6}$



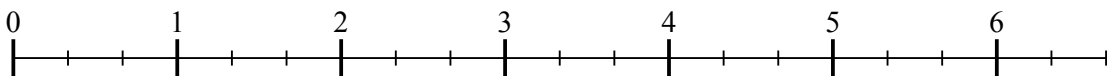
5) $7 : \frac{1}{4}$



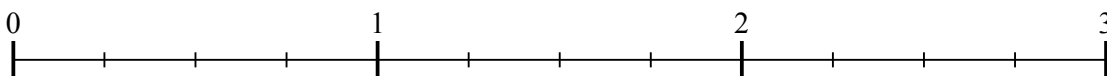
6) $3 : \frac{1}{4}$



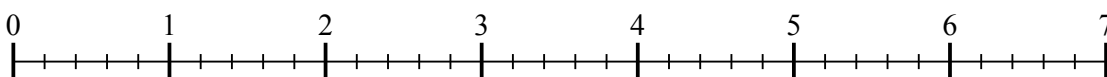
7) $6 : \frac{1}{3}$



8) $2 : \frac{1}{4}$



9) $6 : \frac{1}{5}$



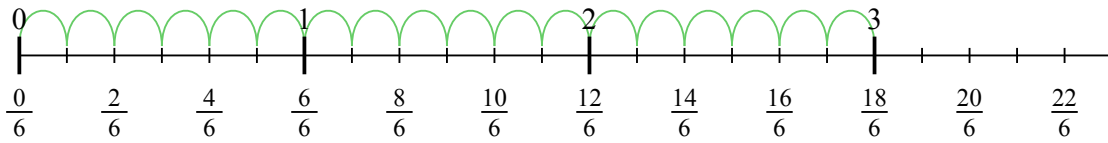
Risposte

1. _____
2. _____
3. _____
4. _____
5. _____
6. _____
7. _____
8. _____
9. _____

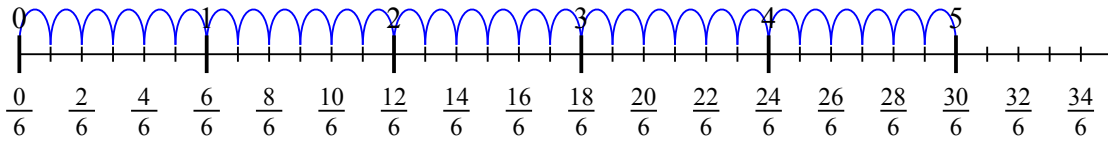


Usa la linea numerata per risolvere ogni problema. Il primo è un esempio.

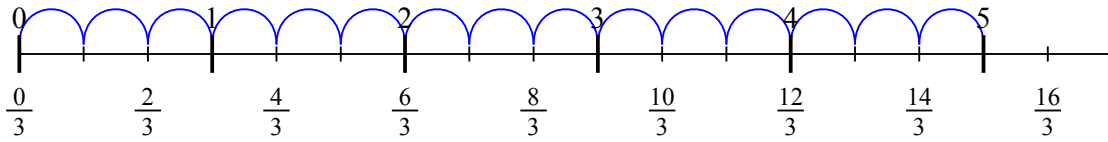
1) $3 : \frac{1}{6}$



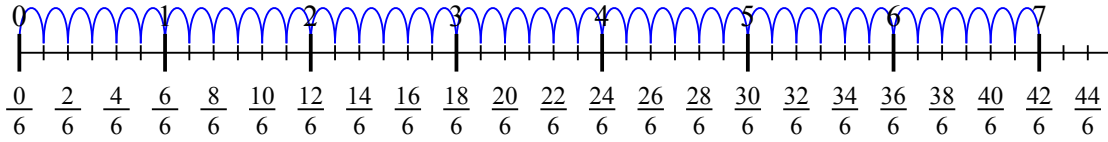
2) $5 : \frac{1}{6}$



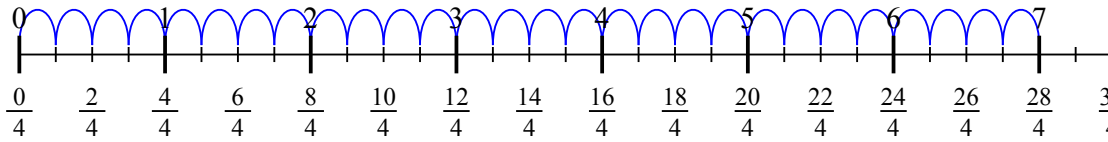
3) $5 : \frac{1}{3}$



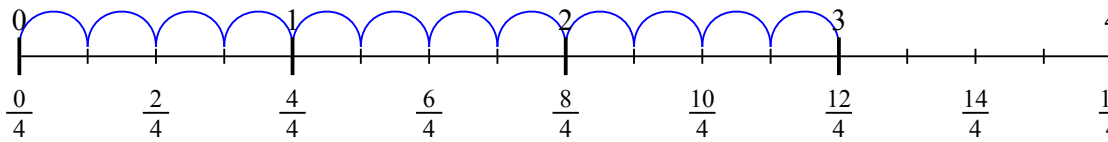
4) $7 : \frac{1}{6}$



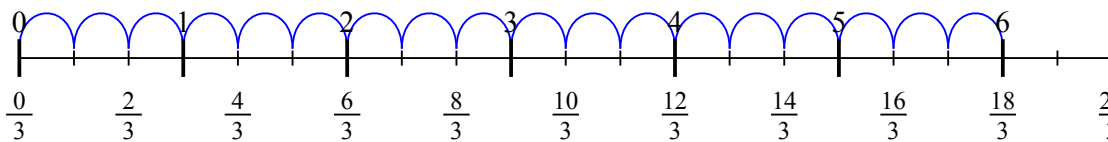
5) $7 : \frac{1}{4}$



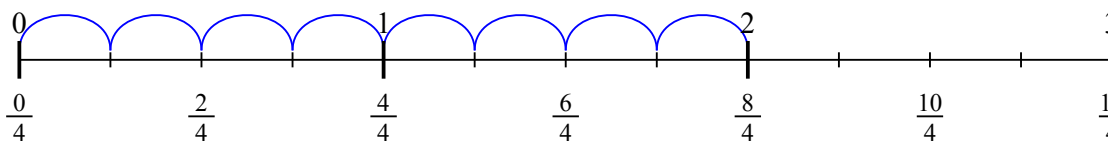
6) $3 : \frac{1}{4}$



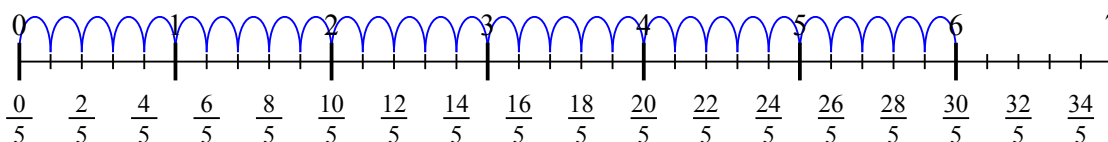
7) $6 : \frac{1}{3}$



8) $2 : \frac{1}{4}$



9) $6 : \frac{1}{5}$

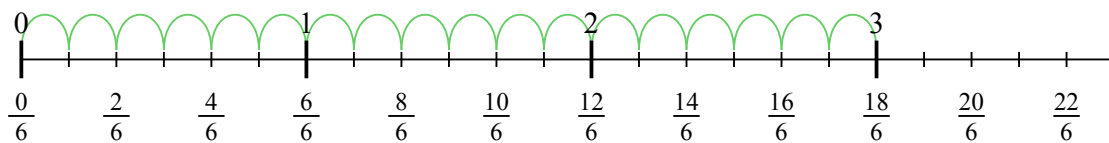


Risposte

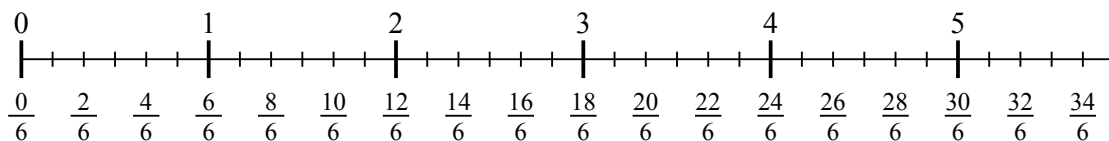
1. 18
2. 30
3. 15
4. 42
5. 28
6. 12
7. 18
8. 8
9. 30



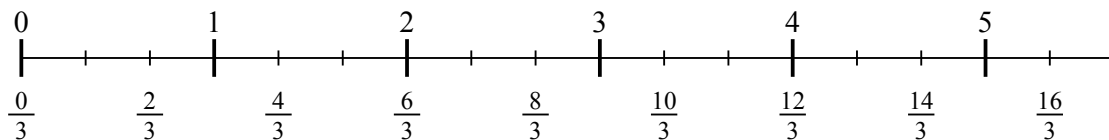
1) $3 : \frac{1}{6}$



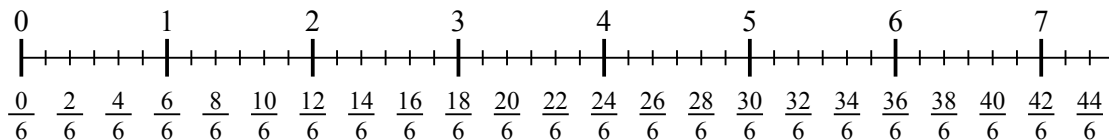
2) $5 : \frac{1}{6}$



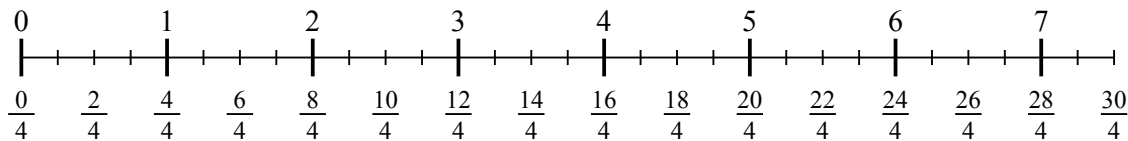
3) $5 : \frac{1}{3}$



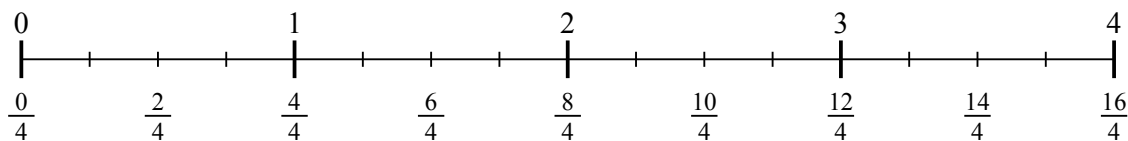
4) $7 : \frac{1}{6}$



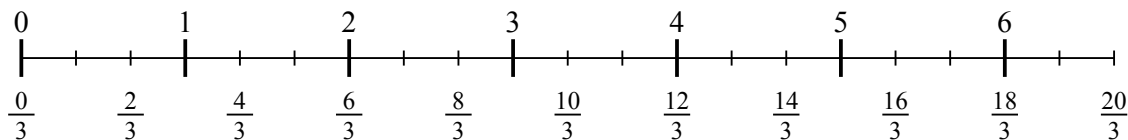
5) $7 : \frac{1}{4}$



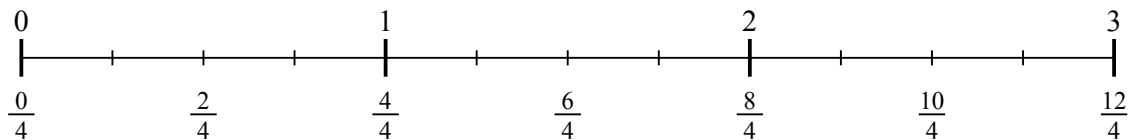
6) $3 : \frac{1}{4}$



7) $6 : \frac{1}{3}$



8) $2 : \frac{1}{4}$



9) $6 : \frac{1}{5}$

