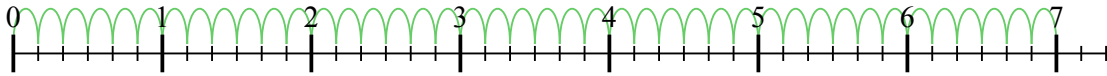


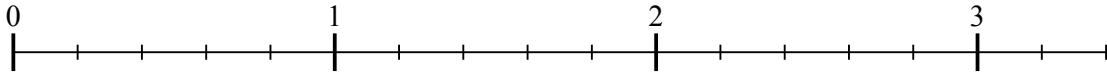


Usa la linea numerata per risolvere ogni problema. Il primo è un esempio.

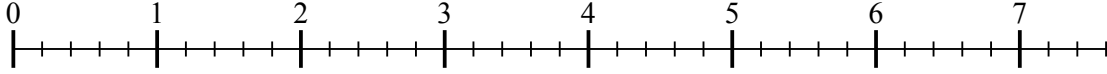
1) $7 : \frac{1}{6}$



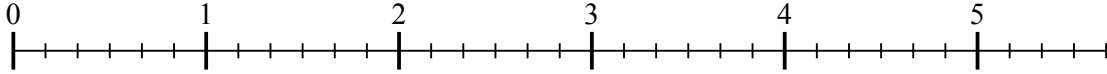
2) $3 : \frac{1}{5}$



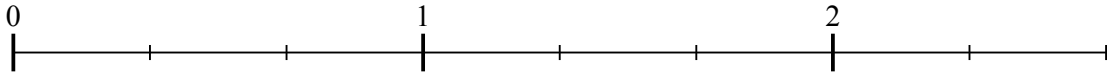
3) $7 : \frac{1}{5}$



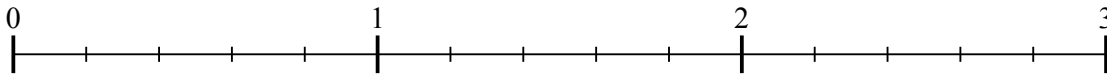
4) $5 : \frac{1}{6}$



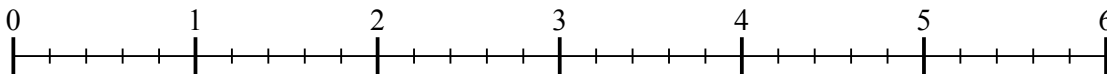
5) $2 : \frac{1}{3}$



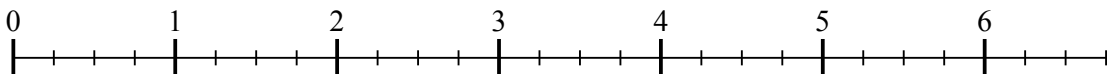
6) $2 : \frac{1}{5}$



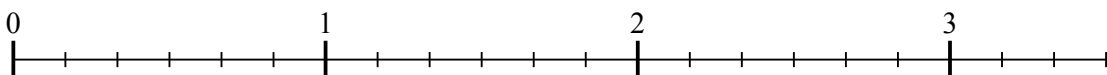
7) $5 : \frac{1}{5}$



8) $6 : \frac{1}{4}$



9) $3 : \frac{1}{6}$



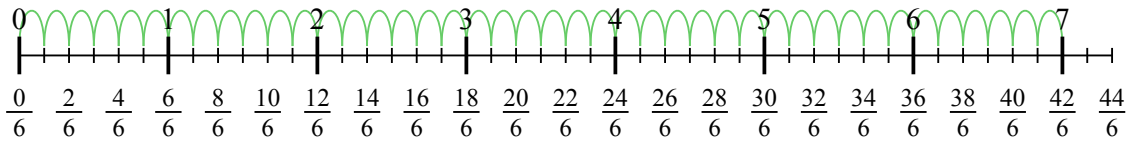
Risposte

- 1. _____
- 2. _____
- 3. _____
- 4. _____
- 5. _____
- 6. _____
- 7. _____
- 8. _____
- 9. _____

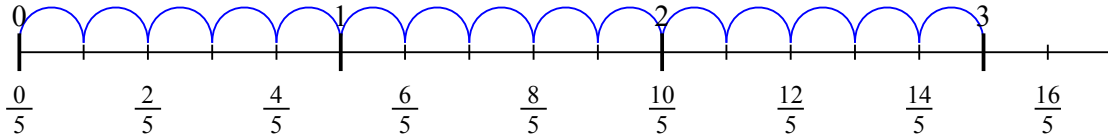


Usa la linea numerata per risolvere ogni problema. Il primo è un esempio.

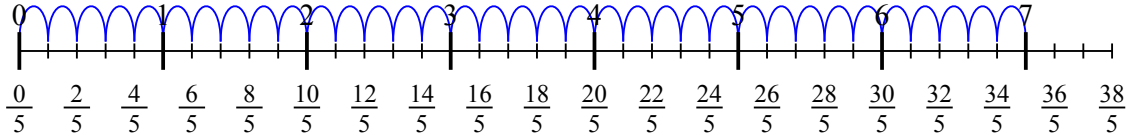
1) $7 : \frac{1}{6}$



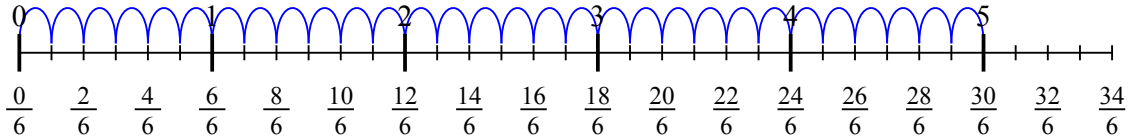
2) $3 : \frac{1}{5}$



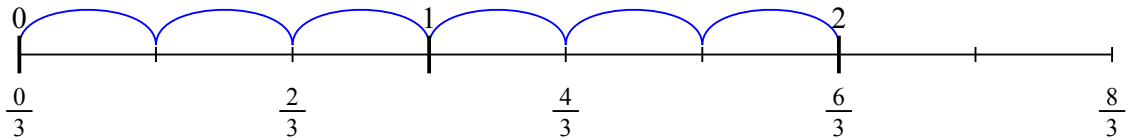
3) $7 : \frac{1}{5}$



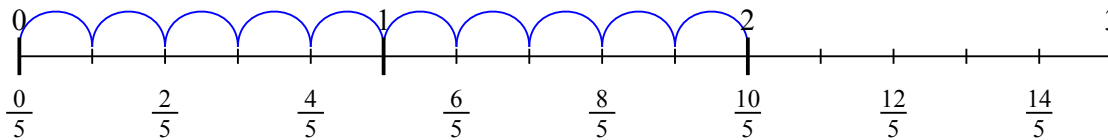
4) $5 : \frac{1}{6}$



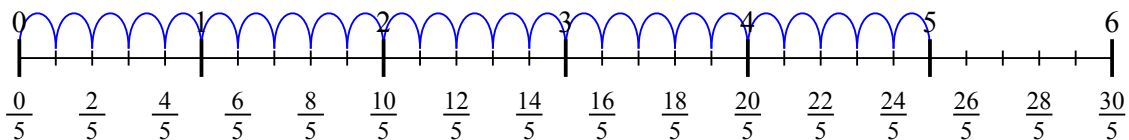
5) $2 : \frac{1}{3}$



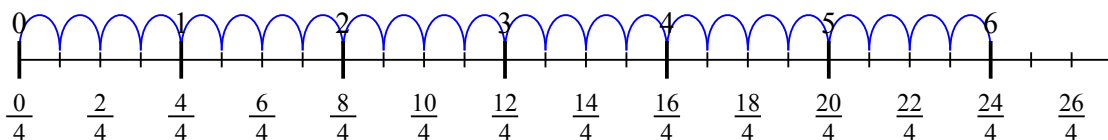
6) $2 : \frac{1}{5}$



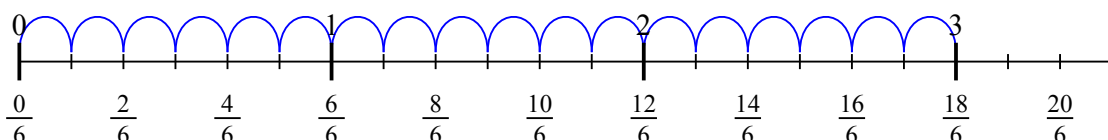
7) $5 : \frac{1}{5}$



8) $6 : \frac{1}{4}$



9) $3 : \frac{1}{6}$

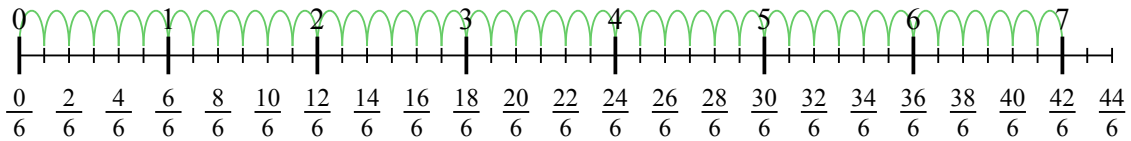


Risposte

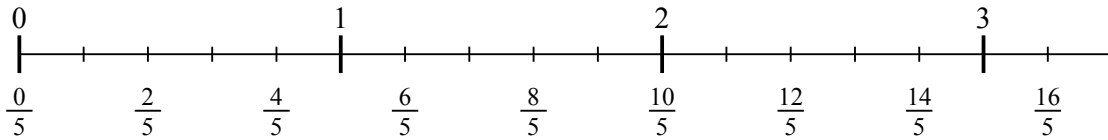
1. 42
2. 15
3. 35
4. 30
5. 6
6. 10
7. 25
8. 24
9. 18



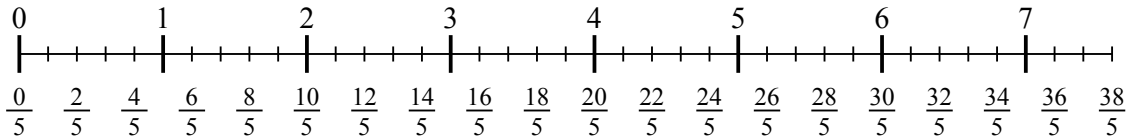
1) $7 : \frac{1}{6}$



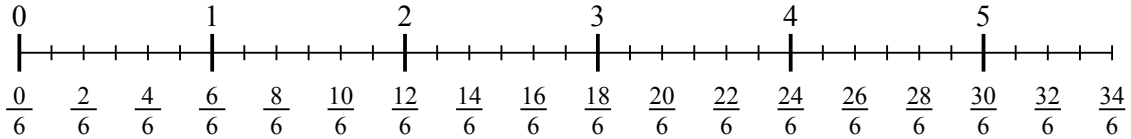
2) $3 : \frac{1}{5}$



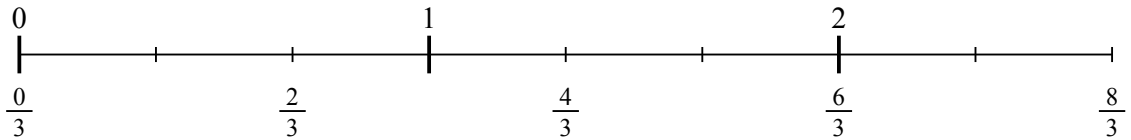
3) $7 : \frac{1}{5}$



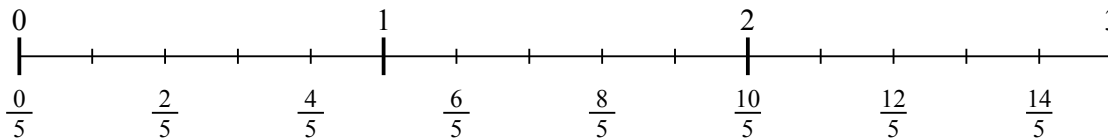
4) $5 : \frac{1}{6}$



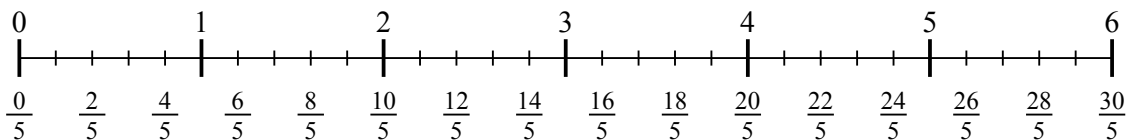
5) $2 : \frac{1}{3}$



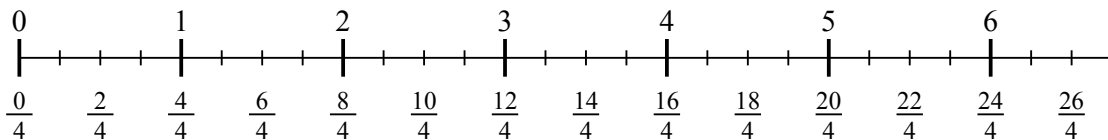
6) $2 : \frac{1}{5}$



7) $5 : \frac{1}{5}$



8) $6 : \frac{1}{4}$



9) $3 : \frac{1}{6}$

