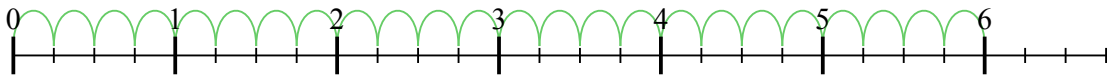


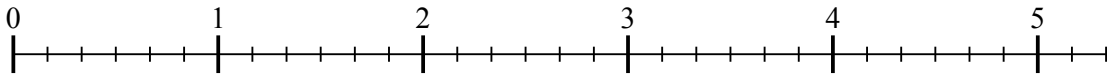


Usa la linea numerata per risolvere ogni problema. Il primo è un esempio.


1) $6 : \frac{1}{4}$



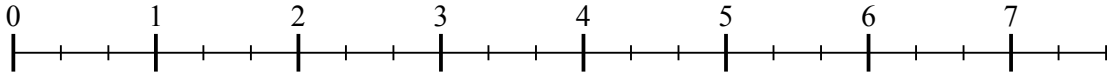
2) $5 : \frac{1}{6}$



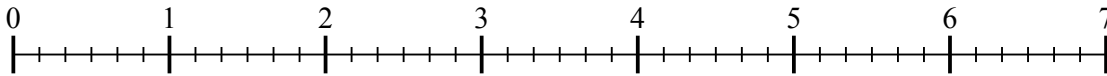
3) $3 : \frac{1}{3}$



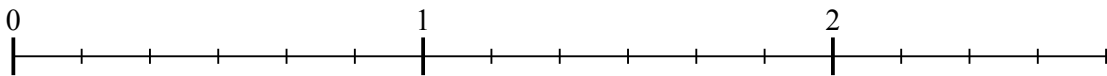
4) $7 : \frac{1}{3}$



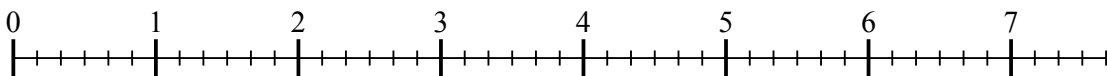
5) $6 : \frac{1}{6}$



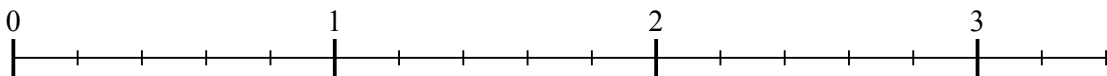
6) $2 : \frac{1}{6}$




7) $7 : \frac{1}{6}$



8) $3 : \frac{1}{5}$



9) $2 : \frac{1}{3}$



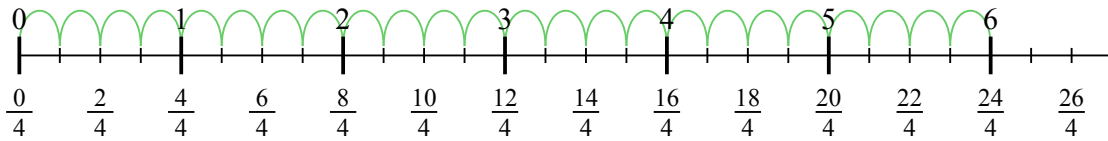
Risposte

1. _____
2. _____
3. _____
4. _____
5. _____
6. _____
7. _____
8. _____
9. _____

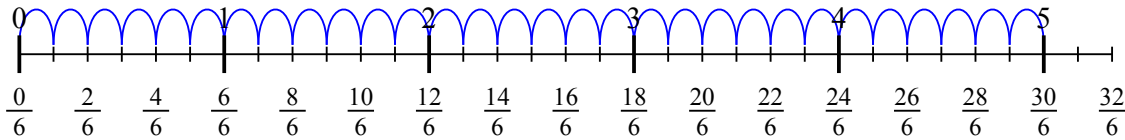


Usa la linea numerata per risolvere ogni problema. Il primo è un esempio.

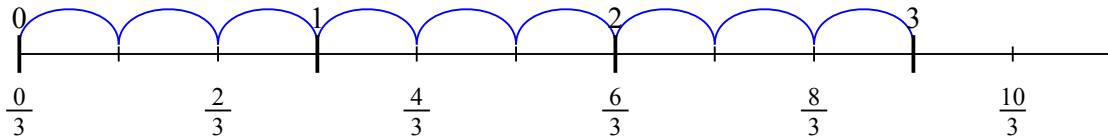
1) $6 : \frac{1}{4}$



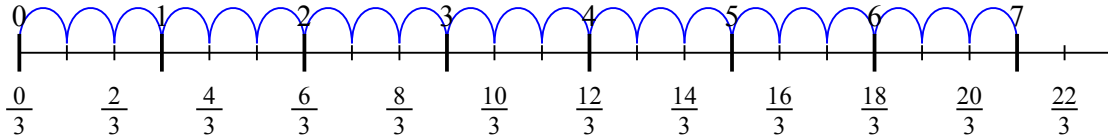
2) $5 : \frac{1}{6}$



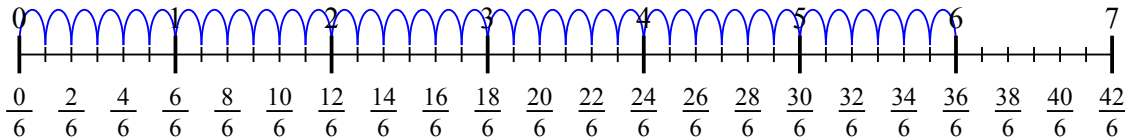
3) $3 : \frac{1}{3}$



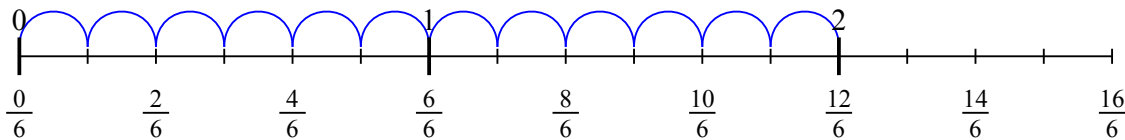
4) $7 : \frac{1}{3}$



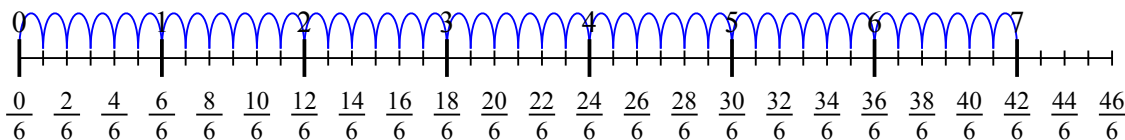
5) $6 : \frac{1}{6}$



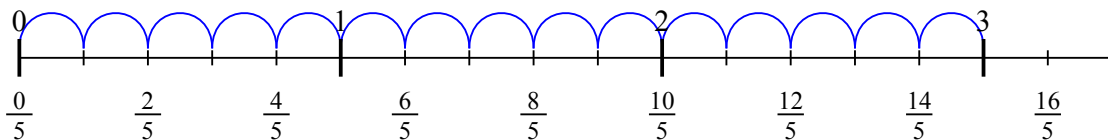
6) $2 : \frac{1}{6}$



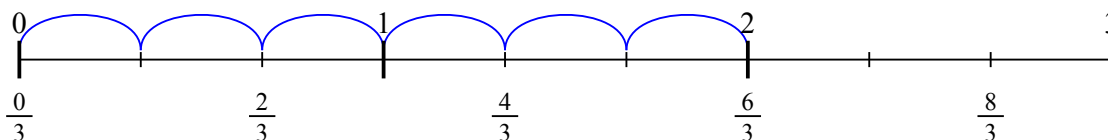
7) $7 : \frac{1}{6}$



8) $3 : \frac{1}{5}$



9) $2 : \frac{1}{3}$

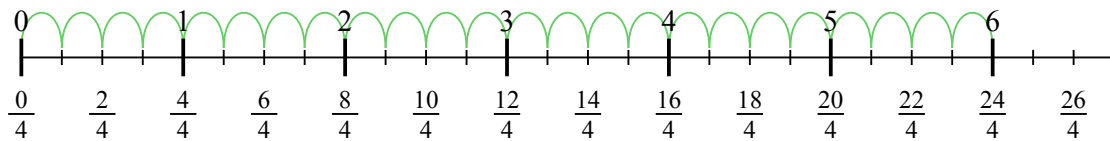


Risposte

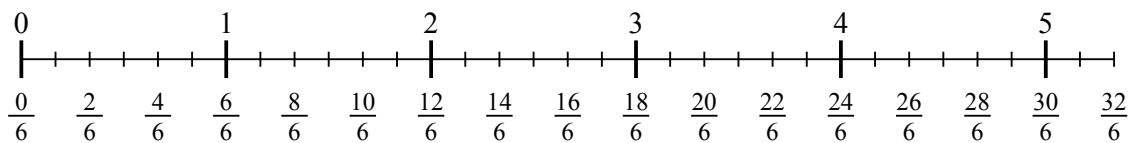
1. 24
2. 30
3. 9
4. 21
5. 36
6. 12
7. 42
8. 15
9. 6



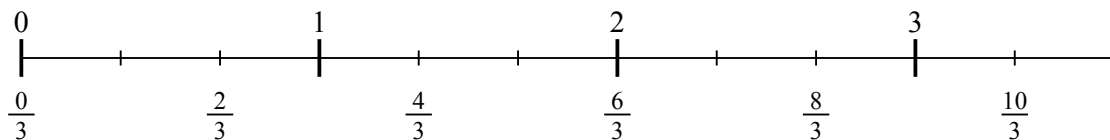
1) $6 : \frac{1}{4}$



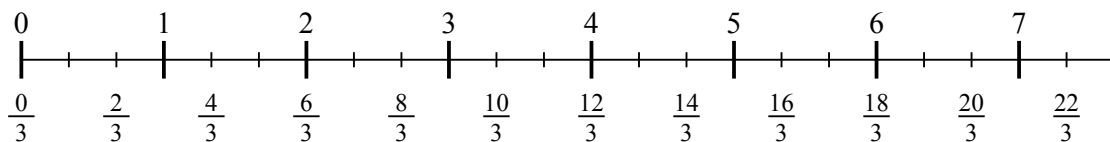
2) $5 : \frac{1}{6}$



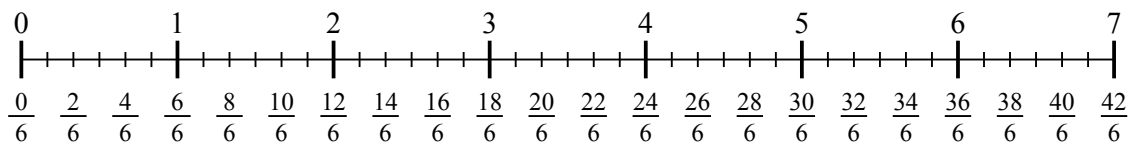
3) $3 : \frac{1}{3}$



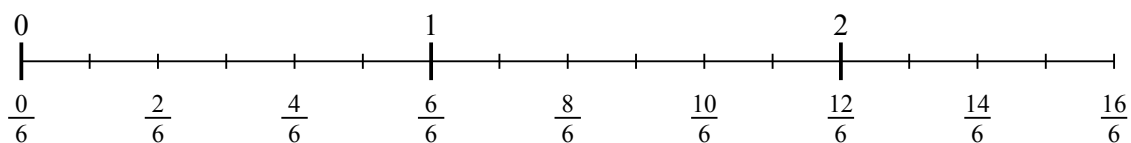
4) $7 : \frac{1}{3}$



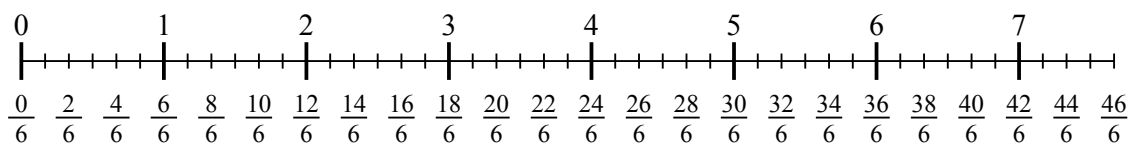
5) $6 : \frac{1}{6}$



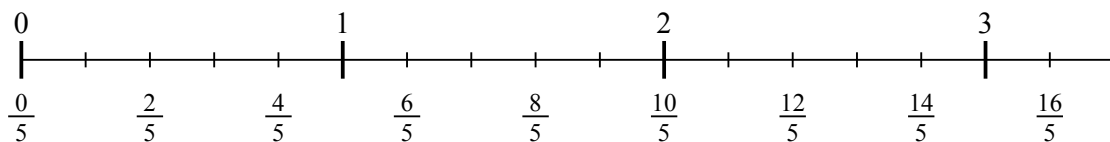
6) $2 : \frac{1}{6}$



7) $7 : \frac{1}{6}$



8) $3 : \frac{1}{5}$



9) $2 : \frac{1}{3}$

