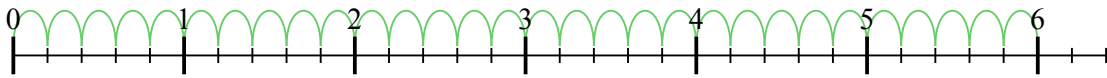


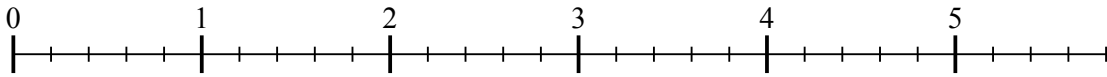


Usa la linea numerata per risolvere ogni problema. Il primo è un esempio.

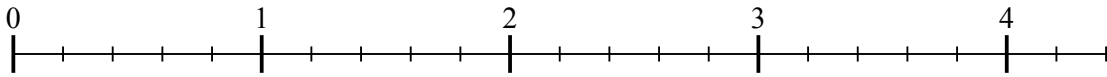
1) $6 : \frac{1}{5}$



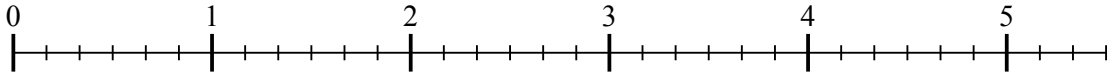
2) $5 : \frac{1}{5}$



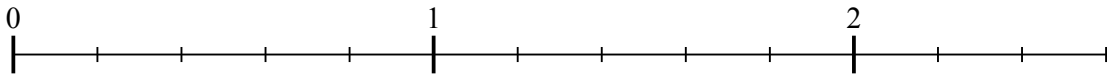
3) $4 : \frac{1}{5}$



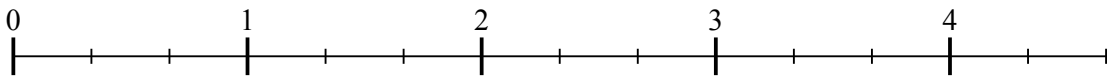
4) $5 : \frac{1}{6}$



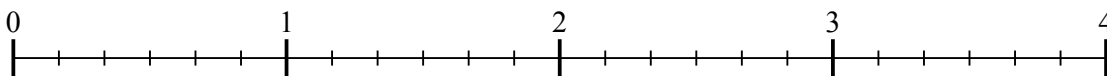
5) $2 : \frac{1}{5}$




6) $4 : \frac{1}{3}$



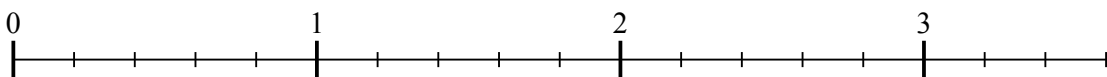
7) $3 : \frac{1}{6}$



8) $2 : \frac{1}{3}$



9) $3 : \frac{1}{5}$



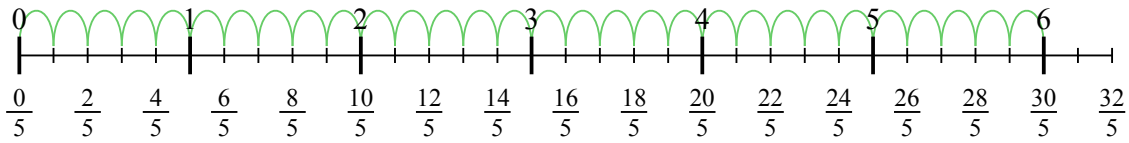
Risposte

- 1. _____
- 2. _____
- 3. _____
- 4. _____
- 5. _____
- 6. _____
- 7. _____
- 8. _____
- 9. _____

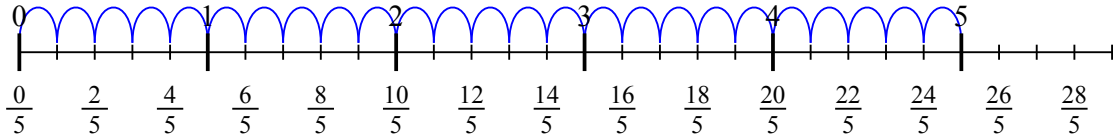


Usa la linea numerata per risolvere ogni problema. Il primo è un esempio.

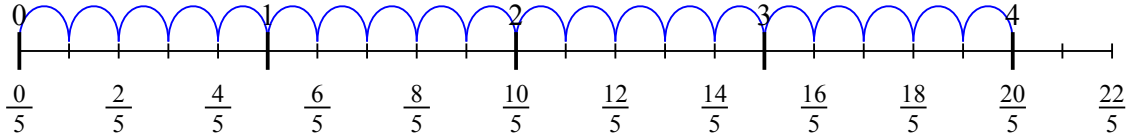
1) $6 : \frac{1}{5}$



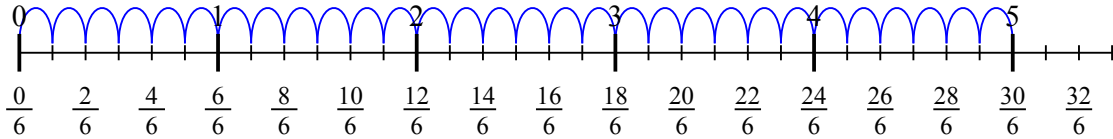
2) $5 : \frac{1}{5}$



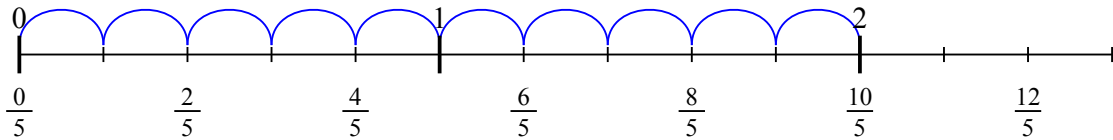
3) $4 : \frac{1}{5}$



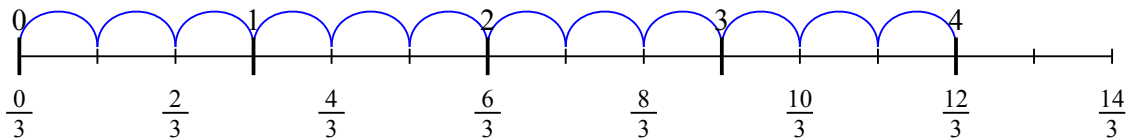
4) $5 : \frac{1}{6}$



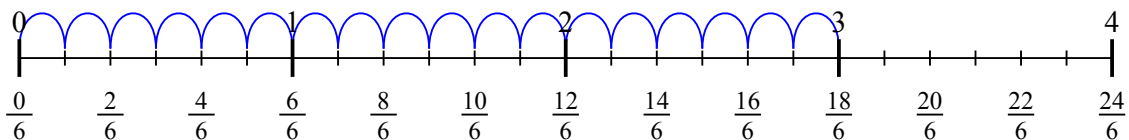
5) $2 : \frac{1}{5}$



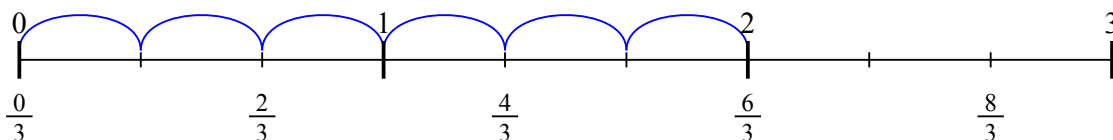
6) $4 : \frac{1}{3}$



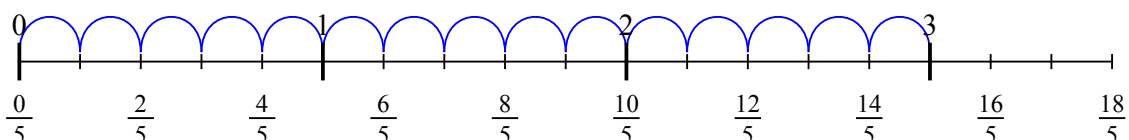
7) $3 : \frac{1}{6}$



8) $2 : \frac{1}{3}$



9) $3 : \frac{1}{5}$



Risposte

1. 30
2. 25
3. 20
4. 30
5. 10
6. 12
7. 18
8. 6
9. 15

