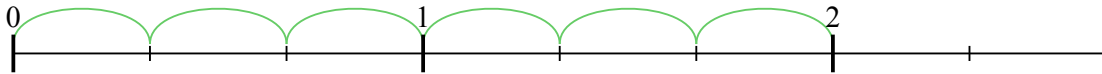




Usa la linea numerata per risolvere ogni problema. Il primo è un esempio.

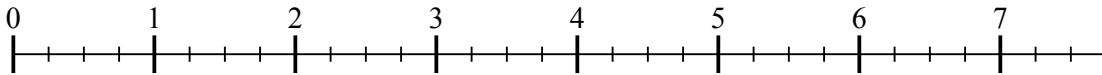
**Risposte**

1)  $2 : \frac{1}{3}$



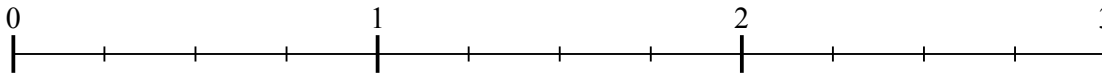
1. \_\_\_\_\_

2)  $7 : \frac{1}{4}$



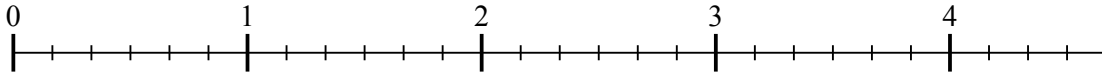
2. \_\_\_\_\_

3)  $2 : \frac{1}{4}$



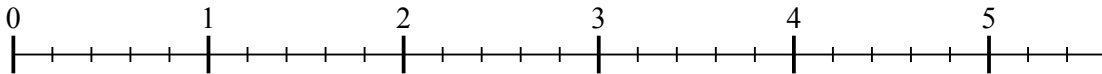
3. \_\_\_\_\_

4)  $4 : \frac{1}{6}$



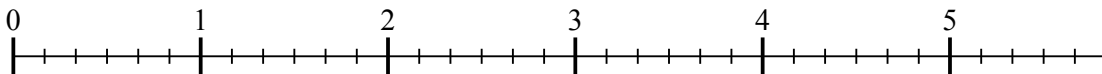
4. \_\_\_\_\_

5)  $5 : \frac{1}{5}$



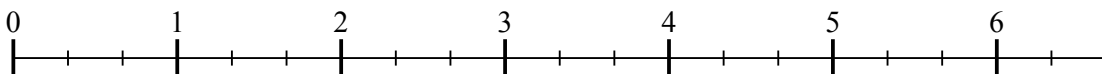
5. \_\_\_\_\_

6)  $5 : \frac{1}{6}$



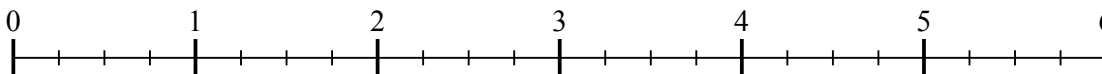
6. \_\_\_\_\_

7)  $6 : \frac{1}{3}$



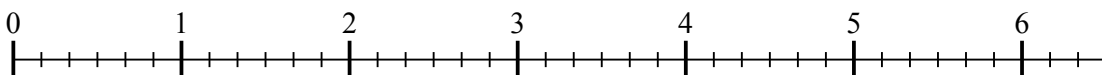
7. \_\_\_\_\_

8)  $5 : \frac{1}{4}$



8. \_\_\_\_\_

9)  $6 : \frac{1}{6}$

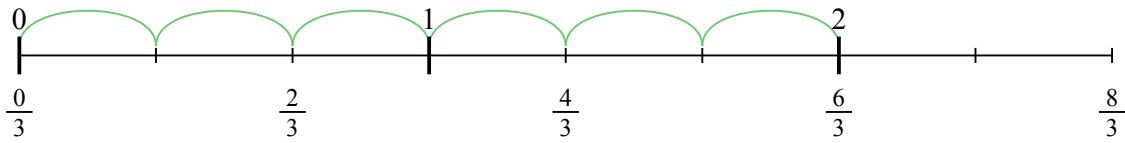


9. \_\_\_\_\_

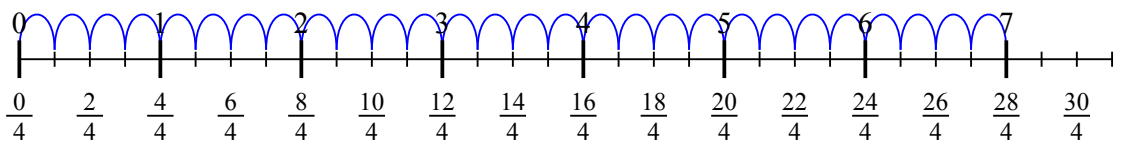


Usa la linea numerata per risolvere ogni problema. Il primo è un esempio.

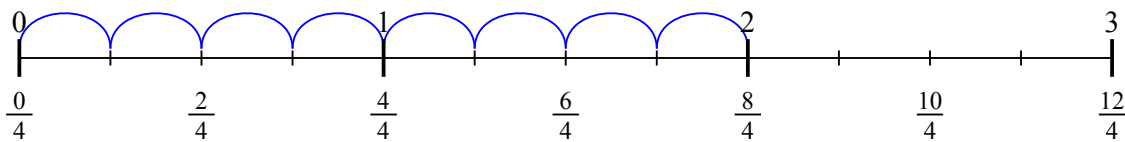
1)  $2 : \frac{1}{3}$



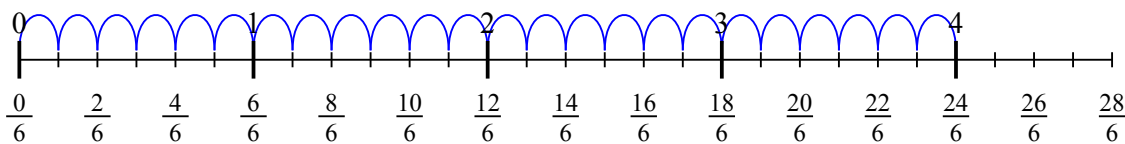
2)  $7 : \frac{1}{4}$



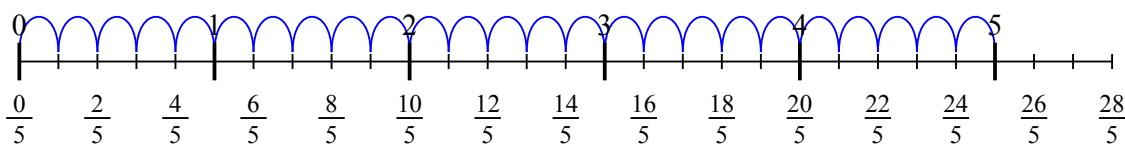
3)  $2 : \frac{1}{4}$



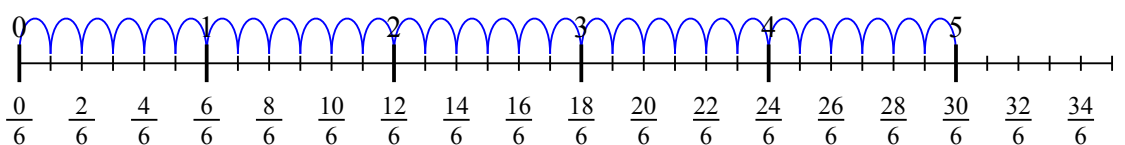
4)  $4 : \frac{1}{6}$



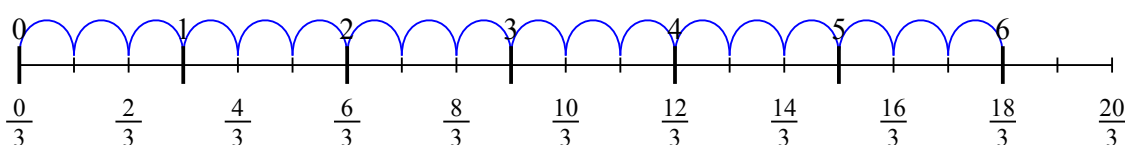
5)  $5 : \frac{1}{5}$



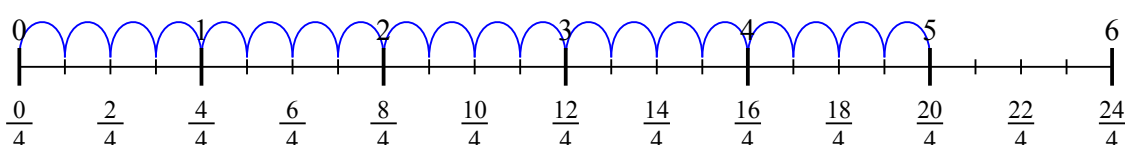
6)  $5 : \frac{1}{6}$



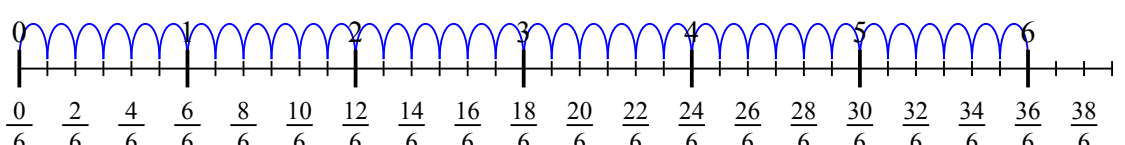
7)  $6 : \frac{1}{3}$



8)  $5 : \frac{1}{4}$



9)  $6 : \frac{1}{6}$

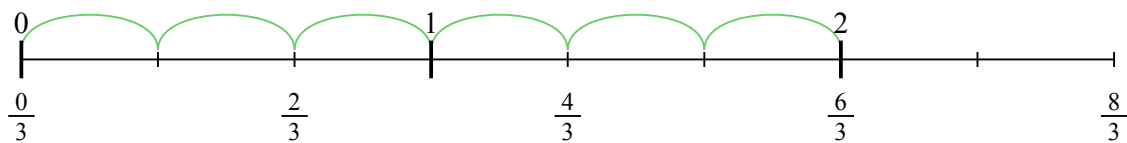


**Risposte**

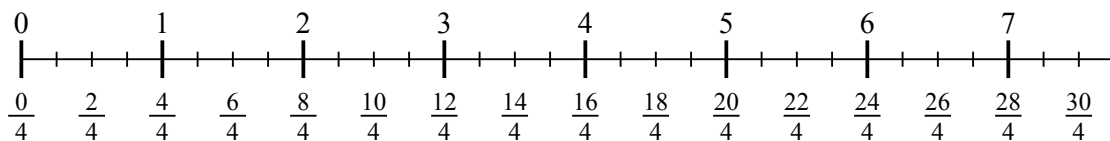
1. 6
2. 28
3. 8
4. 24
5. 25
6. 30
7. 18
8. 20
9. 36



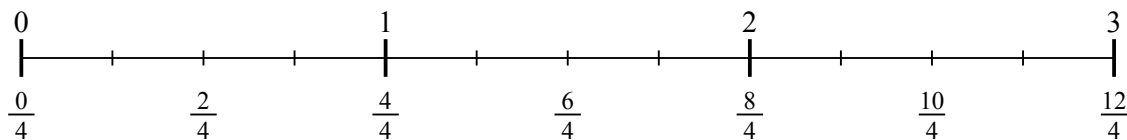
1)  $2 : \frac{1}{3}$



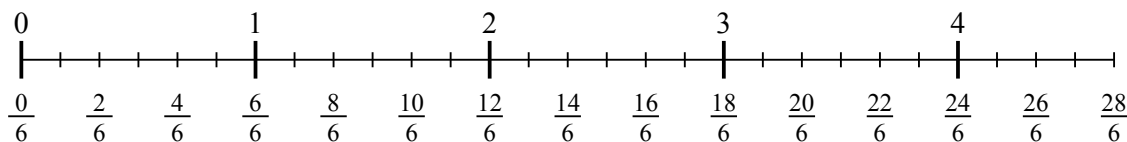
2)  $7 : \frac{1}{4}$



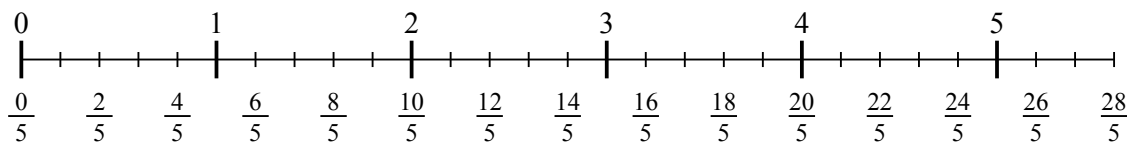
3)  $2 : \frac{1}{4}$



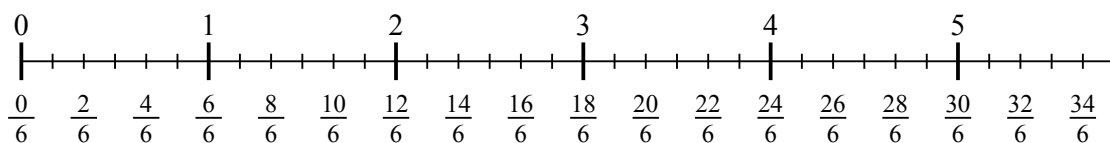
4)  $4 : \frac{1}{6}$



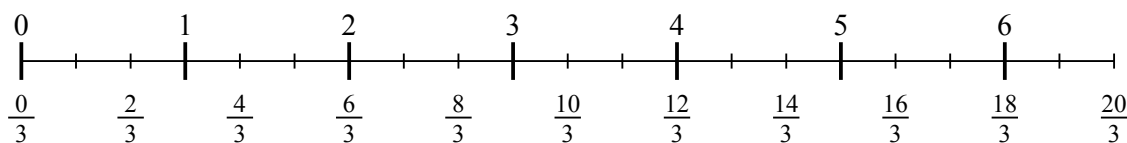
5)  $5 : \frac{1}{5}$



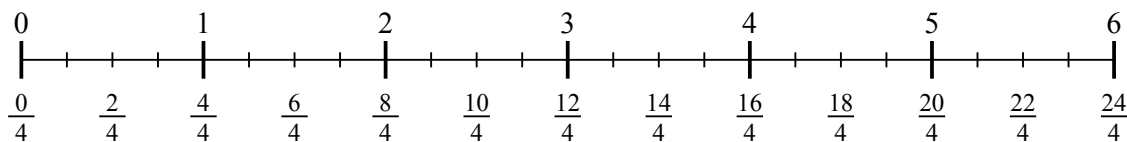
6)  $5 : \frac{1}{6}$



7)  $6 : \frac{1}{3}$



8)  $5 : \frac{1}{4}$



9)  $6 : \frac{1}{6}$

