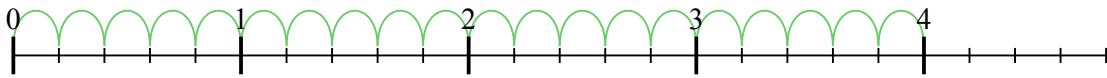





Usa la linea numerata per risolvere ogni problema. Il primo è un esempio.

Risposte

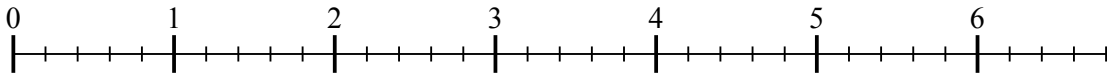
1) $4 : \frac{1}{5}$



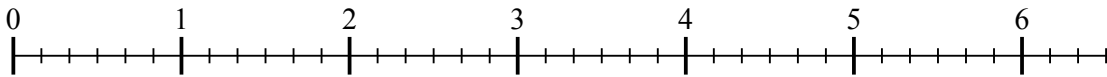
2) $3 : \frac{1}{3}$



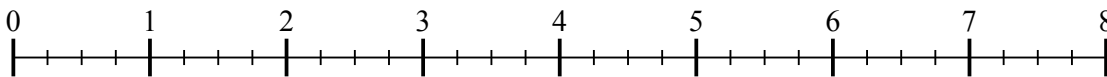
3) $6 : \frac{1}{5}$



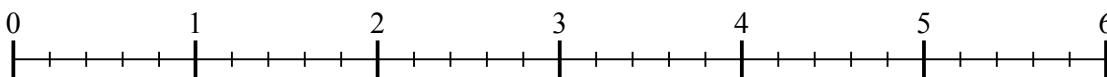
4) $6 : \frac{1}{6}$



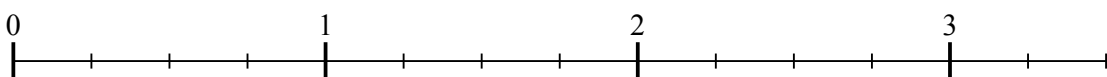
5) $7 : \frac{1}{4}$



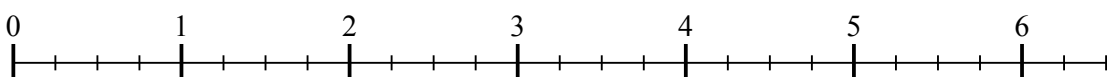
6) $5 : \frac{1}{5}$



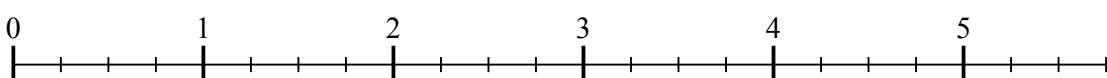
7) $3 : \frac{1}{4}$



8) $6 : \frac{1}{4}$



9) $5 : \frac{1}{4}$

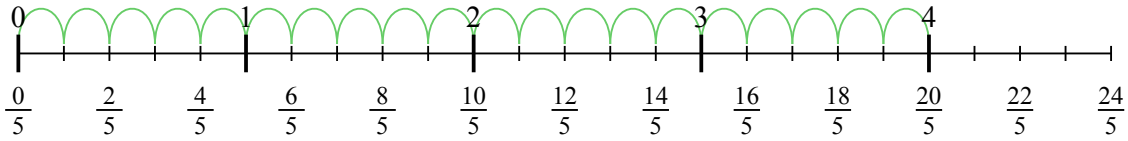


- 1. _____
- 2. _____
- 3. _____
- 4. _____
- 5. _____
- 6. _____
- 7. _____
- 8. _____
- 9. _____

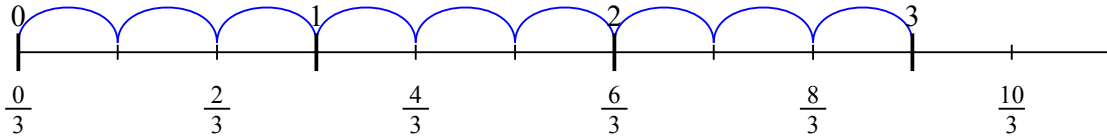


Usa la linea numerata per risolvere ogni problema. Il primo è un esempio.

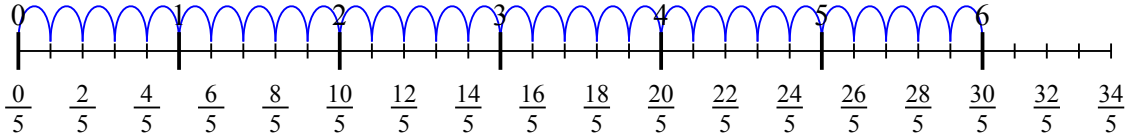
1) $4 : \frac{1}{5}$



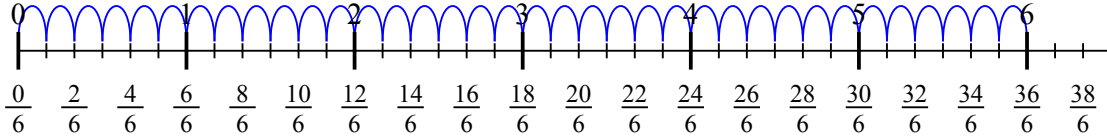
2) $3 : \frac{1}{3}$



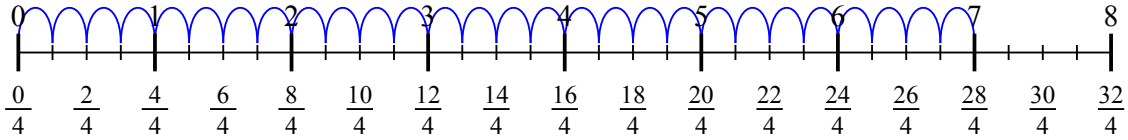
3) $6 : \frac{1}{5}$



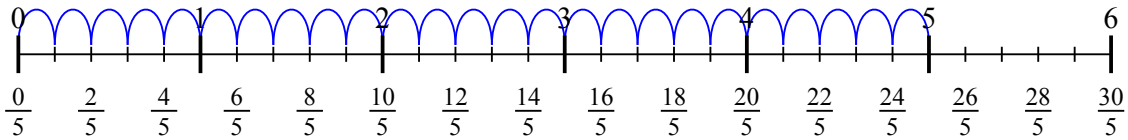
4) $6 : \frac{1}{6}$



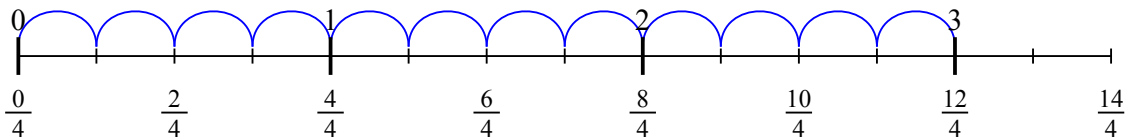
5) $7 : \frac{1}{4}$



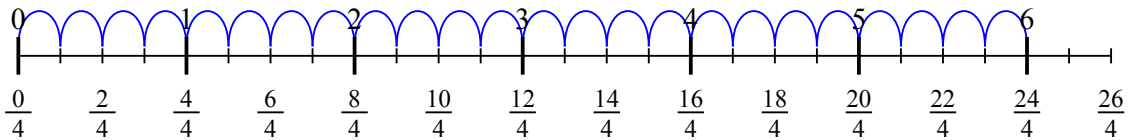
6) $5 : \frac{1}{5}$



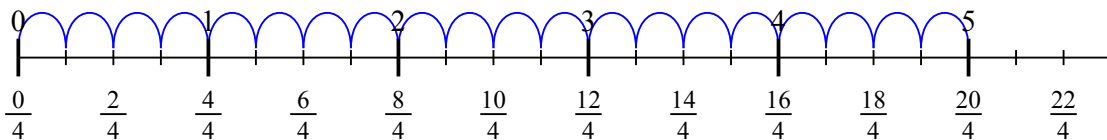
7) $3 : \frac{1}{4}$



8) $6 : \frac{1}{4}$



9) $5 : \frac{1}{4}$

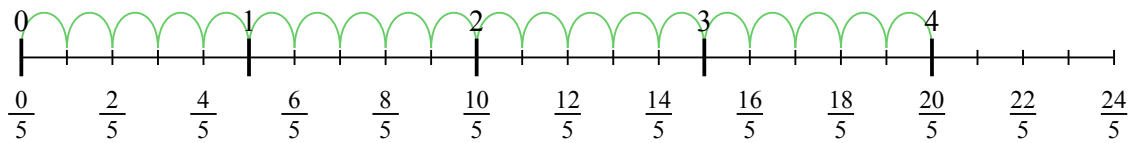


Risposte

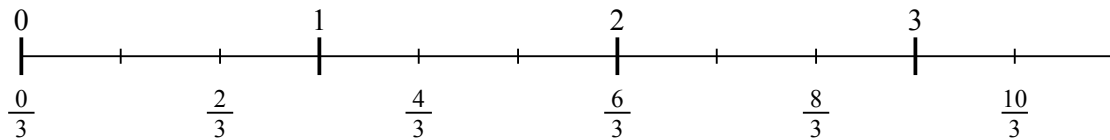
1. 20
2. 9
3. 30
4. 36
5. 28
6. 25
7. 12
8. 24
9. 20



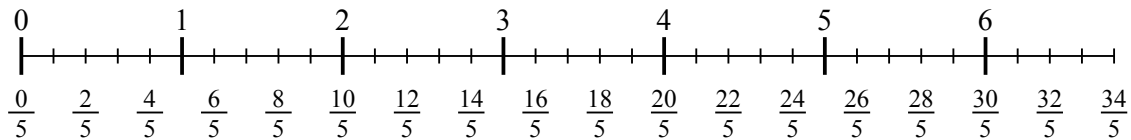
1) $4 : \frac{1}{5}$



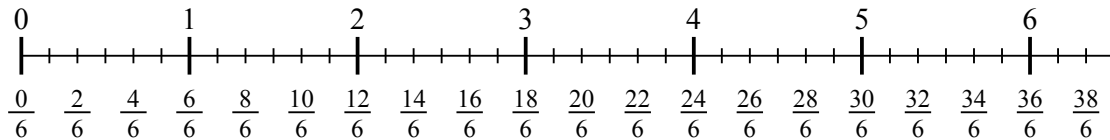
2) $3 : \frac{1}{3}$



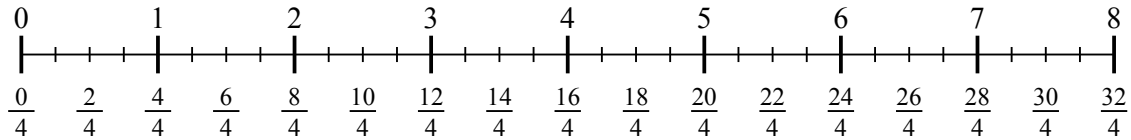
3) $6 : \frac{1}{5}$



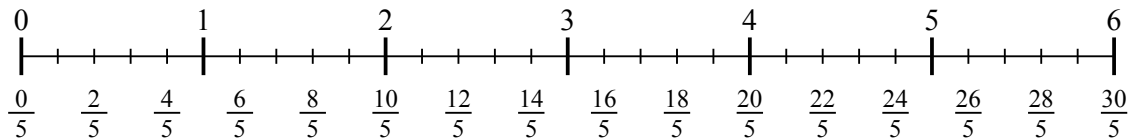
4) $6 : \frac{1}{6}$



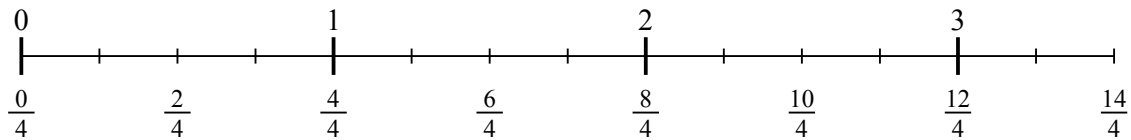
5) $7 : \frac{1}{4}$



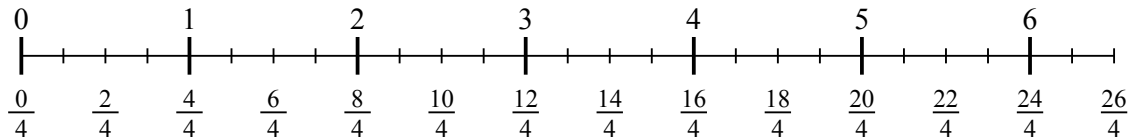
6) $5 : \frac{1}{5}$



7) $3 : \frac{1}{4}$



8) $6 : \frac{1}{4}$



9) $5 : \frac{1}{4}$

