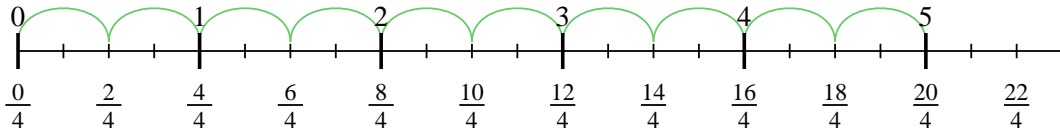


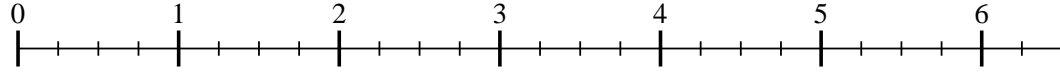


Usa la linea numerata per risolvere ogni problema. Il primo è un esempio.

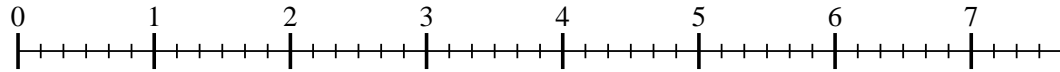
1) $5 : \frac{2}{4}$



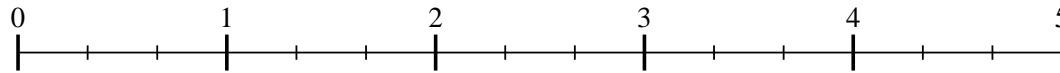
2) $6 : \frac{2}{4}$



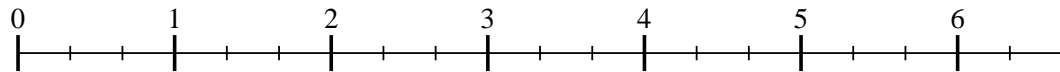
3) $7 : \frac{2}{6}$



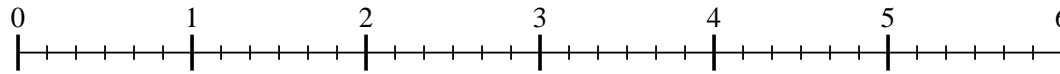
4) $4 : \frac{2}{3}$



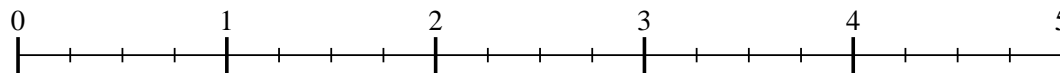
5) $6 : \frac{2}{3}$



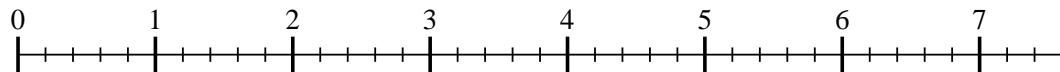
6) $5 : \frac{5}{6}$



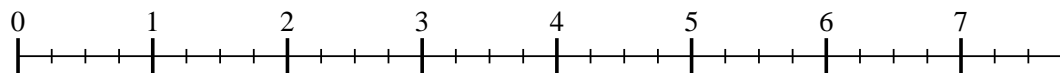
7) $4 : \frac{2}{4}$



8) $7 : \frac{2}{5}$



9) $7 : \frac{3}{4}$

**Risposte**

1. _____

2. _____

3. _____

4. _____

5. _____

6. _____

7. _____

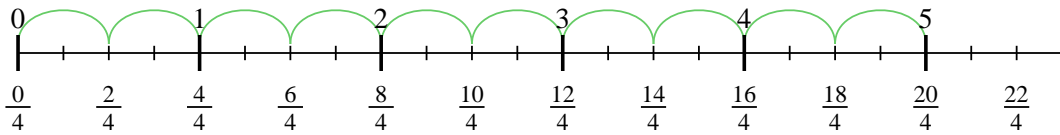
8. _____

9. _____

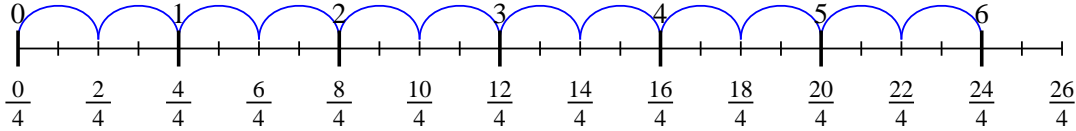


Usa la linea numerata per risolvere ogni problema. Il primo è un esempio.

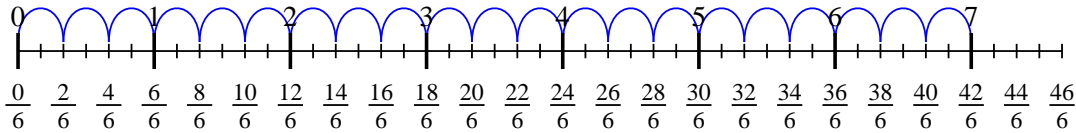
1) $5 : \frac{2}{4}$



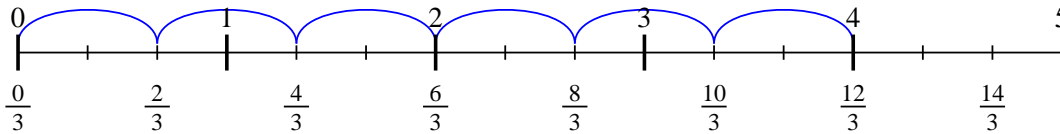
2) $6 : \frac{2}{4}$



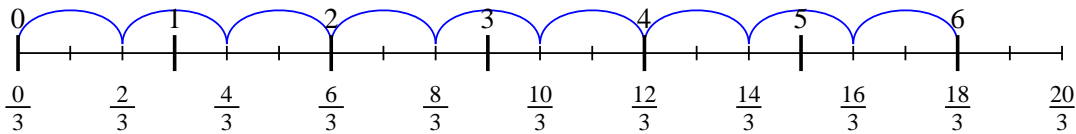
3) $7 : \frac{2}{6}$



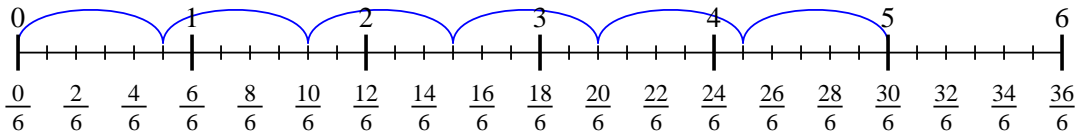
4) $4 : \frac{2}{3}$



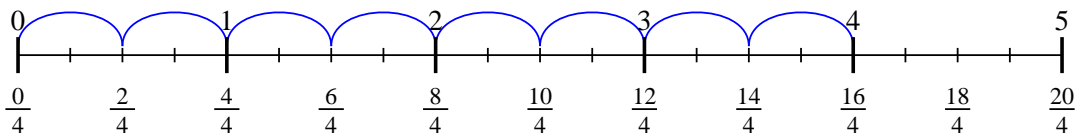
5) $6 : \frac{2}{3}$



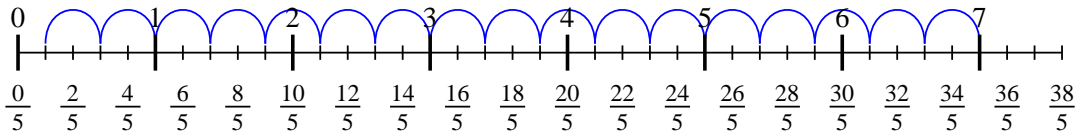
6) $5 : \frac{5}{6}$



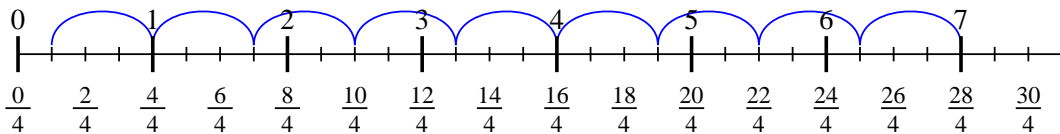
7) $4 : \frac{2}{4}$



8) $7 : \frac{2}{5}$



9) $7 : \frac{3}{4}$

**Risposte**

1. 10
2. 12
3. 21
4. 6
5. 9
6. 6
7. 8
8. $17 \frac{1}{2}$
9. $9 \frac{1}{3}$