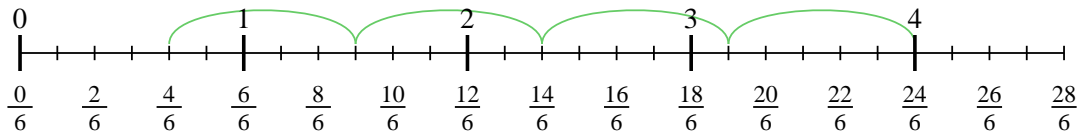




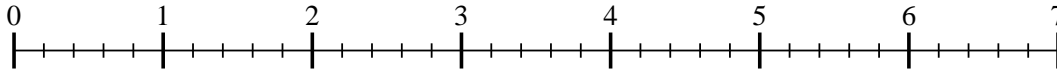
Usa la linea numerata per risolvere ogni problema. Il primo è un esempio.

Risposte

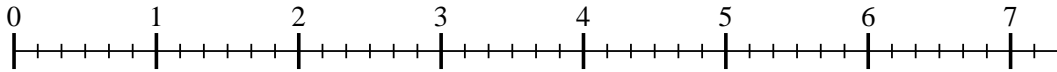
1) $4 : \frac{5}{6}$




2) $6 : \frac{3}{5}$



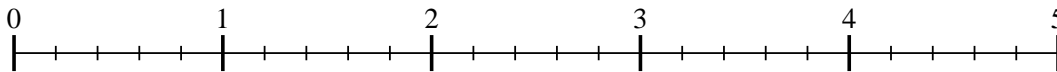
3) $7 : \frac{3}{6}$



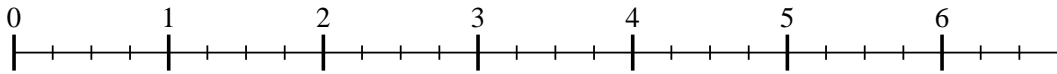
4) $2 : \frac{2}{3}$



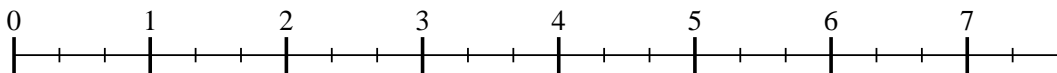
5) $4 : \frac{4}{5}$



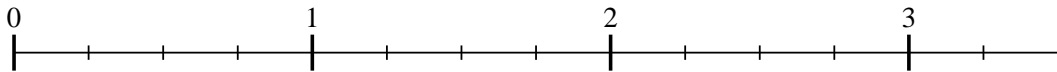
6) $6 : \frac{3}{4}$



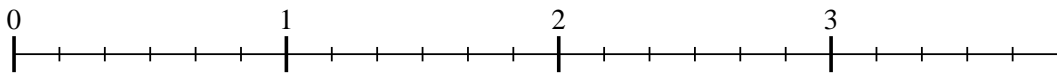
7) $7 : \frac{2}{3}$



8) $3 : \frac{2}{4}$



9) $3 : \frac{5}{6}$



1. _____

2. _____

3. _____

4. _____

5. _____

6. _____

7. _____

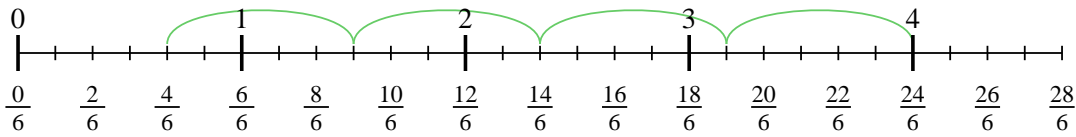
8. _____

9. _____

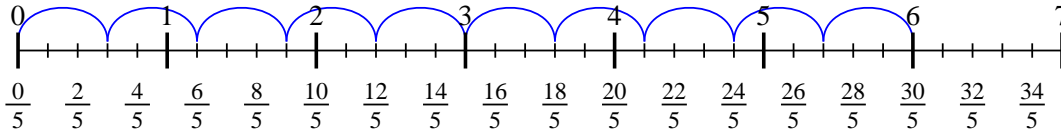


Usa la linea numerata per risolvere ogni problema. Il primo è un esempio.

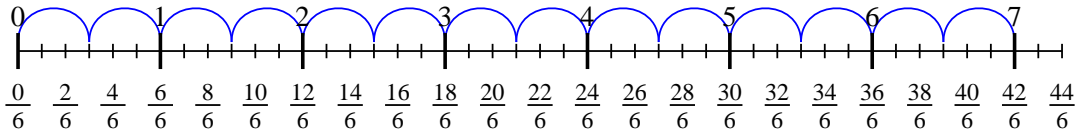
1) $4 : \frac{5}{6}$



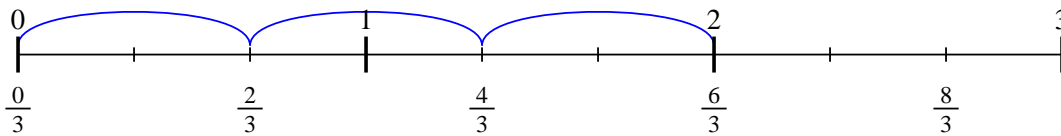
2) $6 : \frac{3}{5}$



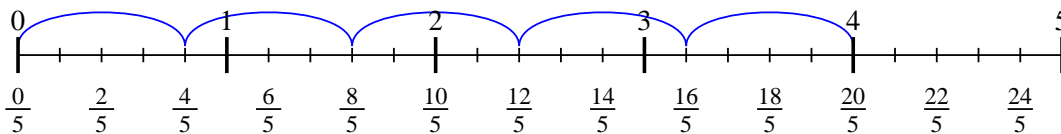
3) $7 : \frac{3}{6}$



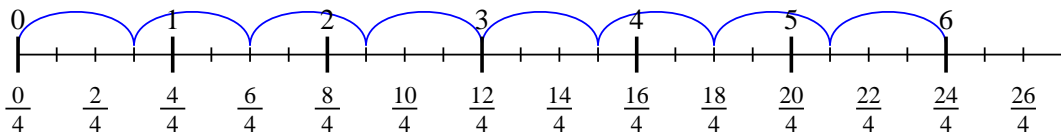
4) $2 : \frac{2}{3}$



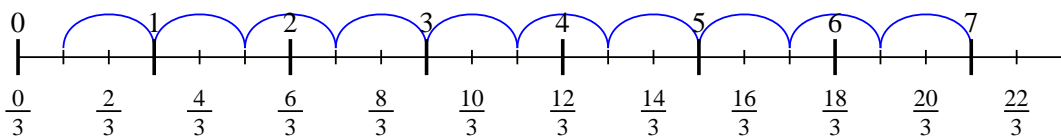
5) $4 : \frac{4}{5}$



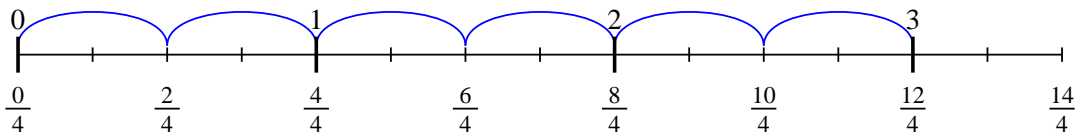
6) $6 : \frac{3}{4}$



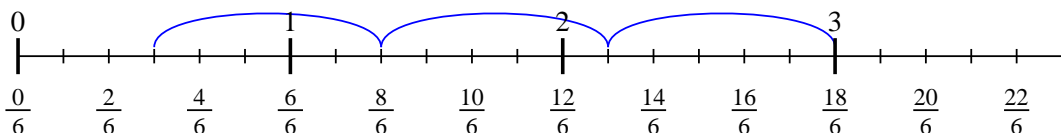
7) $7 : \frac{2}{3}$



8) $3 : \frac{2}{4}$



9) $3 : \frac{5}{6}$

**Risposte**

1. $4 \frac{4}{5}$

2. 10

3. 14

4. 3

5. 5

6. 8

7. $10 \frac{1}{2}$

8. 6

9. $3 \frac{3}{5}$