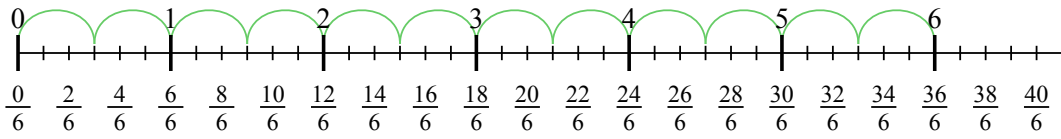




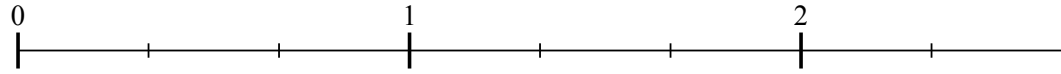
Usa la linea numerata per risolvere ogni problema. Il primo è un esempio.

Risposte

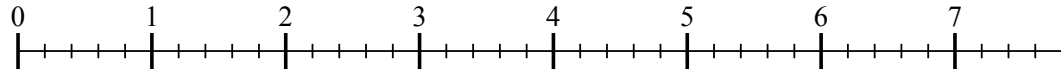
1) $6 : \frac{3}{6}$



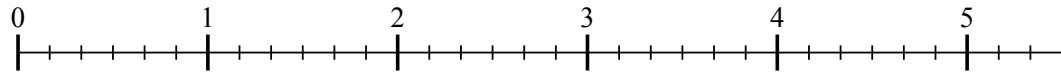
2) $2 : \frac{2}{3}$



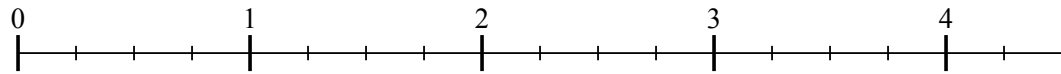
3) $7 : \frac{4}{5}$



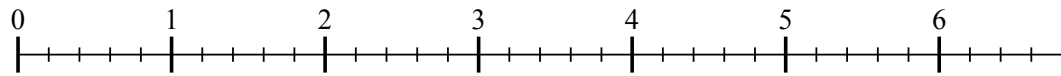
4) $5 : \frac{5}{6}$



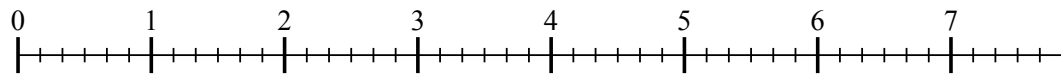
5) $4 : \frac{2}{4}$



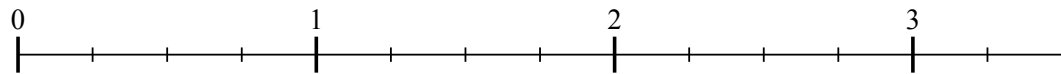
6) $6 : \frac{2}{5}$



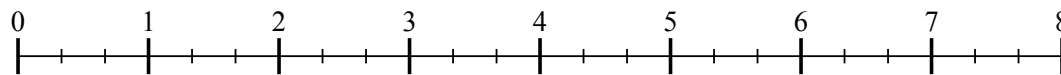
7) $7 : \frac{4}{6}$



8) $3 : \frac{2}{4}$



9) $7 : \frac{2}{3}$

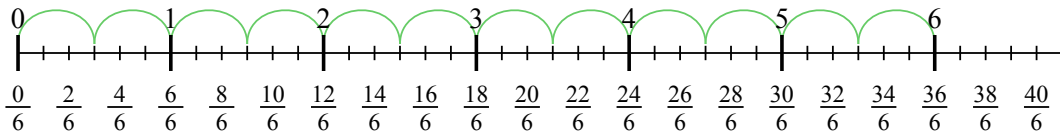


1. _____
2. _____
3. _____
4. _____
5. _____
6. _____
7. _____
8. _____
9. _____

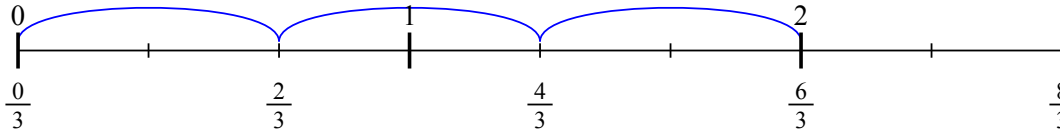


Usa la linea numerata per risolvere ogni problema. Il primo è un esempio.

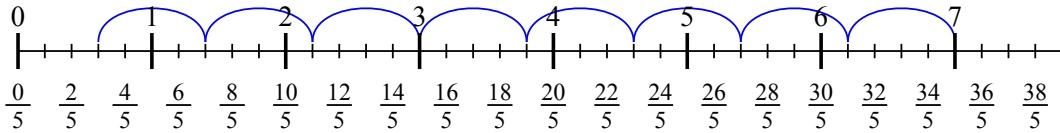
1) $6 : \frac{3}{6}$



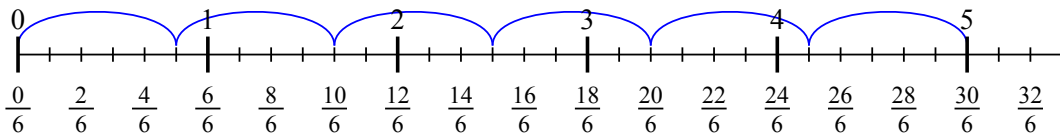
2) $2 : \frac{2}{3}$



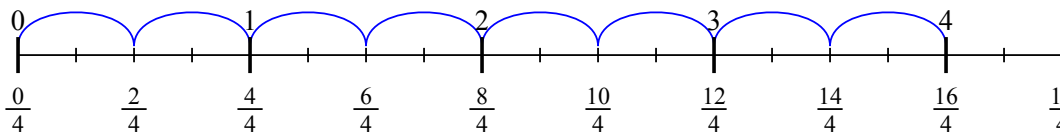
3) $7 : \frac{4}{5}$



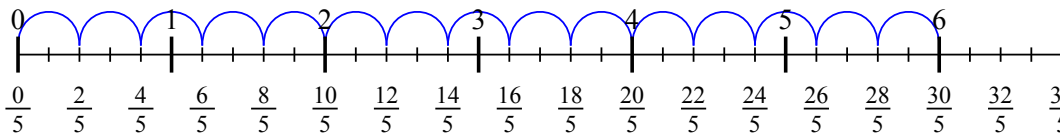
4) $5 : \frac{5}{6}$



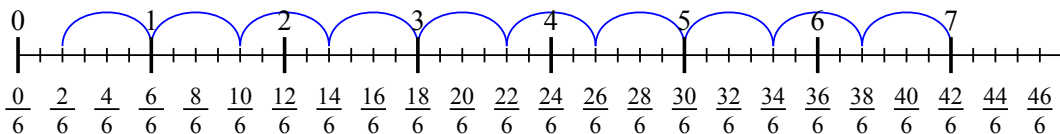
5) $4 : \frac{2}{4}$



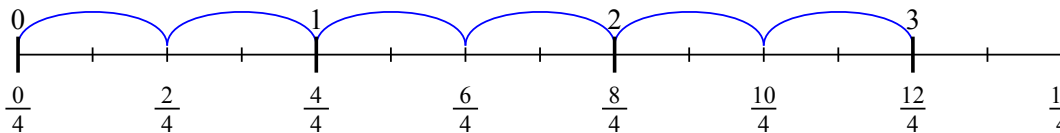
6) $6 : \frac{2}{5}$



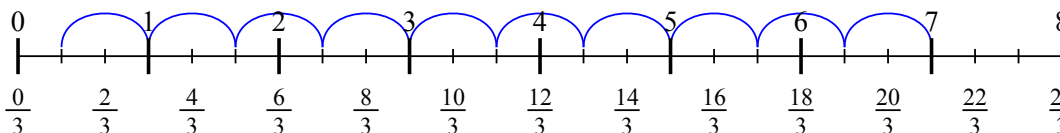
7) $7 : \frac{4}{6}$



8) $3 : \frac{2}{4}$



9) $7 : \frac{2}{3}$



Risposte

1. 12
2. 3
3. $8 \frac{3}{4}$
4. 6
5. 8
6. 15
7. $10 \frac{2}{4}$
8. 6
9. $10 \frac{1}{2}$