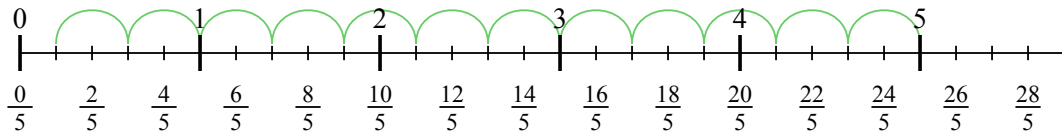




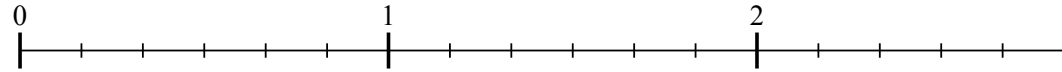
Usa la linea numerata per risolvere ogni problema. Il primo è un esempio.

Risposte

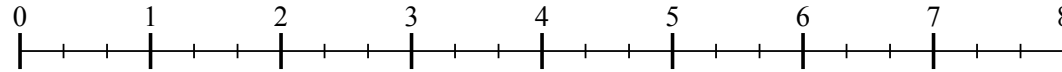
1) $5 : \frac{2}{5}$



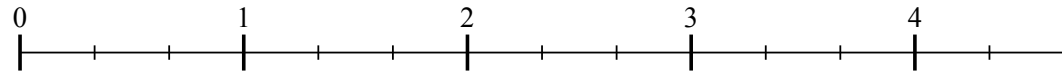
2) $2 : \frac{3}{6}$



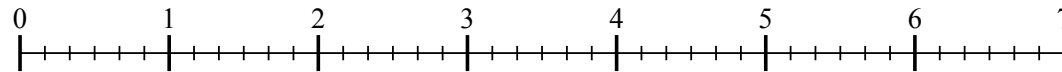
3) $7 : \frac{2}{3}$



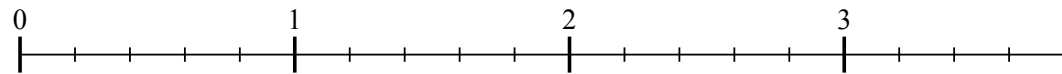
4) $4 : \frac{2}{3}$



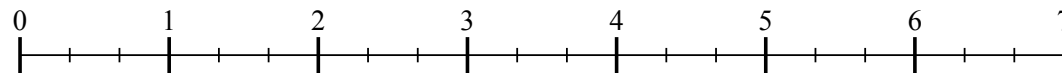
5) $6 : \frac{4}{6}$



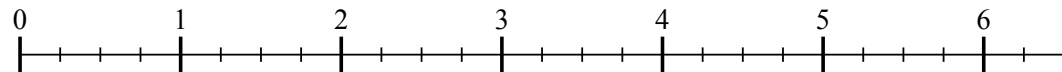
6) $3 : \frac{4}{5}$



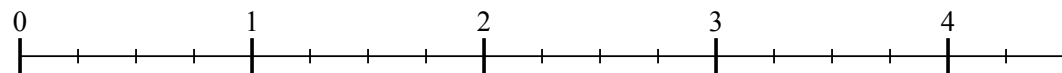
7) $6 : \frac{2}{3}$



8) $6 : \frac{3}{4}$



9) $4 : \frac{3}{4}$

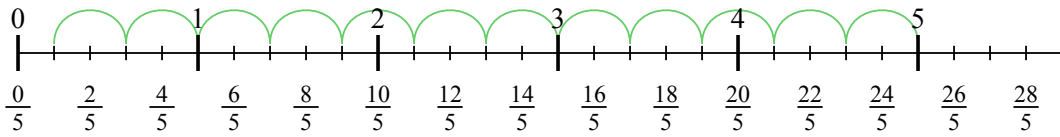


- 1. _____
- 2. _____
- 3. _____
- 4. _____
- 5. _____
- 6. _____
- 7. _____
- 8. _____
- 9. _____

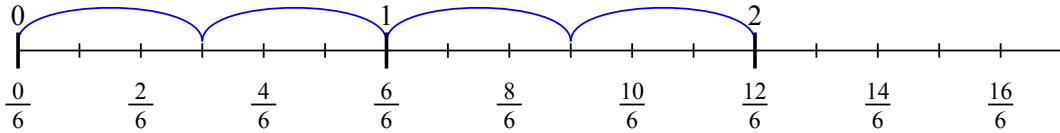


Usa la linea numerata per risolvere ogni problema. Il primo è un esempio.

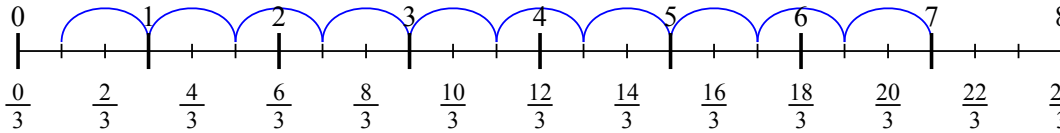
1) $5 : \frac{2}{5}$



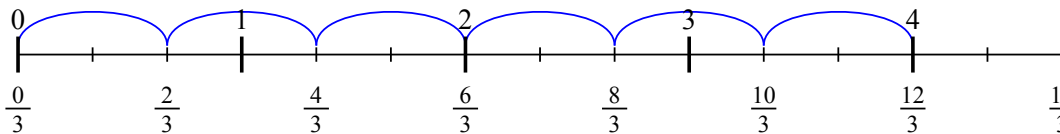
2) $2 : \frac{3}{6}$



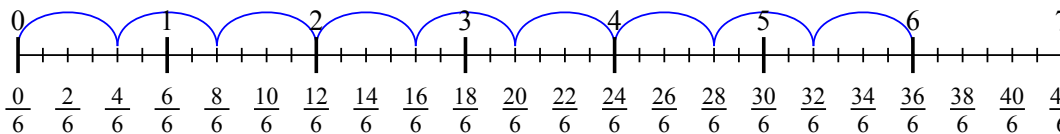
3) $7 : \frac{2}{3}$



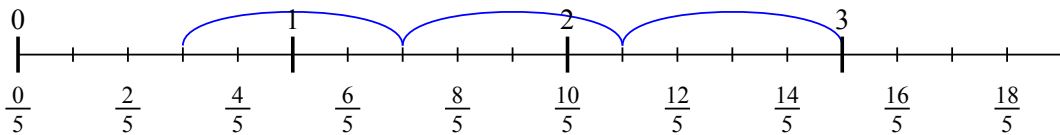
4) $4 : \frac{2}{3}$



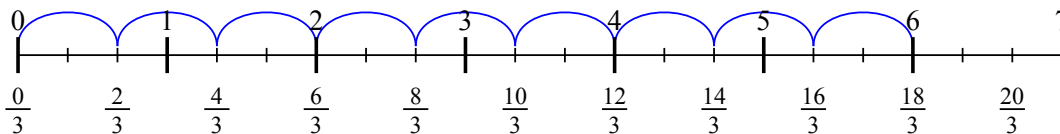
5) $6 : \frac{4}{6}$



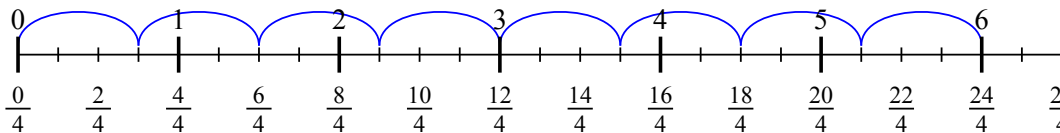
6) $3 : \frac{4}{5}$



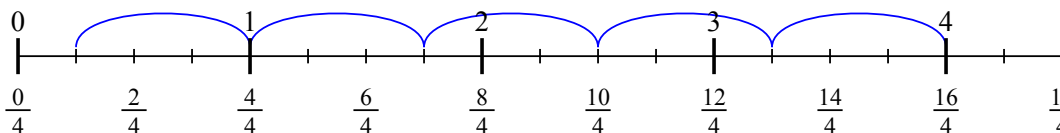
7) $6 : \frac{2}{3}$



8) $6 : \frac{3}{4}$



9) $4 : \frac{3}{4}$



Risposte

1. 12 $\frac{1}{2}$
2. 4
3. 10 $\frac{1}{2}$
4. 6
5. 9
6. 3 $\frac{3}{4}$
7. 9
8. 8
9. 5 $\frac{1}{3}$