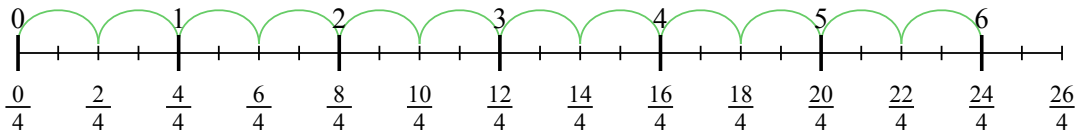




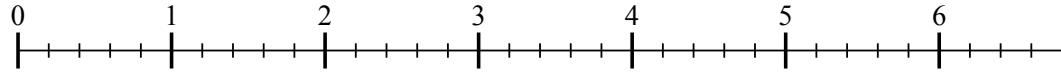
Usa la linea numerata per risolvere ogni problema. Il primo è un esempio.

Risposte

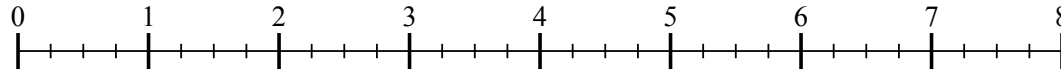
1) $6 : \frac{2}{4}$



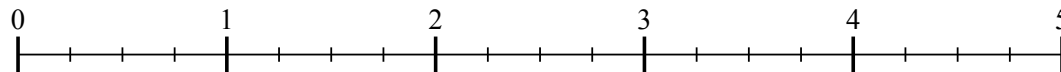
2) $6 : \frac{2}{5}$



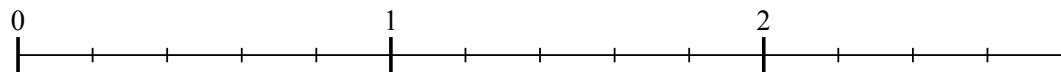
3) $7 : \frac{3}{4}$



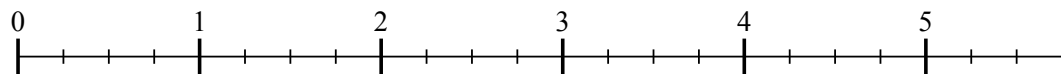
4) $4 : \frac{3}{4}$



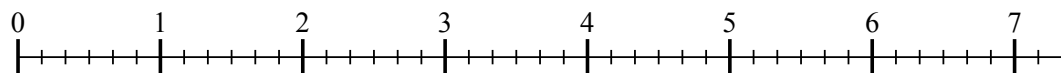
5) $2 : \frac{2}{5}$



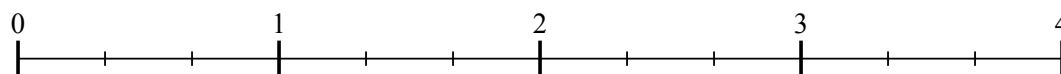
6) $5 : \frac{3}{4}$



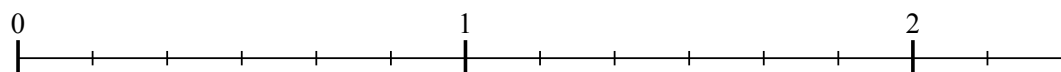
7) $7 : \frac{2}{6}$



8) $3 : \frac{2}{3}$



9) $2 : \frac{4}{6}$

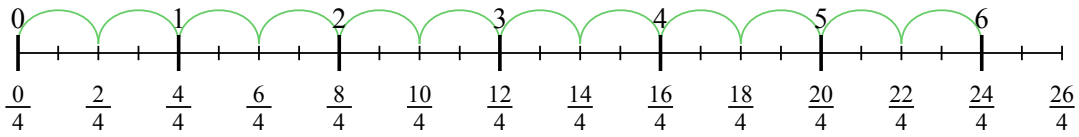


- 1. _____
- 2. _____
- 3. _____
- 4. _____
- 5. _____
- 6. _____
- 7. _____
- 8. _____
- 9. _____

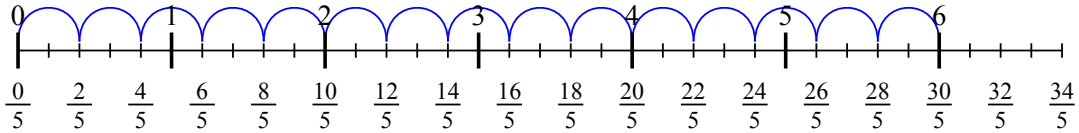


Usa la linea numerata per risolvere ogni problema. Il primo è un esempio.

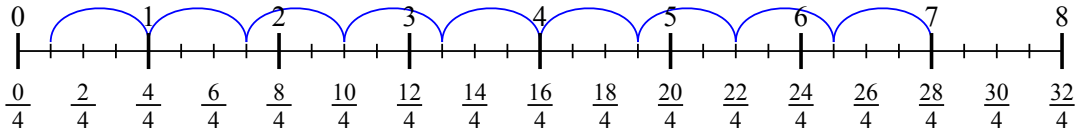
1) $6 : \frac{2}{4}$



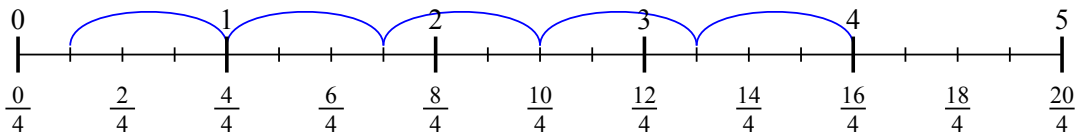
2) $6 : \frac{2}{5}$



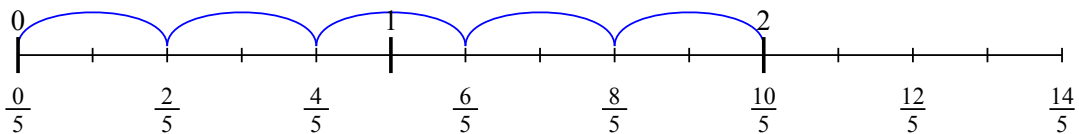
3) $7 : \frac{3}{4}$



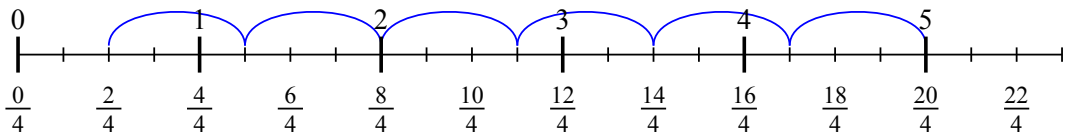
4) $4 : \frac{3}{4}$



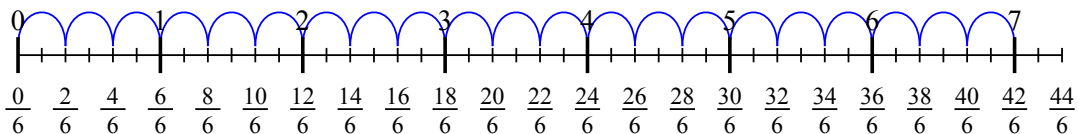
5) $2 : \frac{2}{5}$



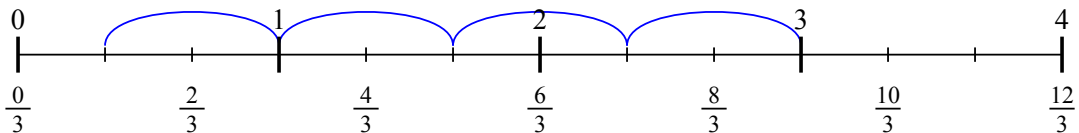
6) $5 : \frac{3}{4}$



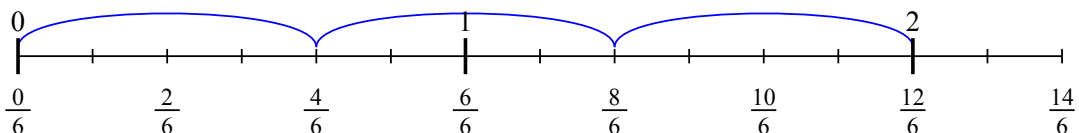
7) $7 : \frac{2}{6}$



8) $3 : \frac{2}{3}$



9) $2 : \frac{4}{6}$



Risposte

1. 12
2. 15
3. $9 \frac{1}{3}$
4. $5 \frac{1}{3}$
5. 5
6. $6 \frac{2}{3}$
7. 21
8. $4 \frac{1}{2}$
9. 3