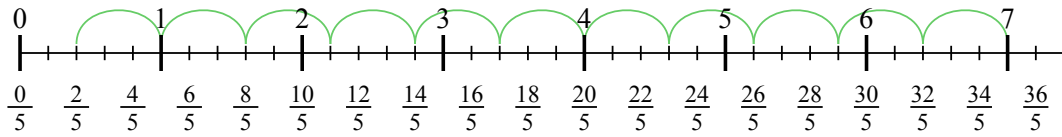


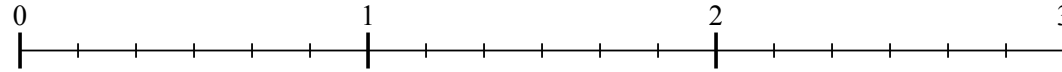


Usa la linea numerata per risolvere ogni problema. Il primo è un esempio.

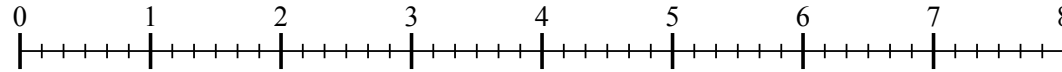
1)  $7 : \frac{3}{5}$



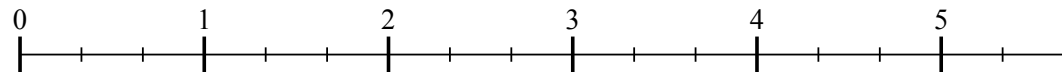
2)  $2 : \frac{5}{6}$



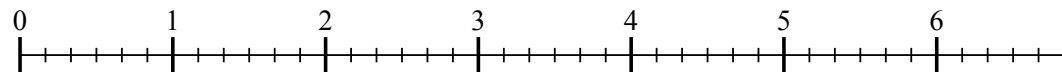
3)  $7 : \frac{4}{6}$



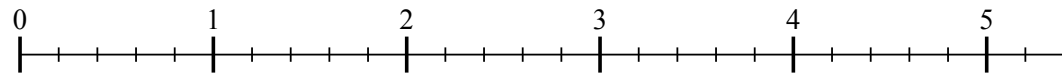
4)  $5 : \frac{2}{3}$



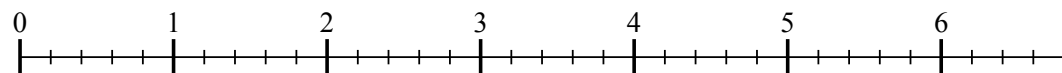
5)  $6 : \frac{3}{6}$



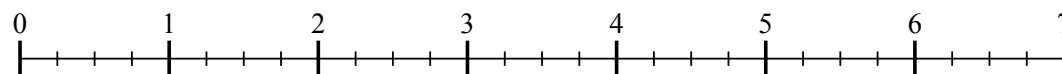
6)  $5 : \frac{2}{5}$



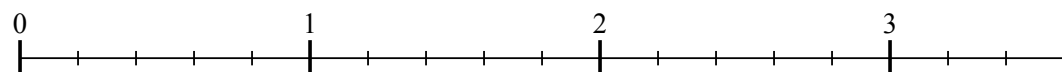
7)  $6 : \frac{4}{5}$



8)  $6 : \frac{3}{4}$



9)  $3 : \frac{2}{5}$



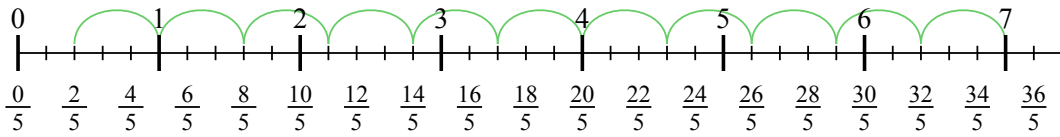
**Risposte**

- 1. \_\_\_\_\_
- 2. \_\_\_\_\_
- 3. \_\_\_\_\_
- 4. \_\_\_\_\_
- 5. \_\_\_\_\_
- 6. \_\_\_\_\_
- 7. \_\_\_\_\_
- 8. \_\_\_\_\_
- 9. \_\_\_\_\_

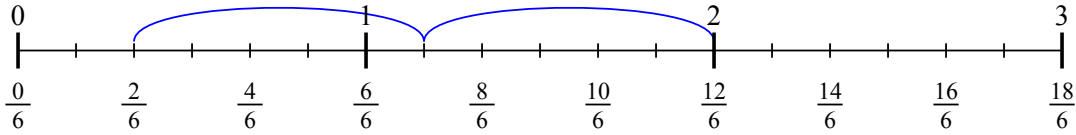


Usa la linea numerata per risolvere ogni problema. Il primo è un esempio.

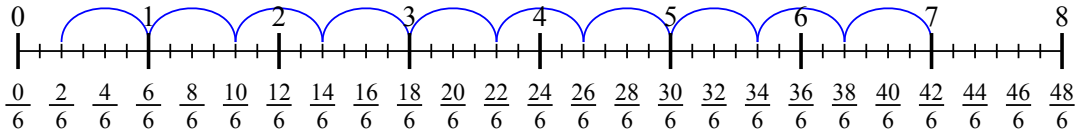
1)  $7 : \frac{3}{5}$



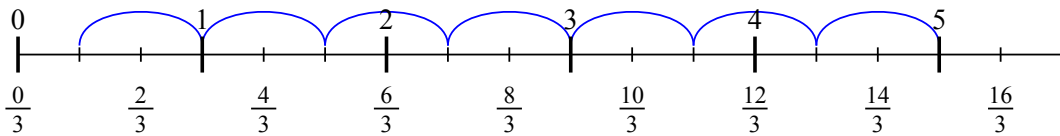
2)  $2 : \frac{5}{6}$



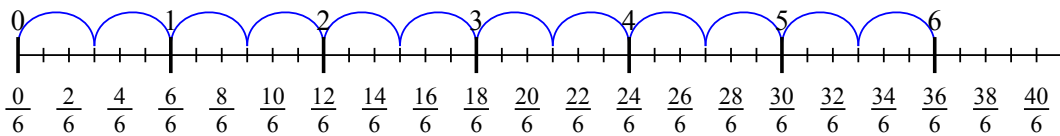
3)  $7 : \frac{4}{6}$



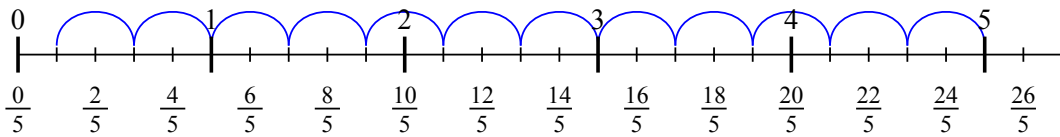
4)  $5 : \frac{2}{3}$



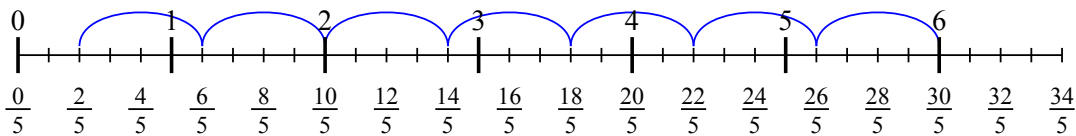
5)  $6 : \frac{3}{6}$



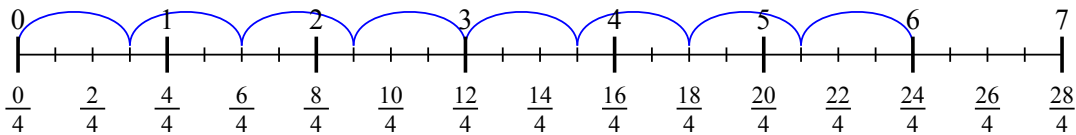
6)  $5 : \frac{2}{5}$



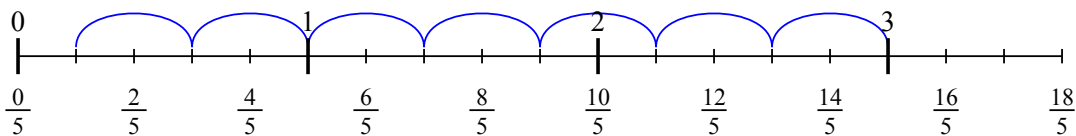
7)  $6 : \frac{4}{5}$



8)  $6 : \frac{3}{4}$



9)  $3 : \frac{2}{5}$



**Risposte**

1.  $11 \frac{2}{3}$
2.  $2 \frac{2}{5}$
3.  $10 \frac{2}{4}$
4.  $7 \frac{1}{2}$
5.  $12$
6.  $12 \frac{1}{2}$
7.  $7 \frac{2}{4}$
8.  $8$
9.  $7 \frac{1}{2}$