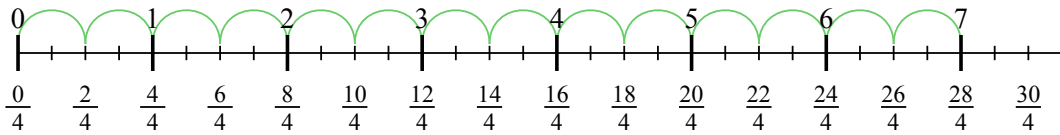




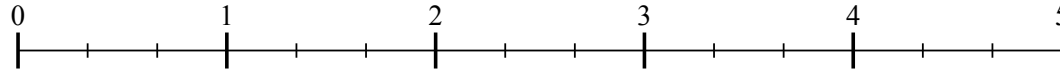
Usa la linea numerata per risolvere ogni problema. Il primo è un esempio.

Risposte

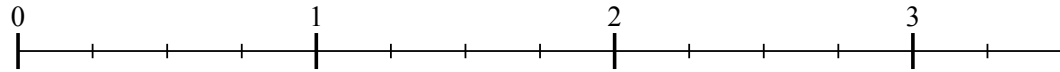
1) $7 : \frac{2}{4}$



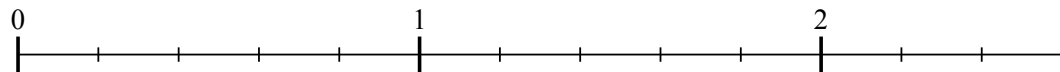
2) $4 : \frac{2}{3}$



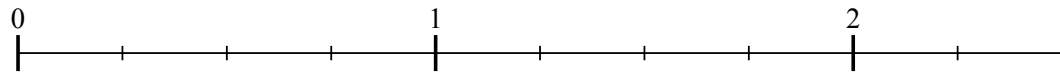
3) $3 : \frac{3}{4}$



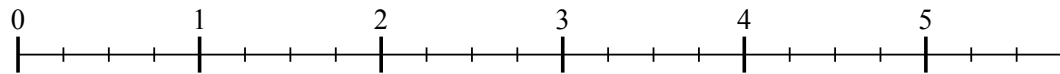
4) $2 : \frac{4}{5}$



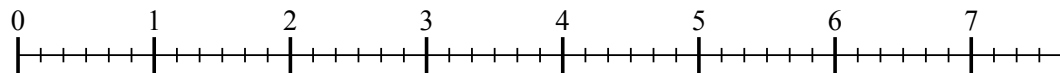
5) $2 : \frac{2}{4}$



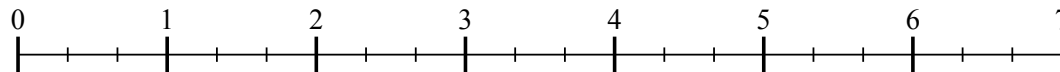
6) $5 : \frac{3}{4}$



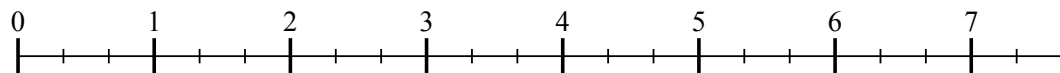
7) $7 : \frac{2}{6}$



8) $6 : \frac{2}{3}$



9) $7 : \frac{2}{3}$

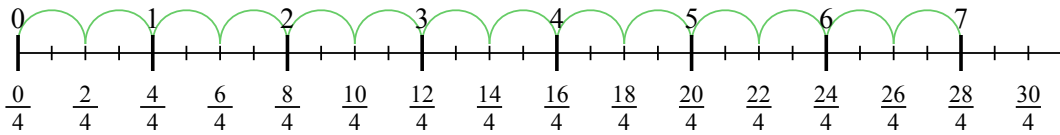


1. _____
2. _____
3. _____
4. _____
5. _____
6. _____
7. _____
8. _____
9. _____

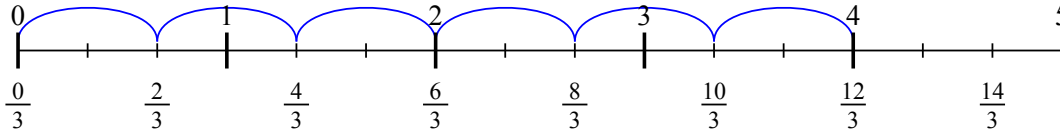


Usa la linea numerata per risolvere ogni problema. Il primo è un esempio.

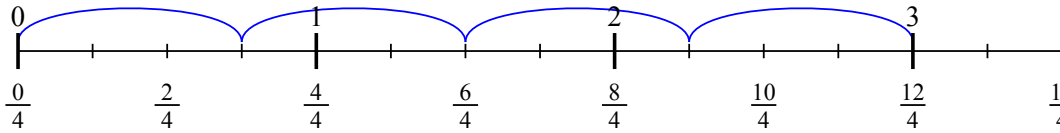
1) $7 : \frac{2}{4}$



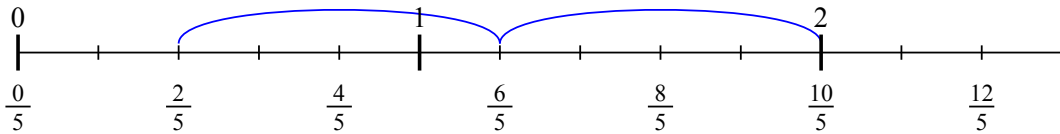
2) $4 : \frac{2}{3}$



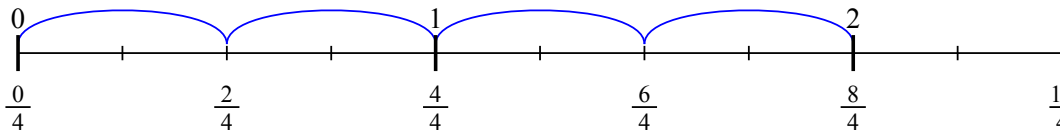
3) $3 : \frac{3}{4}$



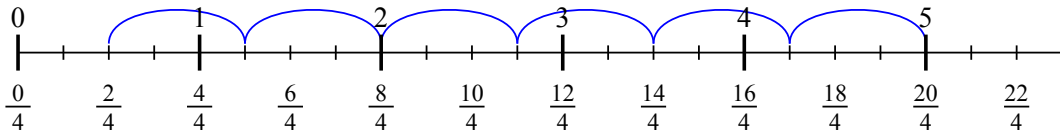
4) $2 : \frac{4}{5}$



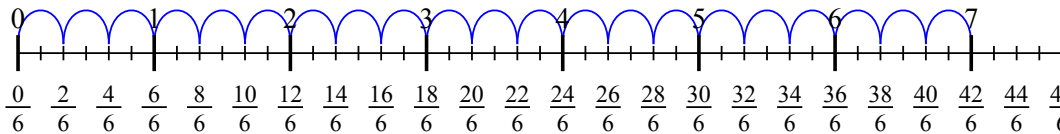
5) $2 : \frac{2}{4}$



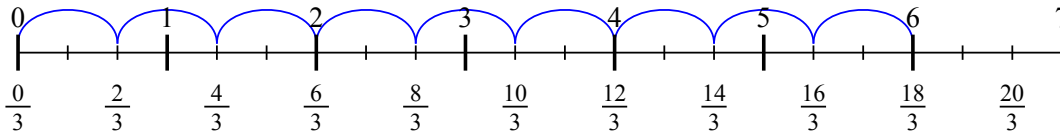
6) $5 : \frac{3}{4}$



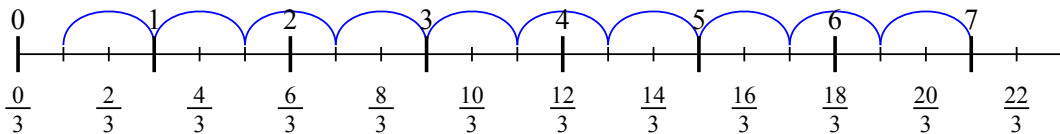
7) $7 : \frac{2}{6}$



8) $6 : \frac{2}{3}$



9) $7 : \frac{2}{3}$



Risposte

1. 14
2. 6
3. 4
4. $2 \frac{2}{4}$
5. 4
6. $6 \frac{2}{3}$
7. 21
8. 9
9. $10 \frac{1}{2}$