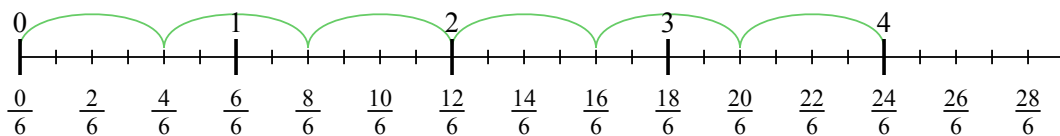




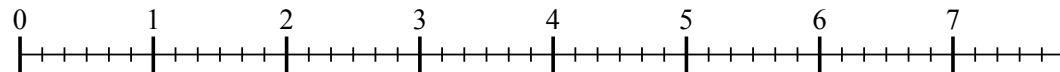
Usa la linea numerata per risolvere ogni problema. Il primo è un esempio.

Risposte

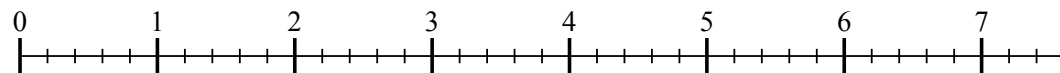
1) $4 : \frac{4}{6}$



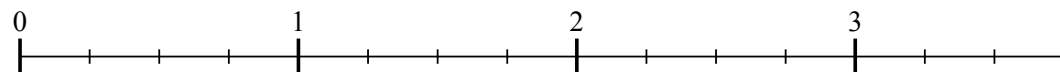
2) $7 : \frac{5}{6}$



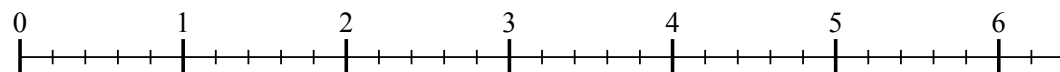
3) $7 : \frac{3}{5}$



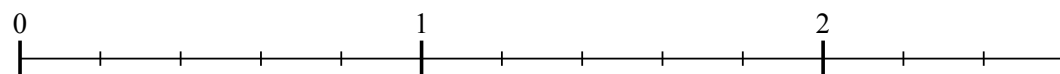
4) $3 : \frac{2}{4}$



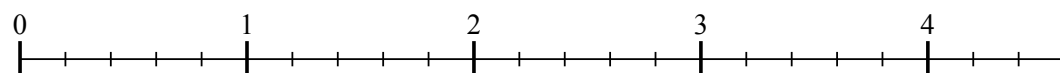
5) $6 : \frac{4}{5}$



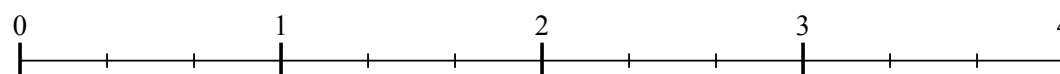
6) $2 : \frac{3}{5}$



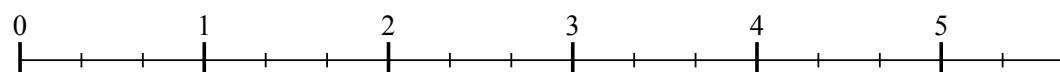
7) $4 : \frac{3}{5}$



8) $3 : \frac{2}{3}$



9) $5 : \frac{2}{3}$



1. _____

2. _____

3. _____

4. _____

5. _____

6. _____

7. _____

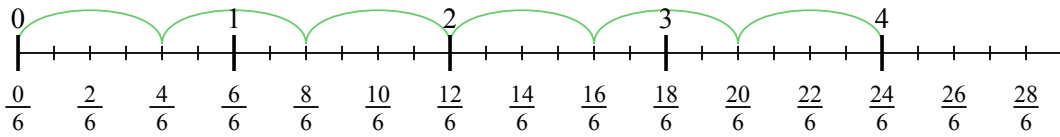
8. _____

9. _____

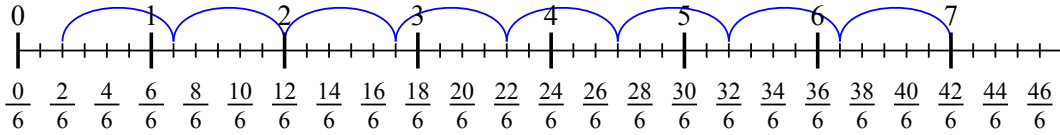


Usa la linea numerata per risolvere ogni problema. Il primo è un esempio.

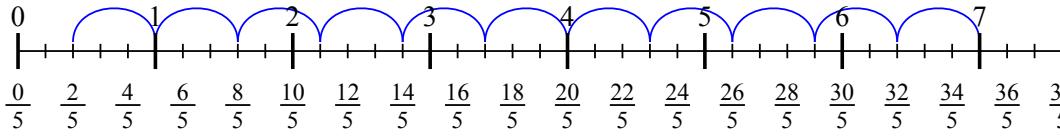
1) $4 : \frac{4}{6}$



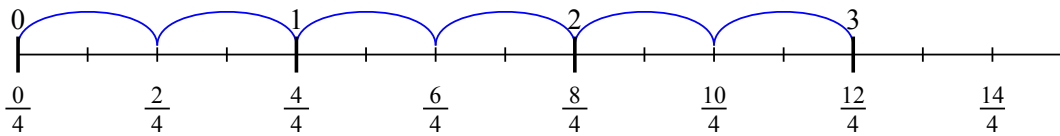
2) $7 : \frac{5}{6}$



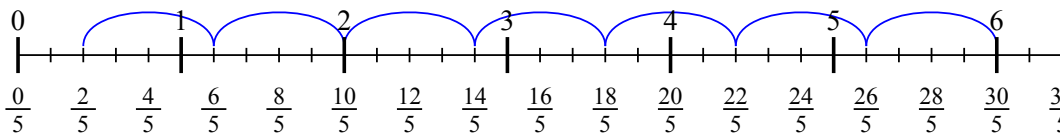
3) $7 : \frac{3}{5}$



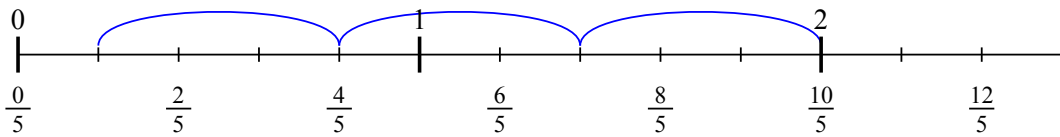
4) $3 : \frac{2}{4}$



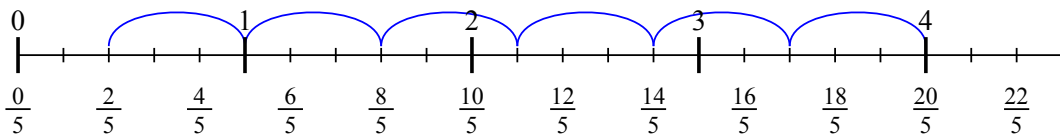
5) $6 : \frac{4}{5}$



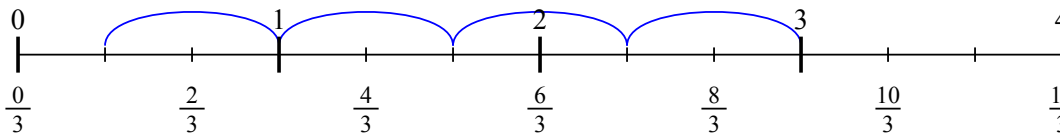
6) $2 : \frac{3}{5}$



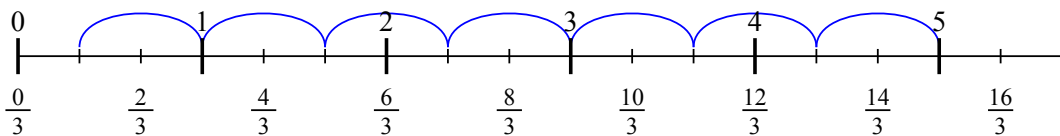
7) $4 : \frac{3}{5}$



8) $3 : \frac{2}{3}$



9) $5 : \frac{2}{3}$



Risposte

1. 6
2. $8 \frac{2}{5}$
3. $11 \frac{2}{3}$
4. 6
5. $7 \frac{2}{4}$
6. $3 \frac{1}{3}$
7. $6 \frac{2}{3}$
8. $4 \frac{1}{2}$
9. $7 \frac{1}{2}$