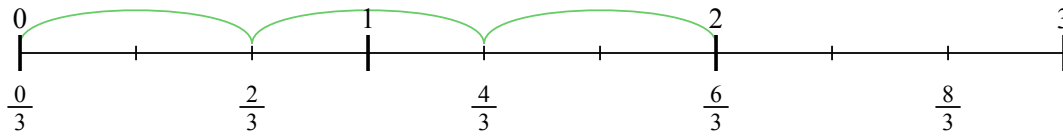


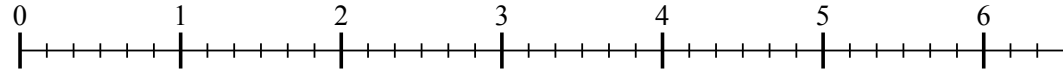


Usa la linea numerata per risolvere ogni problema. Il primo è un esempio.

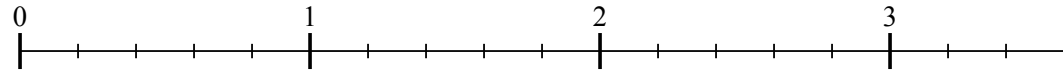
1) $2 : \frac{2}{3}$



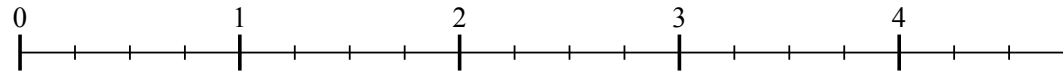
2) $6 : \frac{5}{6}$



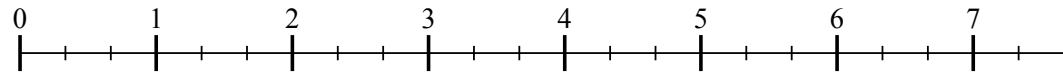
3) $3 : \frac{3}{5}$



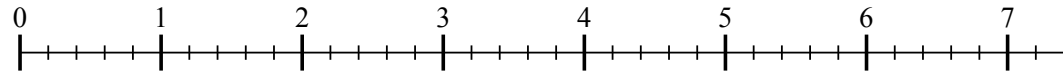
4) $4 : \frac{3}{4}$



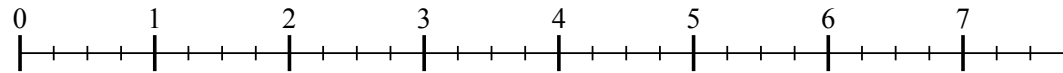
5) $7 : \frac{2}{3}$



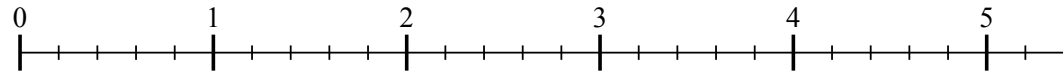
6) $7 : \frac{4}{5}$



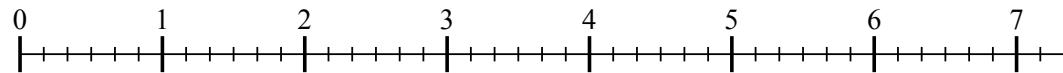
7) $7 : \frac{2}{4}$



8) $5 : \frac{2}{5}$



9) $7 : \frac{5}{6}$



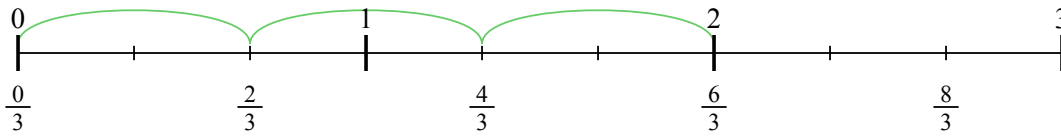
Risposte

- 1. _____
- 2. _____
- 3. _____
- 4. _____
- 5. _____
- 6. _____
- 7. _____
- 8. _____
- 9. _____

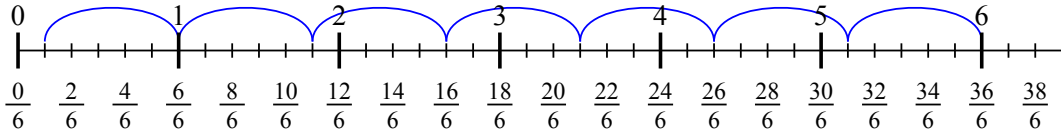


Usa la linea numerata per risolvere ogni problema. Il primo è un esempio.

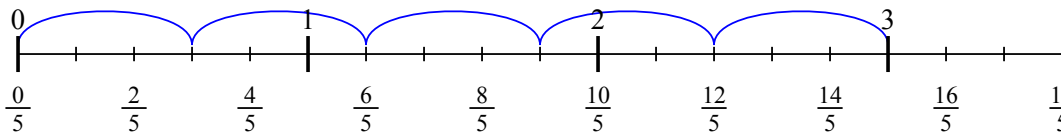
1) $2 : \frac{2}{3}$



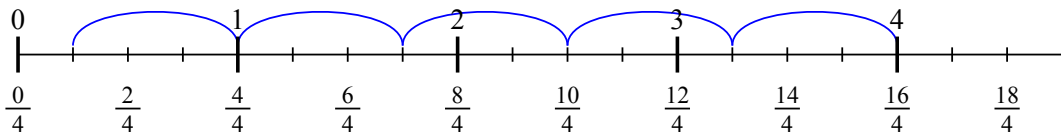
2) $6 : \frac{5}{6}$



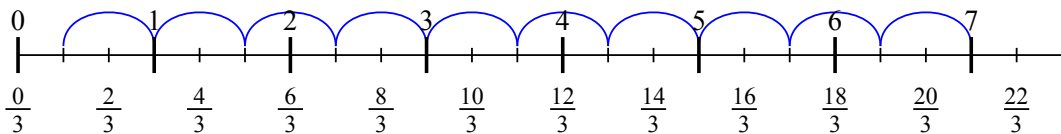
3) $3 : \frac{3}{5}$



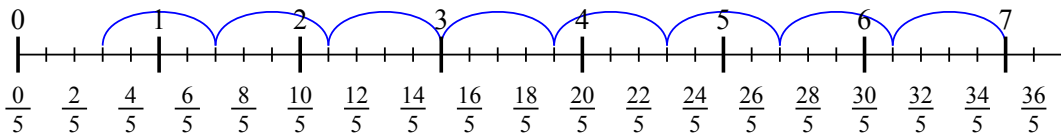
4) $4 : \frac{3}{4}$



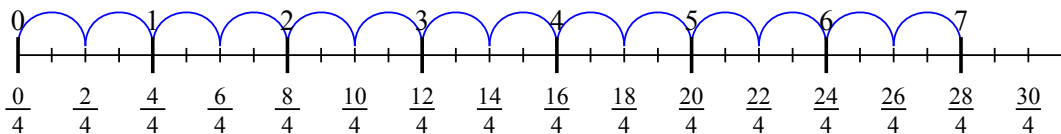
5) $7 : \frac{2}{3}$



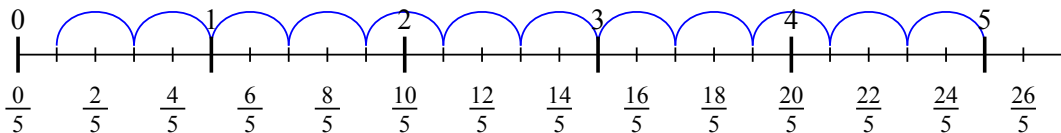
6) $7 : \frac{4}{5}$



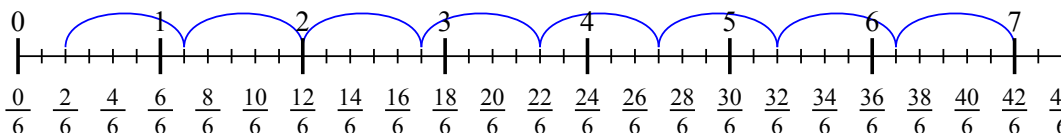
7) $7 : \frac{2}{4}$



8) $5 : \frac{2}{5}$



9) $7 : \frac{5}{6}$



Risposte

1. 3
2. $7 \frac{1}{5}$
3. 5
4. $5 \frac{1}{3}$
5. $10 \frac{1}{2}$
6. $8 \frac{3}{4}$
7. 14
8. $12 \frac{1}{2}$
9. $8 \frac{2}{5}$