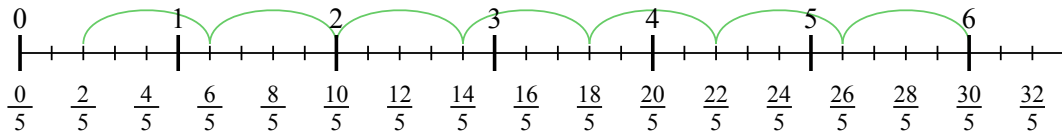


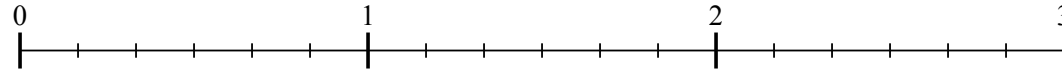


Usa la linea numerata per risolvere ogni problema. Il primo è un esempio.

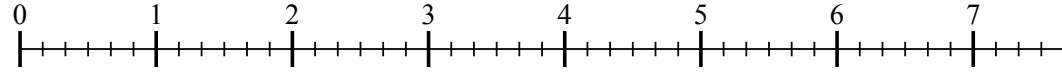
1) $6 : \frac{4}{5}$



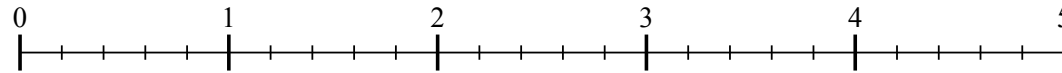
2) $2 : \frac{4}{6}$



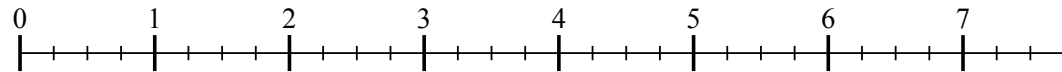
3) $7 : \frac{4}{6}$



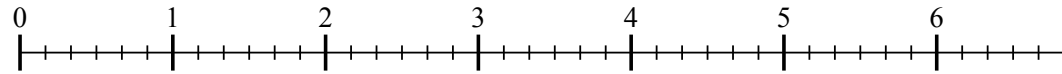
4) $4 : \frac{4}{5}$



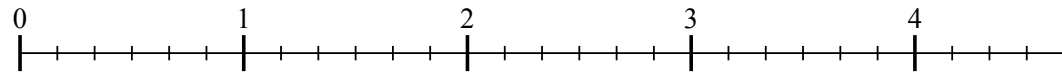
5) $7 : \frac{3}{4}$



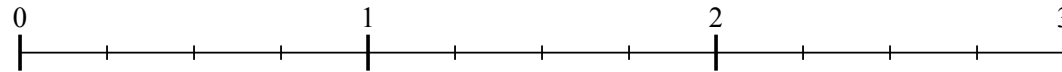
6) $6 : \frac{5}{6}$



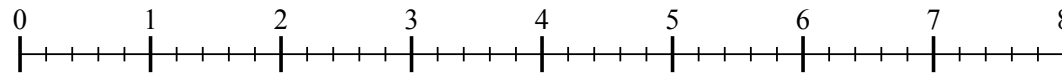
7) $4 : \frac{3}{6}$



8) $2 : \frac{2}{4}$



9) $7 : \frac{3}{5}$



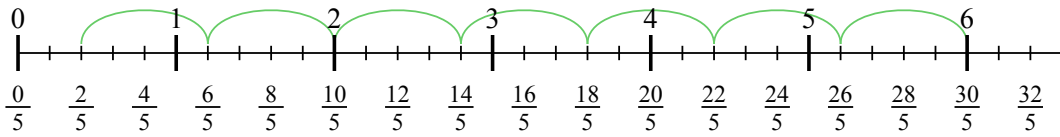
Risposte

- 1. _____
- 2. _____
- 3. _____
- 4. _____
- 5. _____
- 6. _____
- 7. _____
- 8. _____
- 9. _____

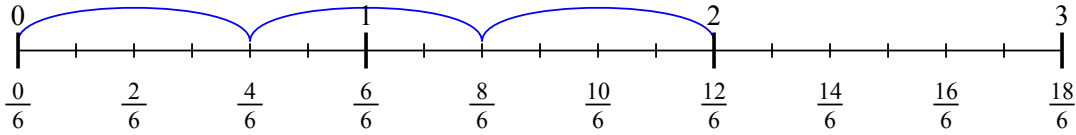


Usa la linea numerata per risolvere ogni problema. Il primo è un esempio.

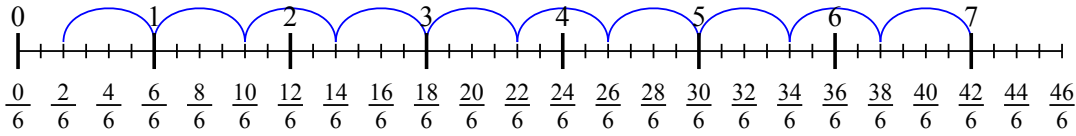
1) $6 : \frac{4}{5}$



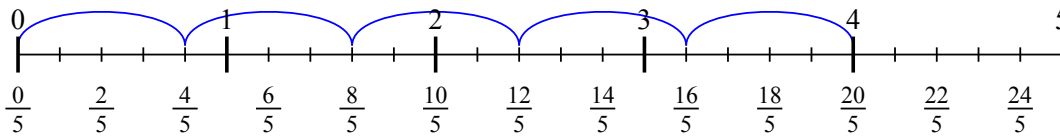
2) $2 : \frac{4}{6}$



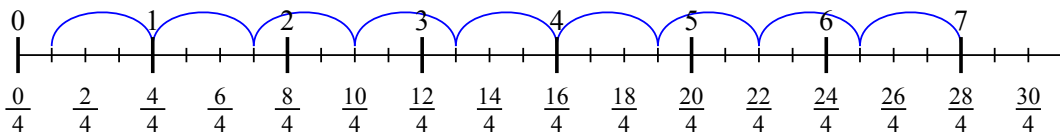
3) $7 : \frac{4}{6}$



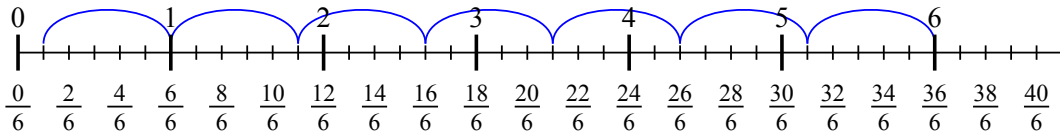
4) $4 : \frac{4}{5}$



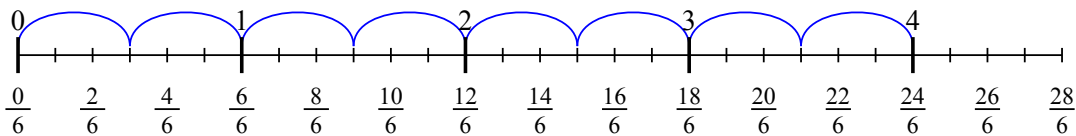
5) $7 : \frac{3}{4}$



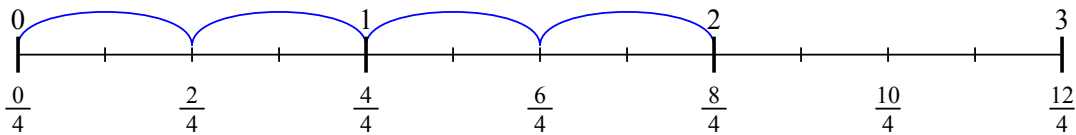
6) $6 : \frac{5}{6}$



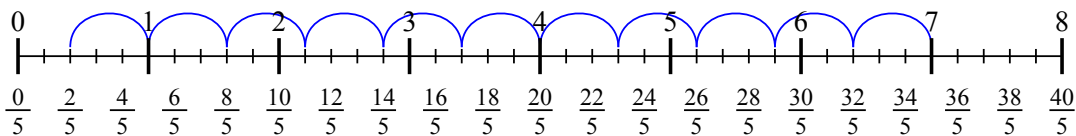
7) $4 : \frac{3}{6}$



8) $2 : \frac{2}{4}$



9) $7 : \frac{3}{5}$



Risposte

1. $7 \frac{2}{4}$
2. 3
3. $10 \frac{2}{4}$
4. 5
5. $9 \frac{1}{3}$
6. $7 \frac{1}{5}$
7. 8
8. 4
9. $11 \frac{2}{3}$